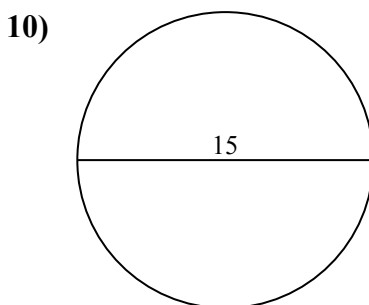
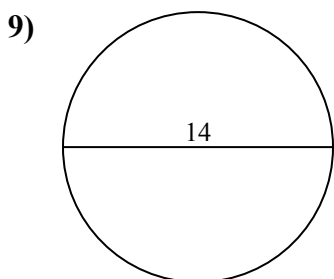
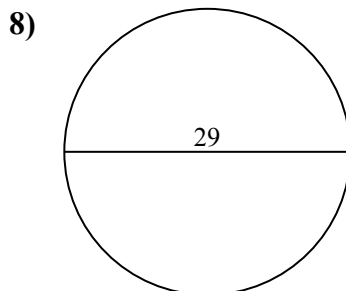
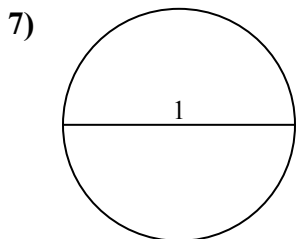
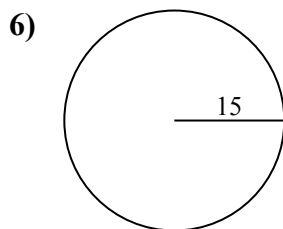
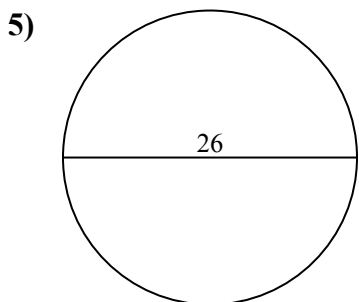
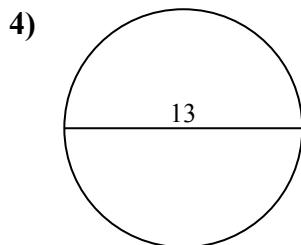
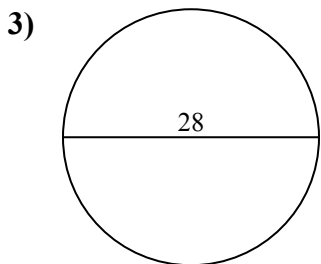
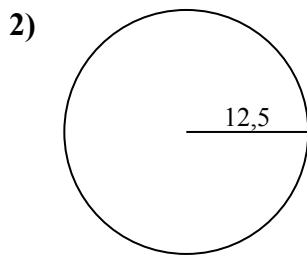
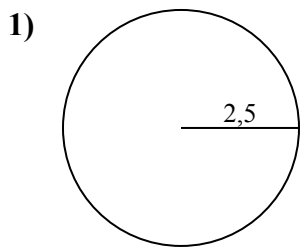




Определите окружность и площадь каждого круга. Круги не являются шкалой.

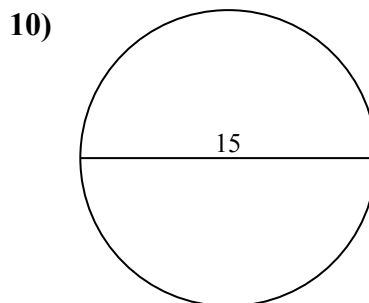
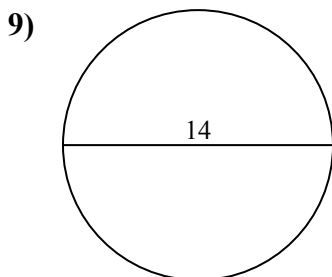
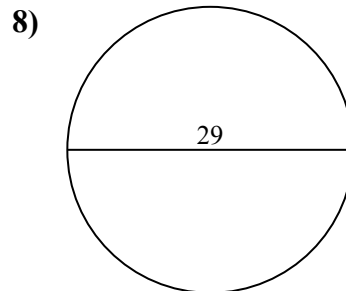
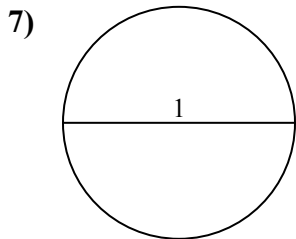
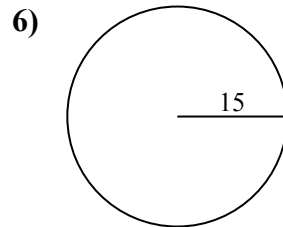
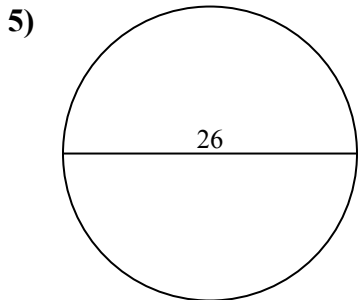
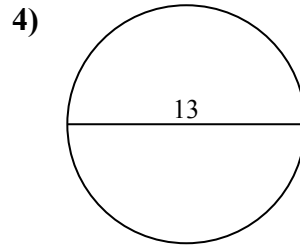
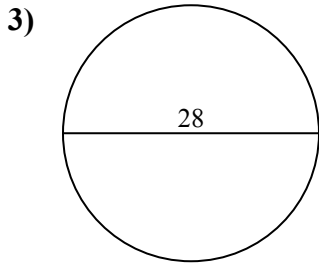
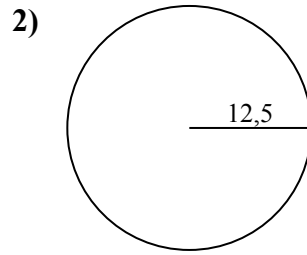
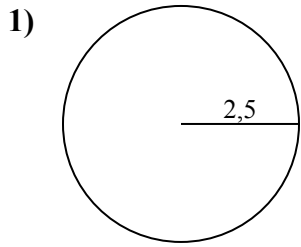


ОТВЕТЫ

- 1. \_\_\_\_\_
- 2. \_\_\_\_\_
- 3. \_\_\_\_\_
- 4. \_\_\_\_\_
- 5. \_\_\_\_\_
- 6. \_\_\_\_\_
- 7. \_\_\_\_\_
- 8. \_\_\_\_\_
- 9. \_\_\_\_\_
- 10. \_\_\_\_\_



Определите окружность и площадь каждого круга. Круги не являются шкалой.



**ОТВЕТЫ**

|     |              |             |
|-----|--------------|-------------|
| 1.  | <u>19,6</u>  | <u>15,7</u> |
| 2.  | <u>490,9</u> | <u>78,5</u> |
| 3.  | <u>615,8</u> | <u>88</u>   |
| 4.  | <u>132,7</u> | <u>40,8</u> |
| 5.  | <u>530,9</u> | <u>81,7</u> |
| 6.  | <u>706,9</u> | <u>94,2</u> |
| 7.  | <u>0,8</u>   | <u>3,1</u>  |
| 8.  | <u>660,5</u> | <u>91,1</u> |
| 9.  | <u>153,9</u> | <u>44</u>   |
| 10. | <u>176,7</u> | <u>47,1</u> |



Определите окружность и площадь каждого круга. Круги не являются шкалой.

**ОТВЕТЫ**

490,9

78,5

15,7

88

530,9

0,8

153,9

44

660,5

3,1

615,8

81,7

94,2

91,1

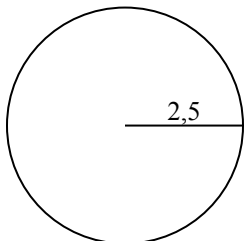
19,6

706,9

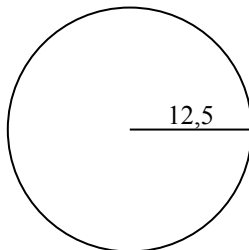
132,7

40,8

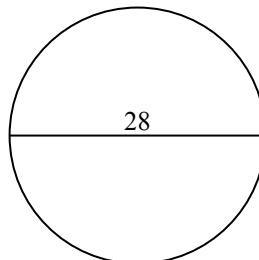
1)



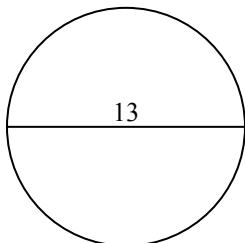
2)



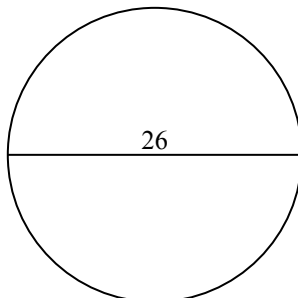
3)



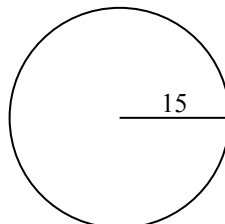
4)



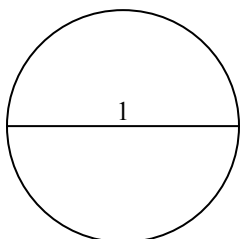
5)



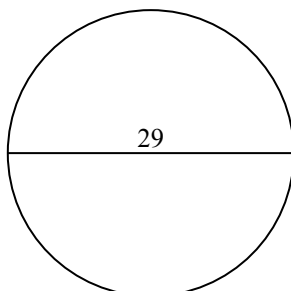
6)



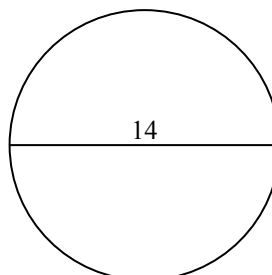
7)



8)



9)



1. \_\_\_\_\_

2. \_\_\_\_\_

3. \_\_\_\_\_

4. \_\_\_\_\_

5. \_\_\_\_\_

6. \_\_\_\_\_

7. \_\_\_\_\_

8. \_\_\_\_\_

9. \_\_\_\_\_