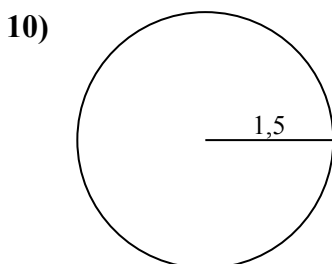
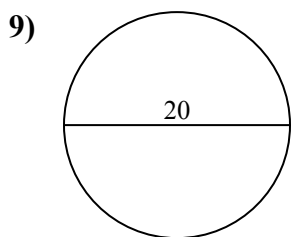
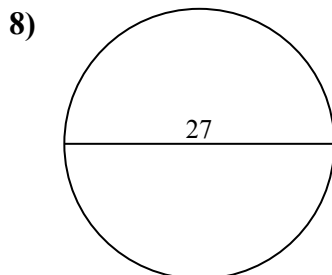
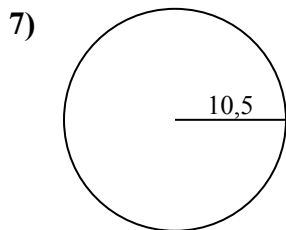
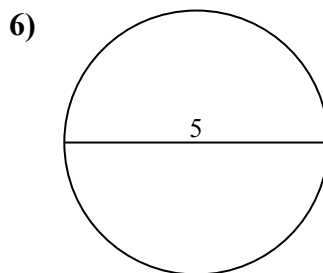
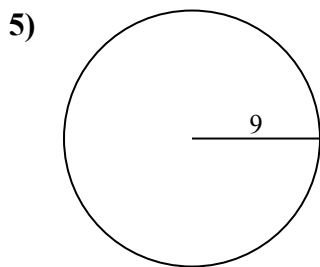
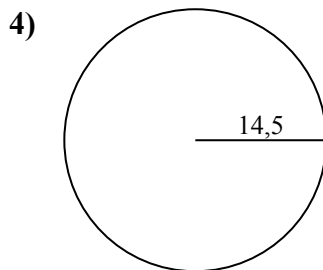
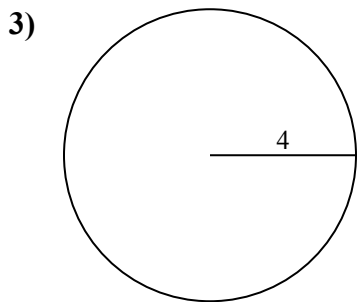
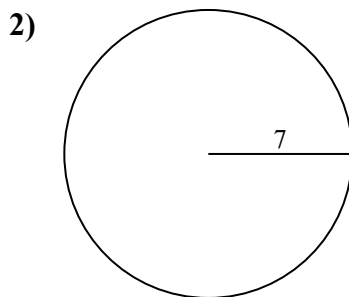
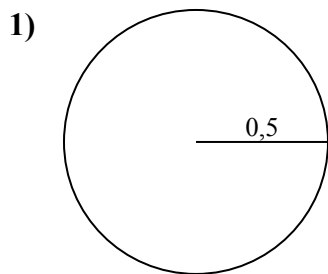




Определите окружность и площадь каждого круга. Круги не являются шкалой.

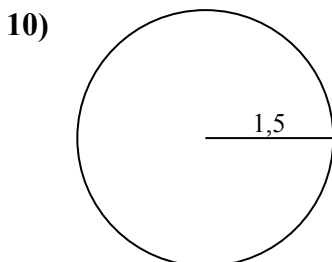
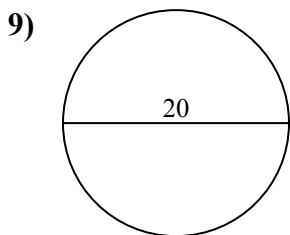
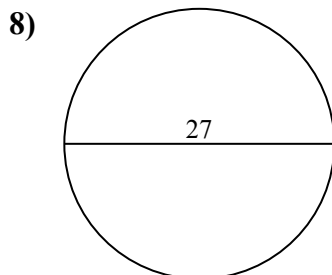
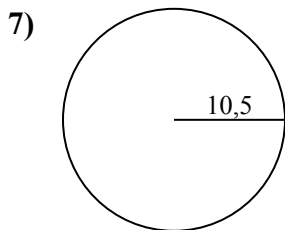
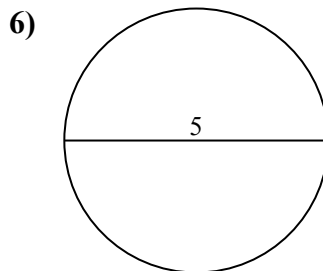
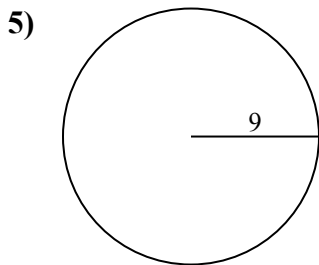
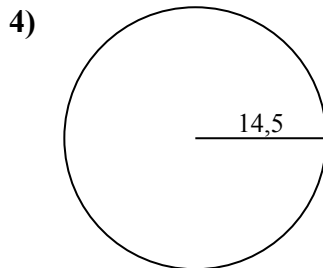
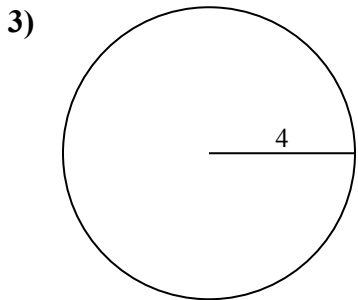
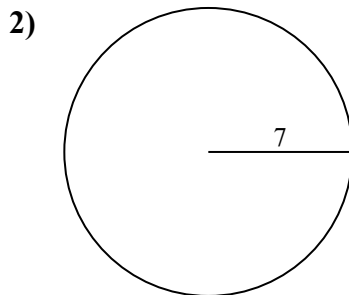
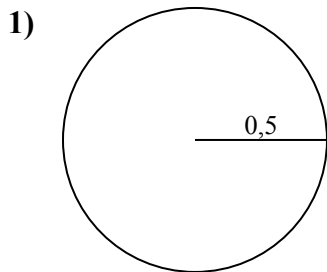


ОТВЕТЫ

- 1. _____
- 2. _____
- 3. _____
- 4. _____
- 5. _____
- 6. _____
- 7. _____
- 8. _____
- 9. _____
- 10. _____



Определите окружность и площадь каждого круга. Круги не являются шкалой.

**ОТВЕТЫ**

1.	<u>0,8</u>	<u>3,1</u>
2.	<u>153,9</u>	<u>44</u>
3.	<u>50,3</u>	<u>25,1</u>
4.	<u>660,5</u>	<u>91,1</u>
5.	<u>254,5</u>	<u>56,5</u>
6.	<u>19,6</u>	<u>15,7</u>
7.	<u>346,4</u>	<u>66</u>
8.	<u>572,6</u>	<u>84,8</u>
9.	<u>314,2</u>	<u>62,8</u>
10.	<u>7,1</u>	<u>9,4</u>



Определите окружность и площадь каждого круга. Круги не являются шкалой.

ОТВЕТЫ

572,6

314,2

56,5

62,8

19,6

44

91,1

254,5

3,1

66

84,8

50,3

15,7

153,9

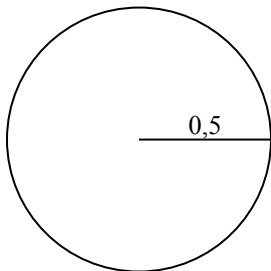
660,5

346,4

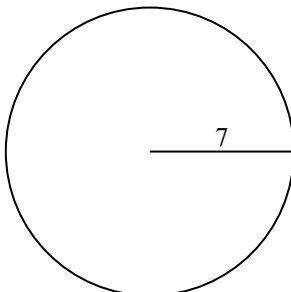
0,8

25,1

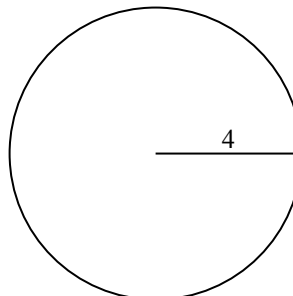
1)



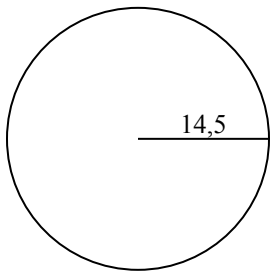
2)



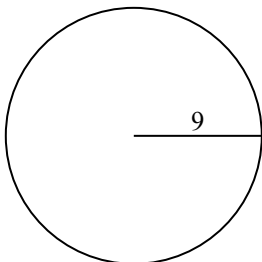
3)



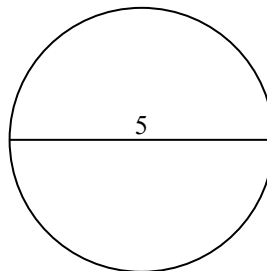
4)



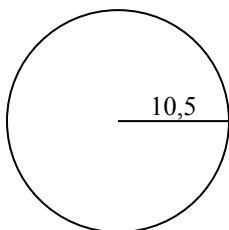
5)



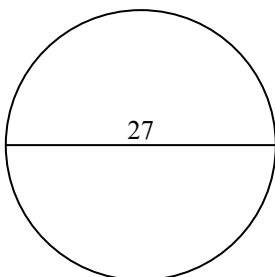
6)



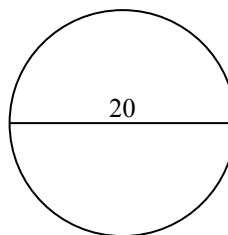
7)



8)



9)



1. _____

2. _____

3. _____

4. _____

5. _____

6. _____

7. _____

8. _____

9. _____