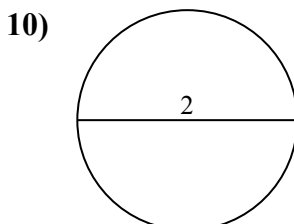
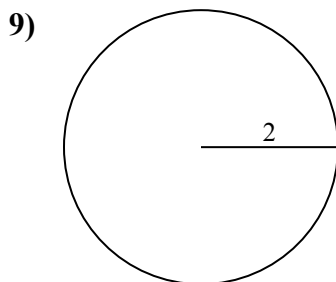
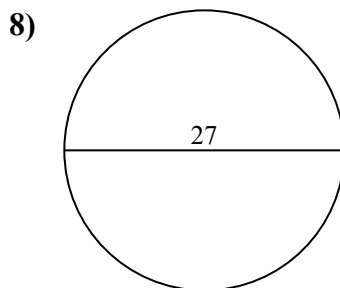
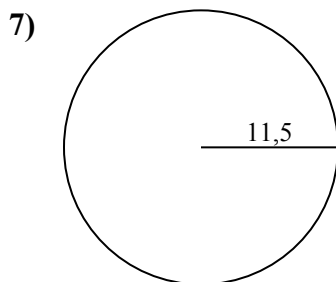
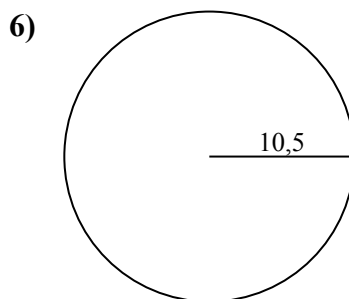
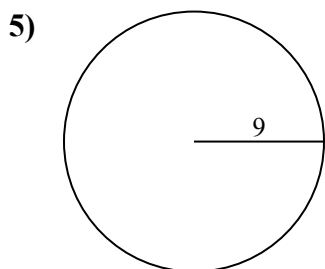
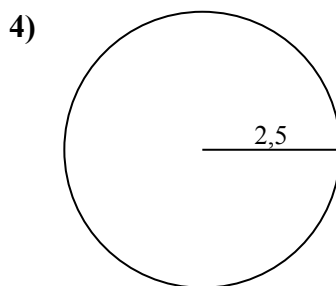
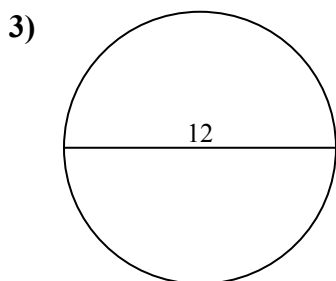
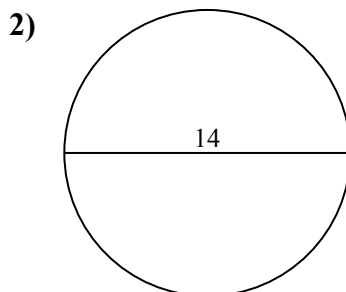
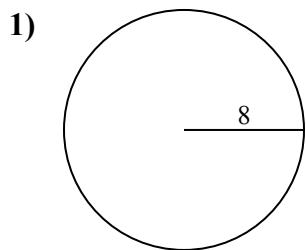




Определите площадь каждого круга. Круги не являются шкалами.

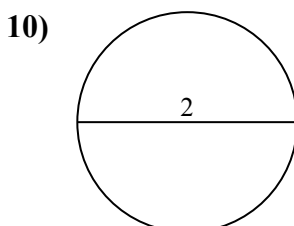
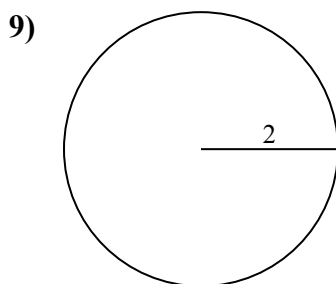
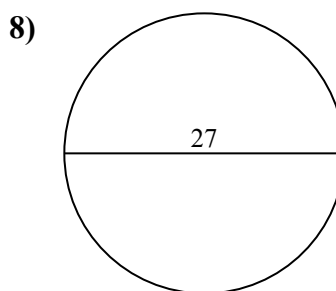
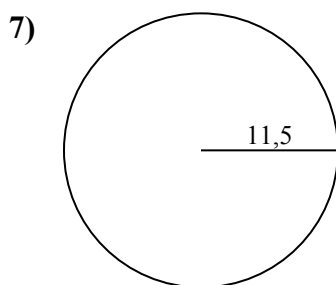
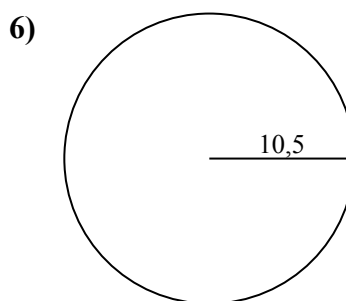
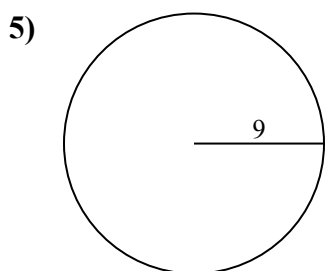
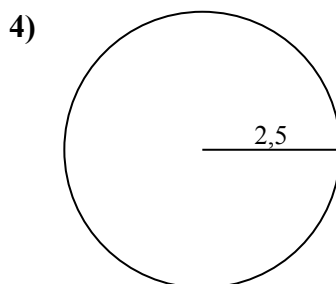
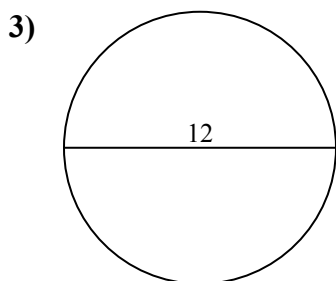
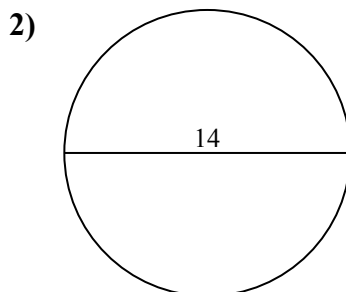
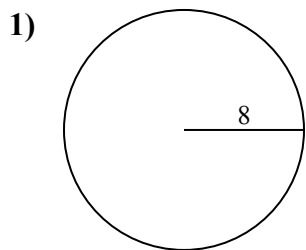
**ОТВЕТЫ**



1. \_\_\_\_\_
2. \_\_\_\_\_
3. \_\_\_\_\_
4. \_\_\_\_\_
5. \_\_\_\_\_
6. \_\_\_\_\_
7. \_\_\_\_\_
8. \_\_\_\_\_
9. \_\_\_\_\_
10. \_\_\_\_\_



Определите площадь каждого круга. Круги не являются шкалами.

ОТВЕТЫ1. 201,12. 153,93. 113,14. 19,65. 254,56. 346,47. 415,58. 572,69. 12,610. 3,1

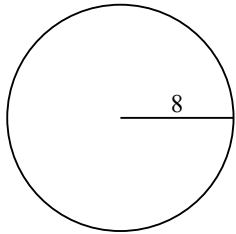


Определите площадь каждого круга. Круги не являются шкалами.

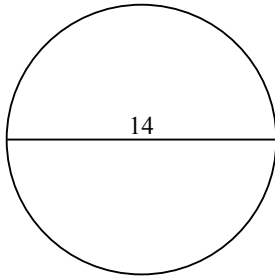
572,6	113,1	415,5	12,6	346,4
201,1	153,9	254,5	19,6	

**ОТВЕТЫ**

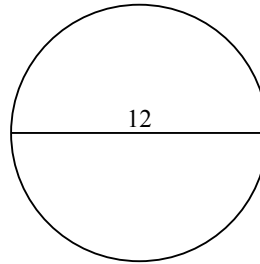
1)



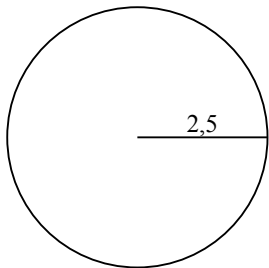
2)



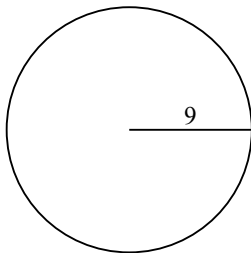
3)



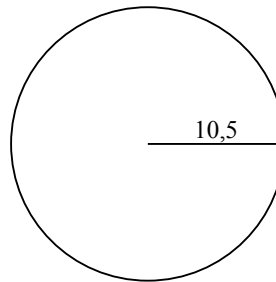
4)



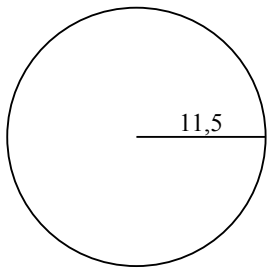
5)



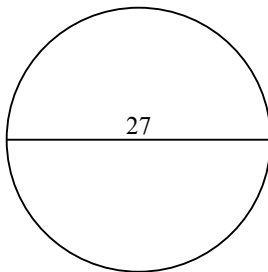
6)



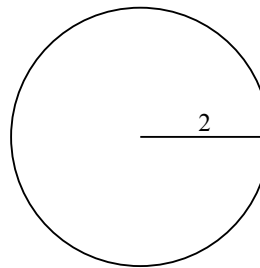
7)



8)



9)



- 1. \_\_\_\_\_
- 2. \_\_\_\_\_
- 3. \_\_\_\_\_
- 4. \_\_\_\_\_
- 5. \_\_\_\_\_
- 6. \_\_\_\_\_
- 7. \_\_\_\_\_
- 8. \_\_\_\_\_
- 9. \_\_\_\_\_