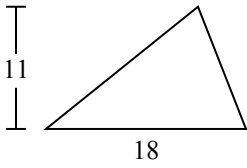




Определите площадь каждого треугольника. Единицы не являются шкалами.

ОТВЕТЫ

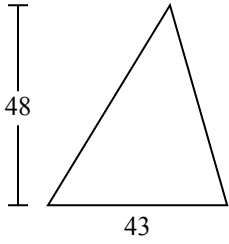
1)



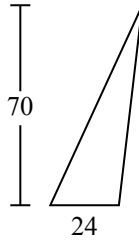
2)



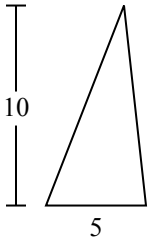
3)



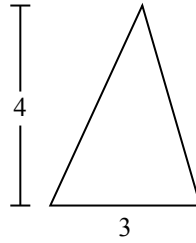
4)



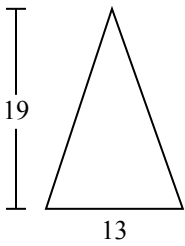
5)



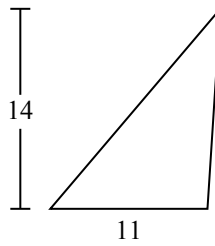
6)



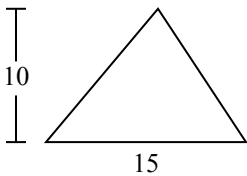
7)



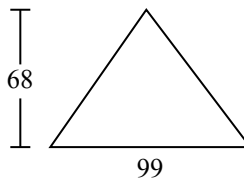
8)



9)



10)

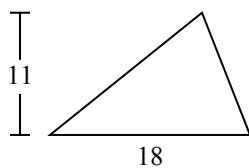


- 1. _____
- 2. _____
- 3. _____
- 4. _____
- 5. _____
- 6. _____
- 7. _____
- 8. _____
- 9. _____
- 10. _____



Определите площадь каждого треугольника. Единицы не являются шкалами.

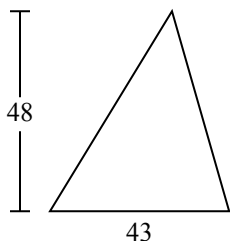
1)



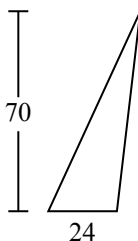
2)



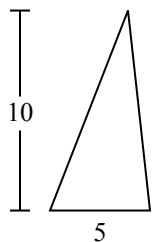
3)



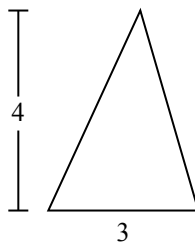
4)



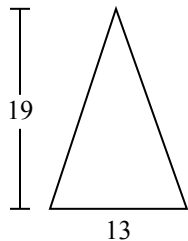
5)



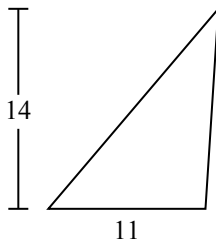
6)



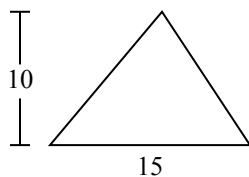
7)



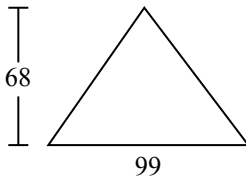
8)



9)



10)



ОТВЕТЫ

1. 99
2. 7
3. 1 032
4. 840
5. 25
6. 6
7. 123,5
8. 77
9. 75
10. 3 366



Определите площадь каждого треугольника. Единицы не являются шкалами.

77

6

99

1 032

25

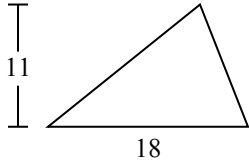
840

75

123,5

7

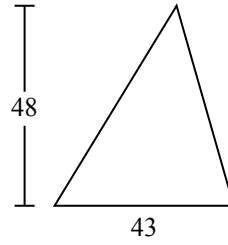
1)



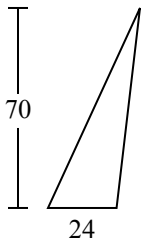
2)



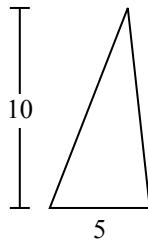
3)



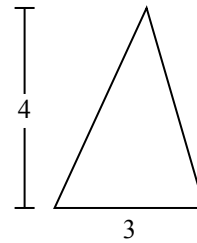
4)



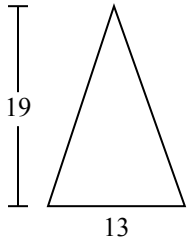
5)



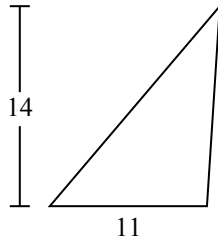
6)



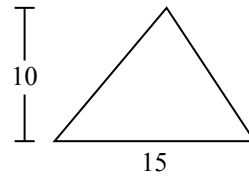
7)



8)



9)



ОТВЕТЫ

1. _____
2. _____
3. _____
4. _____
5. _____
6. _____
7. _____
8. _____
9. _____