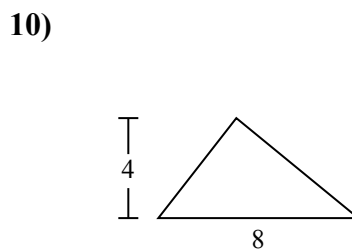
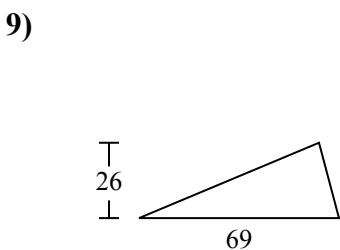
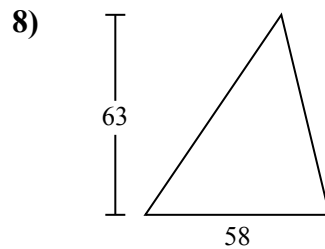
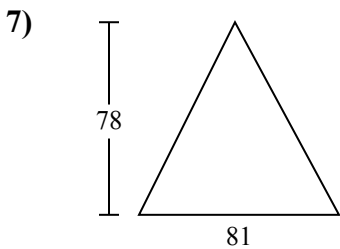
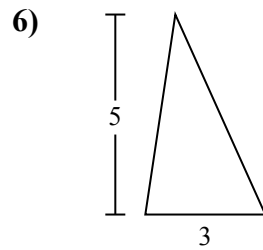
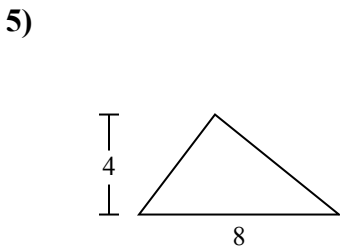
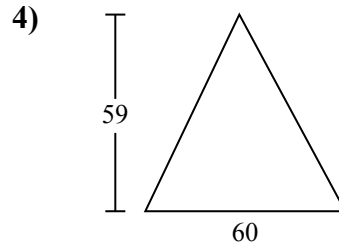
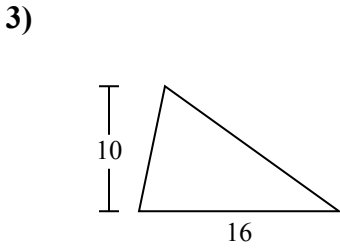
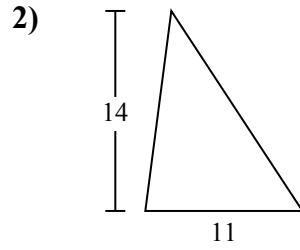
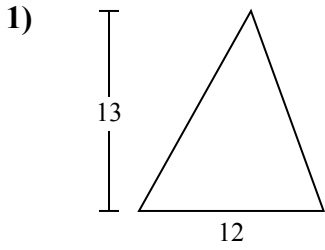




Определите площадь каждого треугольника. Единицы не являются шкалами.

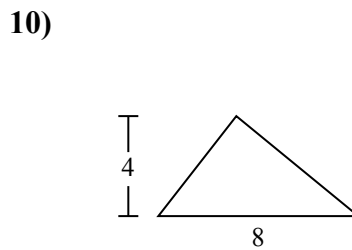
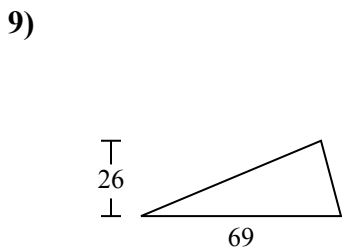
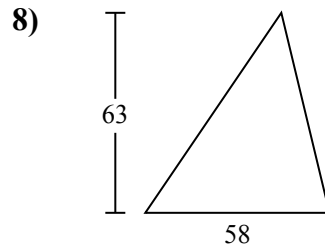
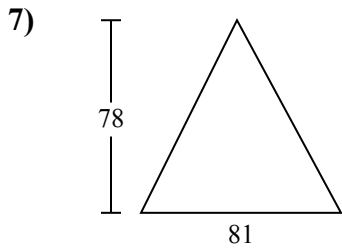
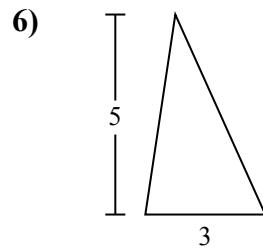
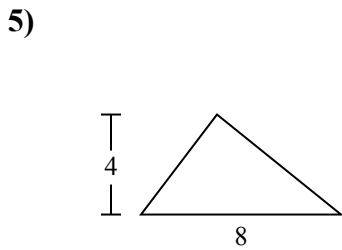
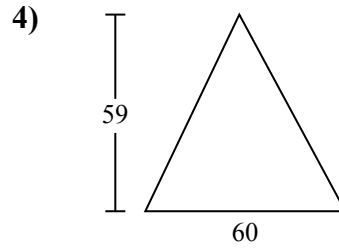
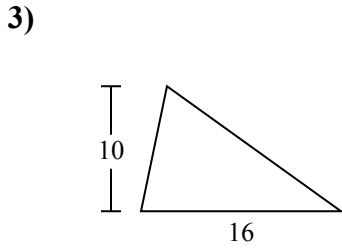
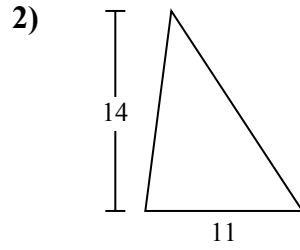
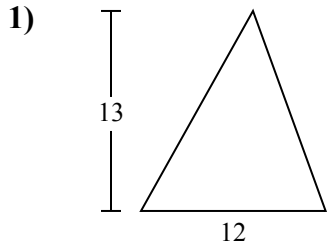
**ОТВЕТЫ**



- 1. \_\_\_\_\_
- 2. \_\_\_\_\_
- 3. \_\_\_\_\_
- 4. \_\_\_\_\_
- 5. \_\_\_\_\_
- 6. \_\_\_\_\_
- 7. \_\_\_\_\_
- 8. \_\_\_\_\_
- 9. \_\_\_\_\_
- 10. \_\_\_\_\_



Определите площадь каждого треугольника. Единицы не являются шкалами.



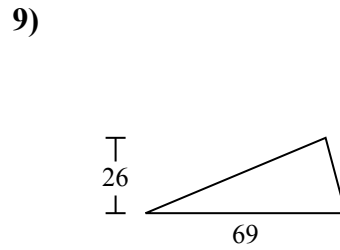
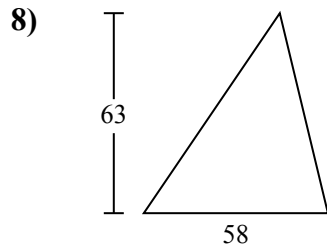
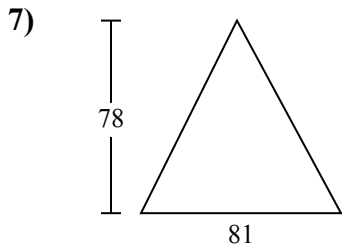
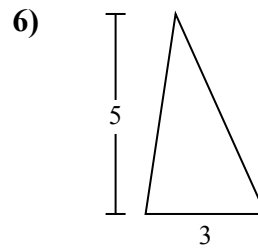
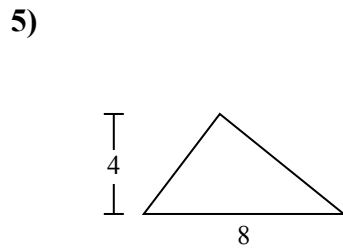
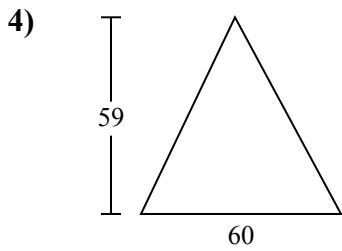
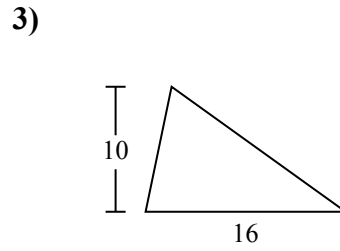
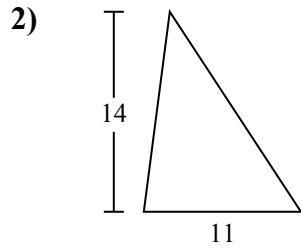
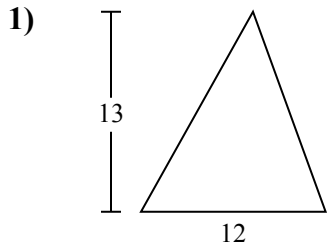
**ОТВЕТЫ**

1. 78
2. 77
3. 80
4. 1 770
5. 16
6. 7,5
7. 3 159
8. 1 827
9. 897
10. 16



Определите площадь каждого треугольника. Единицы не являются шкалами.

1 827	1 770	7,5	78	3 159
80	77	897	16	



ОТВЕТЫ

1. \_\_\_\_\_
2. \_\_\_\_\_
3. \_\_\_\_\_
4. \_\_\_\_\_
5. \_\_\_\_\_
6. \_\_\_\_\_
7. \_\_\_\_\_
8. \_\_\_\_\_
9. \_\_\_\_\_