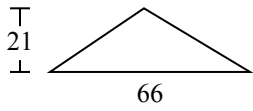




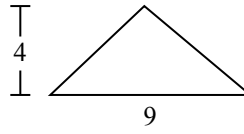
Определите площадь каждого треугольника. Единицы не являются шкалами.

ОТВЕТЫ

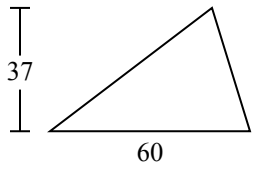
1)



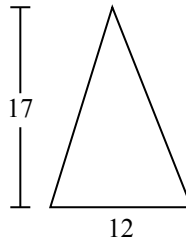
2)



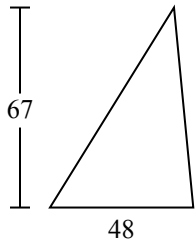
3)



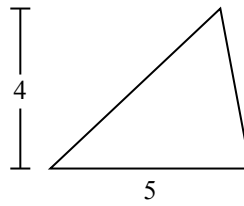
4)



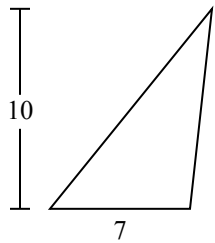
5)



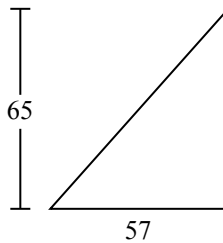
6)



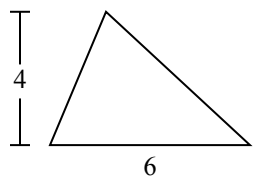
7)



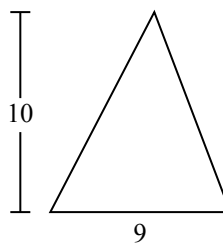
8)



9)



10)

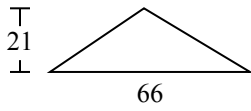


- 1. _____
- 2. _____
- 3. _____
- 4. _____
- 5. _____
- 6. _____
- 7. _____
- 8. _____
- 9. _____
- 10. _____

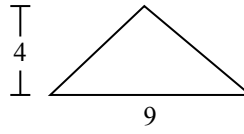


Определите площадь каждого треугольника. Единицы не являются шкалами.

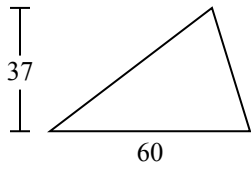
1)



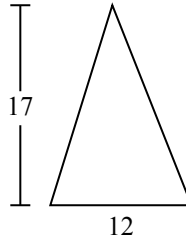
2)



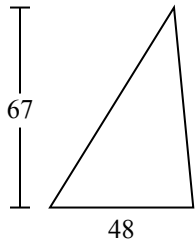
3)



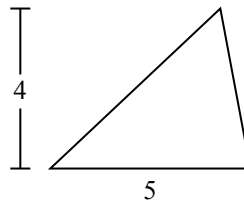
4)



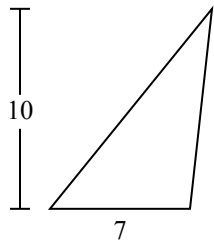
5)



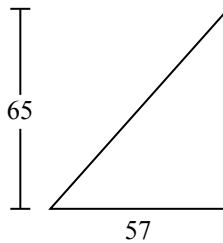
6)



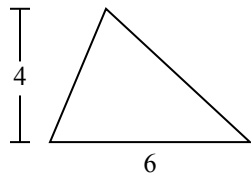
7)



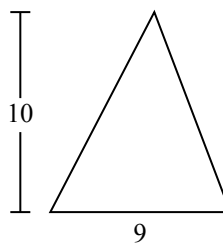
8)



9)



10)



ОТВЕТЫ

1. 693

2. 18

3. 1 110

4. 102

5. 1 608

6. 10

7. 35

8. 1 852,5

9. 12

10. 45

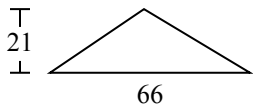


Определите площадь каждого треугольника. Единицы не являются шкалами.

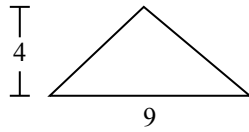
1 110	693	102	1 852,5	10
18	12	1 608	35	

ОТВЕТЫ

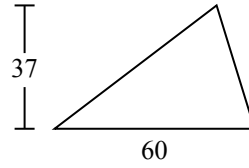
1)



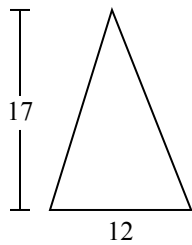
2)



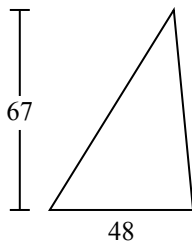
3)



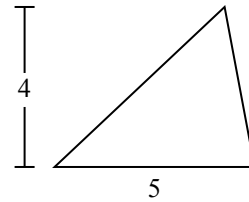
4)



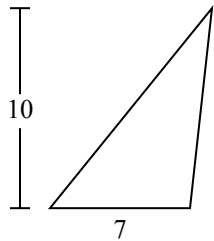
5)



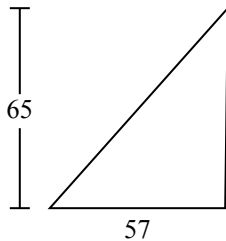
6)



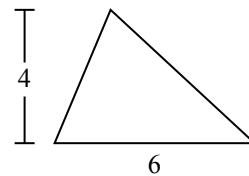
7)



8)



9)



1. _____
2. _____
3. _____
4. _____
5. _____
6. _____
7. _____
8. _____
9. _____