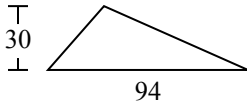




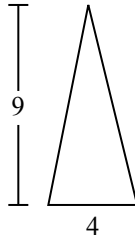
Определите площадь каждого треугольника. Единицы не являются шкалами.

**ОТВЕТЫ**

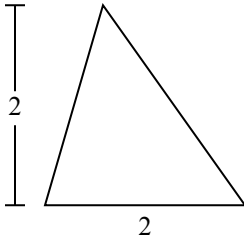
1)



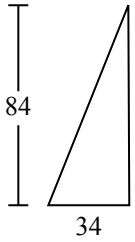
2)



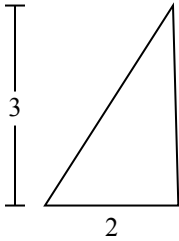
3)



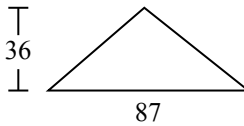
4)



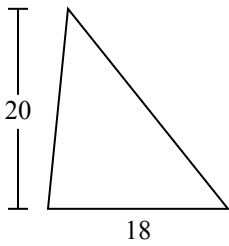
5)



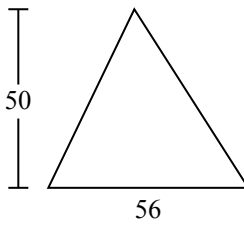
6)



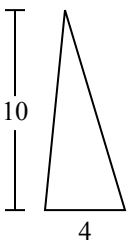
7)



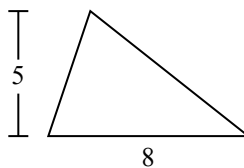
8)



9)



10)

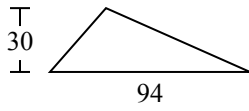


- 1. \_\_\_\_\_
- 2. \_\_\_\_\_
- 3. \_\_\_\_\_
- 4. \_\_\_\_\_
- 5. \_\_\_\_\_
- 6. \_\_\_\_\_
- 7. \_\_\_\_\_
- 8. \_\_\_\_\_
- 9. \_\_\_\_\_
- 10. \_\_\_\_\_

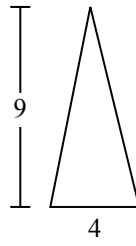


Определите площадь каждого треугольника. Единицы не являются шкалами.

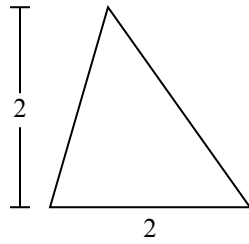
1)



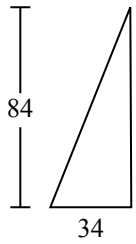
2)



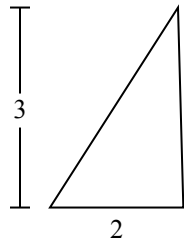
3)



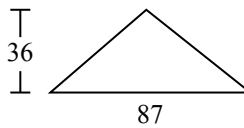
4)



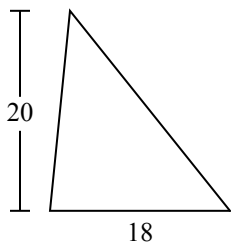
5)



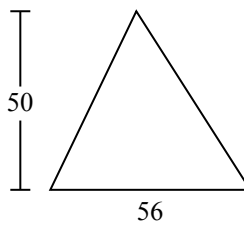
6)



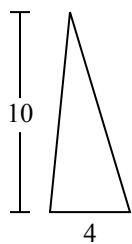
7)



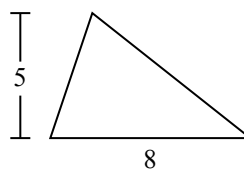
8)



9)



10)



**ОТВЕТЫ**

- 1. 1 410
- 2. 18
- 3. 2
- 4. 1 428
- 5. 3
- 6. 1 566
- 7. 180
- 8. 1 400
- 9. 20
- 10. 20



Определите площадь каждого треугольника. Единицы не являются шкалами.

180  
3

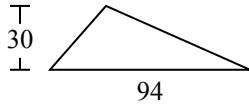
1 428  
2

18  
20

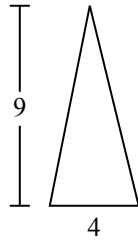
1 566  
1 410

1 400

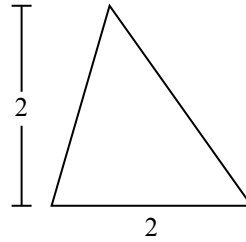
1)



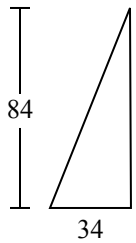
2)



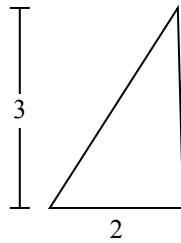
3)



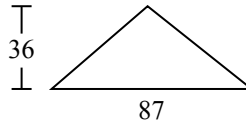
4)



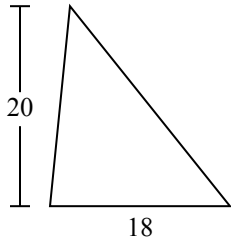
5)



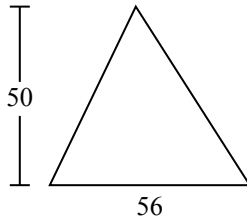
6)



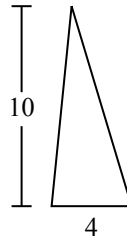
7)



8)



9)



ОТВЕТЫ

1. \_\_\_\_\_
2. \_\_\_\_\_
3. \_\_\_\_\_
4. \_\_\_\_\_
5. \_\_\_\_\_
6. \_\_\_\_\_
7. \_\_\_\_\_
8. \_\_\_\_\_
9. \_\_\_\_\_