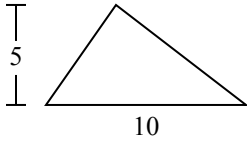




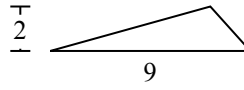
Определите площадь каждого треугольника. Единицы не являются шкалами.

ОТВЕТЫ

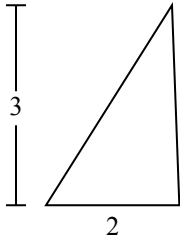
1)



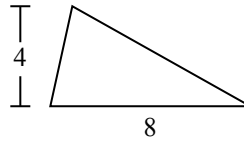
2)



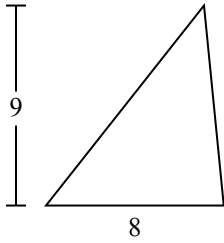
3)



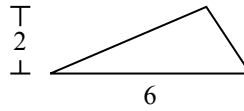
4)



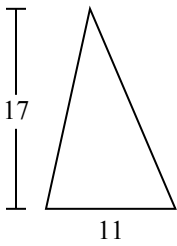
5)



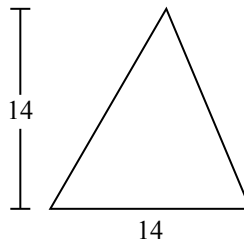
6)



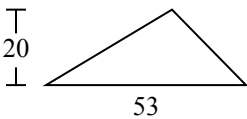
7)



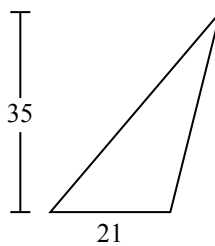
8)



9)



10)

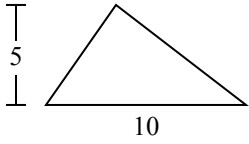


1. _____
2. _____
3. _____
4. _____
5. _____
6. _____
7. _____
8. _____
9. _____
10. _____

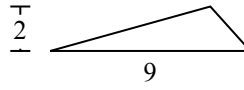


Определите площадь каждого треугольника. Единицы не являются шкалами.

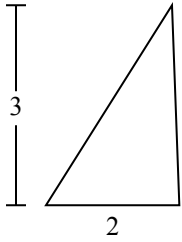
1)



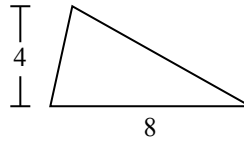
2)



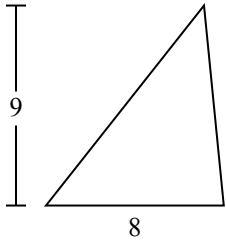
3)



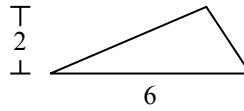
4)



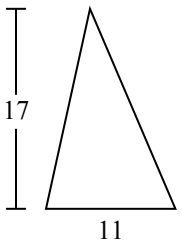
5)



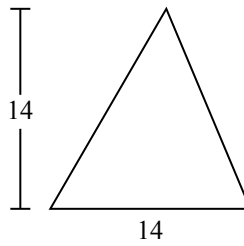
6)



7)



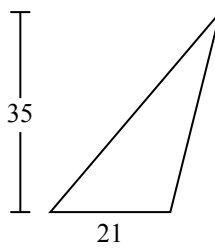
8)



9)



10)



ОТВЕТЫ

1. 25
2. 9
3. 3
4. 16
5. 36
6. 6
7. 93,5
8. 98
9. 530
10. 367,5

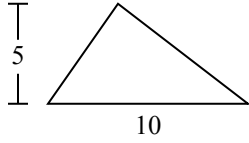


Определите площадь каждого треугольника. Единицы не являются шкалами.

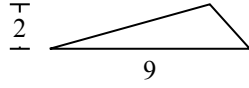
93,5	98	530	25	9
6	36	16	3	

ОТВЕТЫ

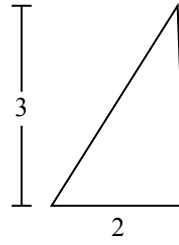
1)



2)



3)



1. _____

2. _____

3. _____

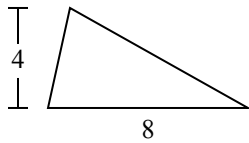
4. _____

5. _____

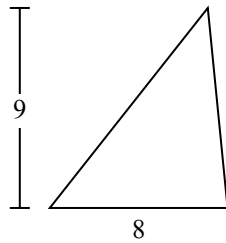
6. _____

7. _____

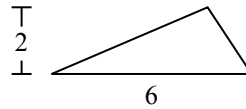
4)



5)



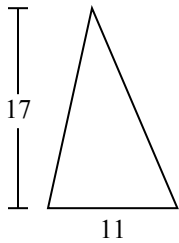
6)



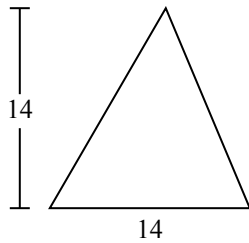
8. _____

9. _____

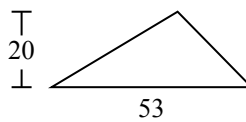
7)



8)



9)

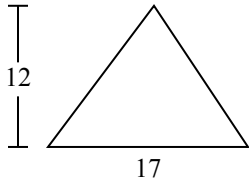




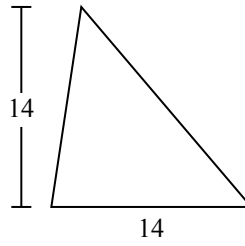
Определите площадь каждого треугольника. Единицы не являются шкалами.

ОТВЕТЫ

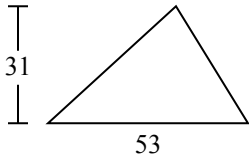
1)



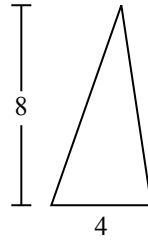
2)



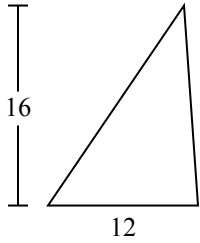
3)



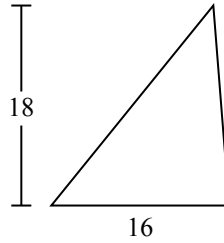
4)



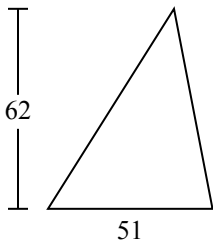
5)



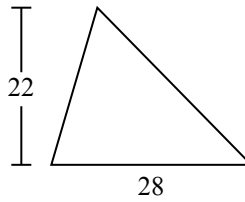
6)



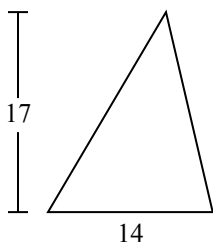
7)



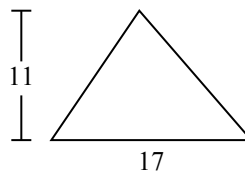
8)



9)



10)

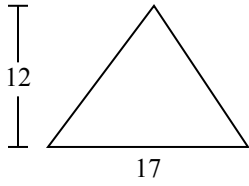


- 1. _____
- 2. _____
- 3. _____
- 4. _____
- 5. _____
- 6. _____
- 7. _____
- 8. _____
- 9. _____
- 10. _____

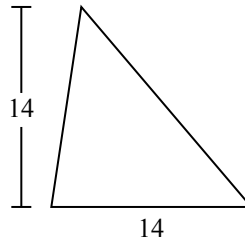


Определите площадь каждого треугольника. Единицы не являются шкалами.

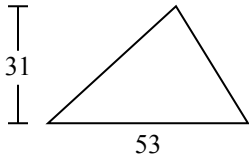
1)



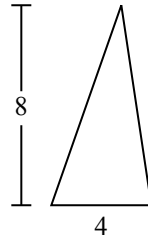
2)



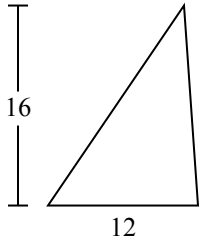
3)



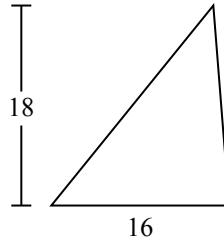
4)



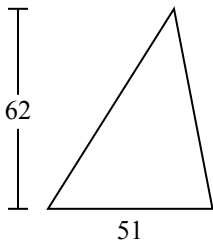
5)



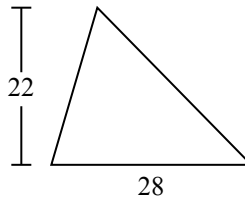
6)



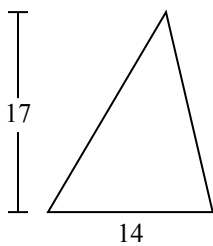
7)



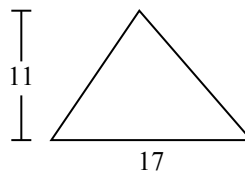
8)



9)



10)



ОТВЕТЫ

1. 102

2. 98

3. 821,5

4. 16

5. 96

6. 144

7. 1 581

8. 308

9. 119

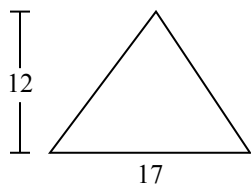
10. 93,5



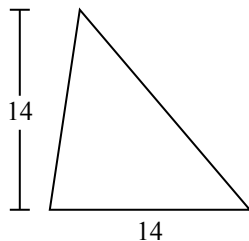
Определите площадь каждого треугольника. Единицы не являются шкалами.

102	1 581	308	144	16
119	821,5	98	96	

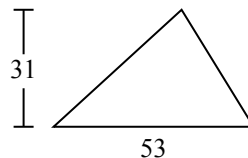
1)



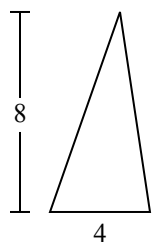
2)



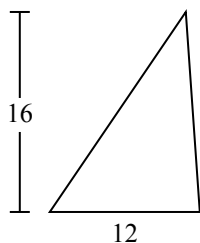
3)



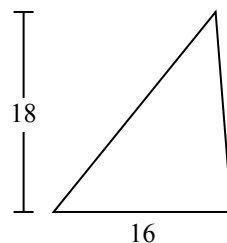
4)



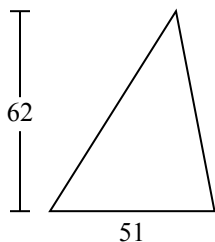
5)



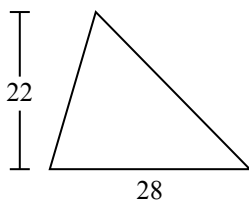
6)



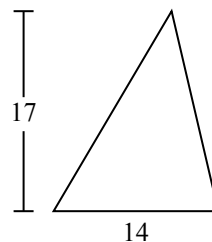
7)



8)



9)



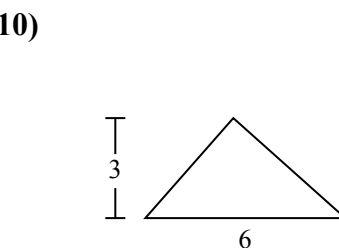
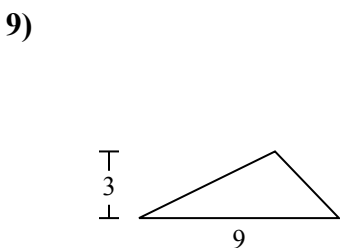
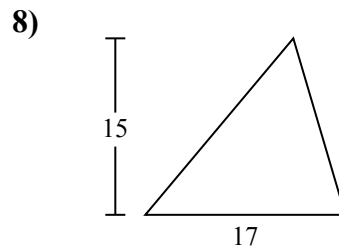
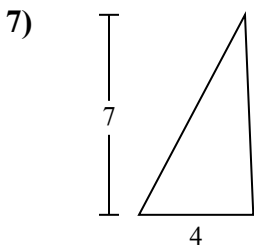
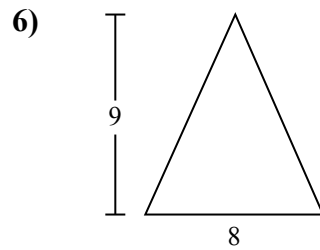
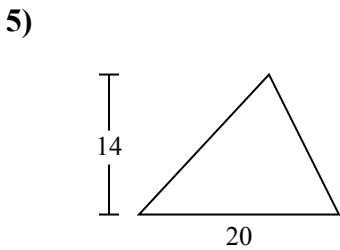
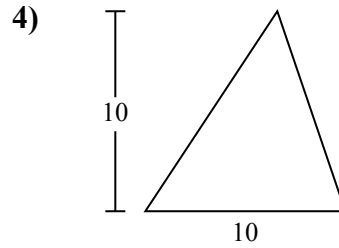
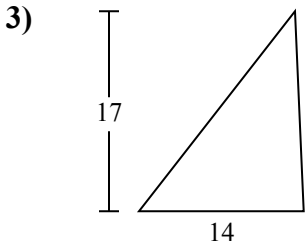
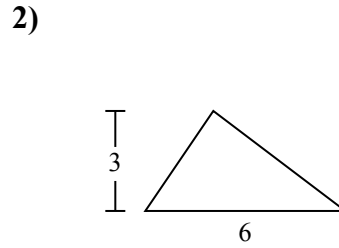
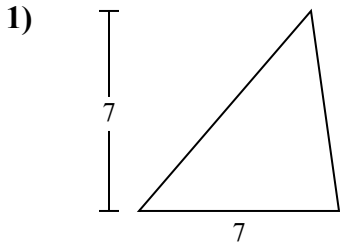
ОТВЕТЫ

1. _____
2. _____
3. _____
4. _____
5. _____
6. _____
7. _____
8. _____
9. _____



Определите площадь каждого треугольника. Единицы не являются шкалами.

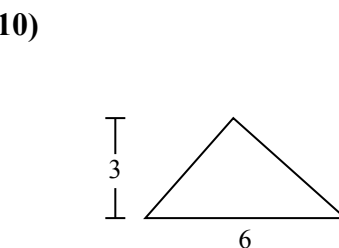
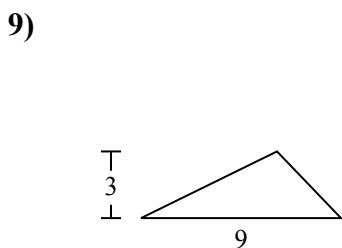
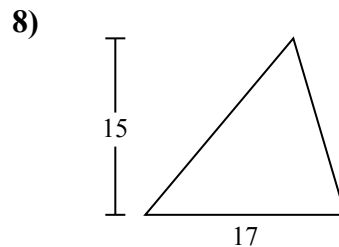
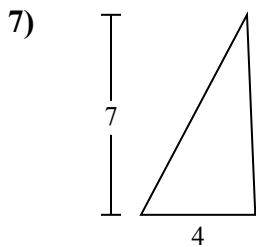
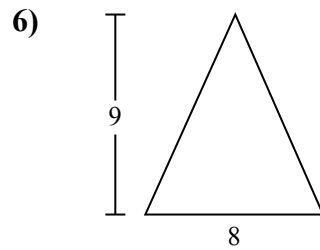
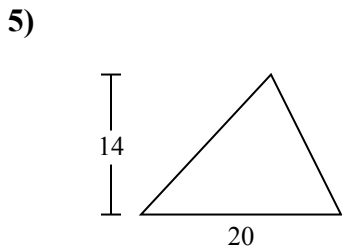
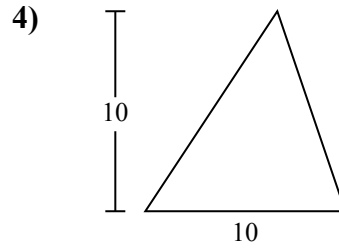
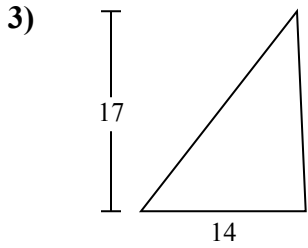
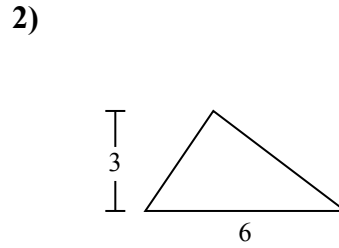
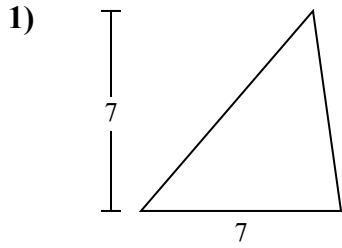
ОТВЕТЫ



- 1. _____
- 2. _____
- 3. _____
- 4. _____
- 5. _____
- 6. _____
- 7. _____
- 8. _____
- 9. _____
- 10. _____



Определите площадь каждого треугольника. Единицы не являются шкалами.



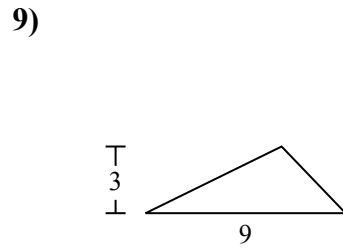
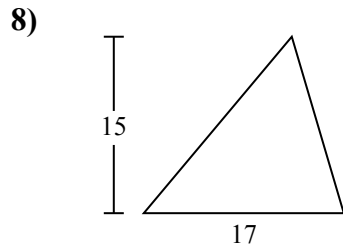
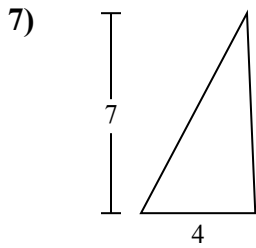
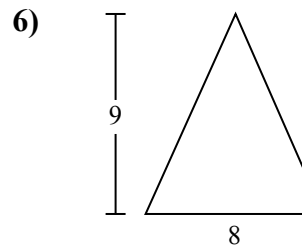
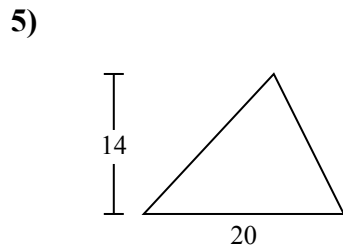
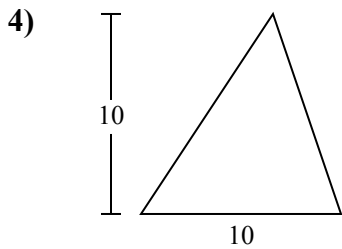
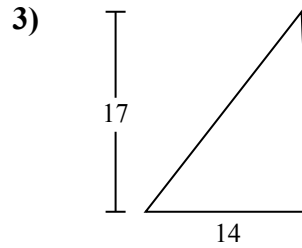
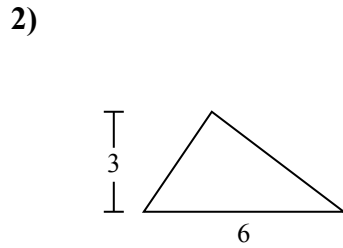
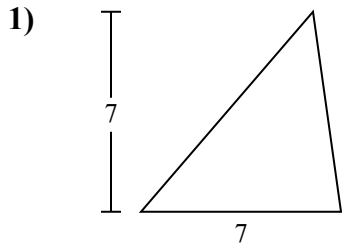
ОТВЕТЫ

- 1. 24,5
- 2. 9
- 3. 119
- 4. 50
- 5. 140
- 6. 36
- 7. 14
- 8. 127,5
- 9. 13,5
- 10. 9



Определите площадь каждого треугольника. Единицы не являются шкалами.

127,5	13,5	119	140	14
24,5	9	36	50	



ОТВЕТЫ

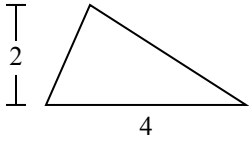
1. _____
2. _____
3. _____
4. _____
5. _____
6. _____
7. _____
8. _____
9. _____



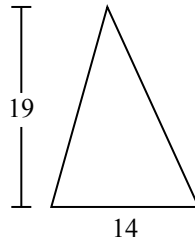
Определите площадь каждого треугольника. Единицы не являются шкалами.

ОТВЕТЫ

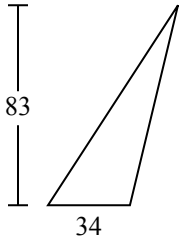
1)



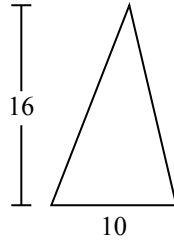
2)



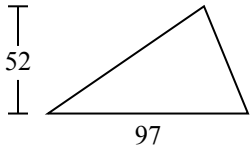
3)



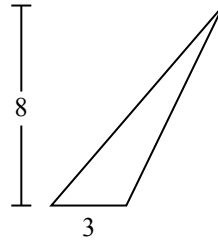
4)



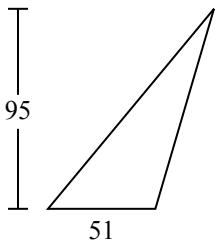
5)



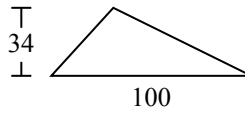
6)



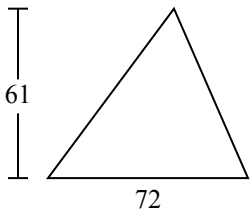
7)



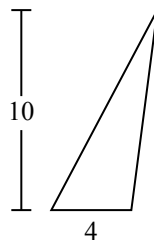
8)



9)



10)

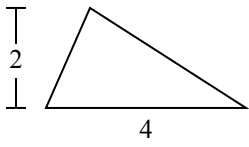


- 1. _____
- 2. _____
- 3. _____
- 4. _____
- 5. _____
- 6. _____
- 7. _____
- 8. _____
- 9. _____
- 10. _____

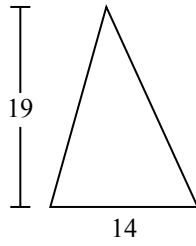


Определите площадь каждого треугольника. Единицы не являются шкалами.

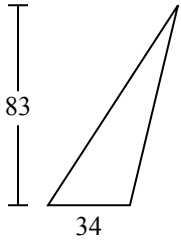
1)



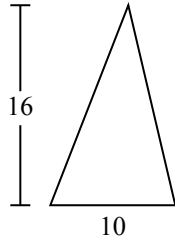
2)



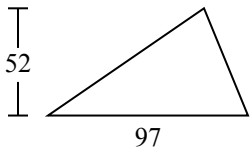
3)



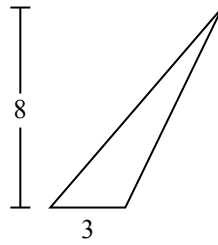
4)



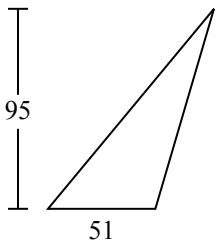
5)



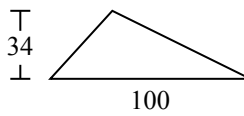
6)



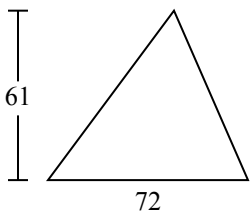
7)



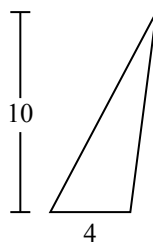
8)



9)



10)



ОТВЕТЫ

1. 4
2. 133
3. 1 411
4. 80
5. 2 522
6. 12
7. 2 422,5
8. 1 700
9. 2 196
10. 20

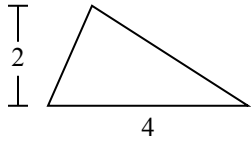


Определите площадь каждого треугольника. Единицы не являются шкалами.

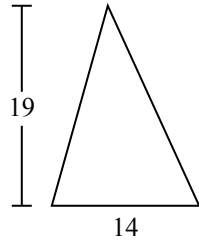
133	4	1 411	2 522	2 196
1 700	2 422,5	80	12	

ОТВЕТЫ

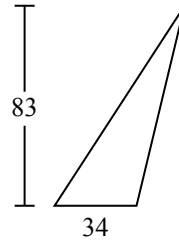
1)



2)



3)



1. _____

2. _____

3. _____

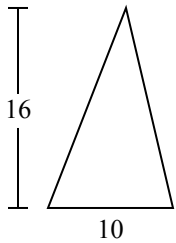
4. _____

5. _____

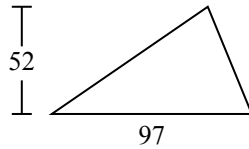
6. _____

7. _____

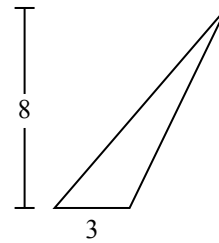
4)



5)



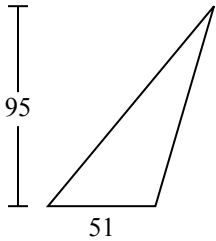
6)



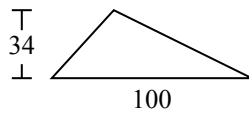
8. _____

9. _____

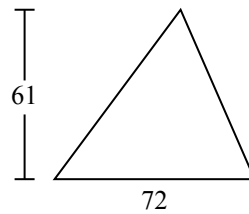
7)



8)



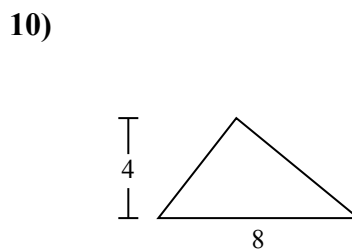
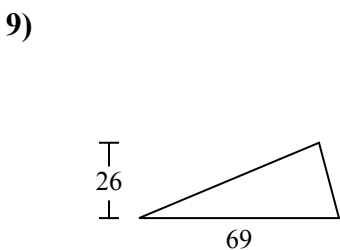
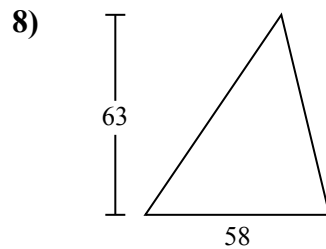
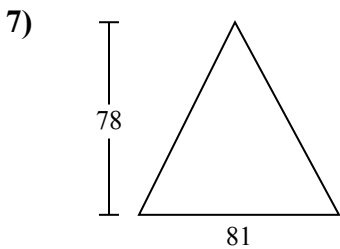
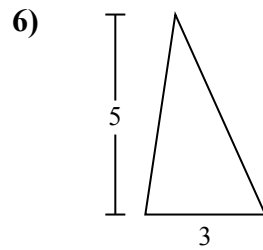
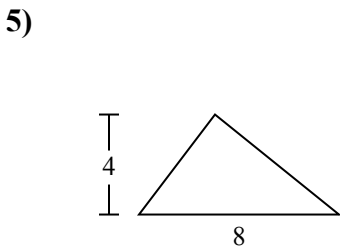
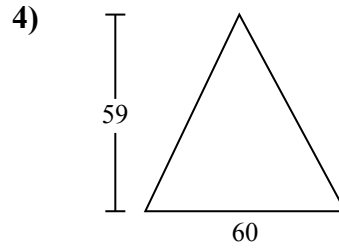
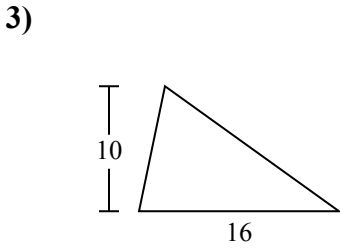
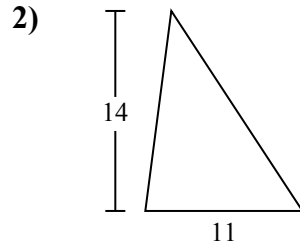
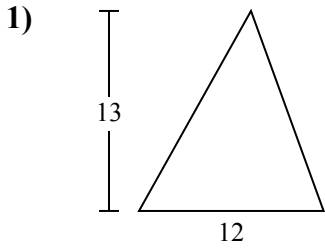
9)





Определите площадь каждого треугольника. Единицы не являются шкалами.

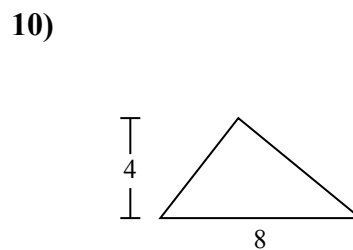
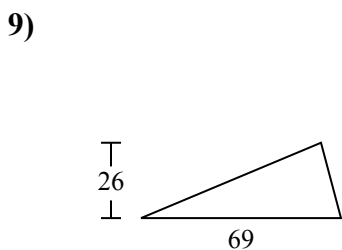
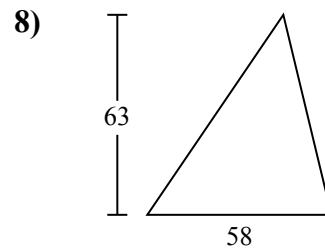
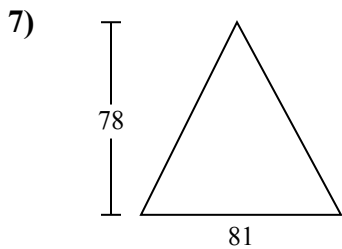
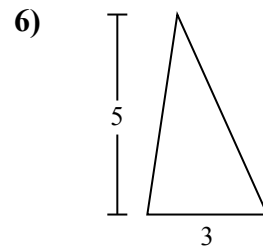
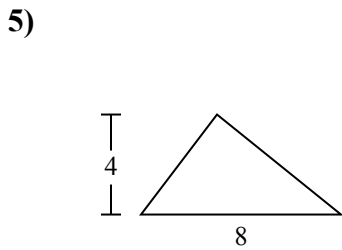
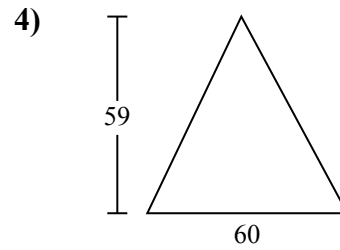
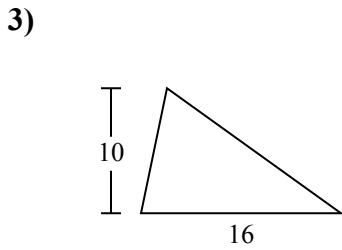
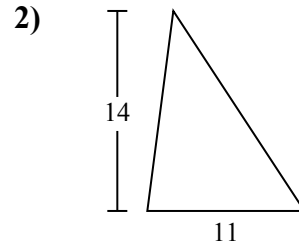
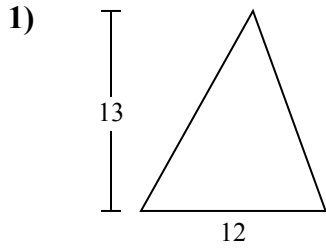
ОТВЕТЫ



- 1. _____
- 2. _____
- 3. _____
- 4. _____
- 5. _____
- 6. _____
- 7. _____
- 8. _____
- 9. _____
- 10. _____



Определите площадь каждого треугольника. Единицы не являются шкалами.

**ОТВЕТЫ**

1. 78
2. 77
3. 80
4. 1 770
5. 16
6. 7,5
7. 3 159
8. 1 827
9. 897
10. 16



Определите площадь каждого треугольника. Единицы не являются шкалами.

1 827

1 770

7,5

78

3 159

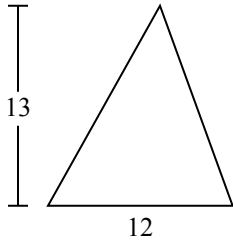
80

77

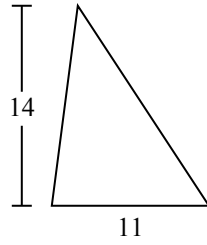
897

16

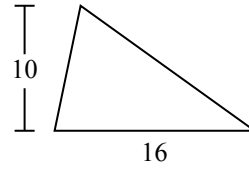
1)



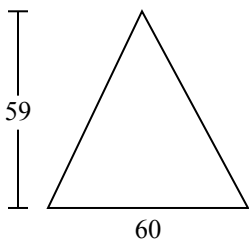
2)



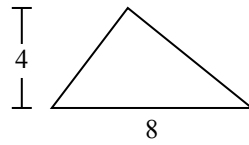
3)



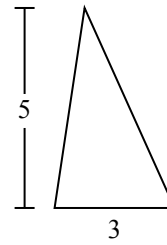
4)



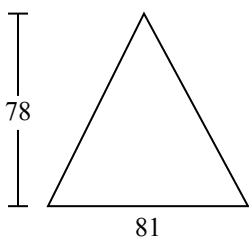
5)



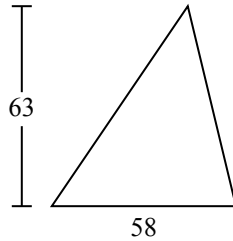
6)



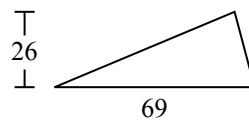
7)



8)



9)



ОТВЕТЫ

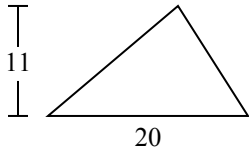
1. _____
2. _____
3. _____
4. _____
5. _____
6. _____
7. _____
8. _____
9. _____



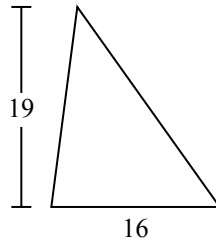
Определите площадь каждого треугольника. Единицы не являются шкалами.

ОТВЕТЫ

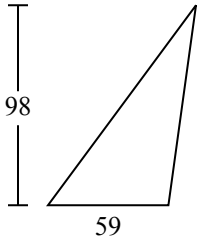
1)



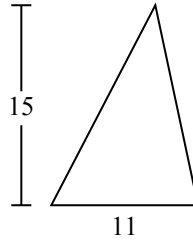
2)



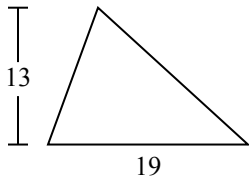
3)



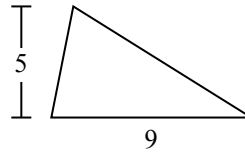
4)



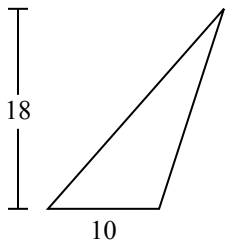
5)



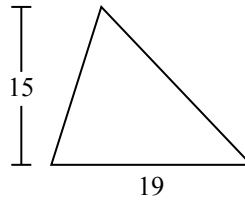
6)



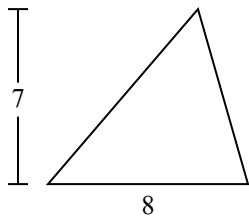
7)



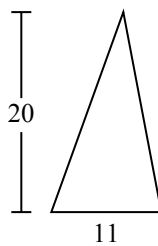
8)



9)



10)

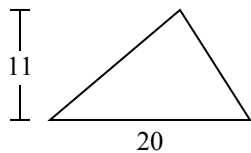


1. _____
2. _____
3. _____
4. _____
5. _____
6. _____
7. _____
8. _____
9. _____
10. _____

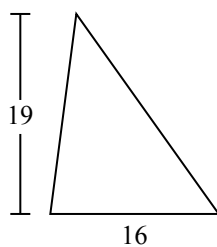


Определите площадь каждого треугольника. Единицы не являются шкалами.

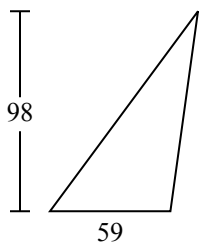
1)



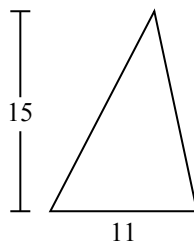
2)



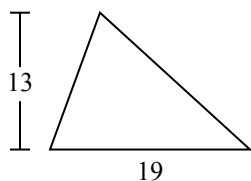
3)



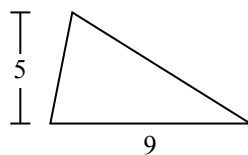
4)



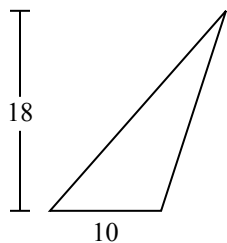
5)



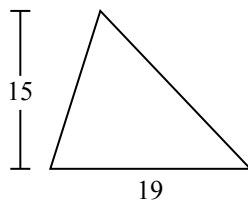
6)



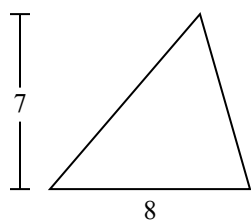
7)



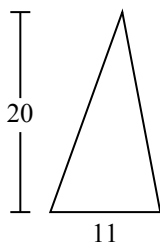
8)



9)



10)



ОТВЕТЫ

1. 110

2. 152

3. 2 891

4. 82,5

5. 123,5

6. 22,5

7. 90

8. 142,5

9. 28

10. 110

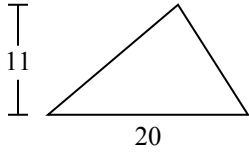


Определите площадь каждого треугольника. Единицы не являются шкалами.

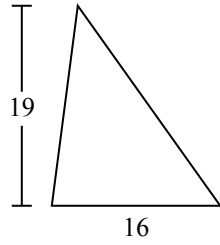
22,5	152	28	90	142,5
123,5	2 891	82,5	110	

ОТВЕТЫ

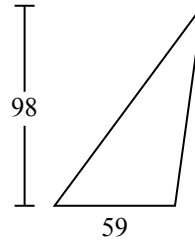
1)



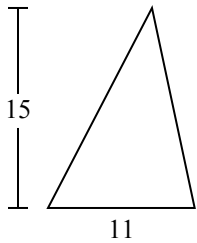
2)



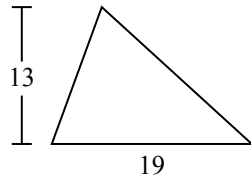
3)



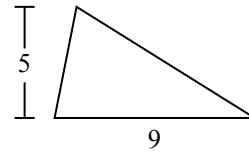
4)



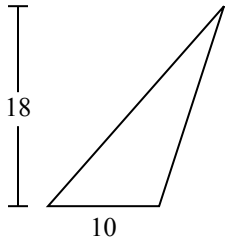
5)



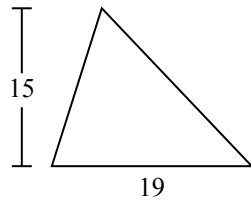
6)



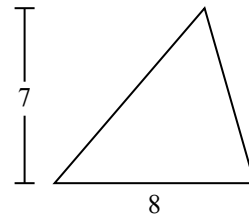
7)



8)



9)



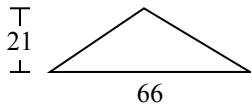
1. _____
2. _____
3. _____
4. _____
5. _____
6. _____
7. _____
8. _____
9. _____



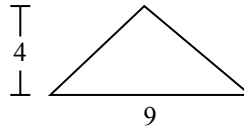
Определите площадь каждого треугольника. Единицы не являются шкалами.

ОТВЕТЫ

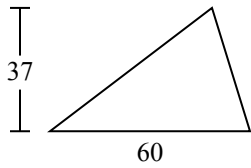
1)



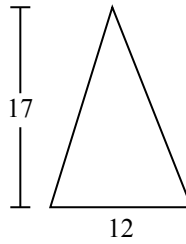
2)



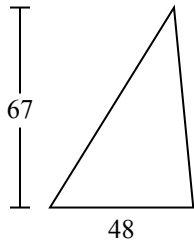
3)



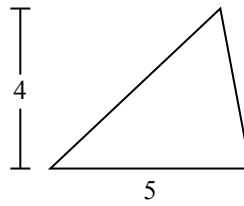
4)



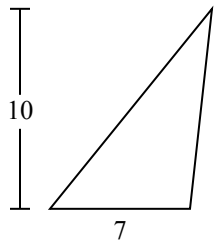
5)



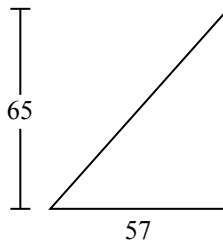
6)



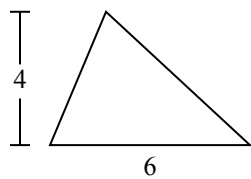
7)



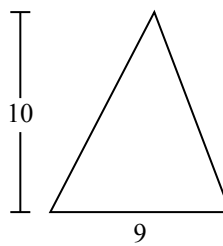
8)



9)



10)

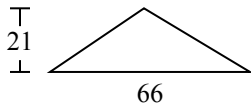


- 1. _____
- 2. _____
- 3. _____
- 4. _____
- 5. _____
- 6. _____
- 7. _____
- 8. _____
- 9. _____
- 10. _____

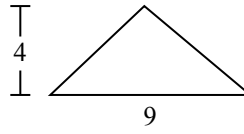


Определите площадь каждого треугольника. Единицы не являются шкалами.

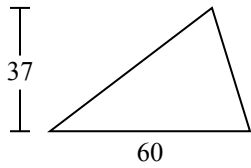
1)



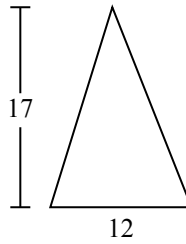
2)



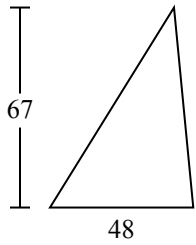
3)



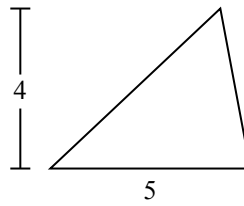
4)



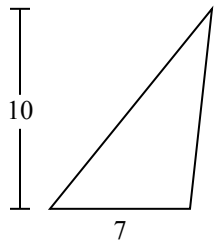
5)



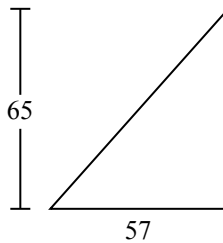
6)



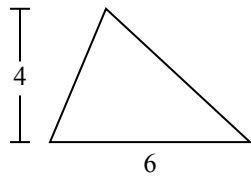
7)



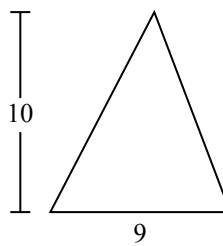
8)



9)



10)



ОТВЕТЫ

1. 693

2. 18

3. 1 110

4. 102

5. 1 608

6. 10

7. 35

8. 1 852,5

9. 12

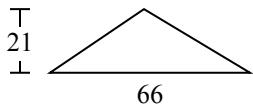
10. 45



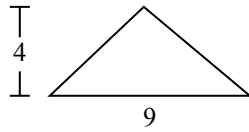
Определите площадь каждого треугольника. Единицы не являются шкалами.

1 110	693	102	1 852,5	10
18	12	1 608	35	

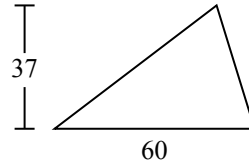
1)



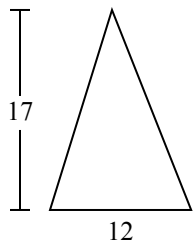
2)



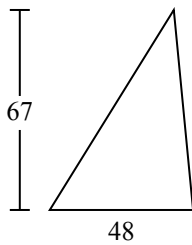
3)



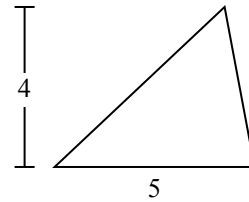
4)



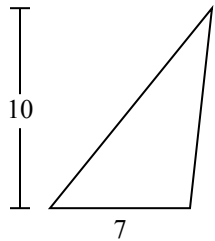
5)



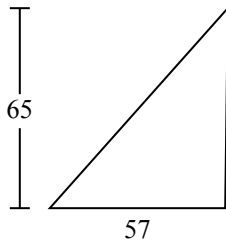
6)



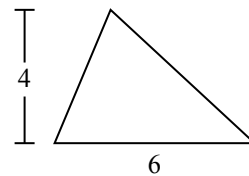
7)



8)



9)



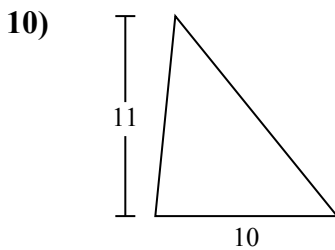
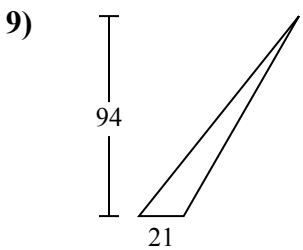
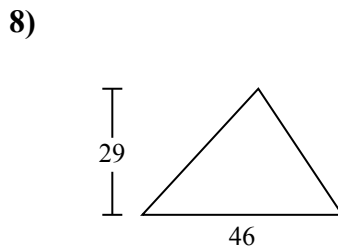
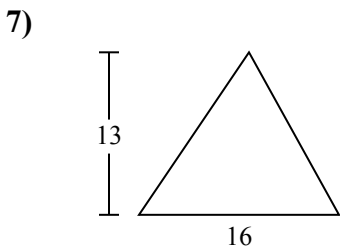
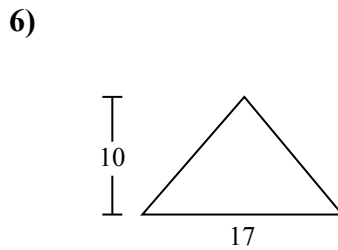
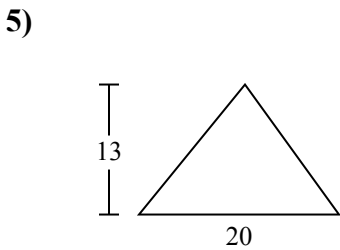
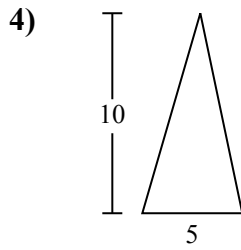
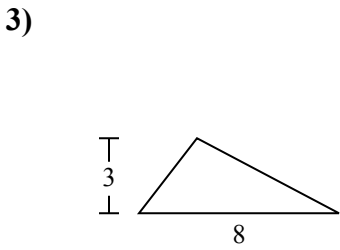
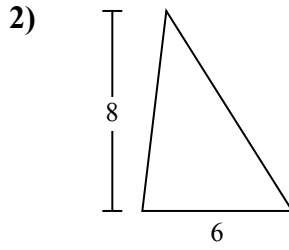
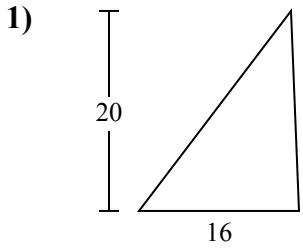
ОТВЕТЫ

1. _____
2. _____
3. _____
4. _____
5. _____
6. _____
7. _____
8. _____
9. _____



Определите площадь каждого треугольника. Единицы не являются шкалами.

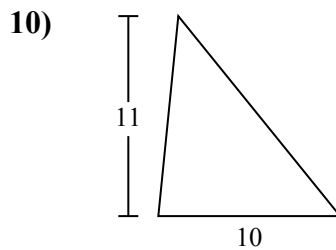
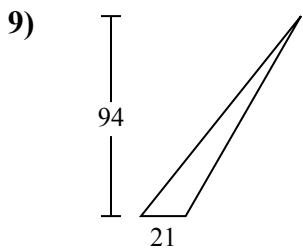
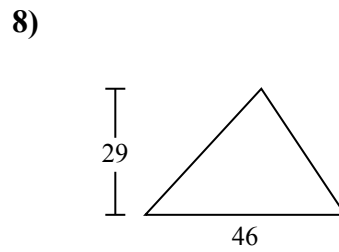
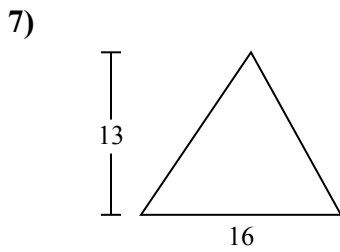
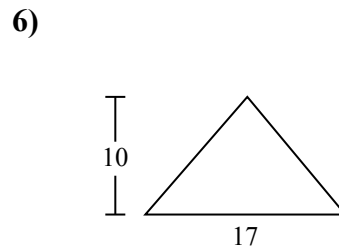
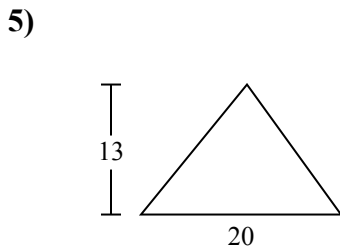
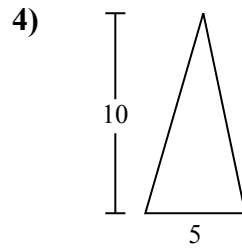
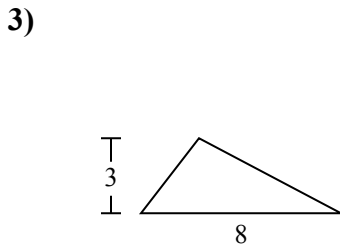
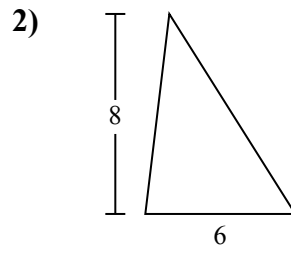
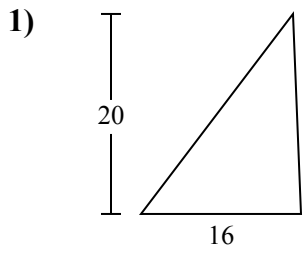
ОТВЕТЫ



- 1. _____
- 2. _____
- 3. _____
- 4. _____
- 5. _____
- 6. _____
- 7. _____
- 8. _____
- 9. _____
- 10. _____



Определите площадь каждого треугольника. Единицы не являются шкалами.



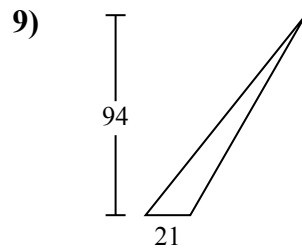
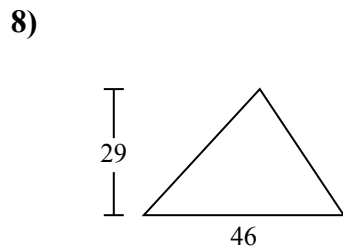
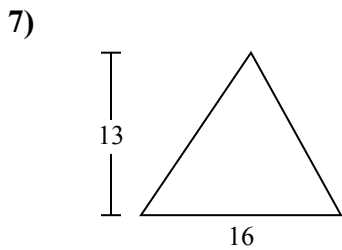
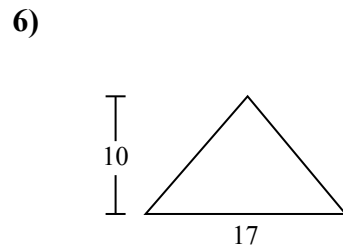
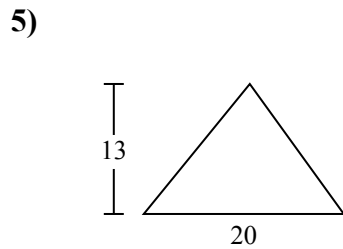
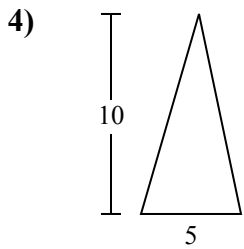
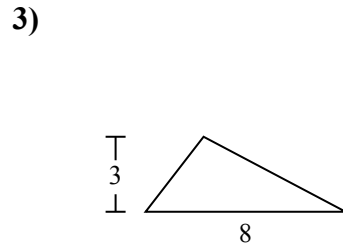
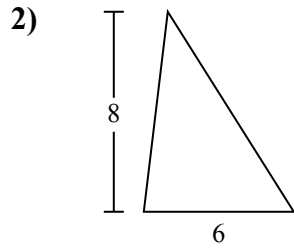
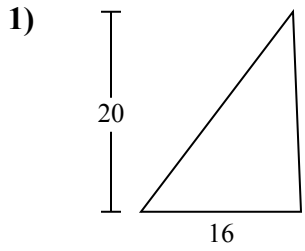
ОТВЕТЫ

1. 160
2. 24
3. 12
4. 25
5. 130
6. 85
7. 104
8. 667
9. 987
10. 55



Определите площадь каждого треугольника. Единицы не являются шкалами.

25	160	85	24	667
987	104	12	130	



ОТВЕТЫ

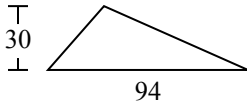
1. _____
2. _____
3. _____
4. _____
5. _____
6. _____
7. _____
8. _____
9. _____



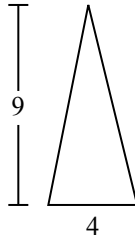
Определите площадь каждого треугольника. Единицы не являются шкалами.

ОТВЕТЫ

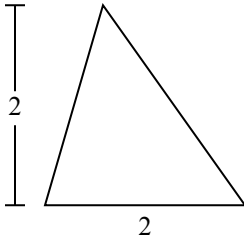
1)



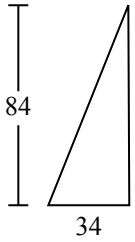
2)



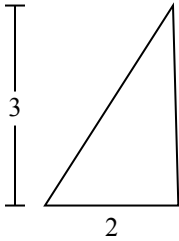
3)



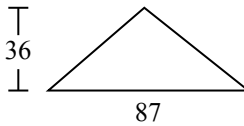
4)



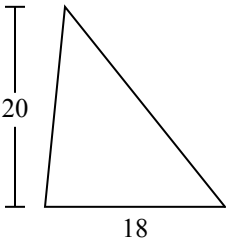
5)



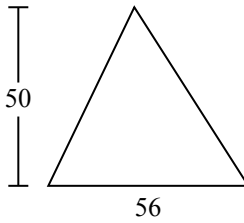
6)



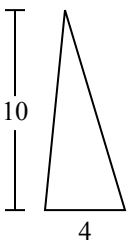
7)



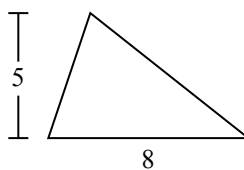
8)



9)



10)

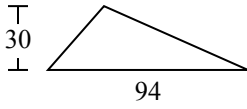


- 1. _____
- 2. _____
- 3. _____
- 4. _____
- 5. _____
- 6. _____
- 7. _____
- 8. _____
- 9. _____
- 10. _____

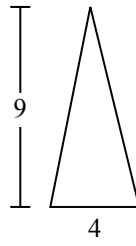


Определите площадь каждого треугольника. Единицы не являются шкалами.

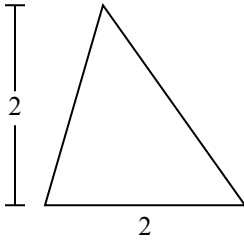
1)



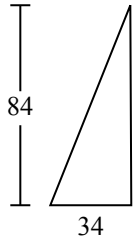
2)



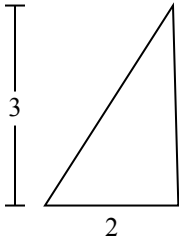
3)



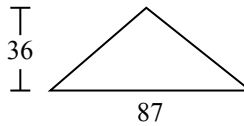
4)



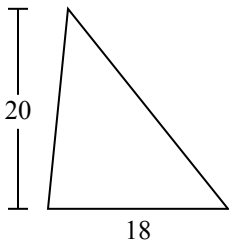
5)



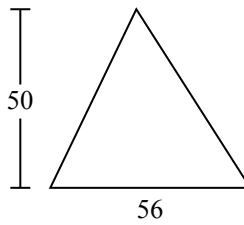
6)



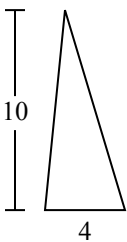
7)



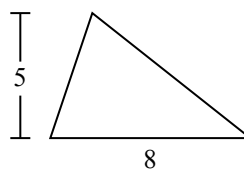
8)



9)



10)



ОТВЕТЫ

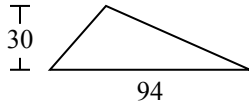
- 1. 1 410
- 2. 18
- 3. 2
- 4. 1 428
- 5. 3
- 6. 1 566
- 7. 180
- 8. 1 400
- 9. 20
- 10. 20



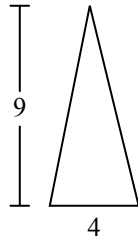
Определите площадь каждого треугольника. Единицы не являются шкалами.

180	1 428	18	1 566	1 400
3	2	20	1 410	

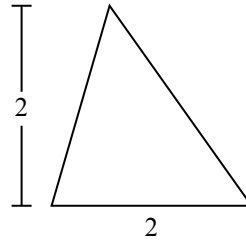
1)



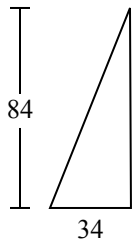
2)



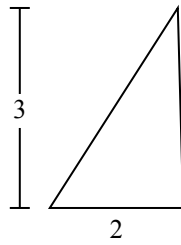
3)



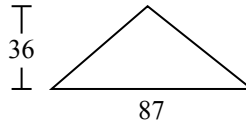
4)



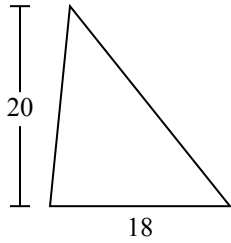
5)



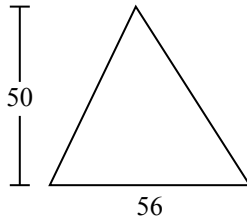
6)



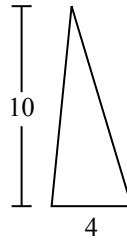
7)



8)



9)



ОТВЕТЫ

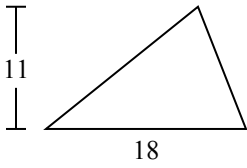
1. _____
2. _____
3. _____
4. _____
5. _____
6. _____
7. _____
8. _____
9. _____



Определите площадь каждого треугольника. Единицы не являются шкалами.

ОТВЕТЫ

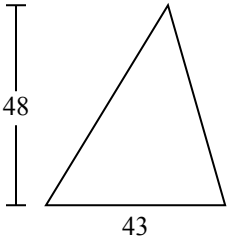
1)



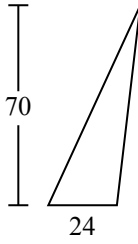
2)



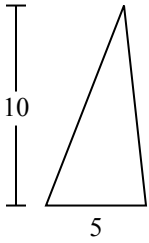
3)



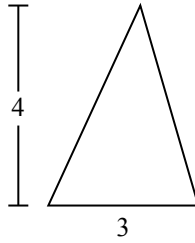
4)



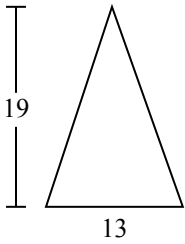
5)



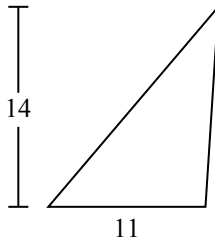
6)



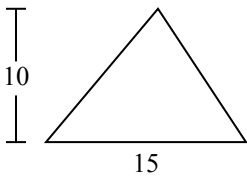
7)



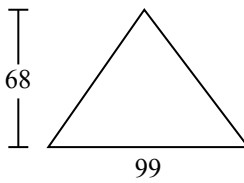
8)



9)



10)

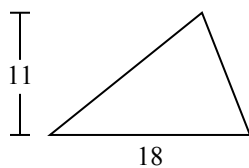


- 1. _____
- 2. _____
- 3. _____
- 4. _____
- 5. _____
- 6. _____
- 7. _____
- 8. _____
- 9. _____
- 10. _____



Определите площадь каждого треугольника. Единицы не являются шкалами.

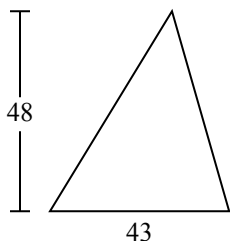
1)



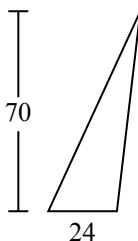
2)



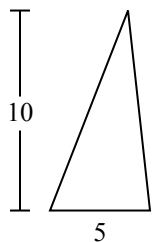
3)



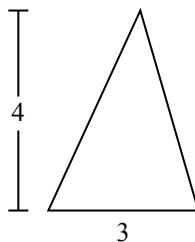
4)



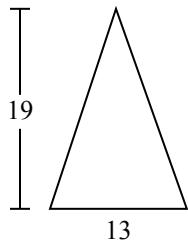
5)



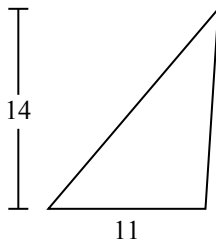
6)



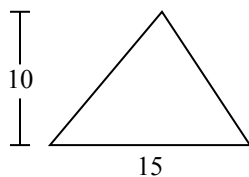
7)



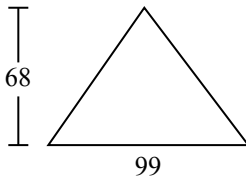
8)



9)



10)



ОТВЕТЫ

1. 99

2. 7

3. 1 032

4. 840

5. 25

6. 6

7. 123,5

8. 77

9. 75

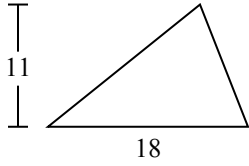
10. 3 366



Определите площадь каждого треугольника. Единицы не являются шкалами.

77	6	99	1 032	25
840	75	123,5	7	

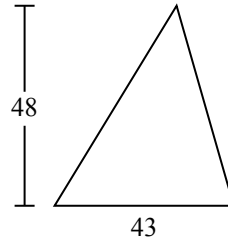
1)



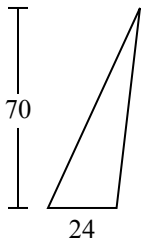
2)



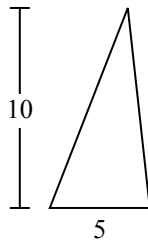
3)



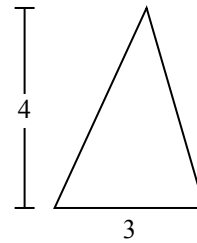
4)



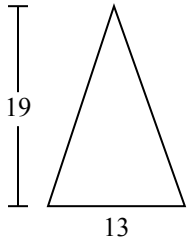
5)



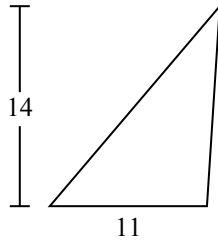
6)



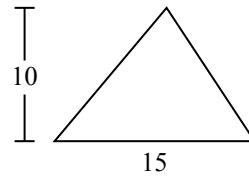
7)



8)



9)



ОТВЕТЫ

1. _____
2. _____
3. _____
4. _____
5. _____
6. _____
7. _____
8. _____
9. _____