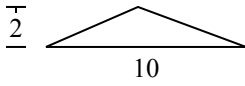




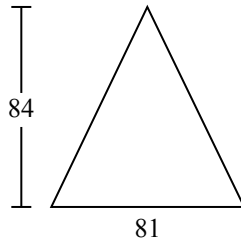
Определите площадь каждого треугольника. Единицы не являются шкалами.

**ОТВЕТЫ**

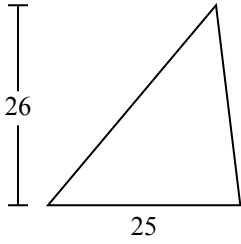
1)



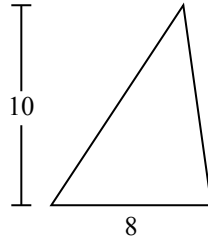
2)



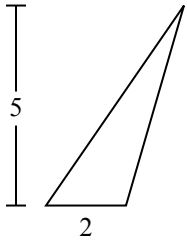
3)



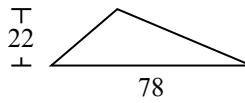
4)



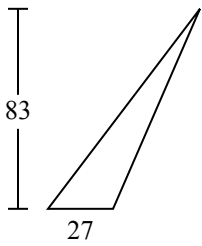
5)



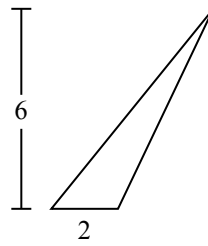
6)



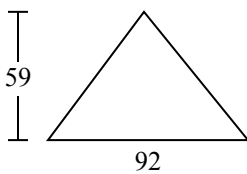
7)



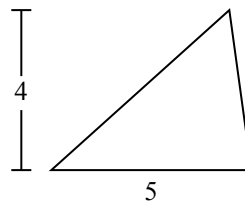
8)



9)



10)

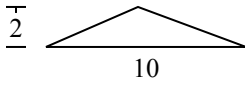


- 1. \_\_\_\_\_
- 2. \_\_\_\_\_
- 3. \_\_\_\_\_
- 4. \_\_\_\_\_
- 5. \_\_\_\_\_
- 6. \_\_\_\_\_
- 7. \_\_\_\_\_
- 8. \_\_\_\_\_
- 9. \_\_\_\_\_
- 10. \_\_\_\_\_

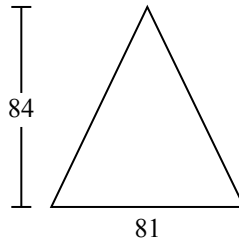


Определите площадь каждого треугольника. Единицы не являются шкалами.

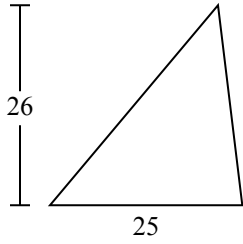
1)



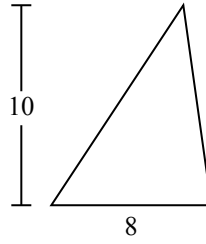
2)



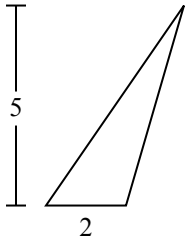
3)



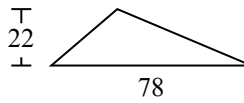
4)



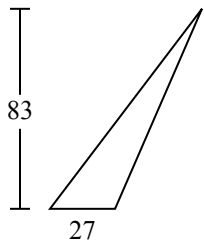
5)



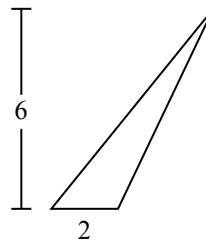
6)



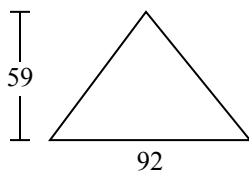
7)



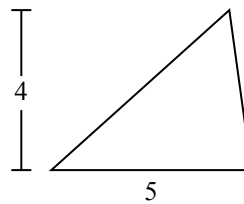
8)



9)



10)



**ОТВЕТЫ**

1. 10

2. 3 402

3. 325

4. 40

5. 5

6. 858

7. 1 120,5

8. 6

9. 2 714

10. 10

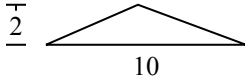


Определите площадь каждого треугольника. Единицы не являются шкалами.

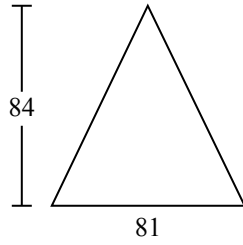
**ОТВЕТЫ**

10	6	5	2 714	858
1 120,5	325	3 402	40	

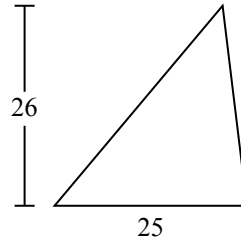
1)



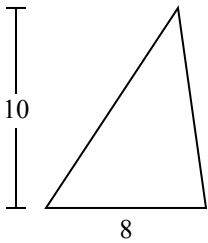
2)



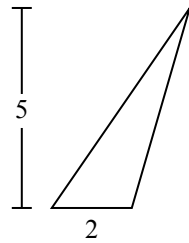
3)



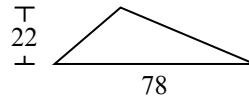
4)



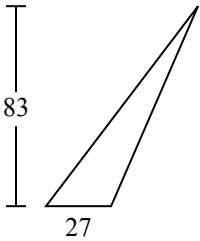
5)



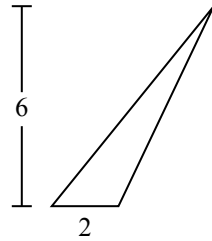
6)



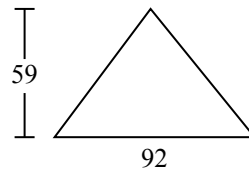
7)



8)



9)



1. \_\_\_\_\_
2. \_\_\_\_\_
3. \_\_\_\_\_
4. \_\_\_\_\_
5. \_\_\_\_\_
6. \_\_\_\_\_
7. \_\_\_\_\_
8. \_\_\_\_\_
9. \_\_\_\_\_