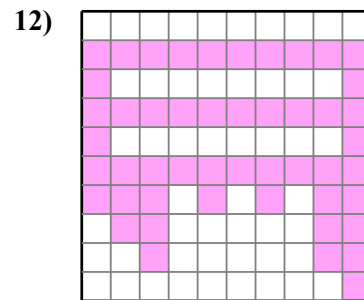
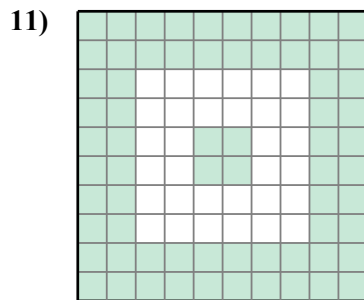
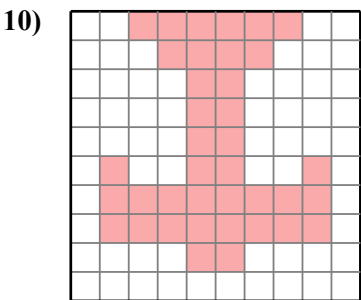
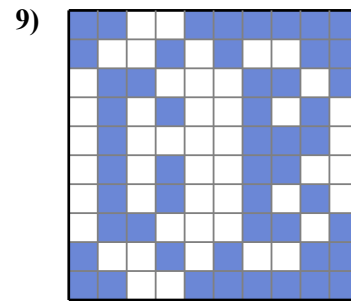
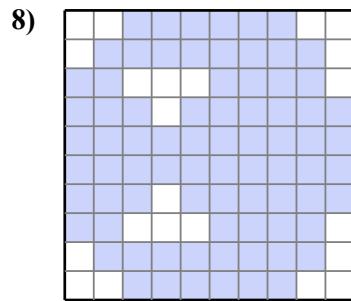
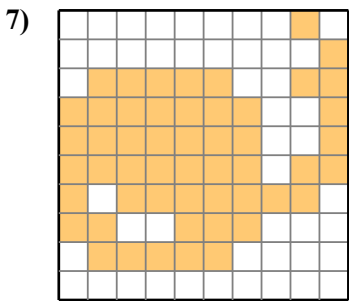
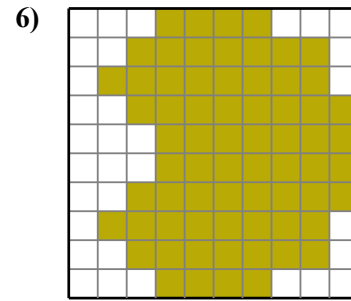
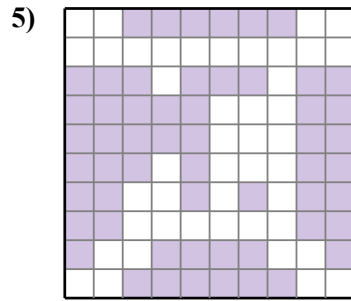
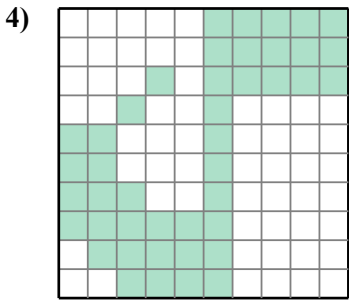
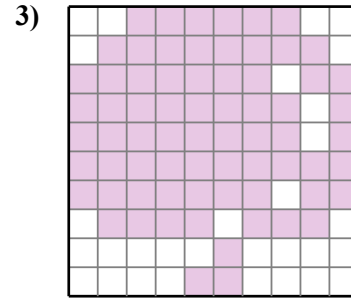
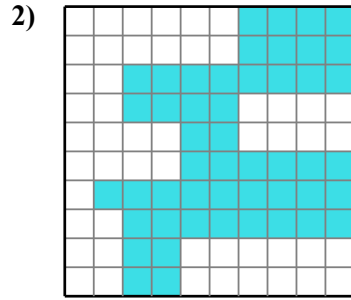
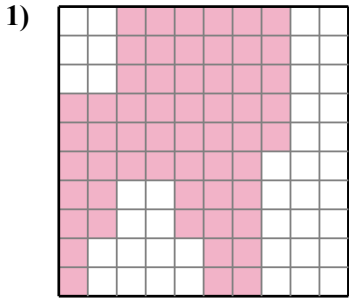




Определите площадь закрашенных фигур. Каждый блок равен 1 единице в квадрате (u<sup>2</sup>).

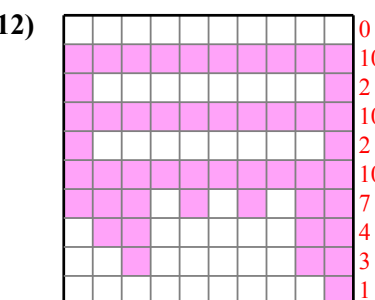
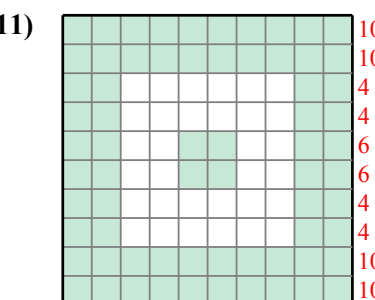
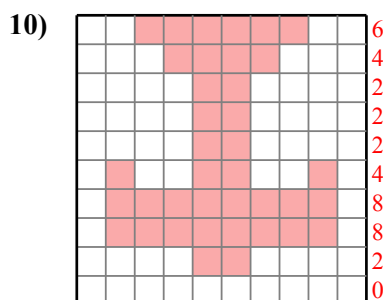
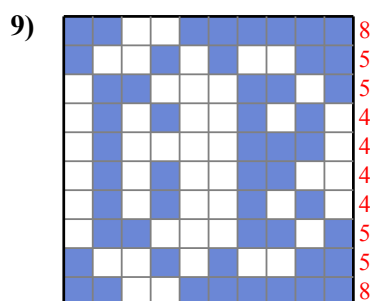
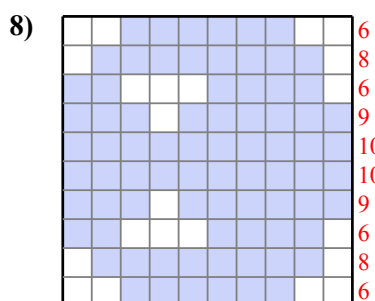
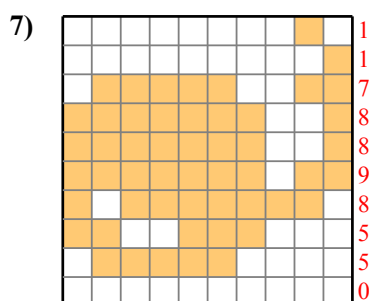
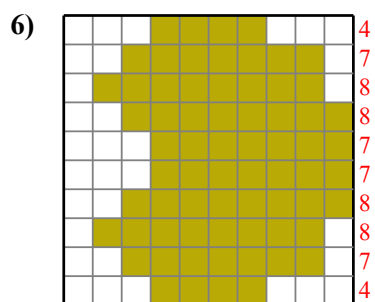
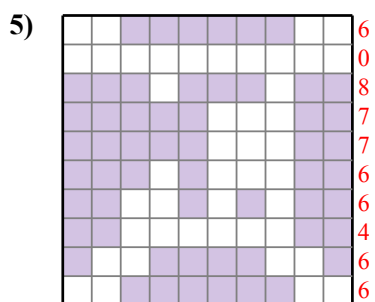
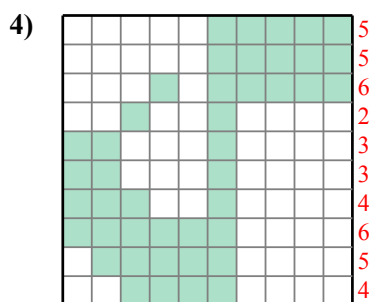
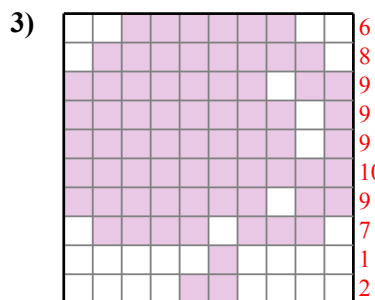
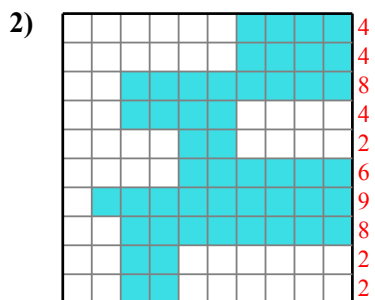
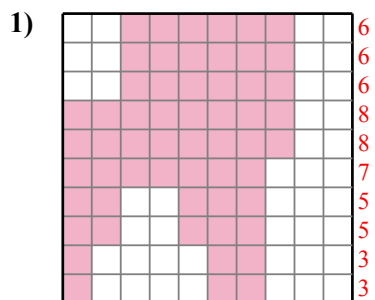
**ОТВЕТЫ**



- 1. \_\_\_\_\_
- 2. \_\_\_\_\_
- 3. \_\_\_\_\_
- 4. \_\_\_\_\_
- 5. \_\_\_\_\_
- 6. \_\_\_\_\_
- 7. \_\_\_\_\_
- 8. \_\_\_\_\_
- 9. \_\_\_\_\_
- 10. \_\_\_\_\_
- 11. \_\_\_\_\_
- 12. \_\_\_\_\_



Определите площадь закрашенных фигур. Каждый блок равен 1 единице в квадрате ( $u^2$ ).



**ОТВЕТЫ**

1. 57  $u^2$

2. 49  $u^2$

3. 70  $u^2$

4. 43  $u^2$

5. 56  $u^2$

6. 68  $u^2$

7. 52  $u^2$

8. 78  $u^2$

9. 52  $u^2$

10. 38  $u^2$

11. 68  $u^2$

12. 49  $u^2$