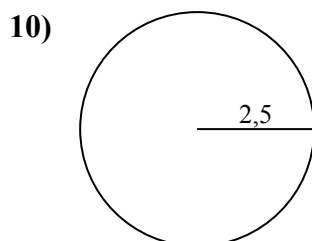
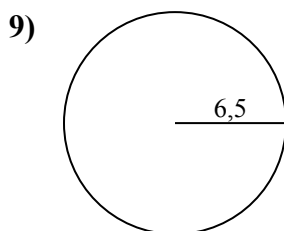
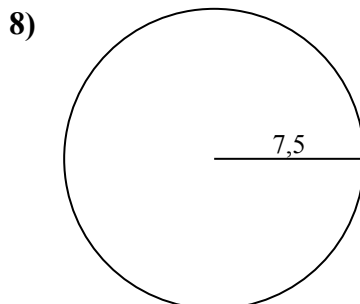
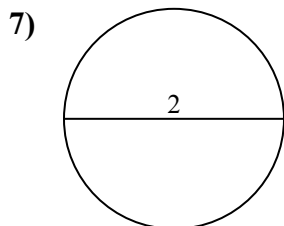
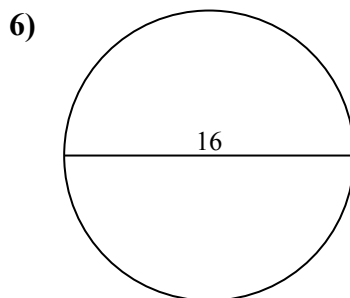
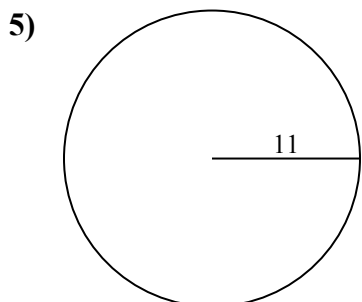
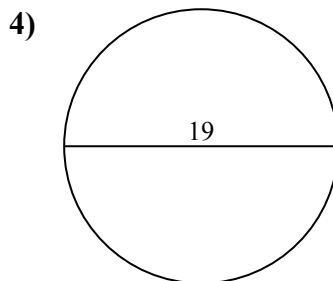
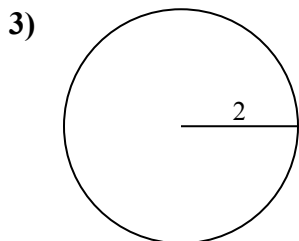
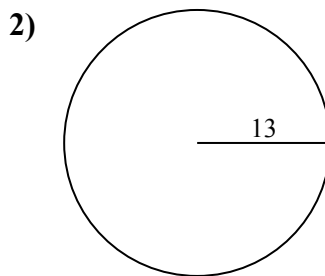
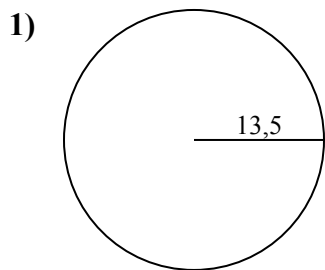




Определите окружность каждого круга. Круги не являются шкалой.

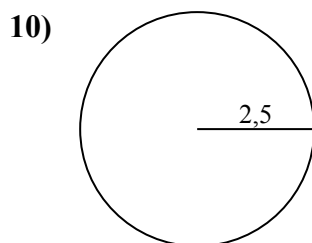
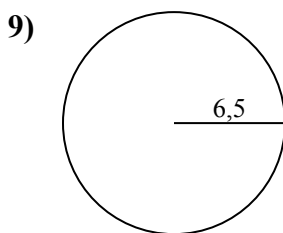
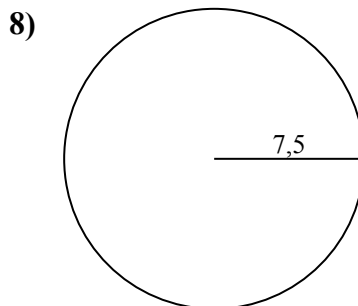
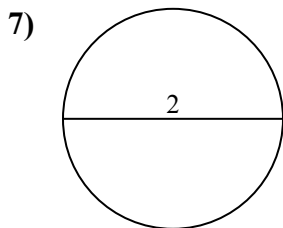
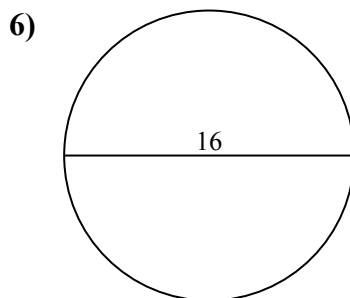
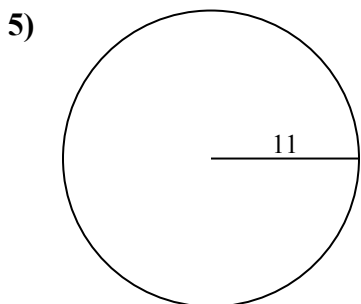
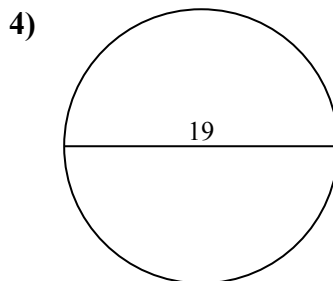
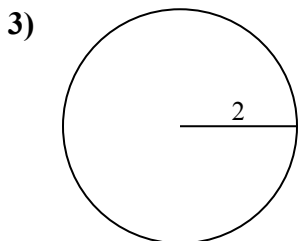
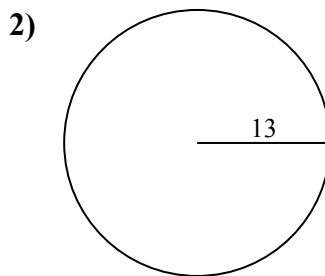
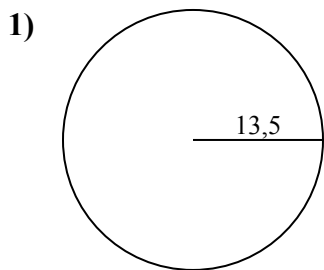


ОТВЕТЫ

- 1. _____
- 2. _____
- 3. _____
- 4. _____
- 5. _____
- 6. _____
- 7. _____
- 8. _____
- 9. _____
- 10. _____



Определите окружность каждого круга. Круги не являются шкалой.

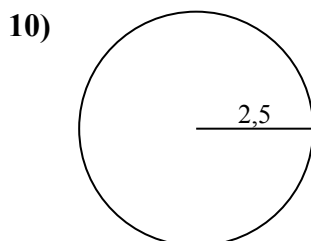
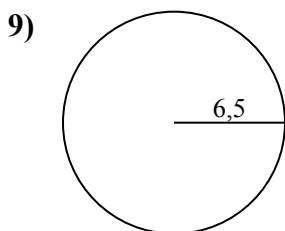
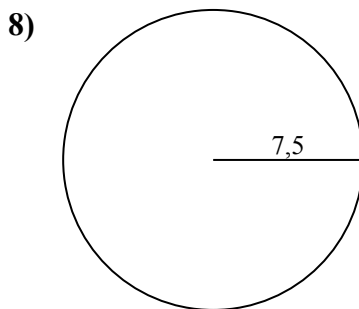
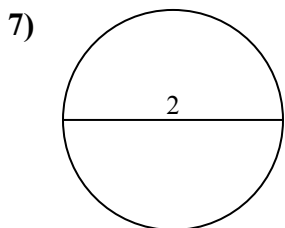
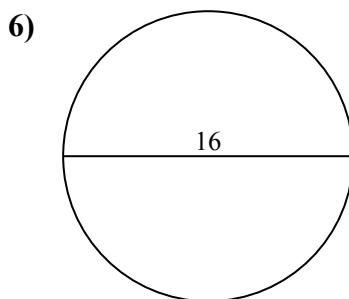
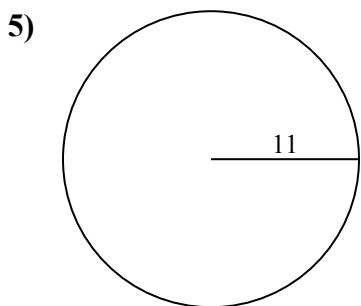
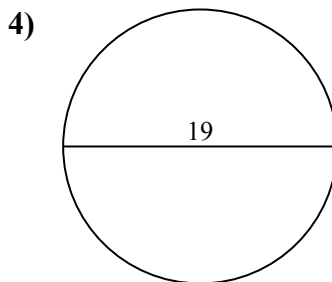
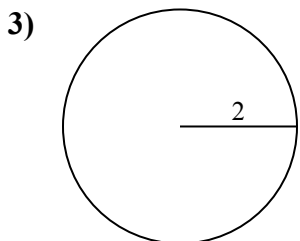
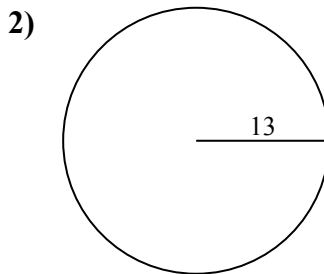
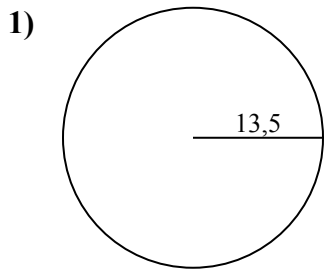
**ОТВЕТЫ**1. 84,82 см2. 81,68 см3. 12,57 см4. 59,69 см5. 69,12 см6. 50,27 см7. 6,28 см8. 47,12 см9. 40,84 см10. 15,71 см



Определите окружность каждого круга. Круги не являются шкалой.

69,12 cm	6,28 cm	81,68 cm	15,71 cm	12,57 cm
50,27 cm	47,12 cm	84,82 cm	59,69 cm	40,84 cm

ОТВЕТЫ



- 1. _____
- 2. _____
- 3. _____
- 4. _____
- 5. _____
- 6. _____
- 7. _____
- 8. _____
- 9. _____
- 10. _____