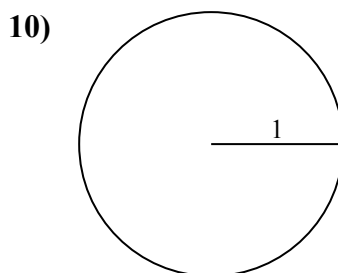
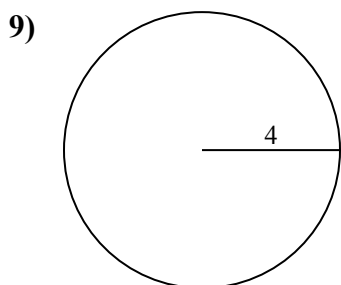
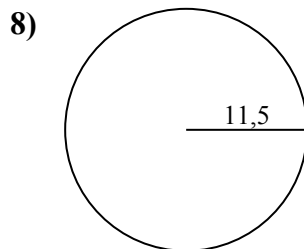
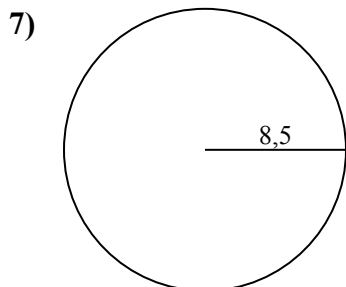
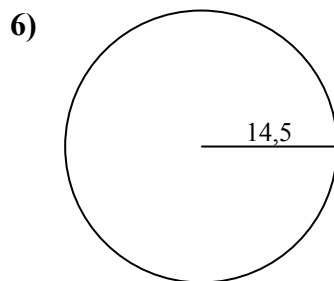
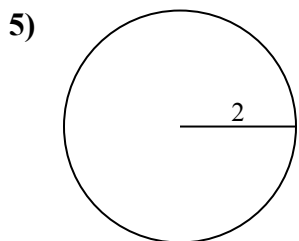
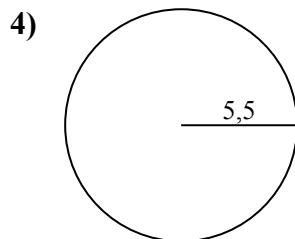
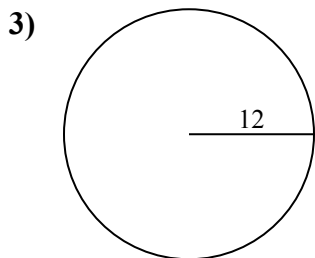
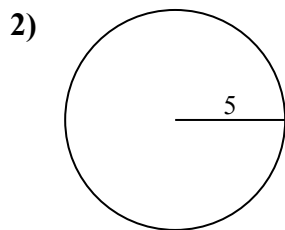
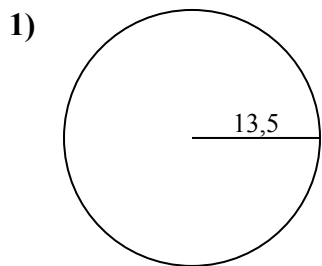




Определите окружность каждого круга. Круги не являются шкалой.

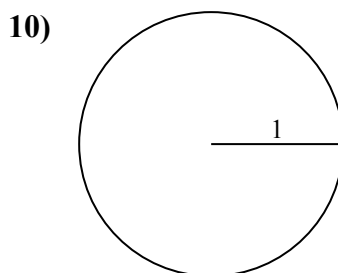
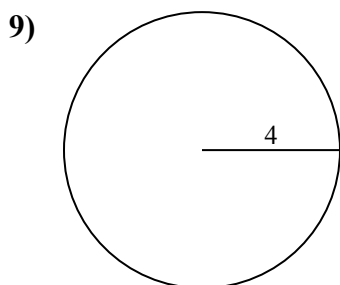
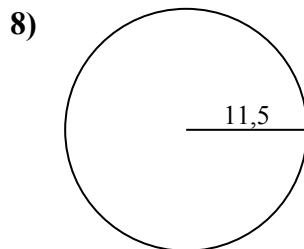
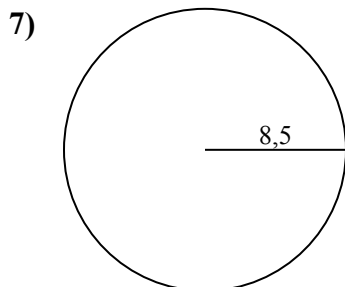
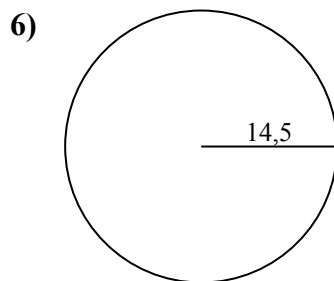
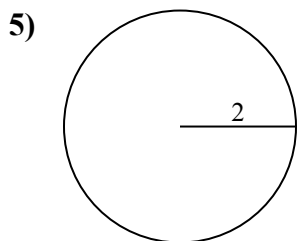
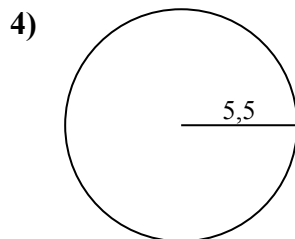
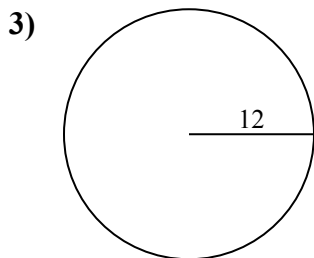
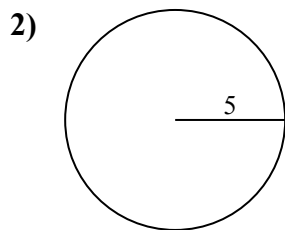
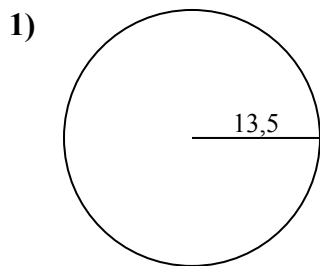


**Ответы**

- 1. \_\_\_\_\_
- 2. \_\_\_\_\_
- 3. \_\_\_\_\_
- 4. \_\_\_\_\_
- 5. \_\_\_\_\_
- 6. \_\_\_\_\_
- 7. \_\_\_\_\_
- 8. \_\_\_\_\_
- 9. \_\_\_\_\_
- 10. \_\_\_\_\_



Определите окружность каждого круга. Круги не являются шкалой.

**ОТВЕТЫ**

1. 84,82 см
2. 31,42 см
3. 75,4 см
4. 34,56 см
5. 12,57 см
6. 91,11 см
7. 53,41 см
8. 72,26 см
9. 25,13 см
10. 6,28 см



Определите окружность каждого круга. Круги не являются шкалой.

53,41 cm

84,82 cm

31,42 cm

72,26 cm

34,56 cm

12,57 cm

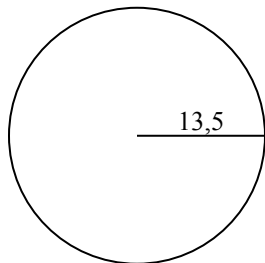
75,4 cm

91,11 cm

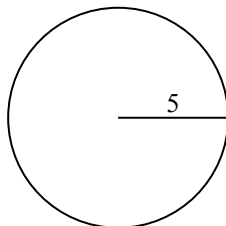
6,28 cm

25,13 cm

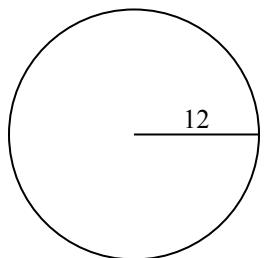
1)



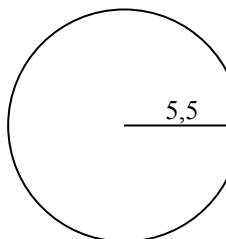
2)



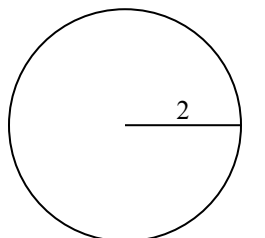
3)



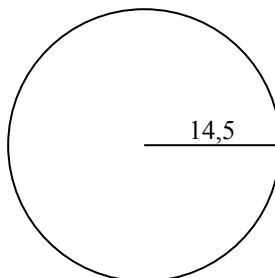
4)



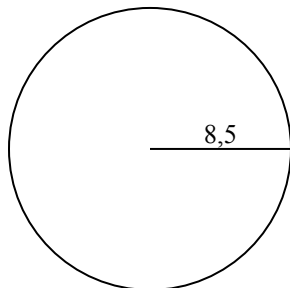
5)



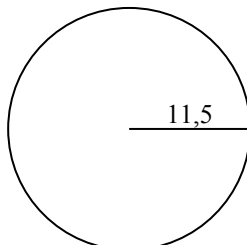
6)



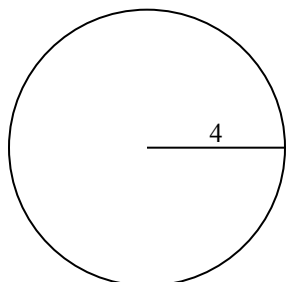
7)



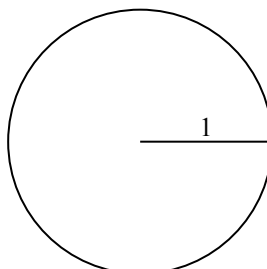
8)



9)



10)

**ОТВЕТЫ**

1. \_\_\_\_\_

2. \_\_\_\_\_

3. \_\_\_\_\_

4. \_\_\_\_\_

5. \_\_\_\_\_

6. \_\_\_\_\_

7. \_\_\_\_\_

8. \_\_\_\_\_

9. \_\_\_\_\_

10. \_\_\_\_\_