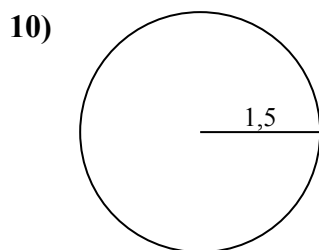
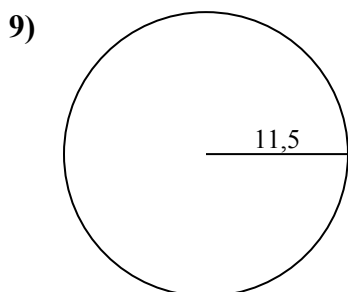
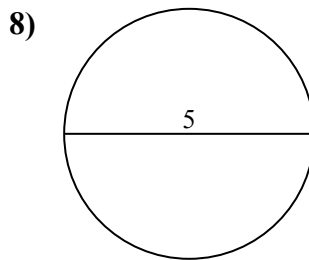
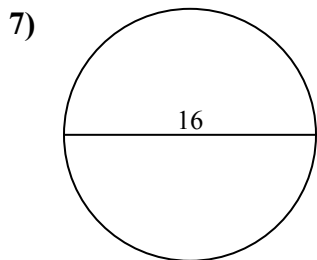
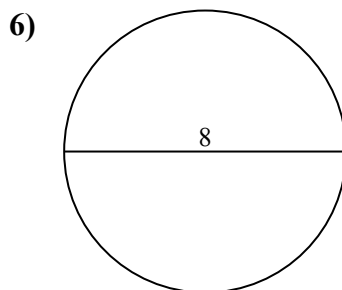
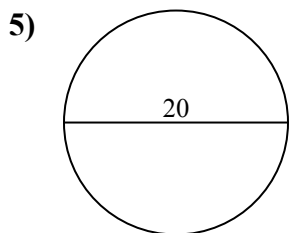
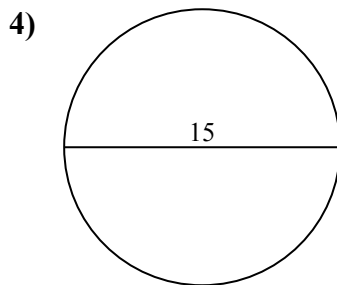
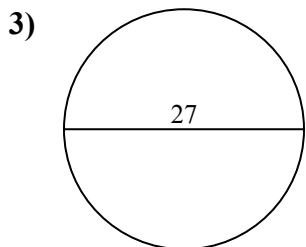
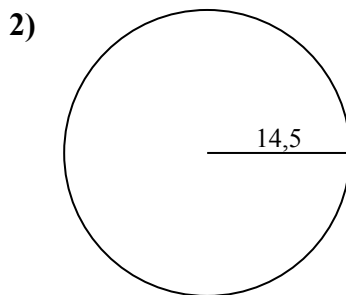
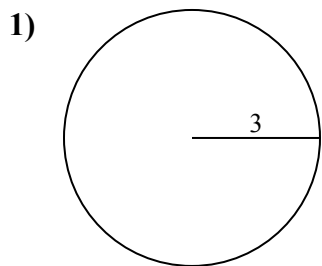




Определите окружность каждого круга. Круги не являются шкалой.

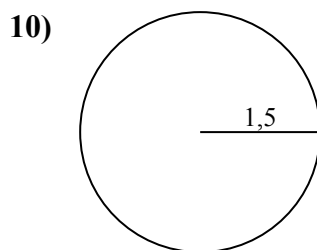
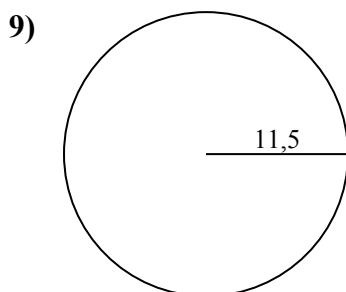
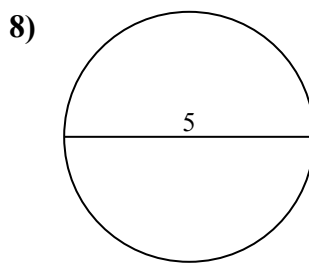
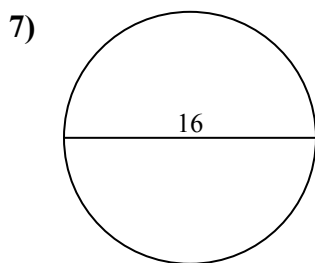
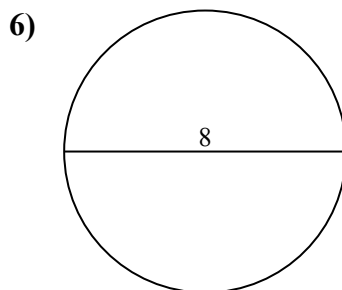
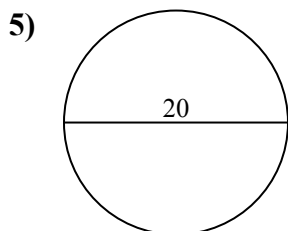
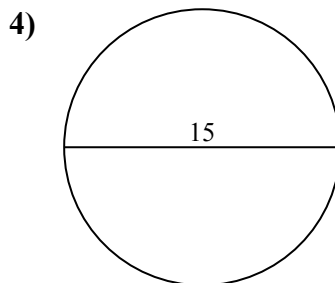
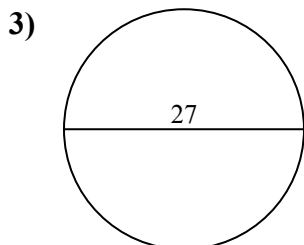
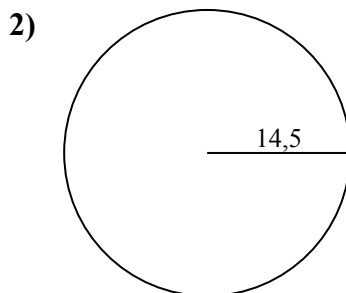
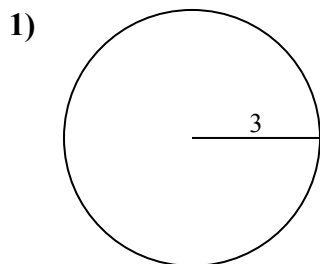


ОТВЕТЫ

- 1. _____
- 2. _____
- 3. _____
- 4. _____
- 5. _____
- 6. _____
- 7. _____
- 8. _____
- 9. _____
- 10. _____



Определите окружность каждого круга. Круги не являются шкалой.

**ОТВЕТЫ**

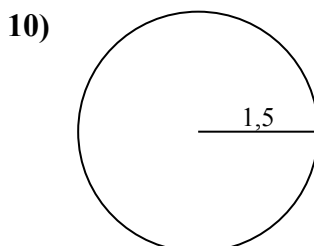
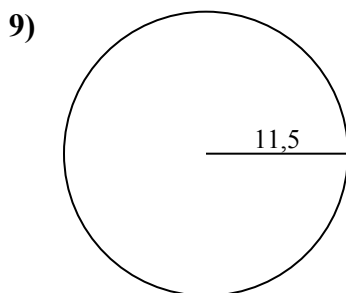
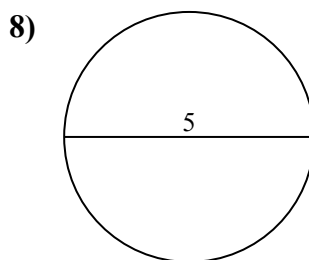
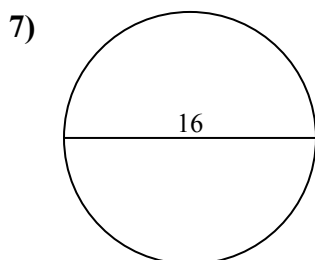
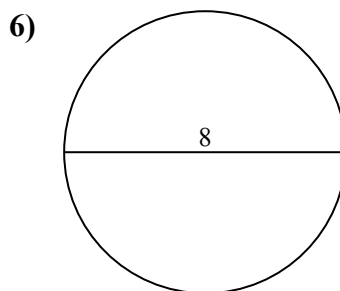
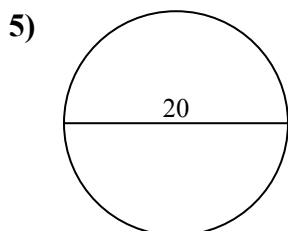
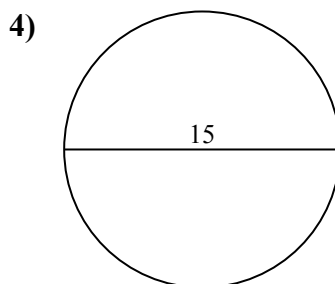
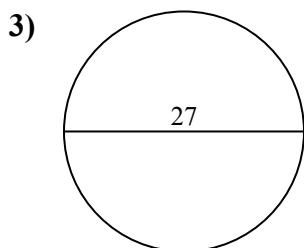
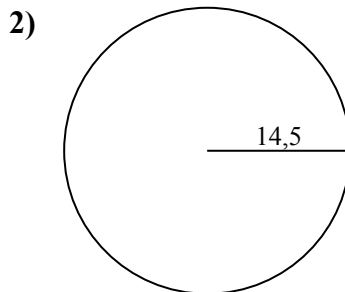
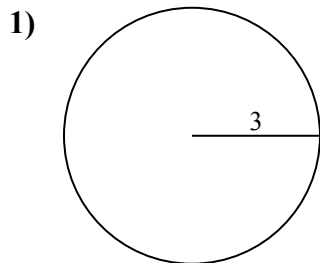
1. 18,85 cm
2. 91,11 cm
3. 84,82 cm
4. 47,12 cm
5. 62,83 cm
6. 25,13 cm
7. 50,27 cm
8. 15,71 cm
9. 72,26 cm
10. 9,42 cm



Определите окружность каждого круга. Круги не являются шкалой.

72,26 cm	9,42 cm	18,85 cm	62,83 cm	50,27 cm
91,11 cm	47,12 cm	84,82 cm	15,71 cm	25,13 cm

ОТВЕТЫ



- 1. _____
- 2. _____
- 3. _____
- 4. _____
- 5. _____
- 6. _____
- 7. _____
- 8. _____
- 9. _____
- 10. _____