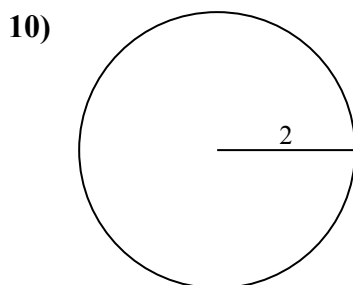
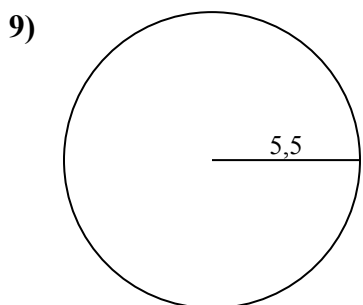
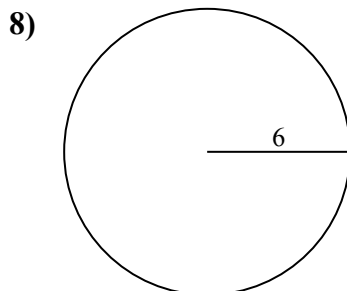
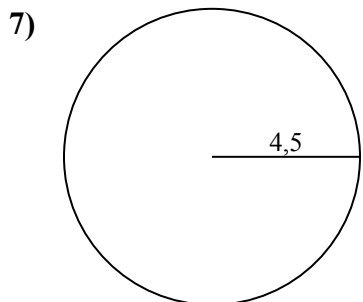
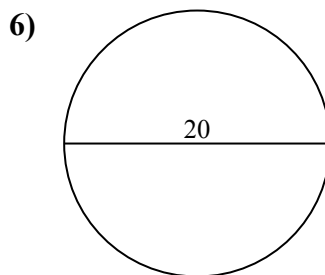
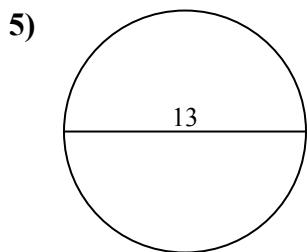
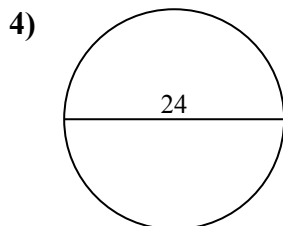
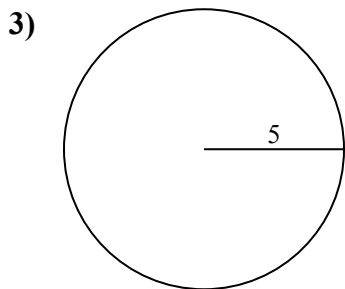
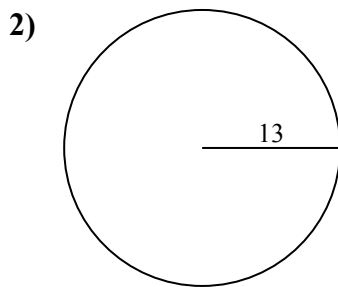
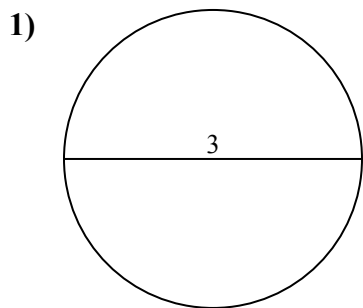




Определите окружность каждого круга. Круги не являются шкалой.

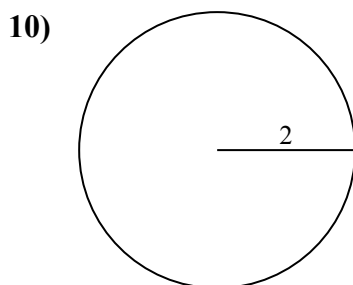
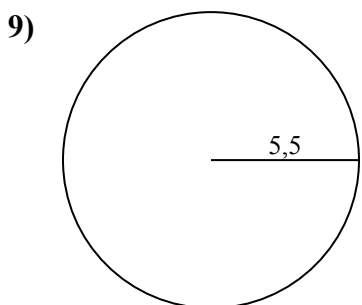
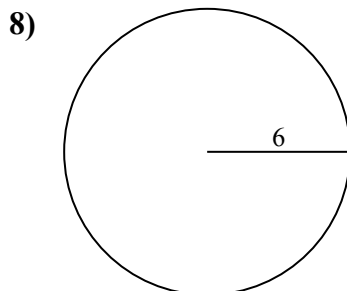
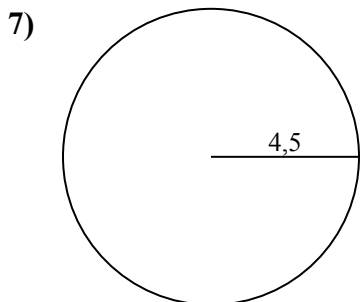
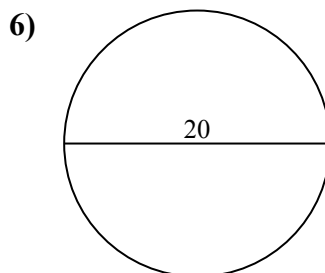
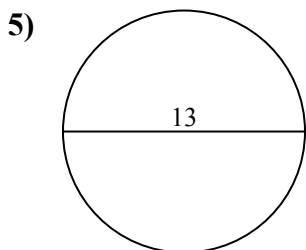
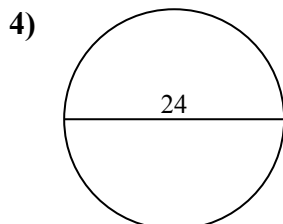
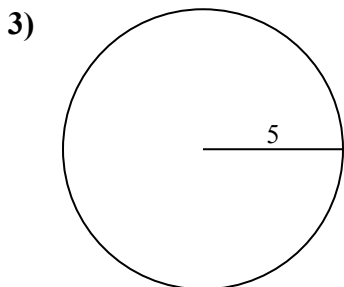
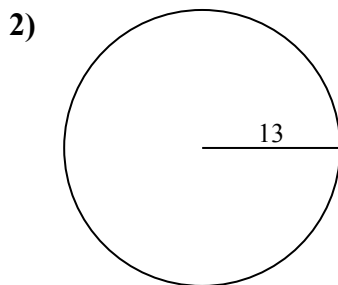
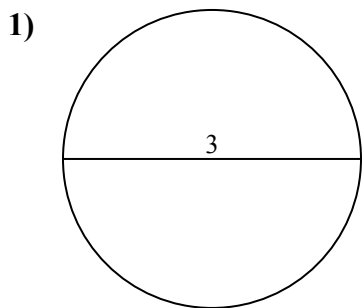


Ответы

- 1. _____
- 2. _____
- 3. _____
- 4. _____
- 5. _____
- 6. _____
- 7. _____
- 8. _____
- 9. _____
- 10. _____



Определите окружность каждого круга. Круги не являются шкалой.

**ОТВЕТЫ**1. 9,42 см2. 81,68 см3. 31,42 см4. 75,4 см5. 40,84 см6. 62,83 см7. 28,27 см8. 37,7 см9. 34,56 см10. 12,57 см



Определите окружность каждого круга. Круги не являются шкалой.

12,57 cm

28,27 cm

62,83 cm

34,56 cm

81,68 cm

9,42 cm

37,7 cm

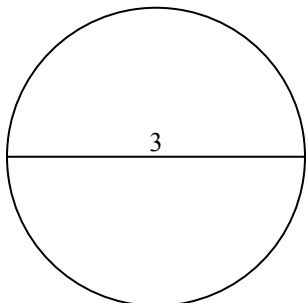
75,4 cm

31,42 cm

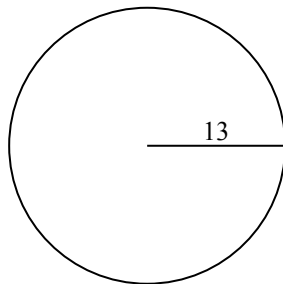
40,84 cm

ОТВЕТЫ

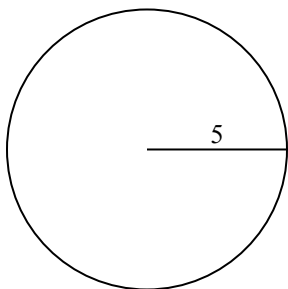
1)



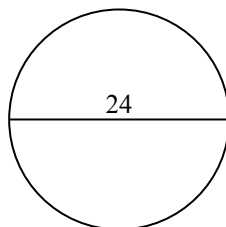
2)



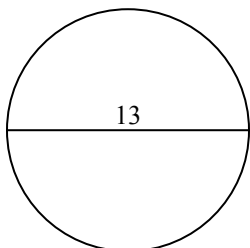
3)



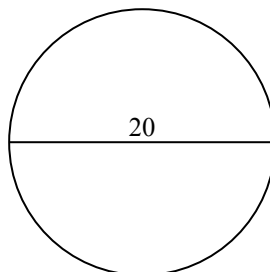
4)



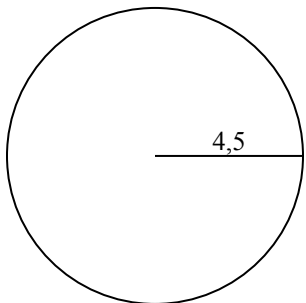
5)



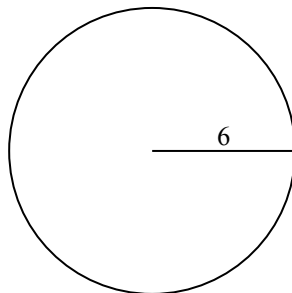
6)



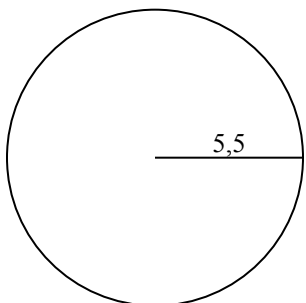
7)



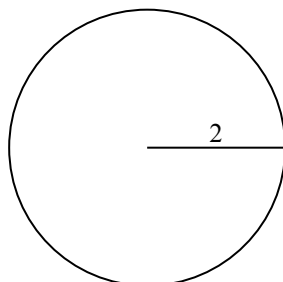
8)



9)



10)



- 1. _____
- 2. _____
- 3. _____
- 4. _____
- 5. _____
- 6. _____
- 7. _____
- 8. _____
- 9. _____
- 10. _____