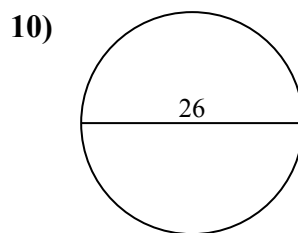
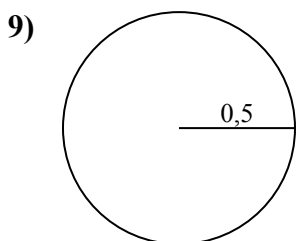
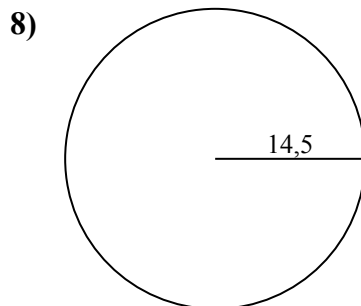
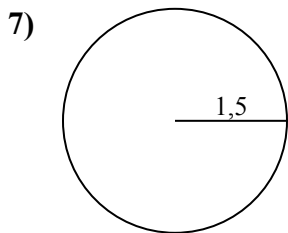
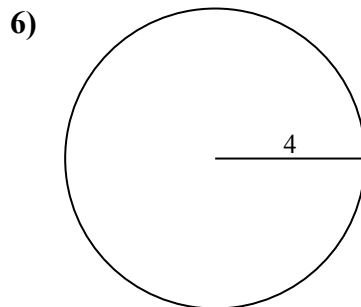
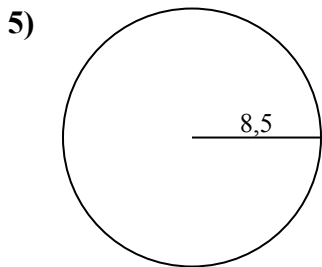
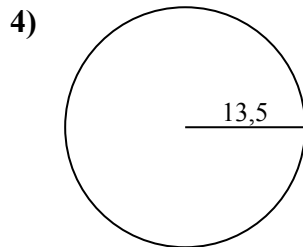
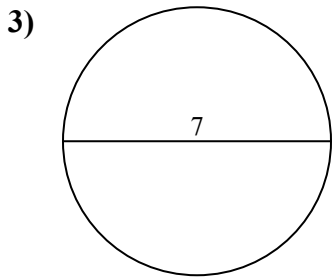
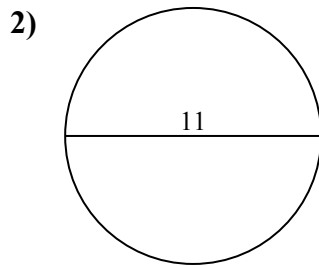
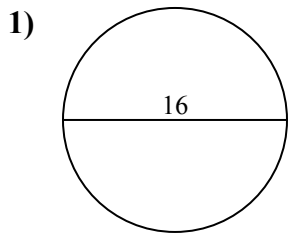




Определите окружность каждого круга. Круги не являются шкалой.

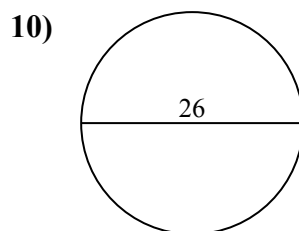
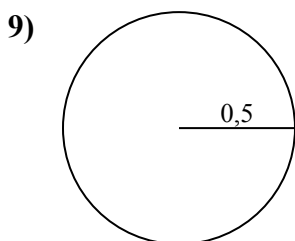
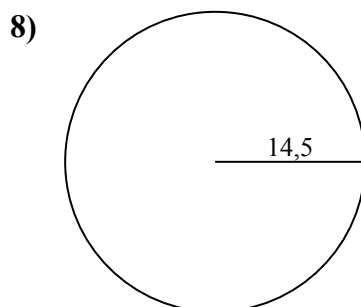
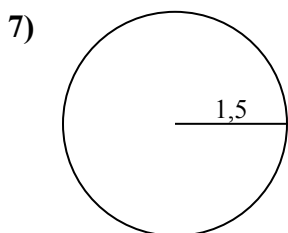
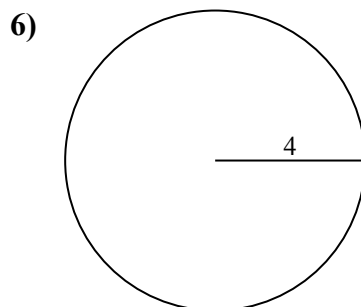
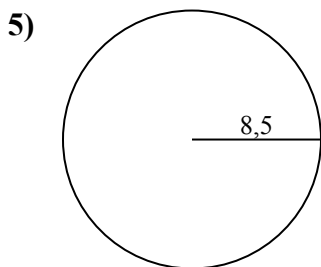
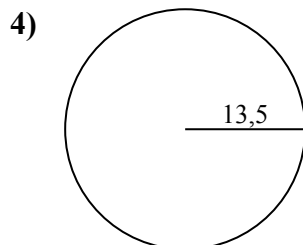
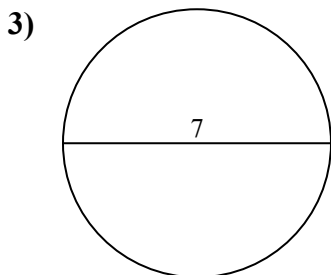
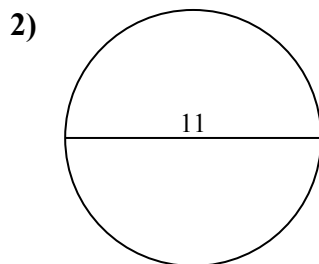
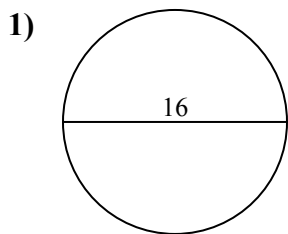


ОТВЕТЫ

- 1. _____
- 2. _____
- 3. _____
- 4. _____
- 5. _____
- 6. _____
- 7. _____
- 8. _____
- 9. _____
- 10. _____



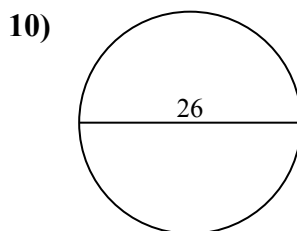
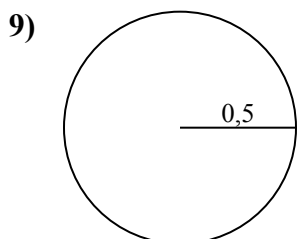
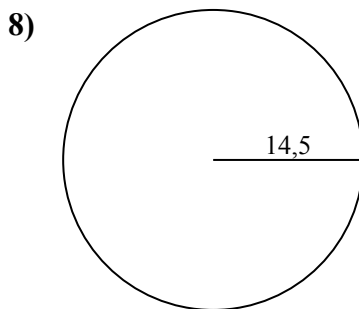
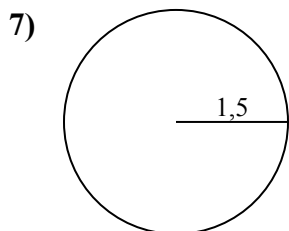
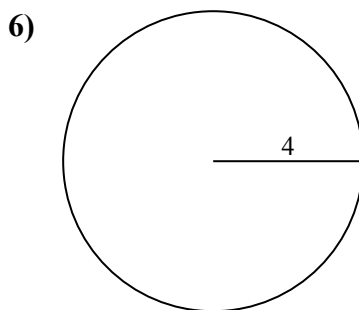
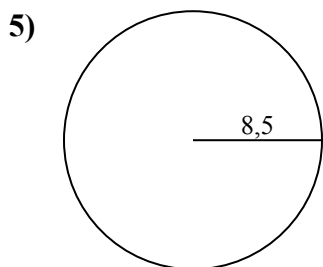
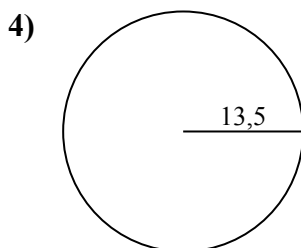
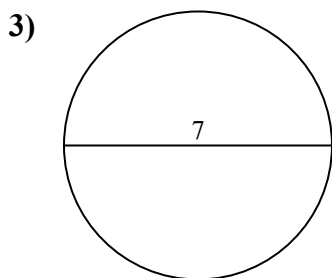
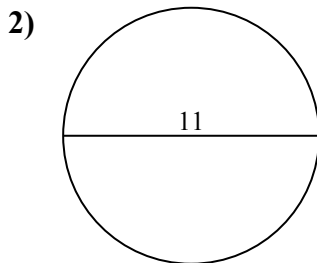
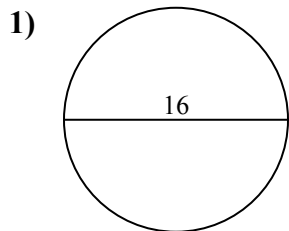
Определите окружность каждого круга. Круги не являются шкалой.

**ОТВЕТЫ**1. 50,27 см2. 34,56 см3. 21,99 см4. 84,82 см5. 53,41 см6. 25,13 см7. 9,42 см8. 91,11 см9. 3,14 см10. 81,68 см



Определите окружность каждого круга. Круги не являются шкалой.

25,13 cm	81,68 cm	53,41 cm	91,11 cm	50,27 cm
34,56 cm	9,42 cm	21,99 cm	3,14 cm	84,82 cm



ОТВЕТЫ

- 1. _____
- 2. _____
- 3. _____
- 4. _____
- 5. _____
- 6. _____
- 7. _____
- 8. _____
- 9. _____
- 10. _____