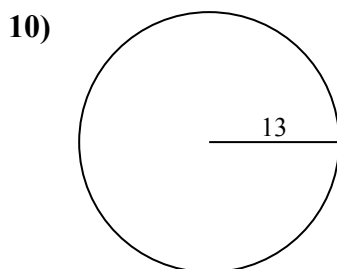
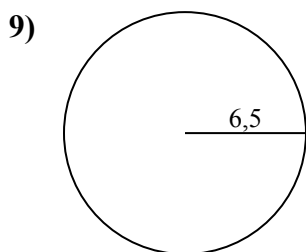
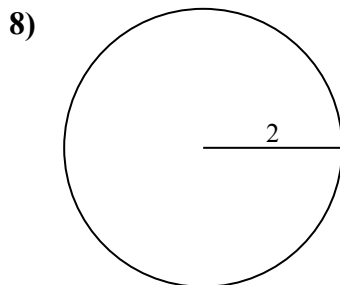
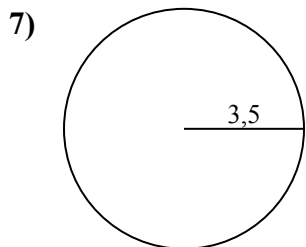
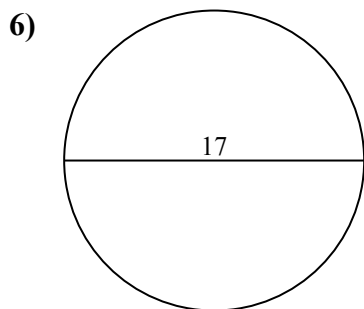
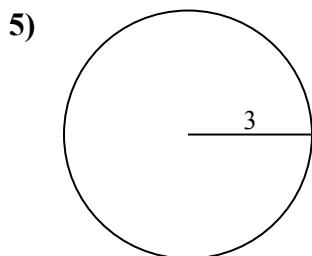
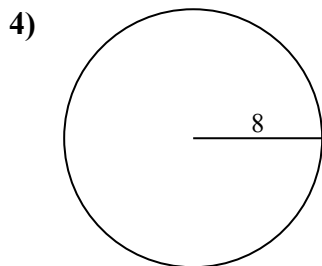
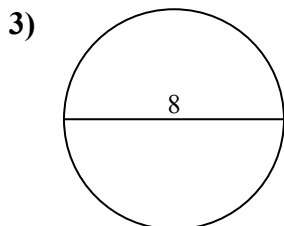
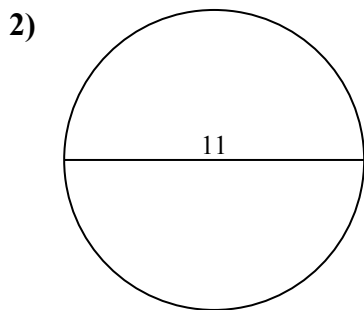
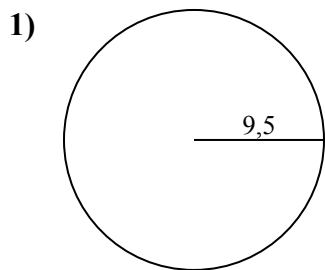




Определите окружность каждого круга. Круги не являются шкалой.

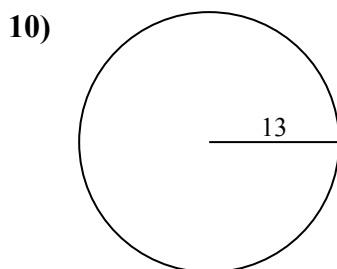
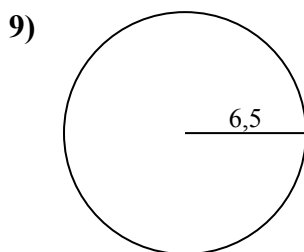
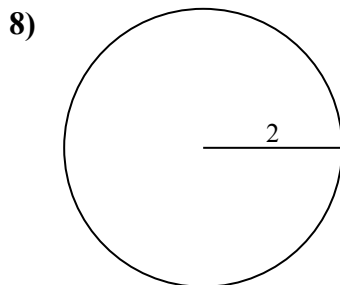
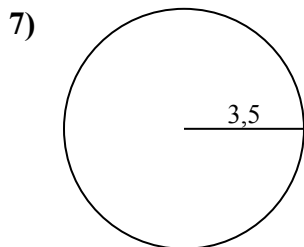
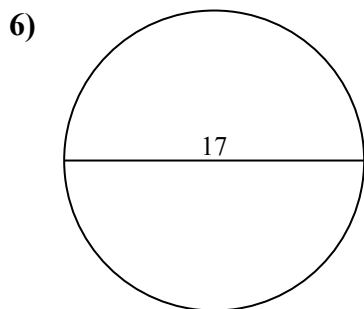
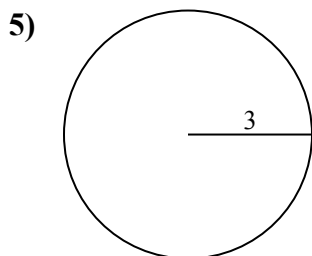
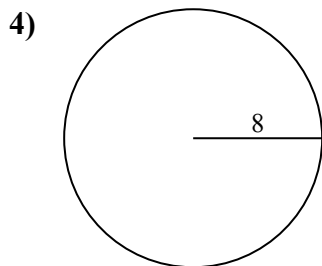
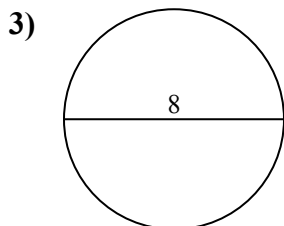
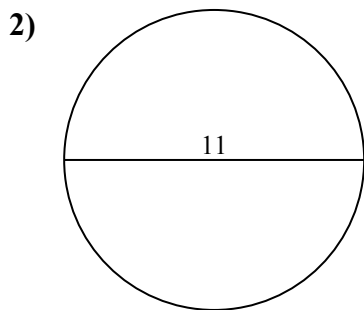
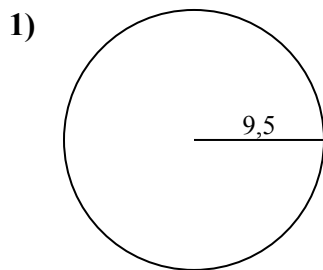


Ответы

- 1. _____
- 2. _____
- 3. _____
- 4. _____
- 5. _____
- 6. _____
- 7. _____
- 8. _____
- 9. _____
- 10. _____



Определите окружность каждого круга. Круги не являются шкалой.



ОТВЕТЫ

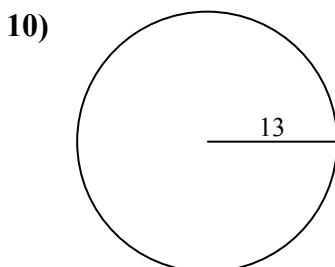
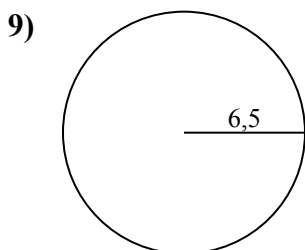
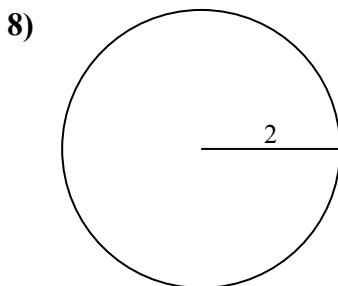
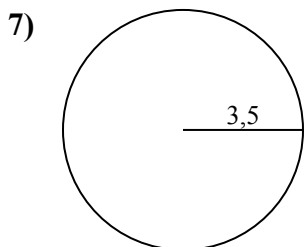
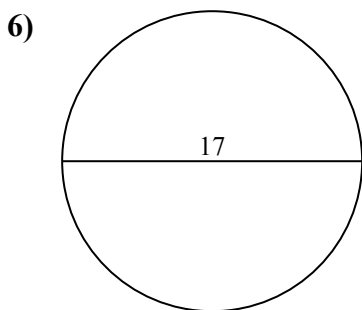
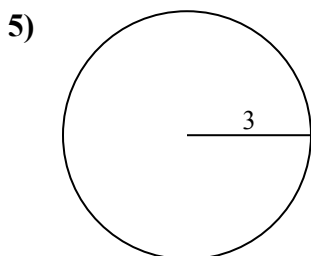
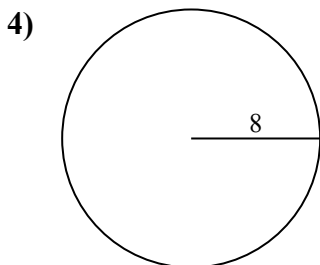
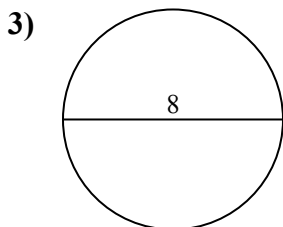
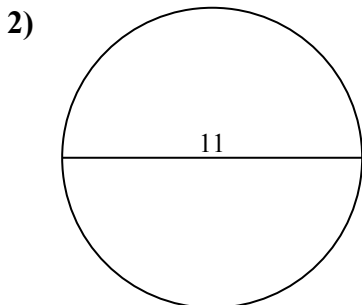
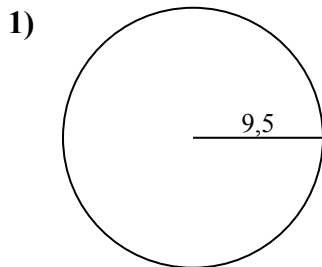
1. 59,69 cm
2. 34,56 cm
3. 25,13 cm
4. 50,27 cm
5. 18,85 cm
6. 53,41 cm
7. 21,99 cm
8. 12,57 cm
9. 40,84 cm
10. 81,68 cm



Определите окружность каждого круга. Круги не являются шкалой.

25,13 cm	53,41 cm	81,68 cm	34,56 cm	21,99 cm
18,85 cm	12,57 cm	40,84 cm	59,69 cm	50,27 cm

ОТВЕТЫ



- 1. _____
- 2. _____
- 3. _____
- 4. _____
- 5. _____
- 6. _____
- 7. _____
- 8. _____
- 9. _____
- 10. _____