
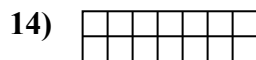
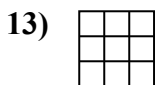
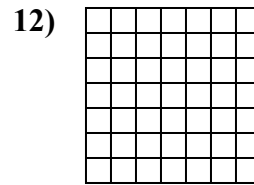
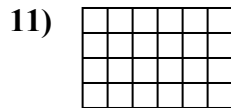
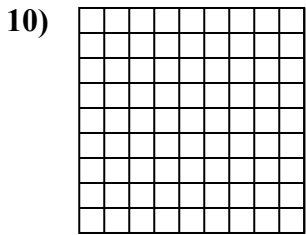
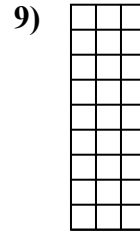
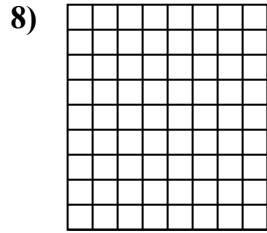
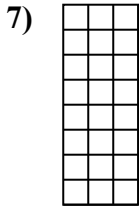
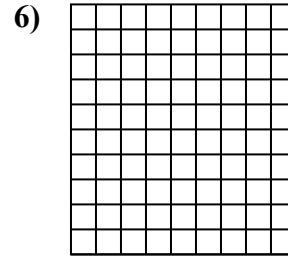
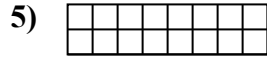
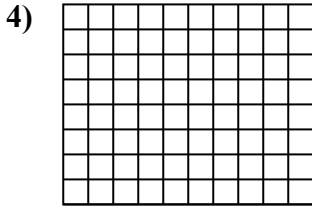
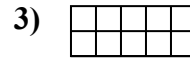
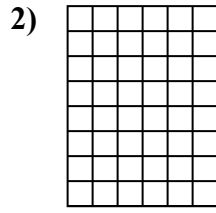
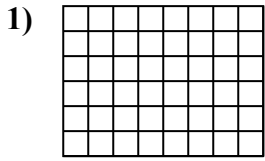




Определите площадь. Каждый блок= 1 единице (u²).

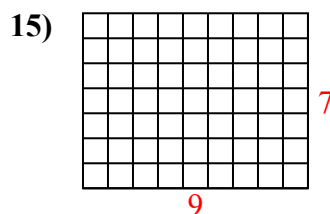
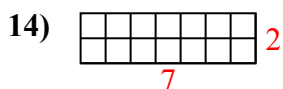
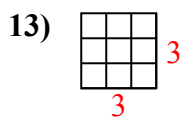
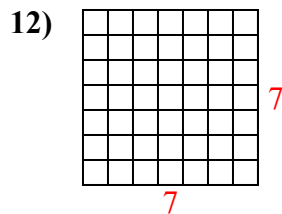
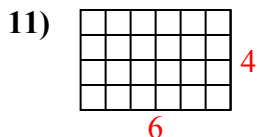
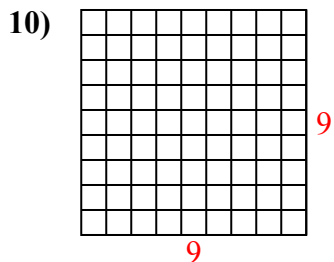
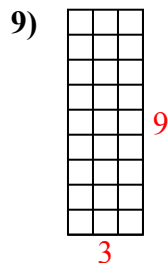
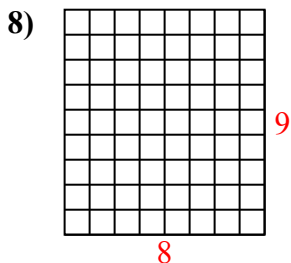
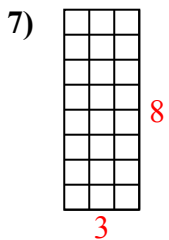
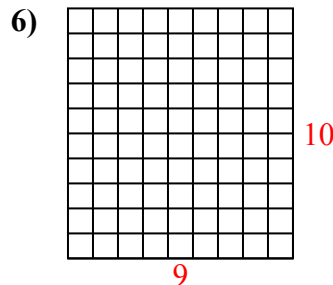
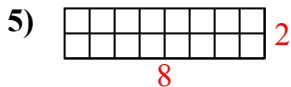
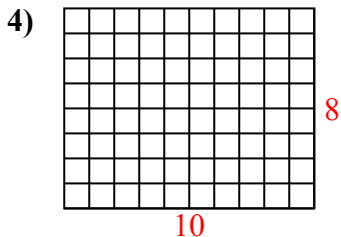
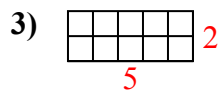
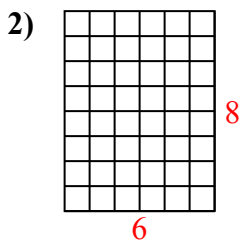
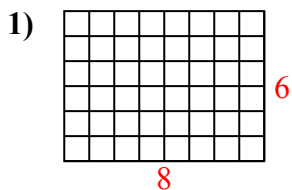


ОТВЕТЫ

1. _____
2. _____
3. _____
4. _____
5. _____
6. _____
7. _____
8. _____
9. _____
10. _____
11. _____
12. _____
13. _____
14. _____
15. _____



Определите площадь. Каждый блок= 1 единице (u²).



ОТВЕТЫ

1. 48 u²

2. 48 u²

3. 10 u²

4. 80 u²

5. 16 u²

6. 90 u²

7. 24 u²

8. 72 u²

9. 27 u²

10. 81 u²

11. 24 u²

12. 49 u²

13. 9 u²

14. 14 u²

15. 63 u²