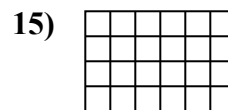
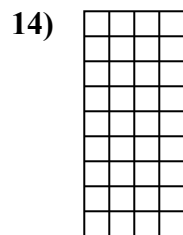
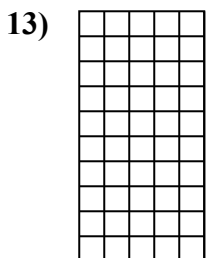
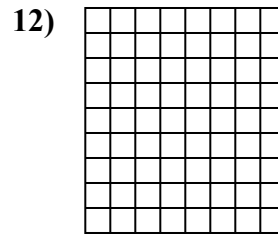
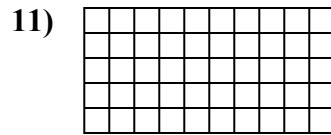
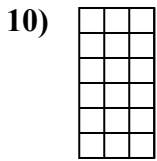
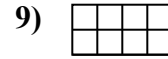


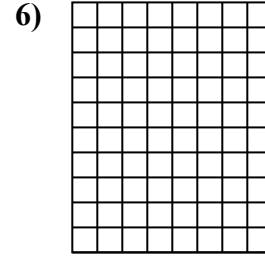
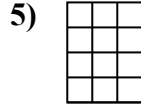
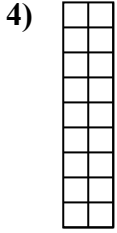
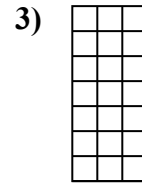
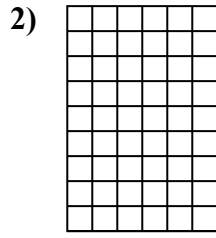
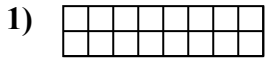




Определите площадь. Каждый блок = 1 единице (u<sup>2</sup>).



**ОТВЕТЫ**

1. \_\_\_\_\_

2. \_\_\_\_\_

3. \_\_\_\_\_

4. \_\_\_\_\_

5. \_\_\_\_\_

6. \_\_\_\_\_

7. \_\_\_\_\_

8. \_\_\_\_\_

9. \_\_\_\_\_

10. \_\_\_\_\_

11. \_\_\_\_\_

12. \_\_\_\_\_

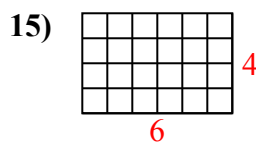
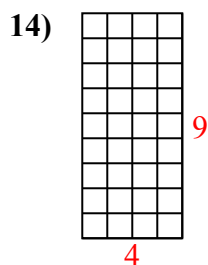
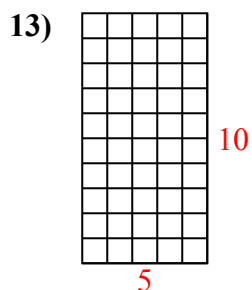
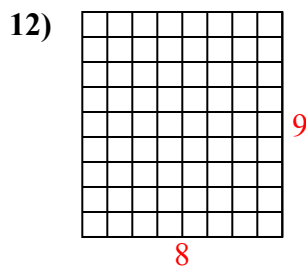
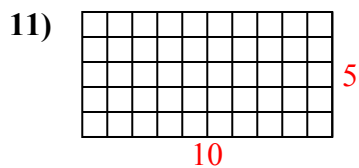
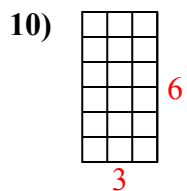
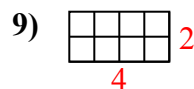
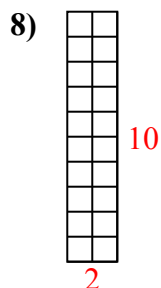
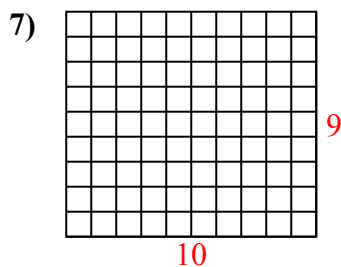
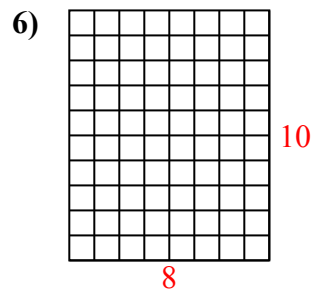
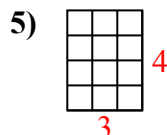
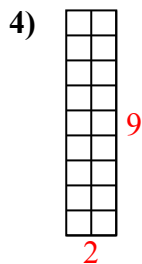
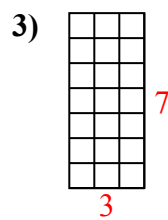
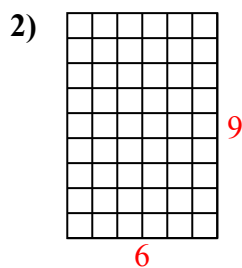
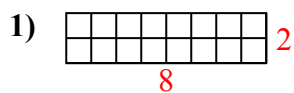
13. \_\_\_\_\_

14. \_\_\_\_\_

15. \_\_\_\_\_



Определите площадь. Каждый блок = 1 единице ( $u^2$ ).



**ОТВЕТЫ**

1. 16  $u^2$

2. 54  $u^2$

3. 21  $u^2$

4. 18  $u^2$

5. 12  $u^2$

6. 80  $u^2$

7. 90  $u^2$

8. 20  $u^2$

9. 8  $u^2$

10. 18  $u^2$

11. 50  $u^2$

12. 72  $u^2$

13. 50  $u^2$

14. 36  $u^2$

15. 24  $u^2$