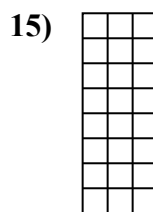



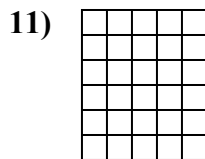
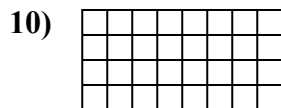
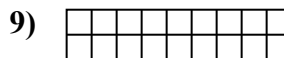
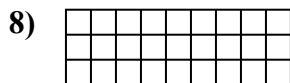
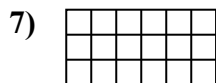

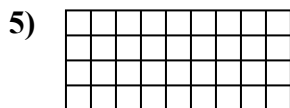
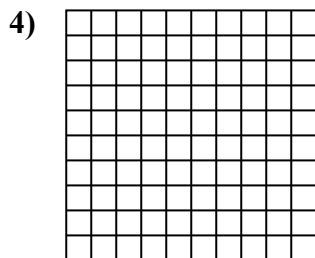
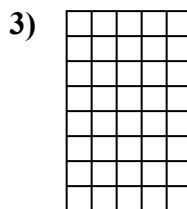
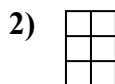





Определите площадь. Каждый блок= 1 единице (u²).



Отвeты

1. _____

2. _____

3. _____

4. _____

5. _____

6. _____

7. _____

8. _____

9. _____

10. _____

11. _____

12. _____

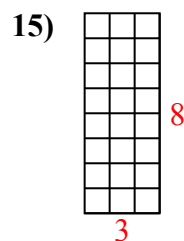
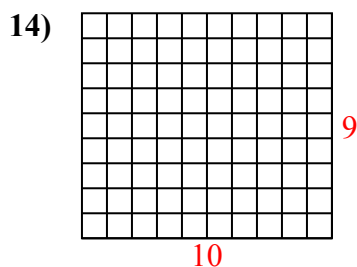
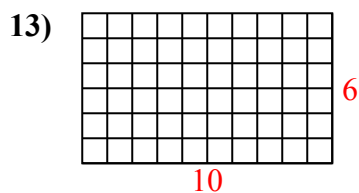
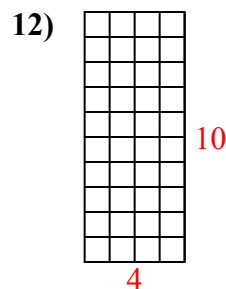
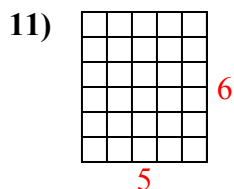
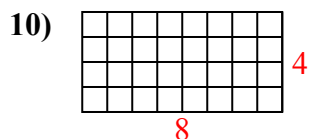
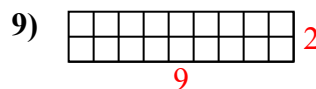
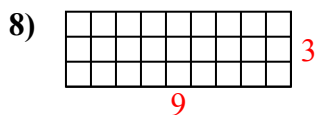
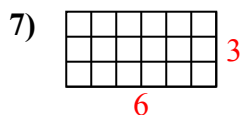
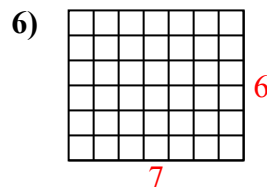
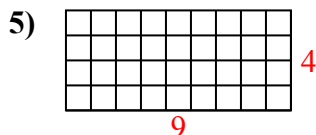
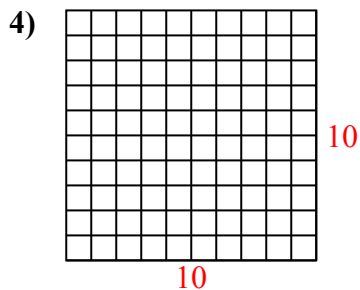
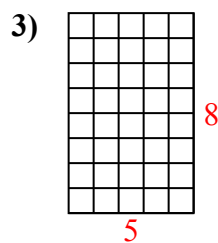
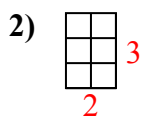
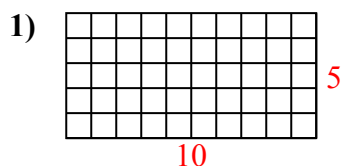
13. _____

14. _____

15. _____



Определите площадь. Каждый блок= 1 единице (u^2).



ОТВЕТЫ

1. 50 u^2

2. 6 u^2

3. 40 u^2

4. 100 u^2

5. 36 u^2

6. 42 u^2

7. 18 u^2

8. 27 u^2

9. 18 u^2

10. 32 u^2

11. 30 u^2

12. 40 u^2

13. 60 u^2

14. 90 u^2

15. 24 u^2