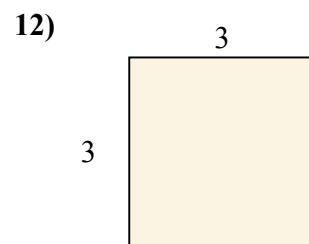
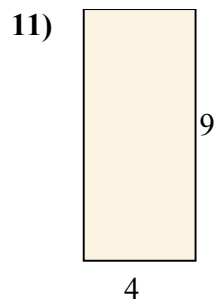
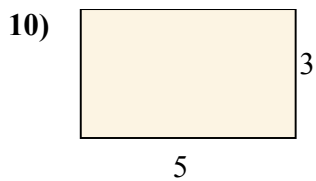
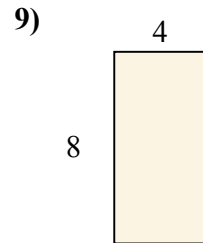
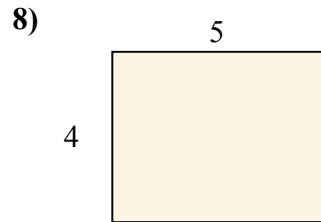
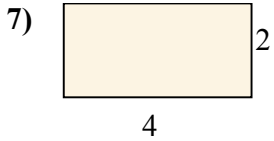
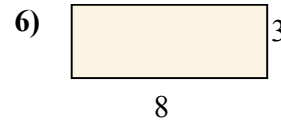
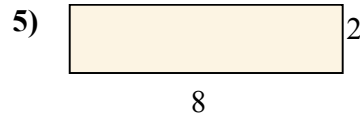
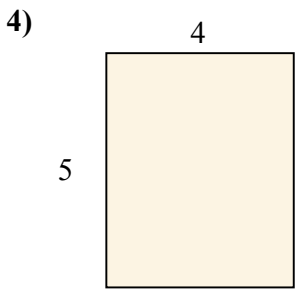
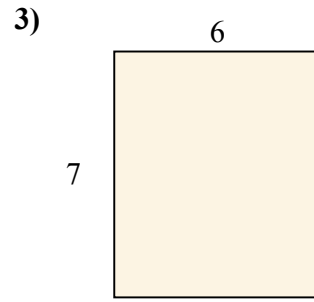
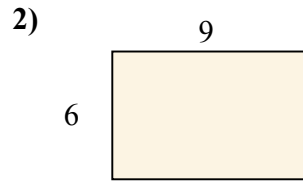
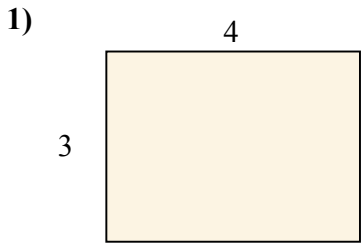




Определите площади прямоугольников.

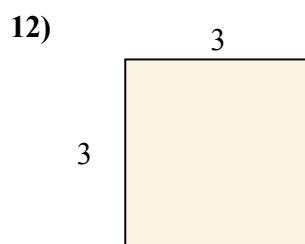
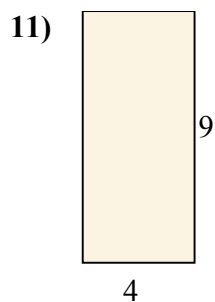
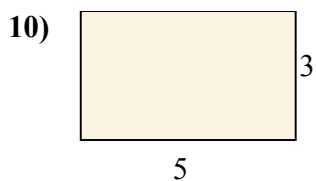
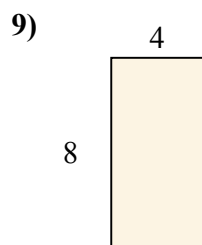
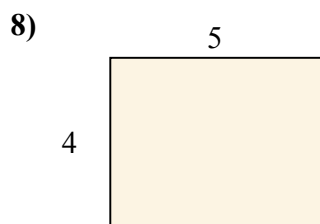
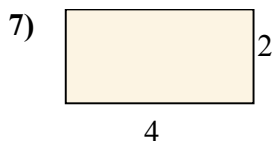
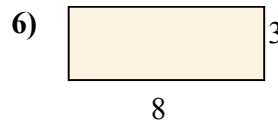
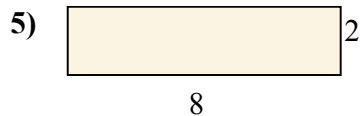
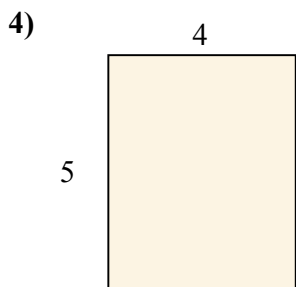
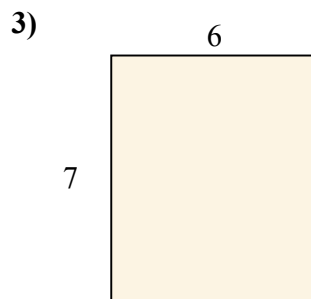
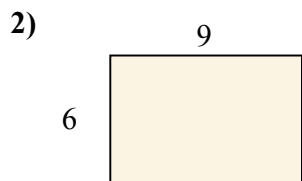
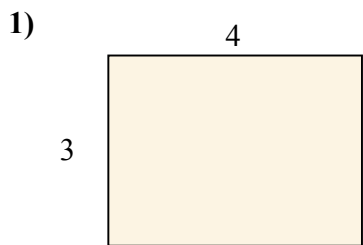
**ОТВЕТЫ**



- 1. \_\_\_\_\_
- 2. \_\_\_\_\_
- 3. \_\_\_\_\_
- 4. \_\_\_\_\_
- 5. \_\_\_\_\_
- 6. \_\_\_\_\_
- 7. \_\_\_\_\_
- 8. \_\_\_\_\_
- 9. \_\_\_\_\_
- 10. \_\_\_\_\_
- 11. \_\_\_\_\_
- 12. \_\_\_\_\_



Определите площади прямоугольников.



**Ответы**

1. 12

2. 54

3. 42

4. 20

5. 16

6. 24

7. 8

8. 20

9. 32

10. 15

11. 36

12. 9