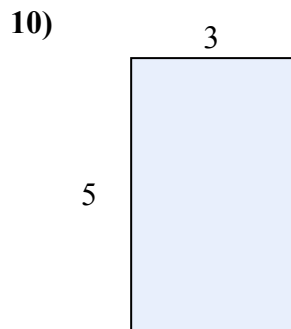
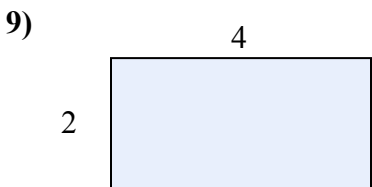
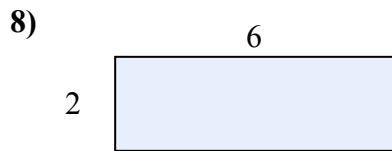
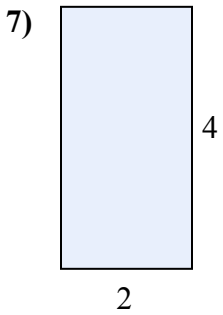
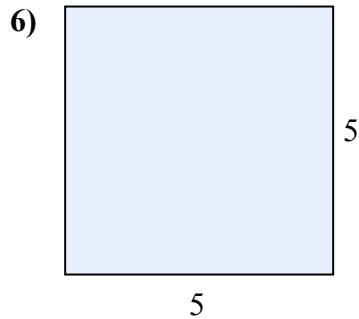
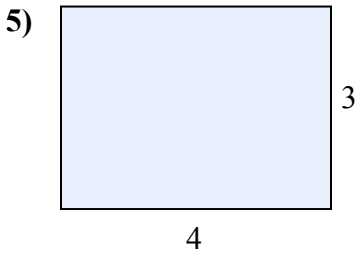
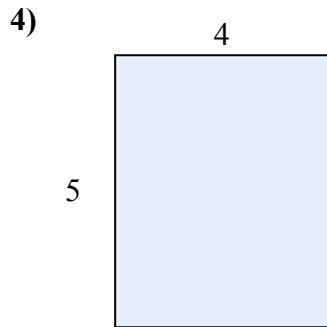
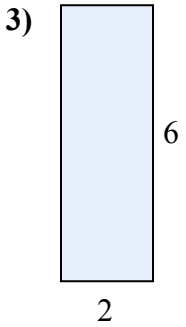
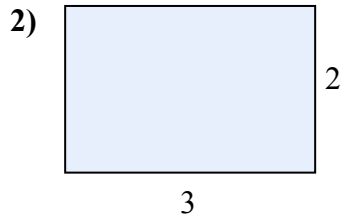
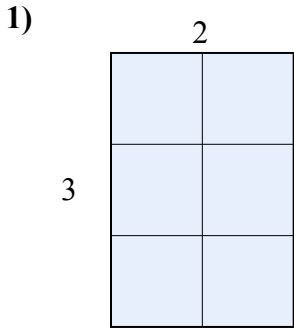




Определите площадь прямоугольников, разбивая на сектора. Первый уже разбит.

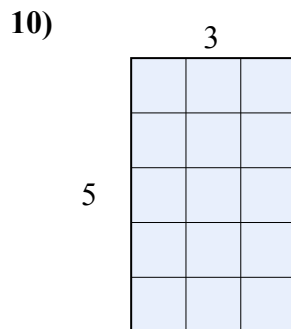
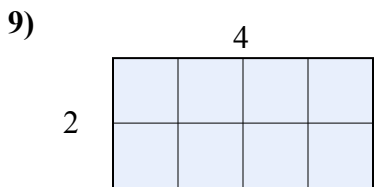
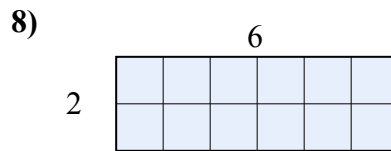
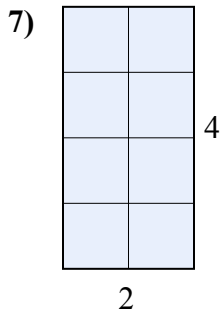
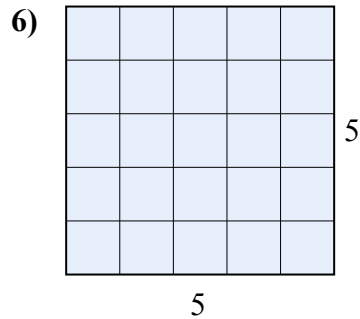
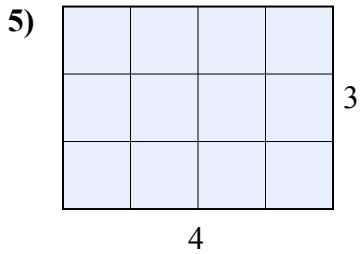
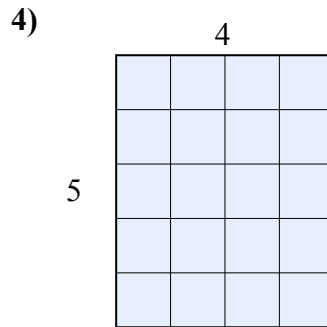
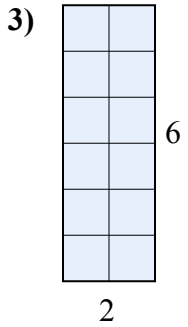
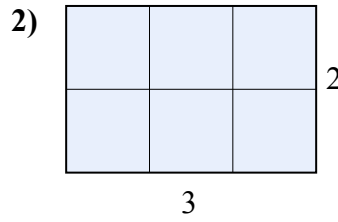
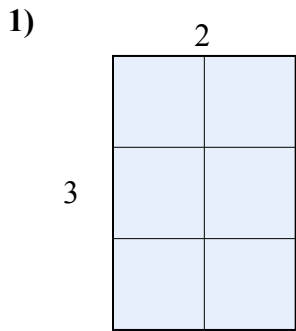
ОТВЕТЫ



- 1. \_\_\_\_\_
- 2. \_\_\_\_\_
- 3. \_\_\_\_\_
- 4. \_\_\_\_\_
- 5. \_\_\_\_\_
- 6. \_\_\_\_\_
- 7. \_\_\_\_\_
- 8. \_\_\_\_\_
- 9. \_\_\_\_\_
- 10. \_\_\_\_\_



Определите площадь прямоугольников, разбивая на сектора. Первый уже разбит.



**ОТВЕТЫ**

- 1. 6
- 2. 6
- 3. 12
- 4. 20
- 5. 12
- 6. 25
- 7. 8
- 8. 12
- 9. 8
- 10. 15