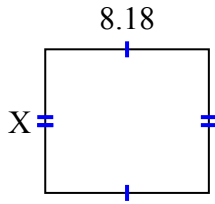




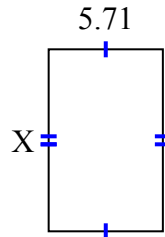
Найдите значение X для каждой цифры. Каждая цифра в сантиметрах (см). Не в масштабе.

ОТВЕТЫ

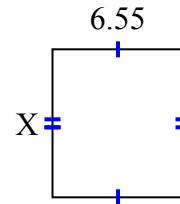
1) площадь = $58,7324 \text{ cm}^2$



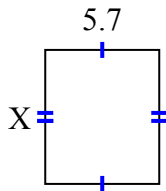
2) площадь = $51,961 \text{ cm}^2$



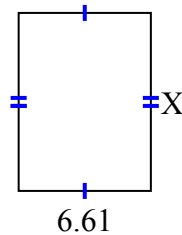
3) площадь = $48,47 \text{ cm}^2$



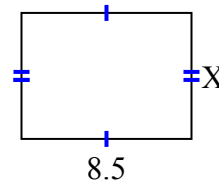
4) площадь = $38,19 \text{ cm}^2$



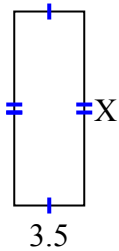
5) площадь = $58,829 \text{ cm}^2$



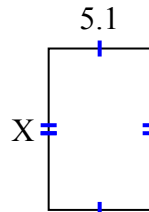
6) площадь = $53,55 \text{ cm}^2$



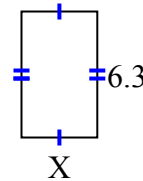
7) площадь = $33,95 \text{ cm}^2$



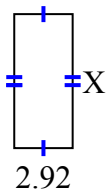
8) площадь = $41,157 \text{ cm}^2$



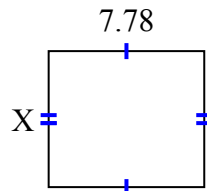
9) площадь = $23,877 \text{ cm}^2$



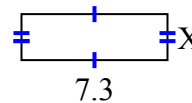
10) площадь = $19,564 \text{ cm}^2$



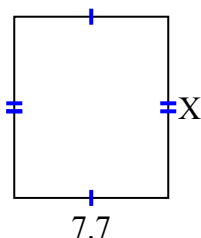
11) площадь = $52,904 \text{ cm}^2$



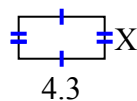
12) площадь = $16,79 \text{ cm}^2$



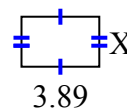
13) площадь = $69,762 \text{ cm}^2$



14) площадь = $9,03 \text{ cm}^2$



15) площадь = $9,725 \text{ cm}^2$

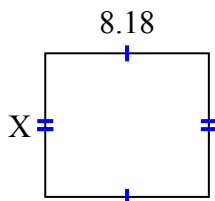


1. _____
2. _____
3. _____
4. _____
5. _____
6. _____
7. _____
8. _____
9. _____
10. _____
11. _____
12. _____
13. _____
14. _____
15. _____

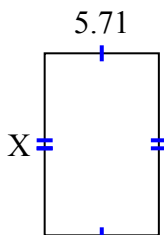


Найдите значение X для каждой цифры. Каждая цифра в сантиметрах (см). Не в масштабе.

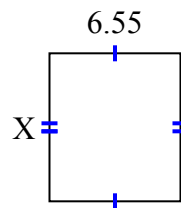
1) площадь = $58,7324 \text{ cm}^2$



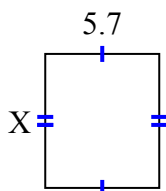
2) площадь = $51,961 \text{ cm}^2$



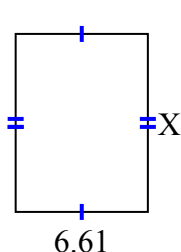
3) площадь = $48,47 \text{ cm}^2$



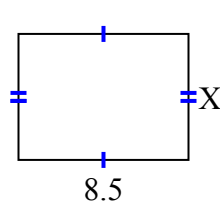
4) площадь = $38,19 \text{ cm}^2$



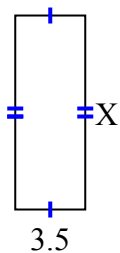
5) площадь = $58,829 \text{ cm}^2$



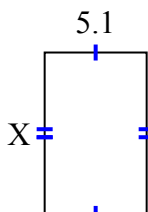
6) площадь = $53,55 \text{ cm}^2$



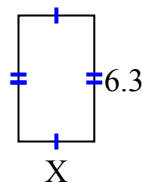
7) площадь = $33,95 \text{ cm}^2$



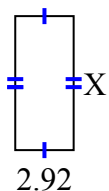
8) площадь = $41,157 \text{ cm}^2$



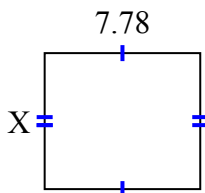
9) площадь = $23,877 \text{ cm}^2$



10) площадь = $19,564 \text{ cm}^2$



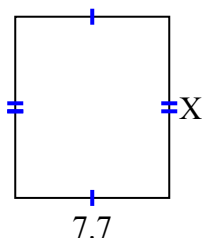
11) площадь = $52,904 \text{ cm}^2$



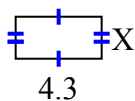
12) площадь = $16,79 \text{ cm}^2$



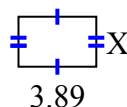
13) площадь = $69,762 \text{ cm}^2$



14) площадь = $9,03 \text{ cm}^2$



15) площадь = $9,725 \text{ cm}^2$

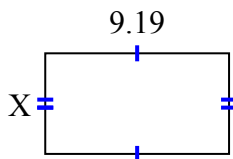
**ОТВЕТЫ**1. 7.182. 9.13. 7.44. 6.75. 8.96. 6.37. 9.78. 8.079. 3.7910. 6.711. 6.812. 2.313. 9.0614. 2.115. 2.5



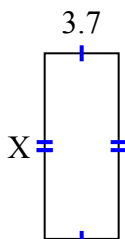
Найдите значение X для каждой цифры. Каждая цифра в сантиметрах (см). Не в масштабе.

ОТВЕТЫ

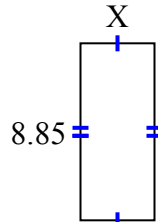
1) площадь = $46,2257 \text{ cm}^2$



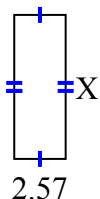
2) площадь = $34,336 \text{ cm}^2$



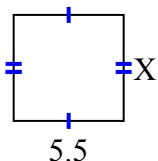
3) площадь = $32,745 \text{ cm}^2$



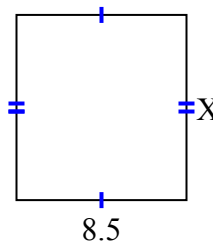
4) площадь = $18,504 \text{ cm}^2$



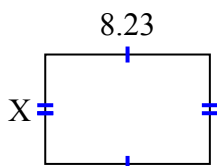
5) площадь = $29,15 \text{ cm}^2$



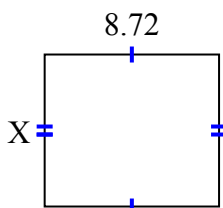
6) площадь = $78,71 \text{ cm}^2$



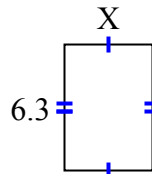
7) площадь = $45,0181 \text{ cm}^2$



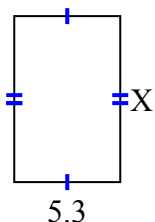
8) площадь = $66,272 \text{ cm}^2$



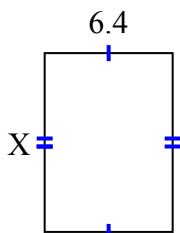
9) площадь = $27,72 \text{ cm}^2$



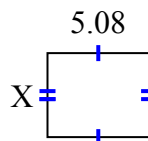
10) площадь = $43,99 \text{ cm}^2$



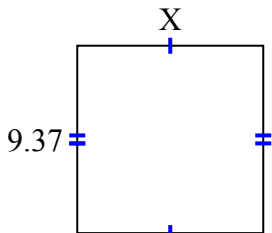
11) площадь = $57,216 \text{ cm}^2$



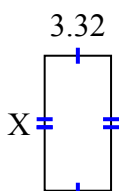
12) площадь = $21,336 \text{ cm}^2$



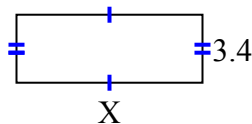
13) площадь = $87,141 \text{ cm}^2$



14) площадь = $22,41 \text{ cm}^2$



15) площадь = $31,62 \text{ cm}^2$

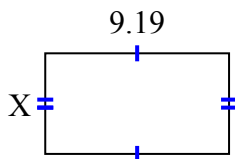


1. _____
2. _____
3. _____
4. _____
5. _____
6. _____
7. _____
8. _____
9. _____
10. _____
11. _____
12. _____
13. _____
14. _____
15. _____

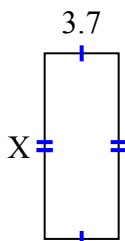


Найдите значение X для каждой цифры. Каждая цифра в сантиметрах (см). Не в масштабе.

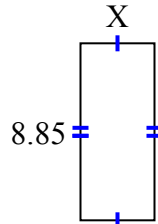
1) площадь = $46,2257 \text{ cm}^2$



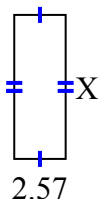
2) площадь = $34,336 \text{ cm}^2$



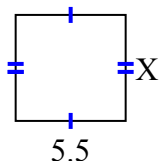
3) площадь = $32,745 \text{ cm}^2$



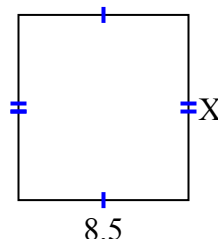
4) площадь = $18,504 \text{ cm}^2$



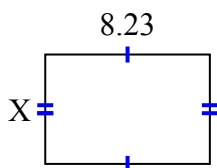
5) площадь = $29,15 \text{ cm}^2$



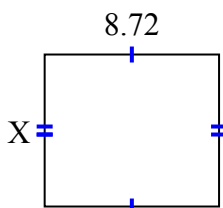
6) площадь = $78,71 \text{ cm}^2$



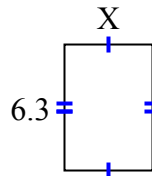
7) площадь = $45,0181 \text{ cm}^2$



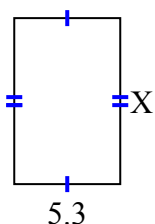
8) площадь = $66,272 \text{ cm}^2$



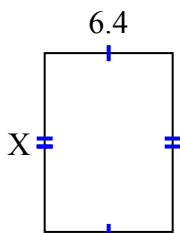
9) площадь = $27,72 \text{ cm}^2$



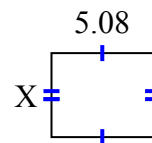
10) площадь = $43,99 \text{ cm}^2$



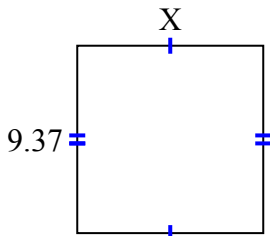
11) площадь = $57,216 \text{ cm}^2$



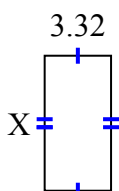
12) площадь = $21,336 \text{ cm}^2$



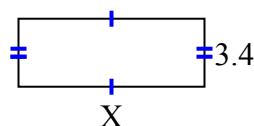
13) площадь = $87,141 \text{ cm}^2$



14) площадь = $22,41 \text{ cm}^2$



15) площадь = $31,62 \text{ cm}^2$

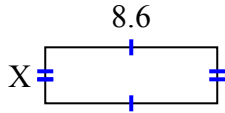
**ОТВЕТЫ**1. 5.032. 9.283. 3.74. 7.25. 5.36. 9.267. 5.478. 7.69. 4.410. 8.311. 8.9412. 4.213. 9.314. 6.7515. 9.3



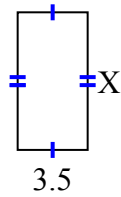
Найдите значение X для каждой цифры. Каждая цифра в сантиметрах (см). Не в масштабе.

ОТВЕТЫ

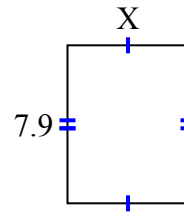
1) площадь = $24,08 \text{ cm}^2$



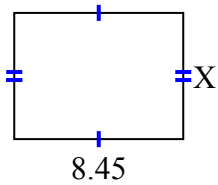
2) площадь = $24,08 \text{ cm}^2$



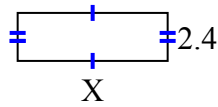
3) площадь = $47,795 \text{ cm}^2$



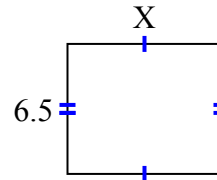
4) площадь = $53,3195 \text{ cm}^2$



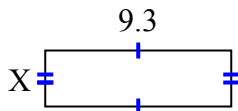
5) площадь = 18 cm^2



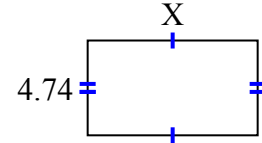
6) площадь = $50,05 \text{ cm}^2$



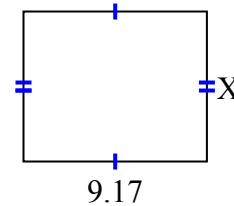
7) площадь = $26,04 \text{ cm}^2$



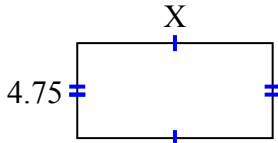
8) площадь = $40,29 \text{ cm}^2$



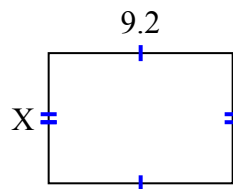
9) площадь = $68,775 \text{ cm}^2$



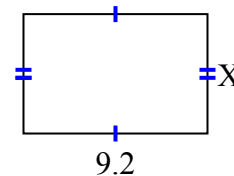
10) площадь = $46,4075 \text{ cm}^2$



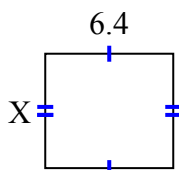
11) площадь = $59,892 \text{ cm}^2$



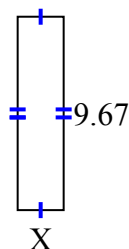
12) площадь = $54,924 \text{ cm}^2$



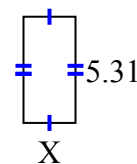
13) площадь = $36,608 \text{ cm}^2$



14) площадь = $22,241 \text{ cm}^2$



15) площадь = $13,806 \text{ cm}^2$

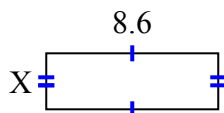


1. _____
2. _____
3. _____
4. _____
5. _____
6. _____
7. _____
8. _____
9. _____
10. _____
11. _____
12. _____
13. _____
14. _____
15. _____

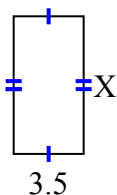


Найдите значение X для каждой цифры. Каждая цифра в сантиметрах (см). Не в масштабе.

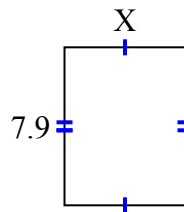
1) площадь = $24,08 \text{ cm}^2$



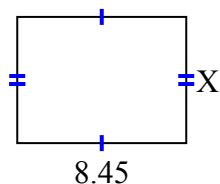
2) площадь = $24,08 \text{ cm}^2$



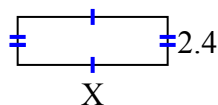
3) площадь = $47,795 \text{ cm}^2$



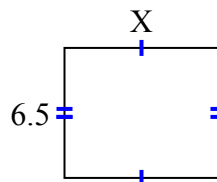
4) площадь = $53,3195 \text{ cm}^2$



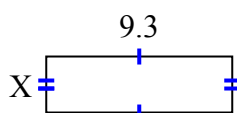
5) площадь = 18 cm^2



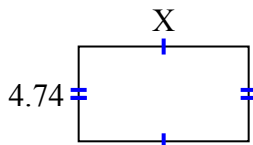
6) площадь = $50,05 \text{ cm}^2$



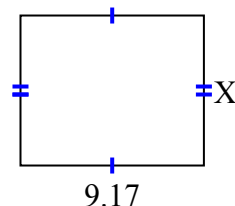
7) площадь = $26,04 \text{ cm}^2$



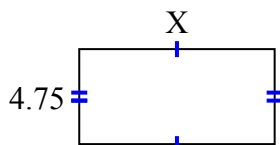
8) площадь = $40,29 \text{ cm}^2$



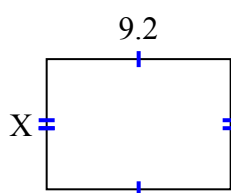
9) площадь = $68,775 \text{ cm}^2$



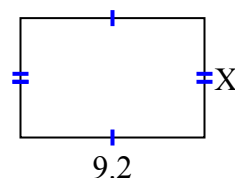
10) площадь = $46,4075 \text{ cm}^2$



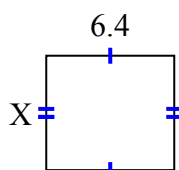
11) площадь = $59,892 \text{ cm}^2$



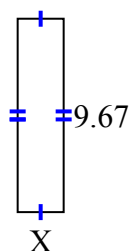
12) площадь = $54,924 \text{ cm}^2$



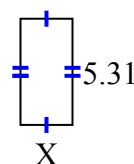
13) площадь = $36,608 \text{ cm}^2$



14) площадь = $22,241 \text{ cm}^2$



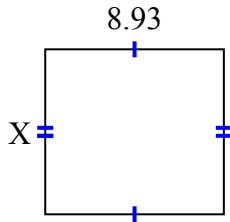
15) площадь = $13,806 \text{ cm}^2$

**ОТВЕТЫ**1. 2.82. 6.883. 6.054. 6.315. 7.56. 7.77. 2.88. 8.59. 7.510. 9.7711. 6.5112. 5.9713. 5.7214. 2.315. 2.6

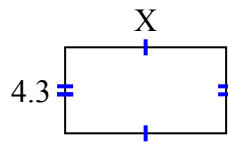


Найдите значение X для каждой цифры. Каждая цифра в сантиметрах (см). Не в масштабе.

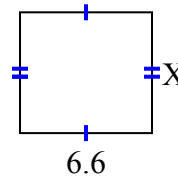
1) площадь = $73,6725 \text{ cm}^2$



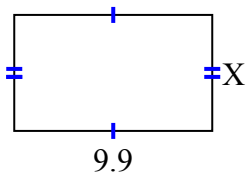
2) площадь = $34,615 \text{ cm}^2$



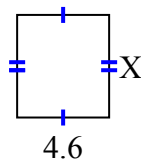
3) площадь = $39,864 \text{ cm}^2$



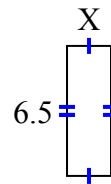
4) площадь = $57,42 \text{ cm}^2$



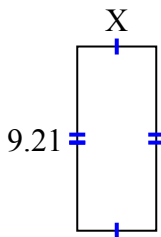
5) площадь = $23,598 \text{ cm}^2$



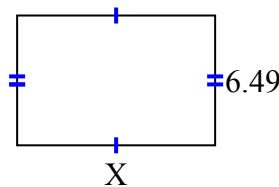
6) площадь = $14,3 \text{ cm}^2$



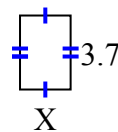
7) площадь = $36,3795 \text{ cm}^2$



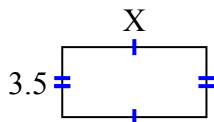
8) площадь = $64,251 \text{ cm}^2$



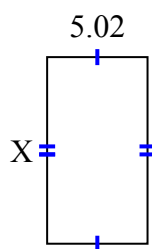
9) площадь = $9,361 \text{ cm}^2$



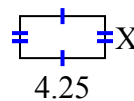
10) площадь = $25,235 \text{ cm}^2$



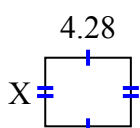
11) площадь = $46,8366 \text{ cm}^2$



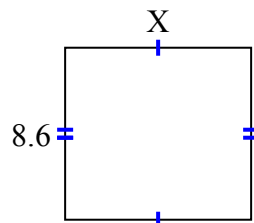
12) площадь = $8,925 \text{ cm}^2$



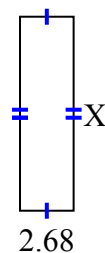
13) площадь = $14,6804 \text{ cm}^2$



14) площадь = $79,98 \text{ cm}^2$



15) площадь = $25,996 \text{ cm}^2$

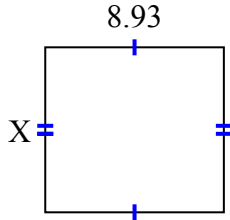
ОТВЕТЫ

1. _____
2. _____
3. _____
4. _____
5. _____
6. _____
7. _____
8. _____
9. _____
10. _____
11. _____
12. _____
13. _____
14. _____
15. _____

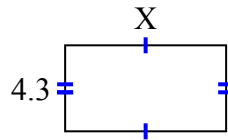


Найдите значение X для каждой цифры. Каждая цифра в сантиметрах (см). Не в масштабе.

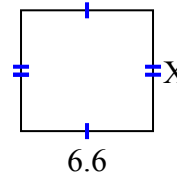
1) площадь = $73,6725 \text{ cm}^2$



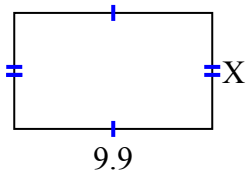
2) площадь = $34,615 \text{ cm}^2$



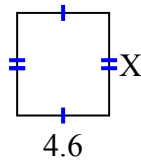
3) площадь = $39,864 \text{ cm}^2$



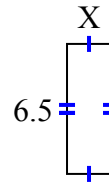
4) площадь = $57,42 \text{ cm}^2$



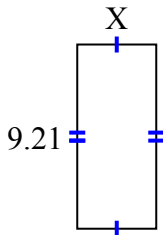
5) площадь = $23,598 \text{ cm}^2$



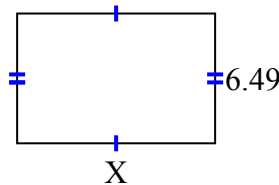
6) площадь = $14,3 \text{ cm}^2$



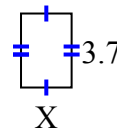
7) площадь = $36,3795 \text{ cm}^2$



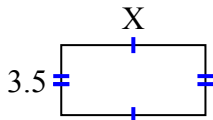
8) площадь = $64,251 \text{ cm}^2$



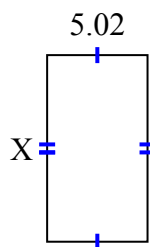
9) площадь = $9,361 \text{ cm}^2$



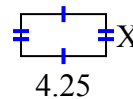
10) площадь = $25,235 \text{ cm}^2$



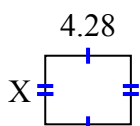
11) площадь = $46,8366 \text{ cm}^2$



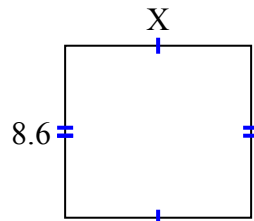
12) площадь = $8,925 \text{ cm}^2$



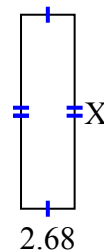
13) площадь = $14,6804 \text{ cm}^2$



14) площадь = $79,98 \text{ cm}^2$



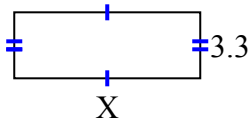
15) площадь = $25,996 \text{ cm}^2$

**ОТВЕТЫ**1. 8.252. 8.053. 6.044. 5.85. 5.136. 2.27. 3.958. 9.99. 2.5310. 7.2111. 9.3312. 2.113. 3.4314. 9.315. 9.7

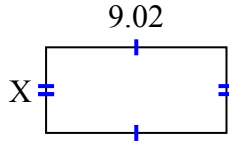


Найдите значение X для каждой цифры. Каждая цифра в сантиметрах (см). Не в масштабе.

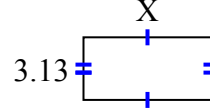
1) площадь = $30,69 \text{ cm}^2$



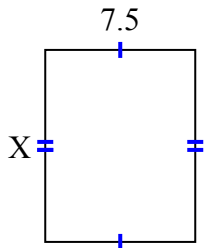
2) площадь = $38,6056 \text{ cm}^2$



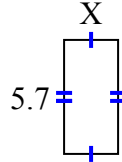
3) площадь = $20,032 \text{ cm}^2$



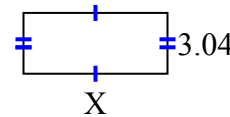
4) площадь = 72 cm^2



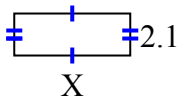
5) площадь = $15,39 \text{ cm}^2$



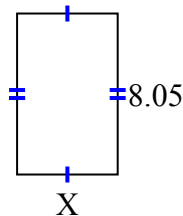
6) площадь = $21,888 \text{ cm}^2$



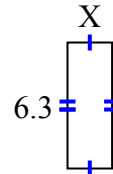
7) площадь = $12,18 \text{ cm}^2$



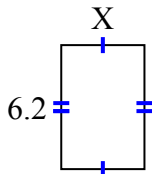
8) площадь = $40,4915 \text{ cm}^2$



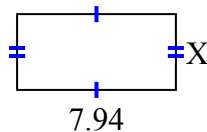
9) площадь = $14,049 \text{ cm}^2$



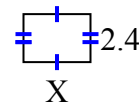
10) площадь = $25,792 \text{ cm}^2$



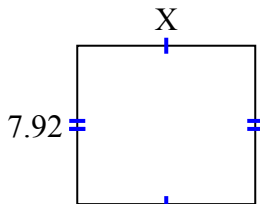
11) площадь = $30,0926 \text{ cm}^2$



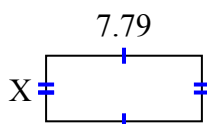
12) площадь = $8,04 \text{ cm}^2$



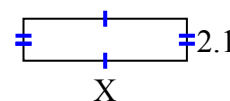
13) площадь = $70,488 \text{ cm}^2$



14) площадь = $25,5512 \text{ cm}^2$



15) площадь = $17,157 \text{ cm}^2$



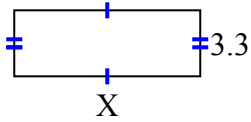
ОТВЕТЫ

1. _____
2. _____
3. _____
4. _____
5. _____
6. _____
7. _____
8. _____
9. _____
10. _____
11. _____
12. _____
13. _____
14. _____
15. _____

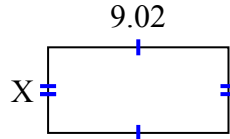


Найдите значение X для каждой цифры. Каждая цифра в сантиметрах (см). Не в масштабе.

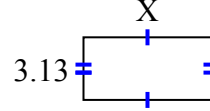
1) площадь = $30,69 \text{ cm}^2$



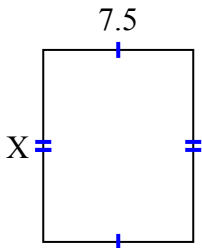
2) площадь = $38,6056 \text{ cm}^2$



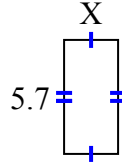
3) площадь = $20,032 \text{ cm}^2$



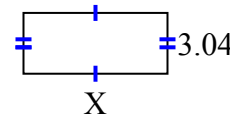
4) площадь = 72 cm^2



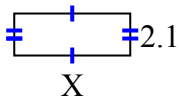
5) площадь = $15,39 \text{ cm}^2$



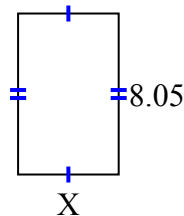
6) площадь = $21,888 \text{ cm}^2$



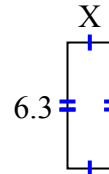
7) площадь = $12,18 \text{ cm}^2$



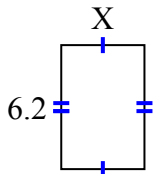
8) площадь = $40,4915 \text{ cm}^2$



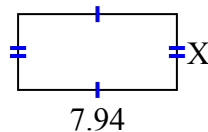
9) площадь = $14,049 \text{ cm}^2$



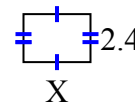
10) площадь = $25,792 \text{ cm}^2$



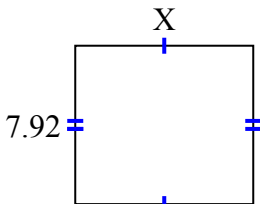
11) площадь = $30,0926 \text{ cm}^2$



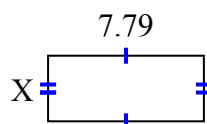
12) площадь = $8,04 \text{ cm}^2$



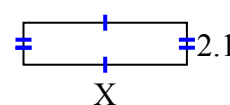
13) площадь = $70,488 \text{ cm}^2$



14) площадь = $25,5512 \text{ cm}^2$



15) площадь = $17,157 \text{ cm}^2$

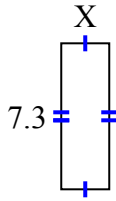
**ОТВЕТЫ**1. 9.32. 4.283. 6.44. 9.65. 2.76. 7.27. 5.88. 5.039. 2.2310. 4.1611. 3.7912. 3.3513. 8.914. 3.2815. 8.17



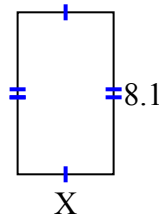
Найдите значение X для каждой цифры. Каждая цифра в сантиметрах (см). Не в масштабе.

ОТВЕТЫ

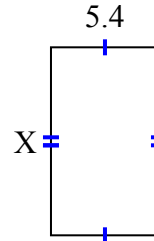
1) площадь = $17,52 \text{ cm}^2$



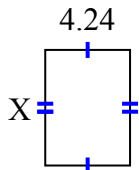
2) площадь = $38,88 \text{ cm}^2$



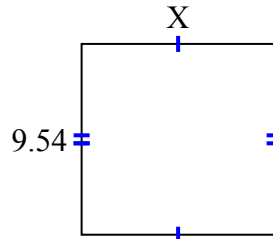
3) площадь = $50,76 \text{ cm}^2$



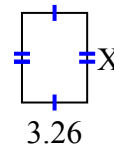
4) площадь = $24,5072 \text{ cm}^2$



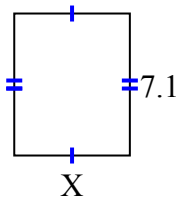
5) площадь = $92,061 \text{ cm}^2$



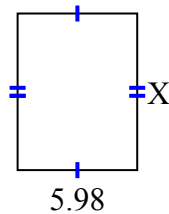
6) площадь = $14,6048 \text{ cm}^2$



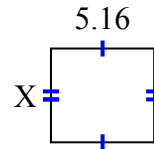
7) площадь = $41,038 \text{ cm}^2$



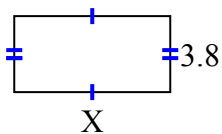
8) площадь = $46,8234 \text{ cm}^2$



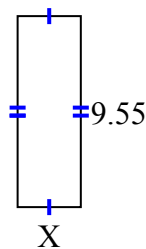
9) площадь = $24,2004 \text{ cm}^2$



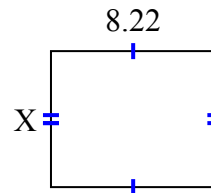
10) площадь = $29,64 \text{ cm}^2$



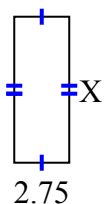
11) площадь = $30,178 \text{ cm}^2$



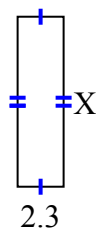
12) площадь = $55,896 \text{ cm}^2$



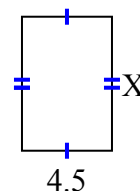
13) площадь = $20,075 \text{ cm}^2$



14) площадь = $19,55 \text{ cm}^2$



15) площадь = $30,15 \text{ cm}^2$

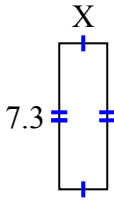


1. _____
2. _____
3. _____
4. _____
5. _____
6. _____
7. _____
8. _____
9. _____
10. _____
11. _____
12. _____
13. _____
14. _____
15. _____

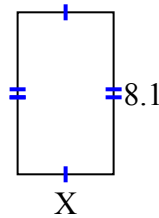


Найдите значение X для каждой цифры. Каждая цифра в сантиметрах (см). Не в масштабе.

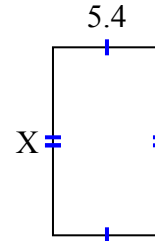
1) площадь = $17,52 \text{ cm}^2$



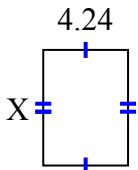
2) площадь = $38,88 \text{ cm}^2$



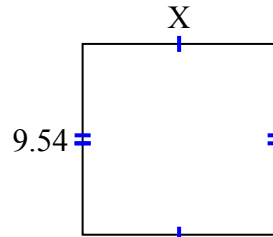
3) площадь = $50,76 \text{ cm}^2$



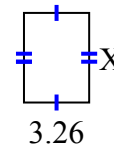
4) площадь = $24,5072 \text{ cm}^2$



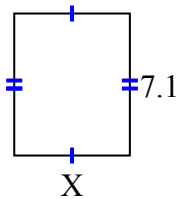
5) площадь = $92,061 \text{ cm}^2$



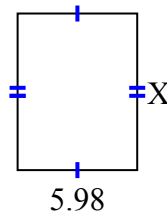
6) площадь = $14,6048 \text{ cm}^2$



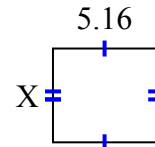
7) площадь = $41,038 \text{ cm}^2$



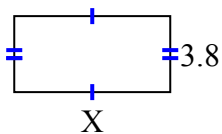
8) площадь = $46,8234 \text{ cm}^2$



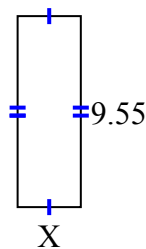
9) площадь = $24,2004 \text{ cm}^2$



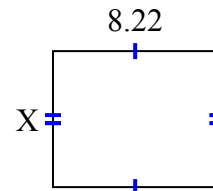
10) площадь = $29,64 \text{ cm}^2$



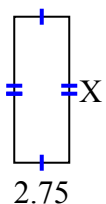
11) площадь = $30,178 \text{ cm}^2$



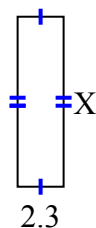
12) площадь = $55,896 \text{ cm}^2$



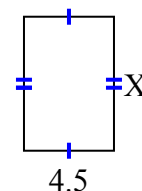
13) площадь = $20,075 \text{ cm}^2$



14) площадь = $19,55 \text{ cm}^2$



15) площадь = $30,15 \text{ cm}^2$

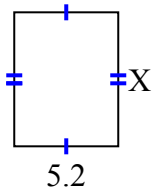
ОТВЕТЫ1. 2.42. 4.83. 9.44. 5.785. 9.656. 4.487. 5.788. 7.839. 4.6910. 7.811. 3.1612. 6.813. 7.314. 8.515. 6.7



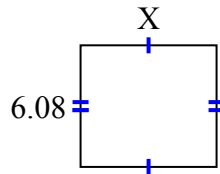
Найдите значение X для каждой цифры. Каждая цифра в сантиметрах (см). Не в масштабе.

ОТВЕТЫ

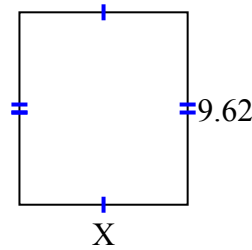
1) площадь = $34,84 \text{ cm}^2$



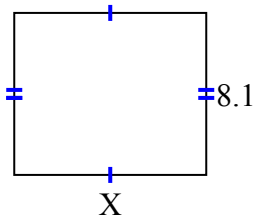
2) площадь = $41,344 \text{ cm}^2$



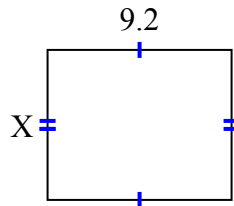
3) площадь = $80,9042 \text{ cm}^2$



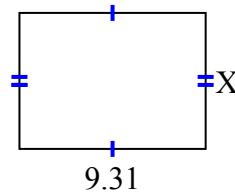
4) площадь = $77,76 \text{ cm}^2$



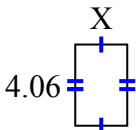
5) площадь = 69 cm^2



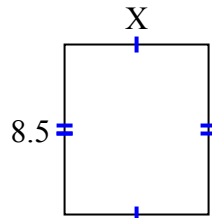
6) площадь = $63,308 \text{ cm}^2$



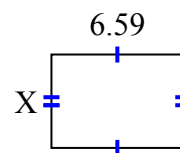
7) площадь = $10,556 \text{ cm}^2$



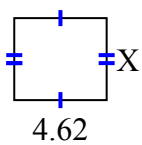
8) площадь = $61,2 \text{ cm}^2$



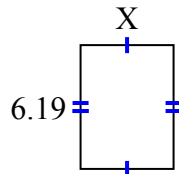
9) площадь = $30,7753 \text{ cm}^2$



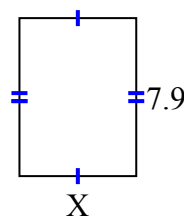
10) площадь = $18,942 \text{ cm}^2$



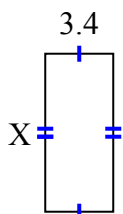
11) площадь = $28,7835 \text{ cm}^2$



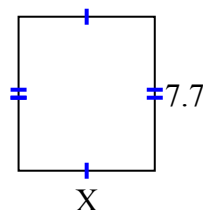
12) площадь = $46,136 \text{ cm}^2$



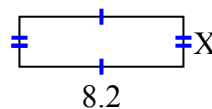
13) площадь = $26,86 \text{ cm}^2$



14) площадь = $52,437 \text{ cm}^2$



15) площадь = $20,5 \text{ cm}^2$

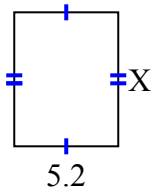


1. _____
2. _____
3. _____
4. _____
5. _____
6. _____
7. _____
8. _____
9. _____
10. _____
11. _____
12. _____
13. _____
14. _____
15. _____

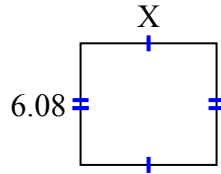


Найдите значение X для каждой цифры. Каждая цифра в сантиметрах (см). Не в масштабе.

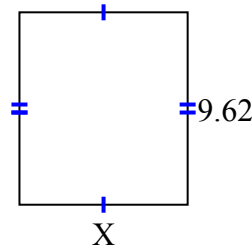
1) площадь = $34,84 \text{ cm}^2$



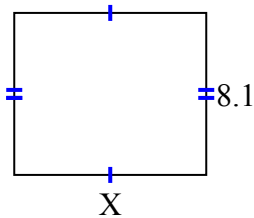
2) площадь = $41,344 \text{ cm}^2$



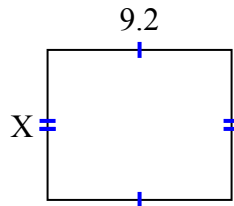
3) площадь = $80,9042 \text{ cm}^2$



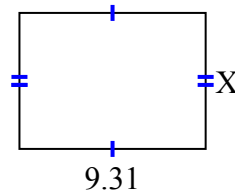
4) площадь = $77,76 \text{ cm}^2$



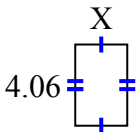
5) площадь = 69 cm^2



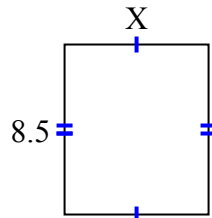
6) площадь = $63,308 \text{ cm}^2$



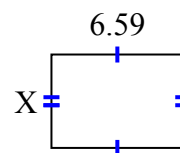
7) площадь = $10,556 \text{ cm}^2$



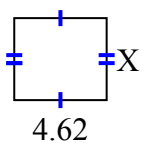
8) площадь = $61,2 \text{ cm}^2$



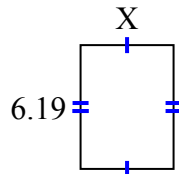
9) площадь = $30,7753 \text{ cm}^2$



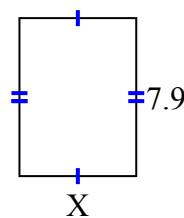
10) площадь = $18,942 \text{ cm}^2$



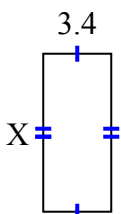
11) площадь = $28,7835 \text{ cm}^2$



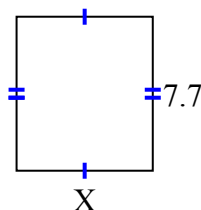
12) площадь = $46,136 \text{ cm}^2$



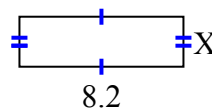
13) площадь = $26,86 \text{ cm}^2$



14) площадь = $52,437 \text{ cm}^2$



15) площадь = $20,5 \text{ cm}^2$

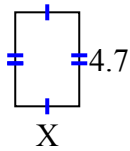
**ОТВЕТЫ**1. 6.72. 6.83. 8.414. 9.65. 7.56. 6.87. 2.68. 7.29. 4.6710. 4.111. 4.6512. 5.8413. 7.914. 6.8115. 2.5



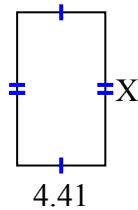
Найдите значение X для каждой цифры. Каждая цифра в сантиметрах (см). Не в масштабе.

ОТВЕТЫ

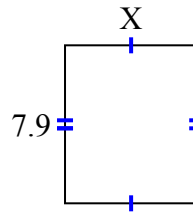
1) площадь = $15,04 \text{ cm}^2$



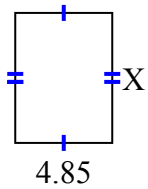
2) площадь = $33,7806 \text{ cm}^2$



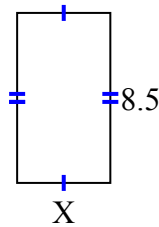
3) площадь = $52,219 \text{ cm}^2$



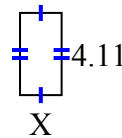
4) площадь = $31,525 \text{ cm}^2$



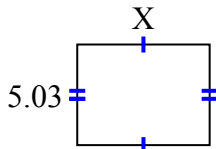
5) площадь = $39,61 \text{ cm}^2$



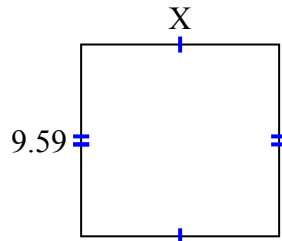
6) площадь = $8,5488 \text{ cm}^2$



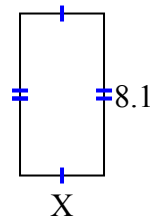
7) площадь = $33,2986 \text{ cm}^2$



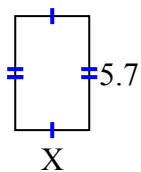
8) площадь = $94,941 \text{ cm}^2$



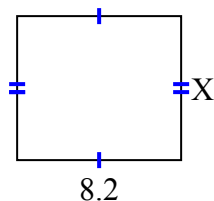
9) площадь = $34,02 \text{ cm}^2$



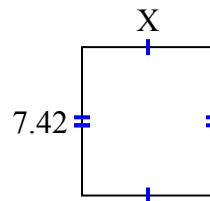
10) площадь = $21,09 \text{ cm}^2$



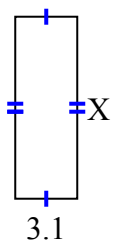
11) площадь = $59,04 \text{ cm}^2$



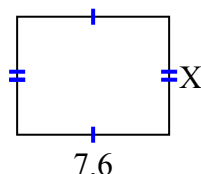
12) площадь = $48,972 \text{ cm}^2$



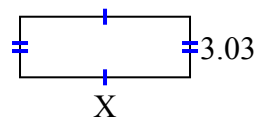
13) площадь = $28,21 \text{ cm}^2$



14) площадь = $44,84 \text{ cm}^2$



15) площадь = $25,755 \text{ cm}^2$

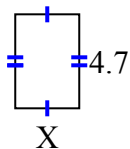


1. _____
2. _____
3. _____
4. _____
5. _____
6. _____
7. _____
8. _____
9. _____
10. _____
11. _____
12. _____
13. _____
14. _____
15. _____

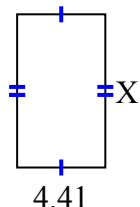


Найдите значение X для каждой цифры. Каждая цифра в сантиметрах (см). Не в масштабе.

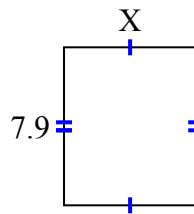
1) площадь = $15,04 \text{ cm}^2$



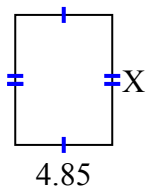
2) площадь = $33,7806 \text{ cm}^2$



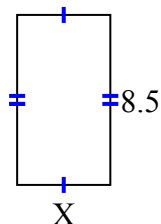
3) площадь = $52,219 \text{ cm}^2$



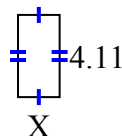
4) площадь = $31,525 \text{ cm}^2$



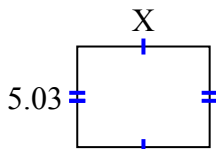
5) площадь = $39,61 \text{ cm}^2$



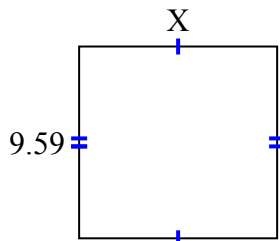
6) площадь = $8,5488 \text{ cm}^2$



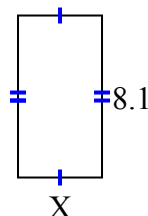
7) площадь = $33,2986 \text{ cm}^2$



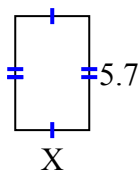
8) площадь = $94,941 \text{ cm}^2$



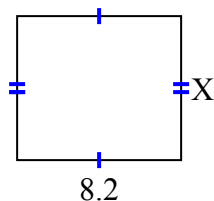
9) площадь = $34,02 \text{ cm}^2$



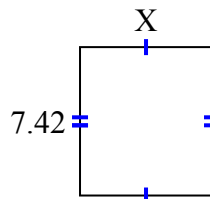
10) площадь = $21,09 \text{ cm}^2$



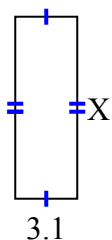
11) площадь = $59,04 \text{ cm}^2$



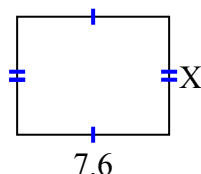
12) площадь = $48,972 \text{ cm}^2$



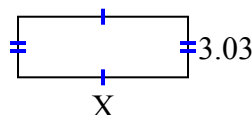
13) площадь = $28,21 \text{ cm}^2$



14) площадь = $44,84 \text{ cm}^2$



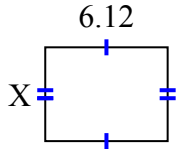
15) площадь = $25,755 \text{ cm}^2$

**ОТВЕТЫ**1. 3.22. 7.663. 6.614. 6.55. 4.666. 2.087. 6.628. 9.99. 4.210. 3.711. 7.212. 6.613. 9.114. 5.915. 8.5

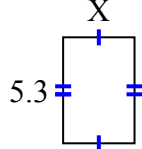


Найдите значение X для каждой цифры. Каждая цифра в сантиметрах (см). Не в масштабе.

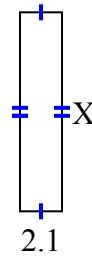
1) площадь = $28,7028 \text{ cm}^2$



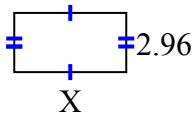
2) площадь = $18,921 \text{ cm}^2$



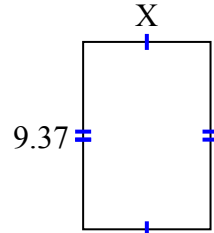
3) площадь = $20,895 \text{ cm}^2$



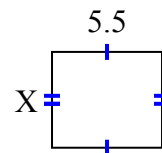
4) площадь = $16,576 \text{ cm}^2$



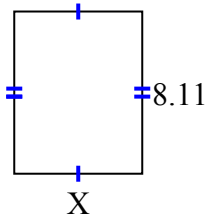
5) площадь = $59,6869 \text{ cm}^2$



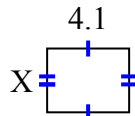
6) площадь = $26,345 \text{ cm}^2$



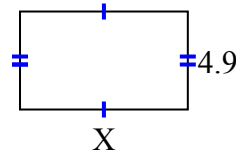
7) площадь = $51,904 \text{ cm}^2$



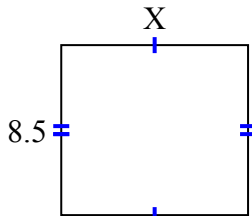
8) площадь = $13,079 \text{ cm}^2$



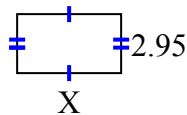
9) площадь = $41,111 \text{ cm}^2$



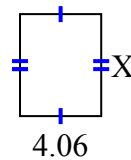
10) площадь = $79,39 \text{ cm}^2$



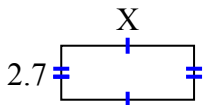
11) площадь = $15,34 \text{ cm}^2$



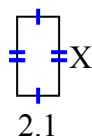
12) площадь = $20,706 \text{ cm}^2$



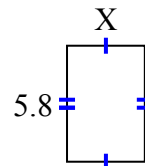
13) площадь = $17,928 \text{ cm}^2$



14) площадь = $8,295 \text{ cm}^2$



15) площадь = $22,562 \text{ cm}^2$

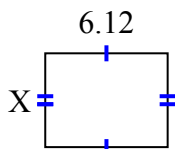
ОТВЕТЫ

1. _____
2. _____
3. _____
4. _____
5. _____
6. _____
7. _____
8. _____
9. _____
10. _____
11. _____
12. _____
13. _____
14. _____
15. _____

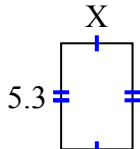


Найдите значение X для каждой цифры. Каждая цифра в сантиметрах (см). Не в масштабе.

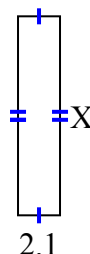
1) площадь = $28,7028 \text{ cm}^2$



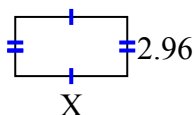
2) площадь = $18,921 \text{ cm}^2$



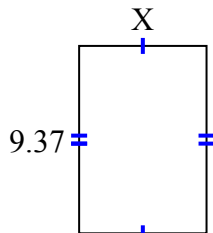
3) площадь = $20,895 \text{ cm}^2$



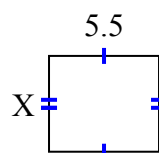
4) площадь = $16,576 \text{ cm}^2$



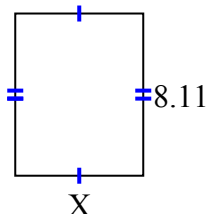
5) площадь = $59,6869 \text{ cm}^2$



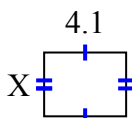
6) площадь = $26,345 \text{ cm}^2$



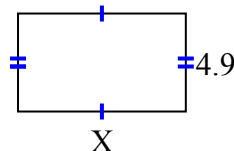
7) площадь = $51,904 \text{ cm}^2$



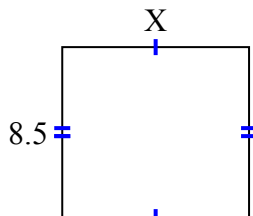
8) площадь = $13,079 \text{ cm}^2$



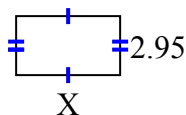
9) площадь = $41,111 \text{ cm}^2$



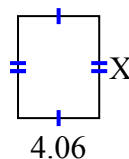
10) площадь = $79,39 \text{ cm}^2$



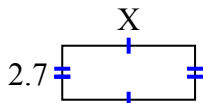
11) площадь = $15,34 \text{ cm}^2$



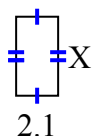
12) площадь = $20,706 \text{ cm}^2$



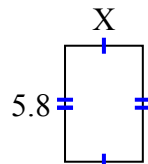
13) площадь = $17,928 \text{ cm}^2$



14) площадь = $8,295 \text{ cm}^2$



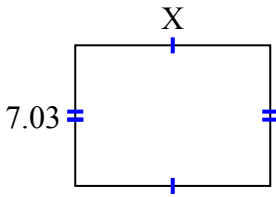
15) площадь = $22,562 \text{ cm}^2$

**ОТВЕТЫ**1. 4.692. 3.573. 9.954. 5.65. 6.376. 4.797. 6.48. 3.199. 8.3910. 9.3411. 5.212. 5.113. 6.6414. 3.9515. 3.89

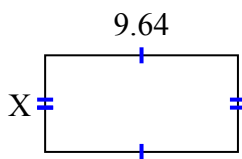


Найдите значение X для каждой цифры. Каждая цифра в сантиметрах (см). Не в масштабе.

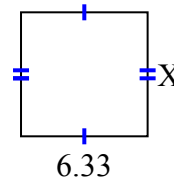
1) площадь = $68,5425 \text{ cm}^2$



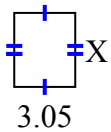
2) площадь = $46,5612 \text{ cm}^2$



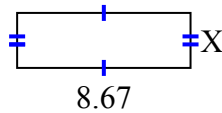
3) площадь = $39,246 \text{ cm}^2$



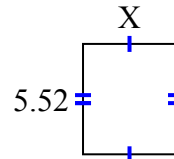
4) площадь = $11,285 \text{ cm}^2$



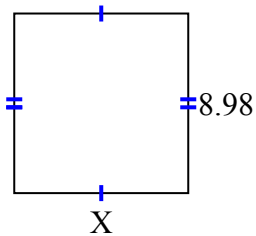
5) площадь = $23,8425 \text{ cm}^2$



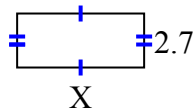
6) площадь = $25,668 \text{ cm}^2$



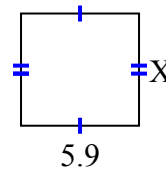
7) площадь = $78,126 \text{ cm}^2$



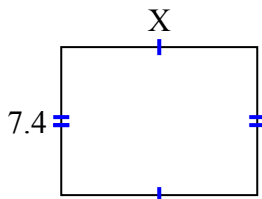
8) площадь = $17,145 \text{ cm}^2$



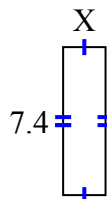
9) площадь = $33,099 \text{ cm}^2$



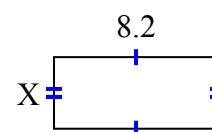
10) площадь = $72,52 \text{ cm}^2$



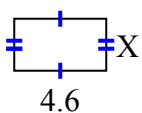
11) площадь = $15,688 \text{ cm}^2$



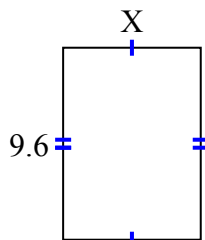
12) площадь = $29,356 \text{ cm}^2$



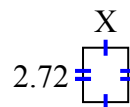
13) площадь = $11,96 \text{ cm}^2$



14) площадь = $66,048 \text{ cm}^2$



15) площадь = $6,1472 \text{ cm}^2$

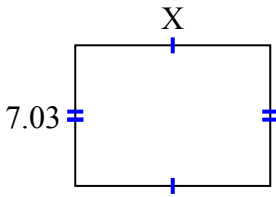
ОТВЕТЫ

1. _____
2. _____
3. _____
4. _____
5. _____
6. _____
7. _____
8. _____
9. _____
10. _____
11. _____
12. _____
13. _____
14. _____
15. _____

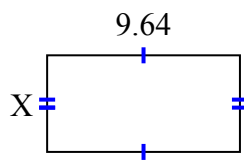


Найдите значение X для каждой цифры. Каждая цифра в сантиметрах (см). Не в масштабе.

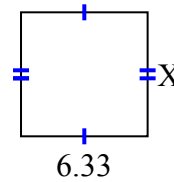
1) площадь = $68,5425 \text{ cm}^2$



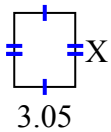
2) площадь = $46,5612 \text{ cm}^2$



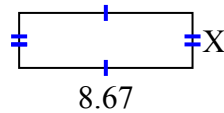
3) площадь = $39,246 \text{ cm}^2$



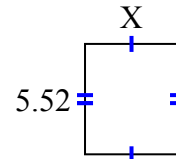
4) площадь = $11,285 \text{ cm}^2$



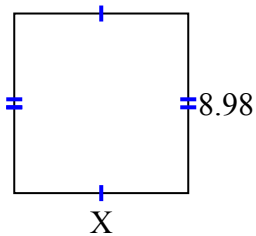
5) площадь = $23,8425 \text{ cm}^2$



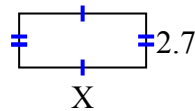
6) площадь = $25,668 \text{ cm}^2$



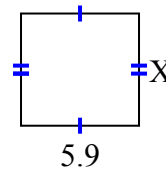
7) площадь = $78,126 \text{ cm}^2$



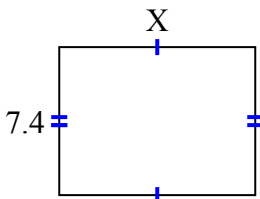
8) площадь = $17,145 \text{ cm}^2$



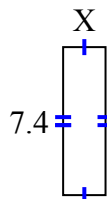
9) площадь = $33,099 \text{ cm}^2$



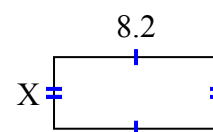
10) площадь = $72,52 \text{ cm}^2$



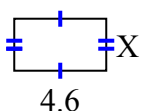
11) площадь = $15,688 \text{ cm}^2$



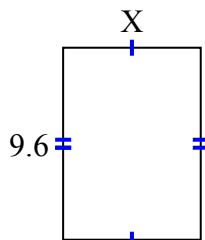
12) площадь = $29,356 \text{ cm}^2$



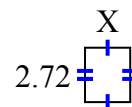
13) площадь = $11,96 \text{ cm}^2$



14) площадь = $66,048 \text{ cm}^2$



15) площадь = $6,1472 \text{ cm}^2$

**ОТВЕТЫ**1. 9.752. 4.833. 6.24. 3.75. 2.756. 4.657. 8.78. 6.359. 5.6110. 9.811. 2.1212. 3.5813. 2.614. 6.8815. 2.26