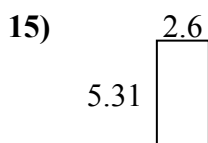
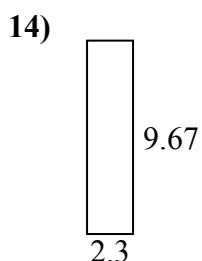
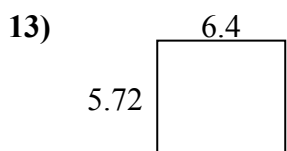
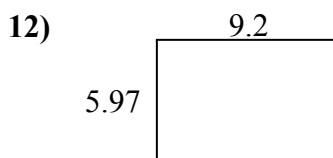
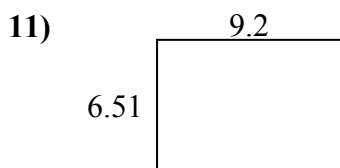
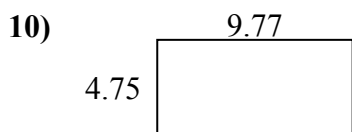
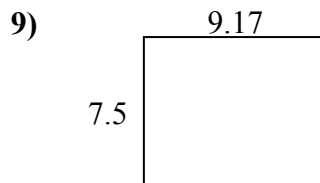
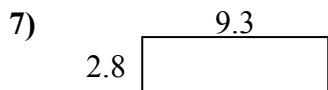
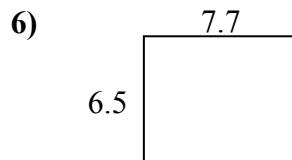
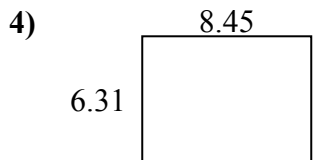
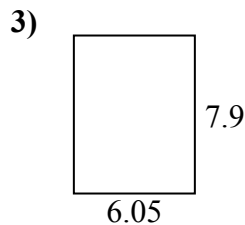
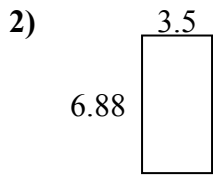
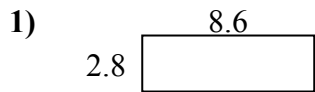




Найдите периметр и площадь каждой фигуры. Ответьте с точностью до 10-го числа.

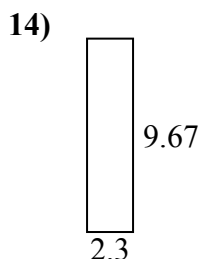
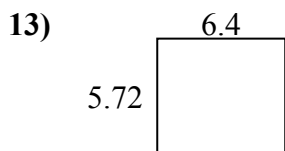
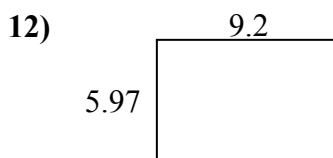
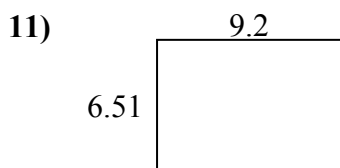
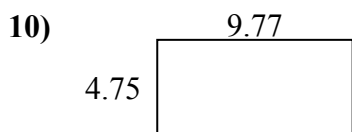
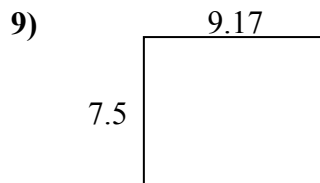
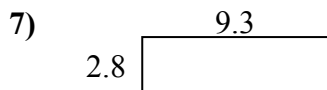
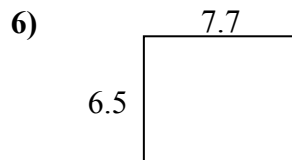
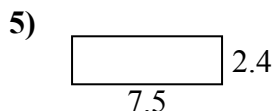
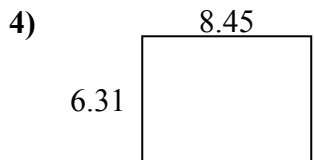
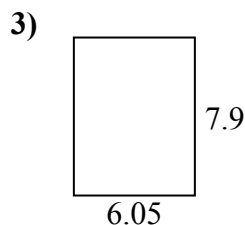
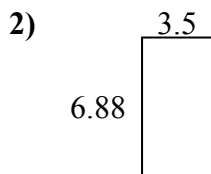
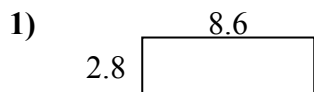


ОТВЕТЫ

1. _____
2. _____
3. _____
4. _____
5. _____
6. _____
7. _____
8. _____
9. _____
10. _____
11. _____
12. _____
13. _____
14. _____
15. _____



Найдите периметр и площадь каждой фигуры. Ответьте с точностью до 10-го числа.



ОТВЕТЫ

1.	<u>24,1</u>	<u>22,8</u>
2.	<u>24,1</u>	<u>20,8</u>
3.	<u>47,8</u>	<u>27,9</u>
4.	<u>53,3</u>	<u>29,5</u>
5.	<u>18,0</u>	<u>19,8</u>
6.	<u>50,1</u>	<u>28,4</u>
7.	<u>26,0</u>	<u>24,2</u>
8.	<u>40,3</u>	<u>26,5</u>
9.	<u>68,8</u>	<u>33,3</u>
10.	<u>46,4</u>	<u>29,0</u>
11.	<u>59,9</u>	<u>31,4</u>
12.	<u>54,9</u>	<u>30,3</u>
13.	<u>36,6</u>	<u>24,2</u>
14.	<u>22,2</u>	<u>23,9</u>
15.	<u>13,8</u>	<u>15,8</u>