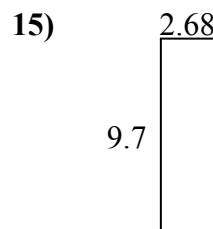
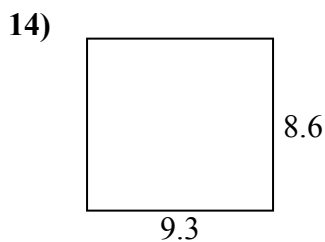
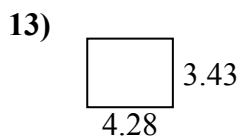
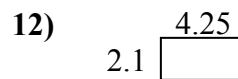
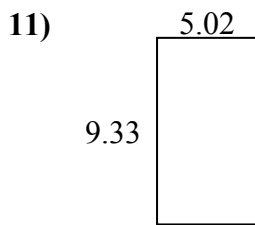
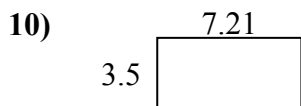
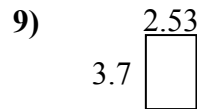
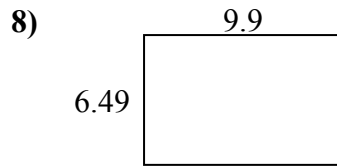
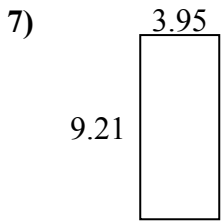
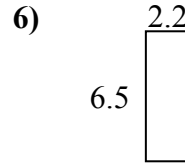
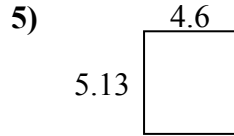
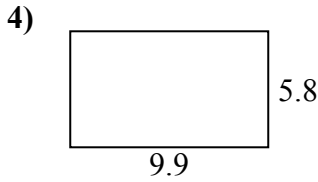
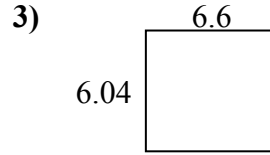
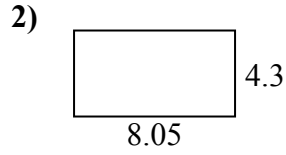
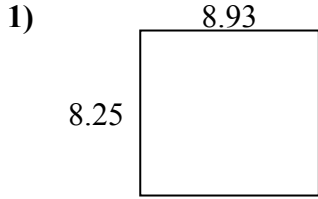




Найдите периметр и площадь каждой фигуры. Ответьте с точностью до 10-го числа.

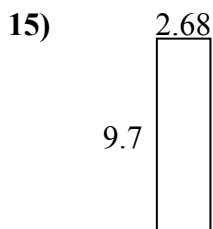
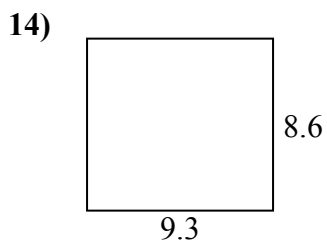
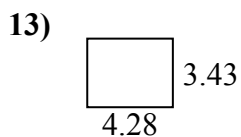
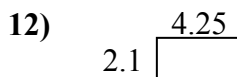
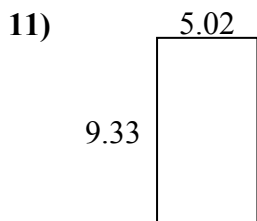
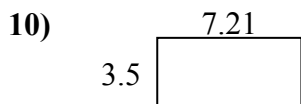
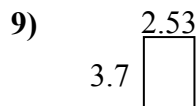
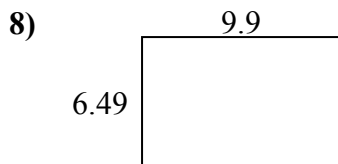
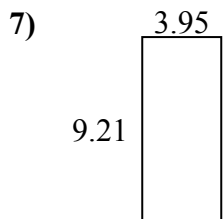
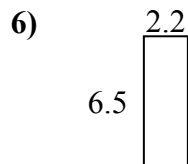
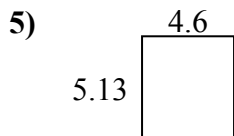
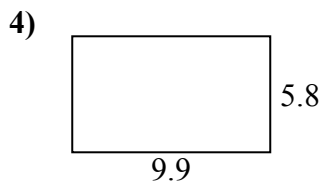
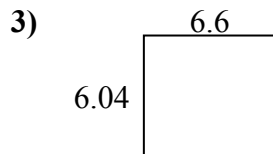
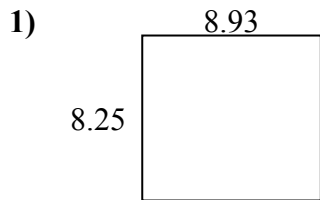


**ОТВЕТЫ**

1. \_\_\_\_\_
2. \_\_\_\_\_
3. \_\_\_\_\_
4. \_\_\_\_\_
5. \_\_\_\_\_
6. \_\_\_\_\_
7. \_\_\_\_\_
8. \_\_\_\_\_
9. \_\_\_\_\_
10. \_\_\_\_\_
11. \_\_\_\_\_
12. \_\_\_\_\_
13. \_\_\_\_\_
14. \_\_\_\_\_
15. \_\_\_\_\_



Найдите периметр и площадь каждой фигуры. Ответьте с точностью до 10-го числа.



**ОТВЕТЫ**

|     |             |             |
|-----|-------------|-------------|
| 1.  | <u>73,7</u> | <u>34,4</u> |
| 2.  | <u>34,6</u> | <u>24,7</u> |
| 3.  | <u>39,9</u> | <u>25,3</u> |
| 4.  | <u>57,4</u> | <u>31,4</u> |
| 5.  | <u>23,6</u> | <u>19,5</u> |
| 6.  | <u>14,3</u> | <u>17,4</u> |
| 7.  | <u>36,4</u> | <u>26,3</u> |
| 8.  | <u>64,3</u> | <u>32,8</u> |
| 9.  | <u>9,4</u>  | <u>12,5</u> |
| 10. | <u>25,2</u> | <u>21,4</u> |
| 11. | <u>46,8</u> | <u>28,7</u> |
| 12. | <u>8,9</u>  | <u>12,7</u> |
| 13. | <u>14,7</u> | <u>15,4</u> |
| 14. | <u>80,0</u> | <u>35,8</u> |
| 15. | <u>26,0</u> | <u>24,8</u> |