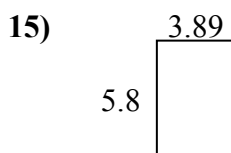
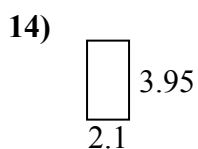
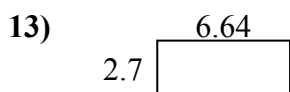
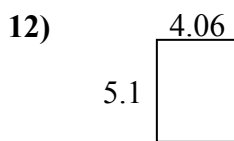
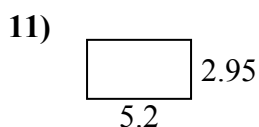
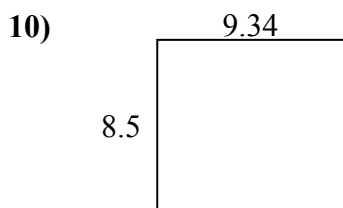
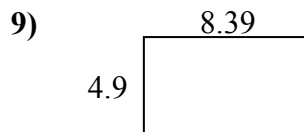
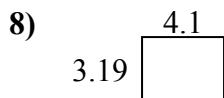
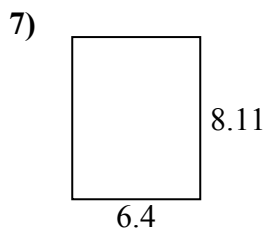
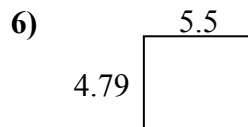
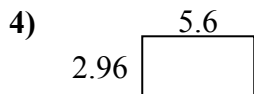
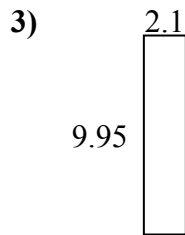
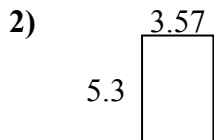
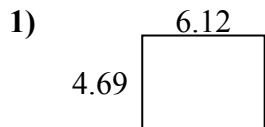




Найдите периметр и площадь каждой фигуры. Ответьте с точностью до 10-го числа.

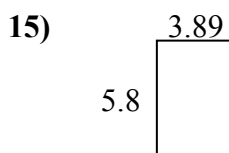
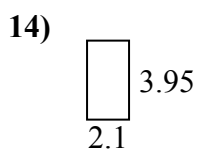
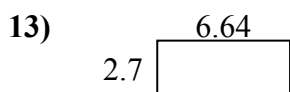
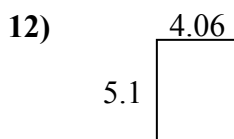
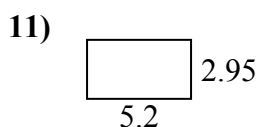
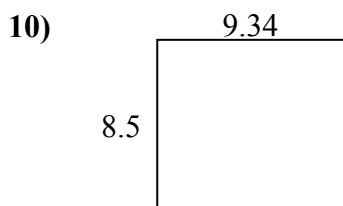
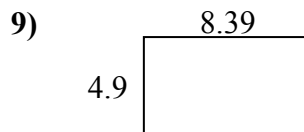
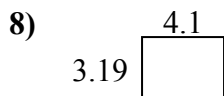
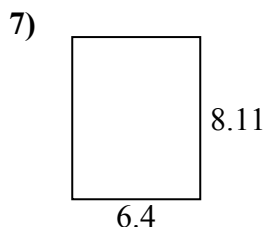
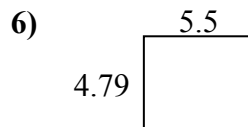
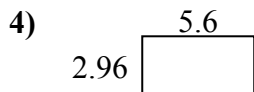
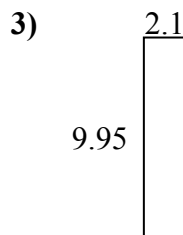
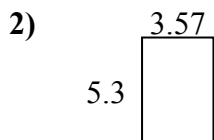
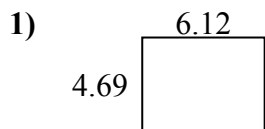


**ОТВЕТЫ**

1. \_\_\_\_\_
2. \_\_\_\_\_
3. \_\_\_\_\_
4. \_\_\_\_\_
5. \_\_\_\_\_
6. \_\_\_\_\_
7. \_\_\_\_\_
8. \_\_\_\_\_
9. \_\_\_\_\_
10. \_\_\_\_\_
11. \_\_\_\_\_
12. \_\_\_\_\_
13. \_\_\_\_\_
14. \_\_\_\_\_
15. \_\_\_\_\_



Найдите периметр и площадь каждой фигуры. Ответьте с точностью до 10-го числа.



**ОТВЕТЫ**

1.	<u>28,7</u>	<u>21,6</u>
2.	<u>18,9</u>	<u>17,7</u>
3.	<u>20,9</u>	<u>24,1</u>
4.	<u>16,6</u>	<u>17,1</u>
5.	<u>59,7</u>	<u>31,5</u>
6.	<u>26,3</u>	<u>20,6</u>
7.	<u>51,9</u>	<u>29,0</u>
8.	<u>13,1</u>	<u>14,6</u>
9.	<u>41,1</u>	<u>26,6</u>
10.	<u>79,4</u>	<u>35,7</u>
11.	<u>15,3</u>	<u>16,3</u>
12.	<u>20,7</u>	<u>18,3</u>
13.	<u>17,9</u>	<u>18,7</u>
14.	<u>8,3</u>	<u>12,1</u>
15.	<u>22,6</u>	<u>19,4</u>