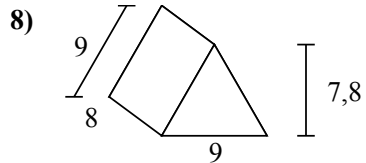
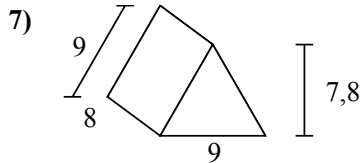
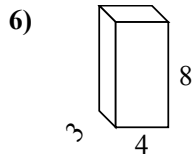
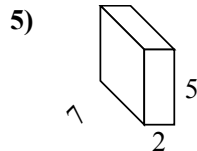
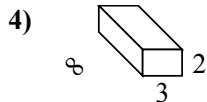
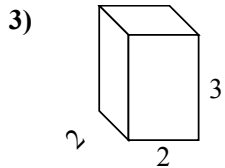
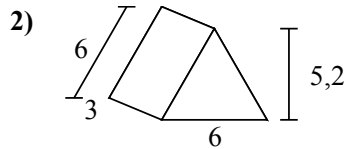
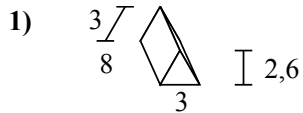
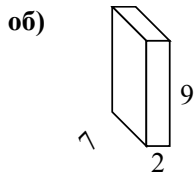




Определите площадь поверхности каждой фигуры.



Отвeты

об. **190 cm²**

1. _____

2. _____

3. _____

4. _____

5. _____

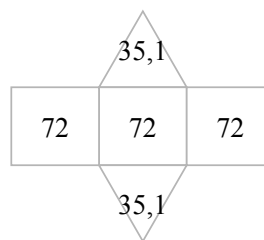
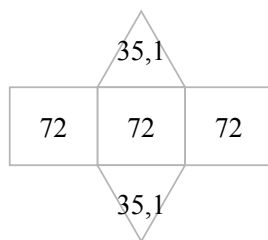
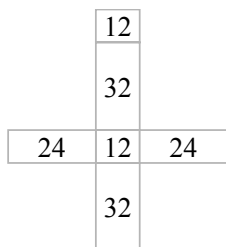
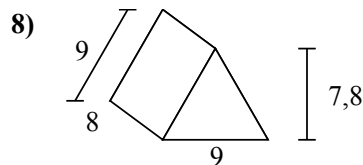
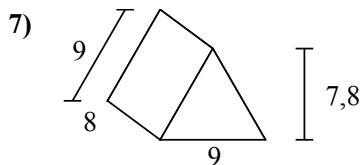
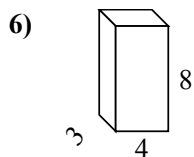
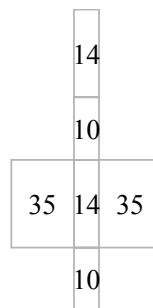
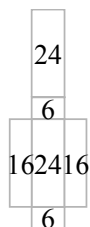
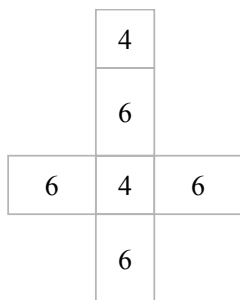
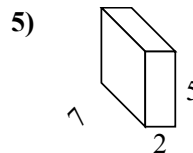
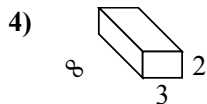
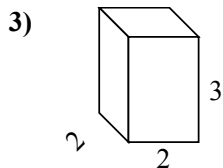
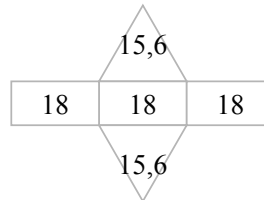
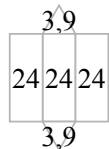
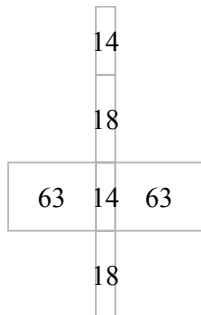
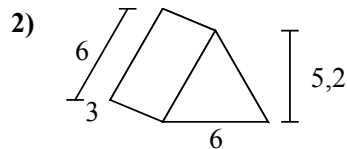
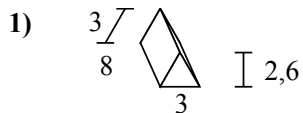
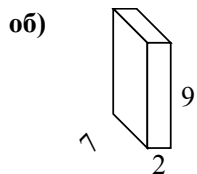
6. _____

7. _____

8. _____



Определите площадь поверхности каждой фигуры.



ОТВЕТЫ

об. 190 cm²

1. 79,8 cm²

2. 85,2 cm²

3. 32 cm²

4. 92 cm²

5. 118 cm²

6. 136 cm²

7. 286,2 cm²

8. 286,2 cm²