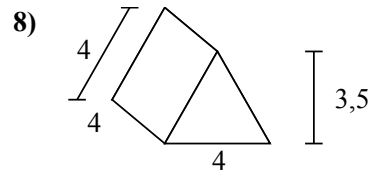
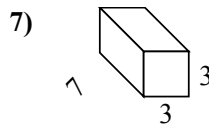
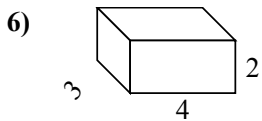
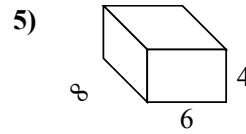
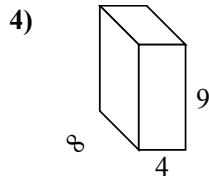
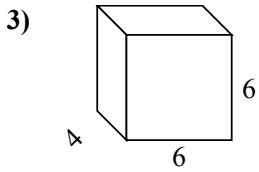
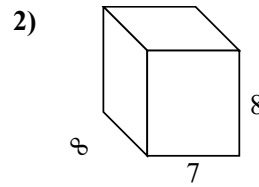
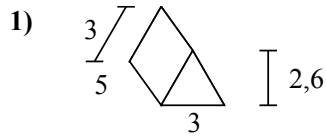
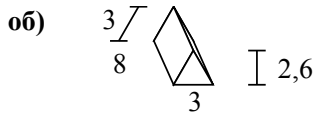




Определите площадь поверхности каждой фигуры.



Ответы

об. 79,8 см<sup>2</sup>

1. \_\_\_\_\_

2. \_\_\_\_\_

3. \_\_\_\_\_

4. \_\_\_\_\_

5. \_\_\_\_\_

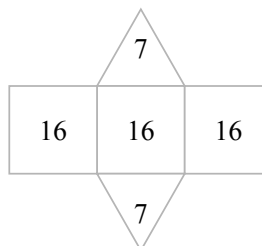
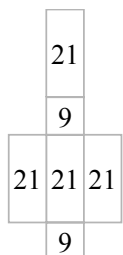
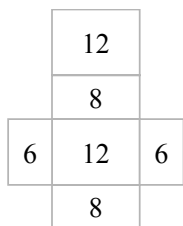
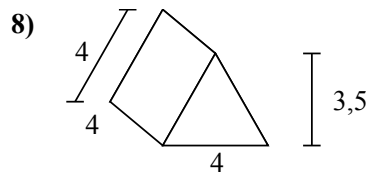
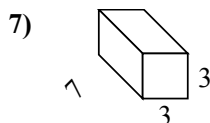
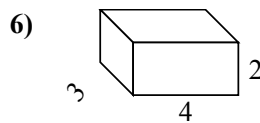
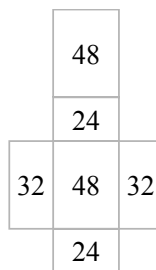
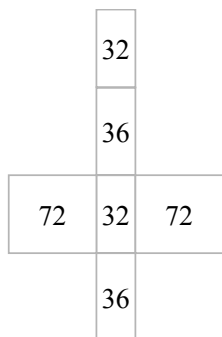
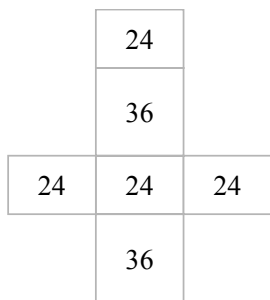
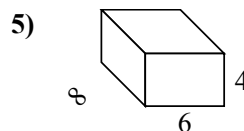
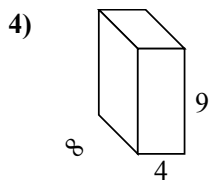
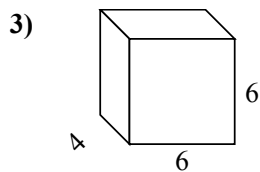
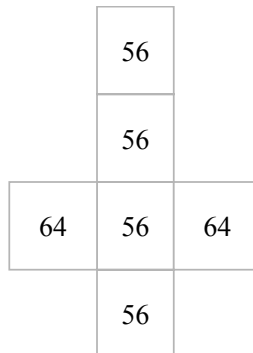
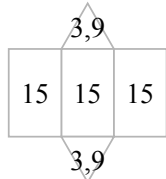
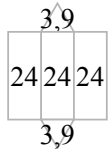
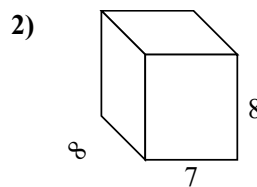
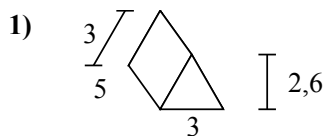
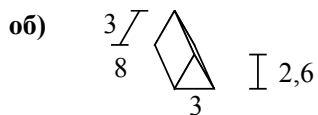
6. \_\_\_\_\_

7. \_\_\_\_\_

8. \_\_\_\_\_



Определите площадь поверхности каждой фигуры.



**Отвeты**

- об. 79,8 cm<sup>2</sup>
- 1. 52,8 cm<sup>2</sup>
- 2. 352 cm<sup>2</sup>
- 3. 168 cm<sup>2</sup>
- 4. 280 cm<sup>2</sup>
- 5. 208 cm<sup>2</sup>
- 6. 52 cm<sup>2</sup>
- 7. 102 cm<sup>2</sup>
- 8. 62 cm<sup>2</sup>