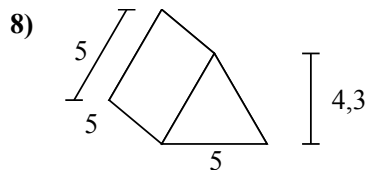
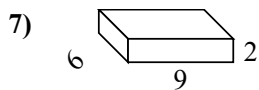
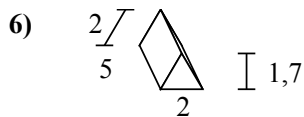
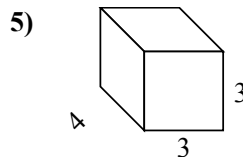
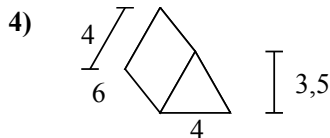
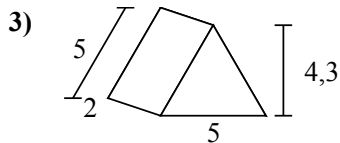
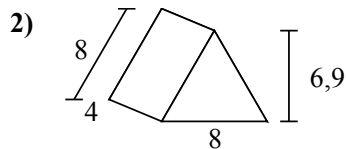
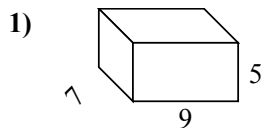
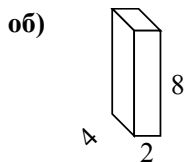




Определите площадь поверхности каждой фигуры.



Отвeты

об. 112 cm²

1. _____

2. _____

3. _____

4. _____

5. _____

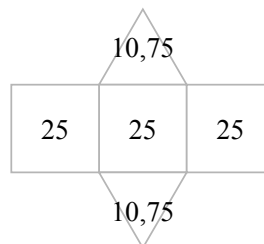
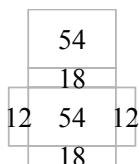
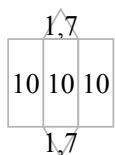
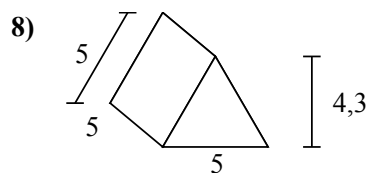
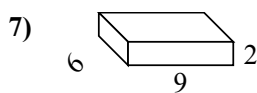
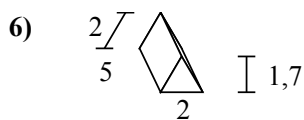
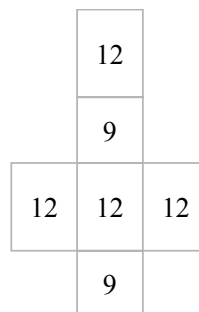
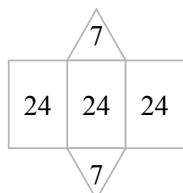
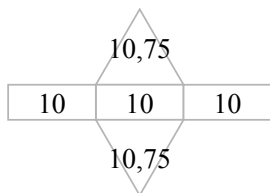
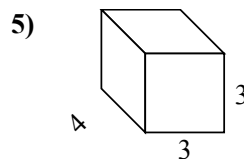
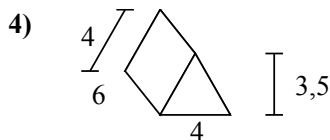
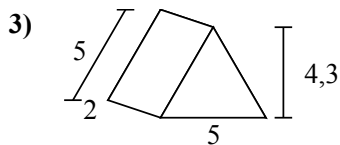
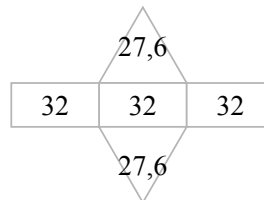
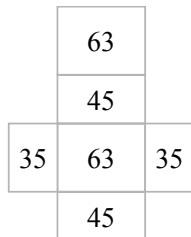
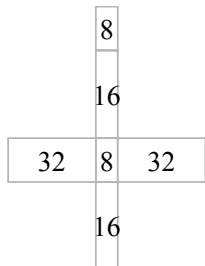
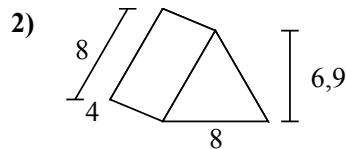
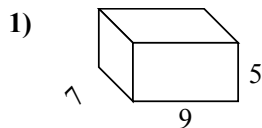
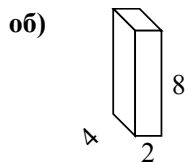
6. _____

7. _____

8. _____



Определите площадь поверхности каждой фигуры.



ОТВЕТЫ

об. 112 cm²

1. 286 cm²

2. 151,2 cm²

3. 51,5 cm²

4. 86 cm²

5. 66 cm²

6. 33,4 cm²

7. 168 cm²

8. 96,5 cm²