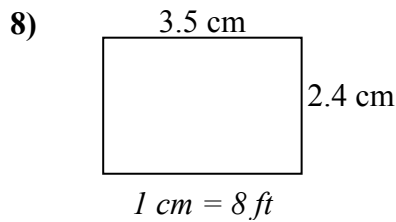
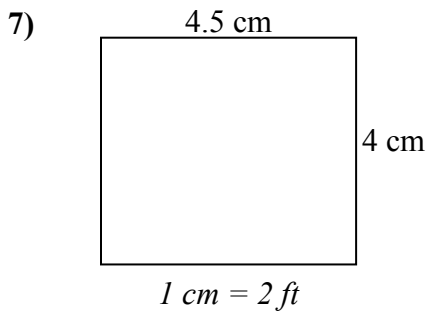
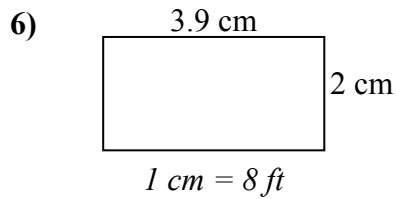
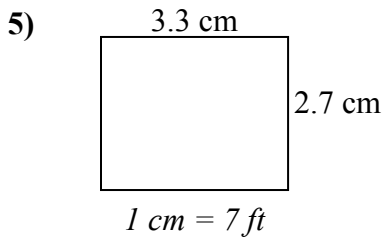
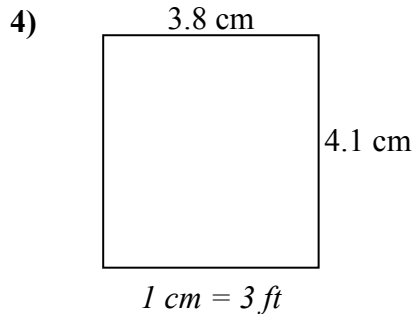
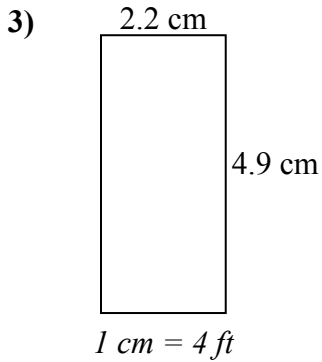
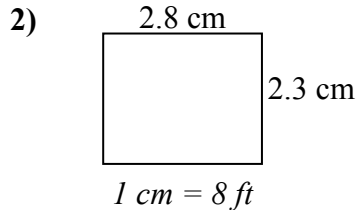
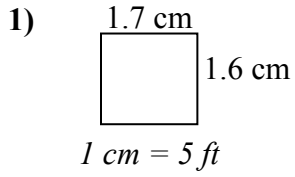




Определите актуальную ширину, высоту и площадь каждого прямоугольника.

Округлите площадь до целого числа.



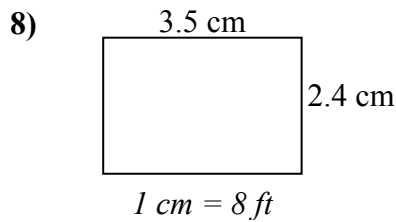
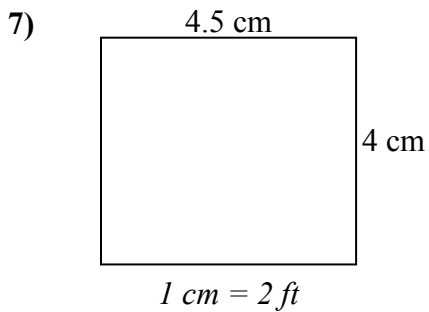
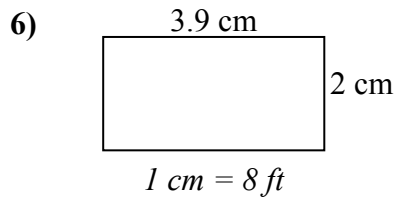
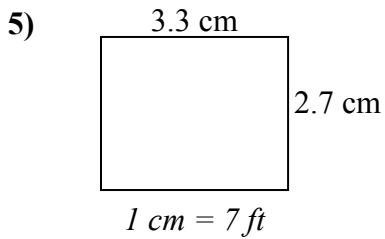
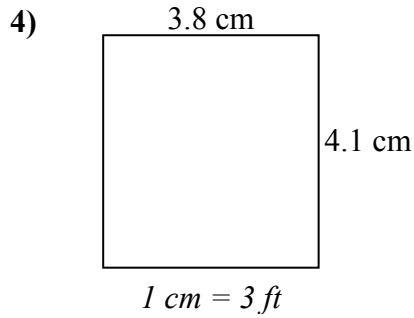
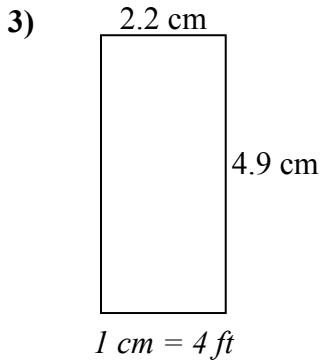
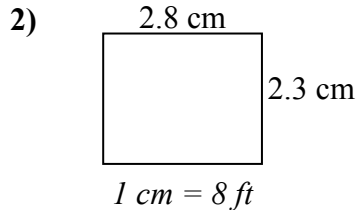
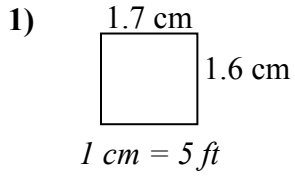
ОТВЕТЫ

1. _____
2. _____
3. _____
4. _____
5. _____
6. _____
7. _____
8. _____



Определите актуальную ширину, высоту и площадь каждого прямоугольника.

Округлите площадь до целого числа.



ОТВЕТЫ

1.	<u>8.5</u>	<u>8</u>	<u>68</u>
2.	<u>22.4</u>	<u>18.4</u>	<u>412</u>
3.	<u>8.8</u>	<u>19.6</u>	<u>172</u>
4.	<u>11.4</u>	<u>12.3</u>	<u>140</u>
5.	<u>23.1</u>	<u>18.9</u>	<u>437</u>
6.	<u>31.2</u>	<u>16</u>	<u>499</u>
7.	<u>9</u>	<u>8</u>	<u>72</u>
8.	<u>28</u>	<u>19.2</u>	<u>538</u>