




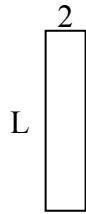
Определите значение 'L'

ОТВЕТЫ

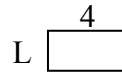
1) Площадь = $30u^2$



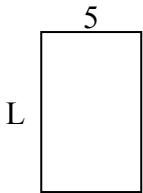
2) Площадь = $18u^2$



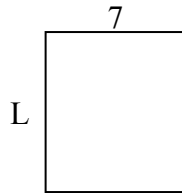
3) Площадь = $8u^2$



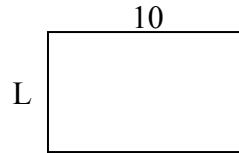
4) Площадь = $40u^2$



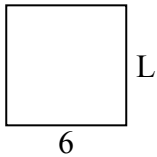
5) Площадь = $56u^2$



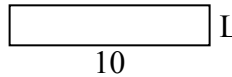
6) Площадь = $60u^2$



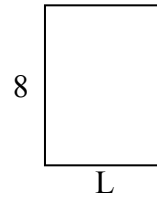
7) Площадь = $36u^2$



8) Площадь = $20u^2$



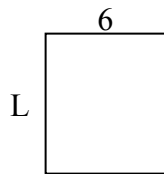
9) Площадь = $48u^2$



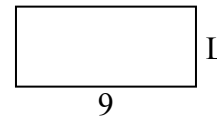
10) Площадь = $9u^2$




11) Площадь = $42u^2$



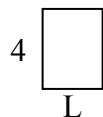
12) Площадь = $36u^2$



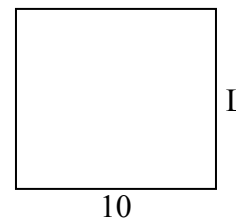
13) Площадь = $16u^2$



14) Площадь = $12u^2$



15) Площадь = $90u^2$

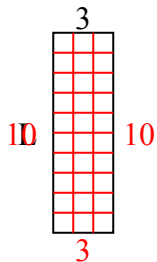


1. _____
2. _____
3. _____
4. _____
5. _____
6. _____
7. _____
8. _____
9. _____
10. _____
11. _____
12. _____
13. _____
14. _____
15. _____

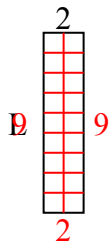


Определите значение 'L'

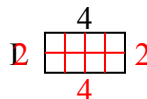
1) Площадь = $30u^2$



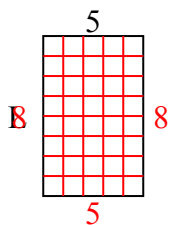
2) Площадь = $18u^2$



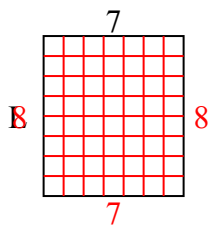
3) Площадь = $8u^2$



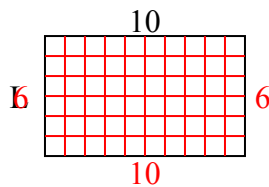
4) Площадь = $40u^2$



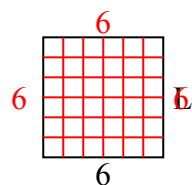
5) Площадь = $56u^2$



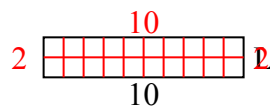
6) Площадь = $60u^2$



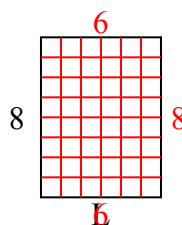
7) Площадь = $36u^2$



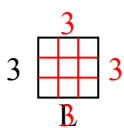
8) Площадь = $20u^2$



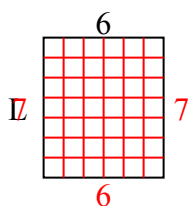
9) Площадь = $48u^2$



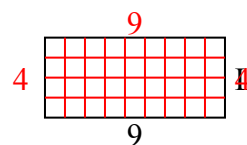
10) Площадь = $9u^2$



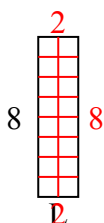
11) Площадь = $42u^2$



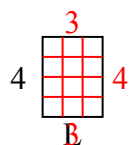
12) Площадь = $36u^2$



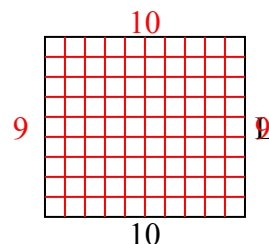
13) Площадь = $16u^2$



14) Площадь = $12u^2$



15) Площадь = $90u^2$



ОТВЕТЫ

1. 10
2. 9
3. 2
4. 8
5. 8
6. 6
7. 6
8. 2
9. 6
10. 3
11. 7
12. 4
13. 2
14. 3
15. 9