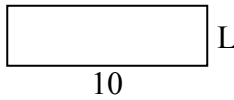


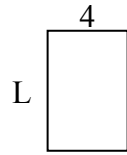


Определите значение 'L'

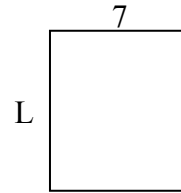
1) Площадь = $30u^2$



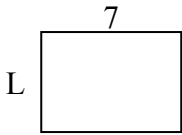
2) Площадь = $24u^2$



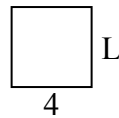
3) Площадь = $56u^2$



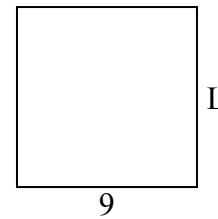
4) Площадь = $35u^2$



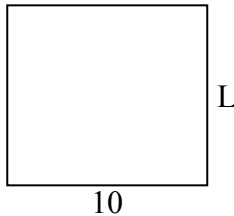
5) Площадь = $16u^2$



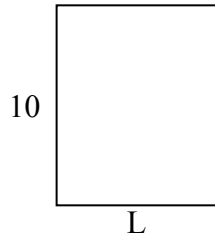
6) Площадь = $81u^2$



7) Площадь = $90u^2$




8) Площадь = $80u^2$



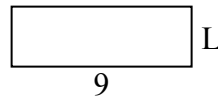
9) Площадь = $27u^2$



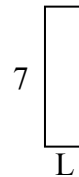
10) Площадь = $32u^2$



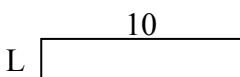
11) Площадь = $27u^2$



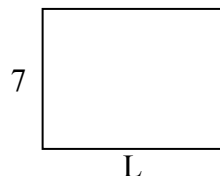
12) Площадь = $14u^2$



13) Площадь = $20u^2$



14) Площадь = $63u^2$



15) Площадь = $18u^2$



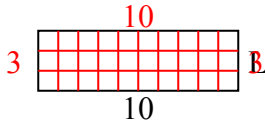
ОТВЕТЫ

1. _____
2. _____
3. _____
4. _____
5. _____
6. _____
7. _____
8. _____
9. _____
10. _____
11. _____
12. _____
13. _____
14. _____
15. _____

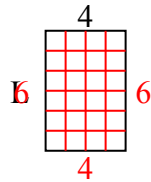


Определите значение 'L'

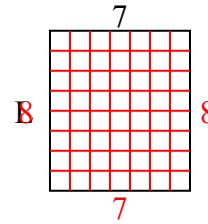
1) Площадь = $30u^2$



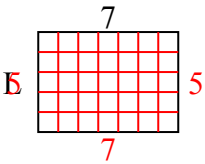
2) Площадь = $24u^2$



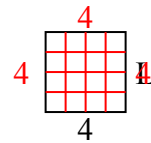
3) Площадь = $56u^2$



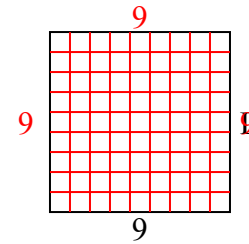
4) Площадь = $35u^2$



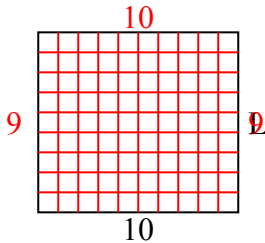
5) Площадь = $16u^2$



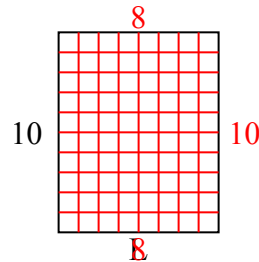
6) Площадь = $81u^2$



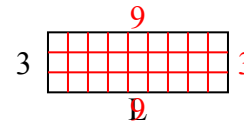
7) Площадь = $90u^2$



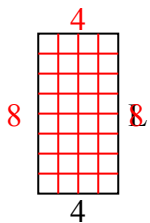
8) Площадь = $80u^2$



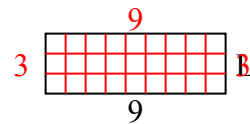
9) Площадь = $27u^2$



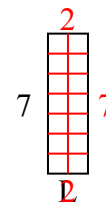
10) Площадь = $32u^2$



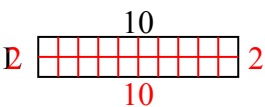
11) Площадь = $27u^2$



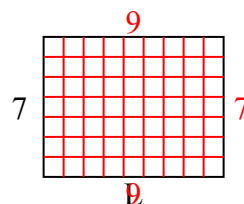
12) Площадь = $14u^2$



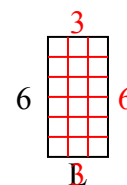
13) Площадь = $20u^2$



14) Площадь = $63u^2$



15) Площадь = $18u^2$



ОТВЕТЫ

1. 3

2. 6

3. 8

4. 5

5. 4

6. 9

7. 9

8. 8

9. 9

10. 8

11. 3

12. 2

13. 2

14. 9

15. 3