

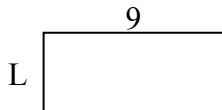


Определите значение 'L'


1) Площадь =  $8u^2$



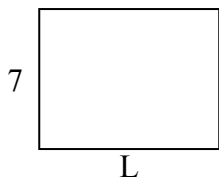
2) Площадь =  $36u^2$



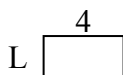
3) Площадь =  $14u^2$



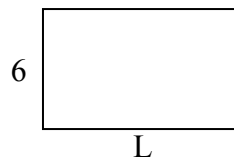
4) Площадь =  $63u^2$



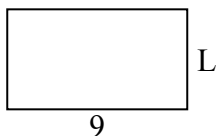
5) Площадь =  $8u^2$



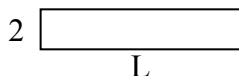
6) Площадь =  $60u^2$



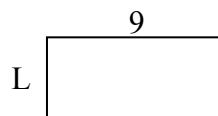
7) Площадь =  $45u^2$



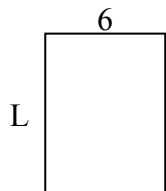
8) Площадь =  $20u^2$



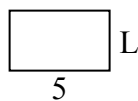
9) Площадь =  $36u^2$



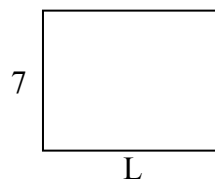
10) Площадь =  $48u^2$



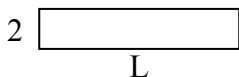
11) Площадь =  $15u^2$



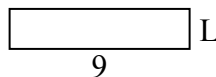
12) Площадь =  $63u^2$



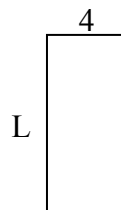
13) Площадь =  $20u^2$



14) Площадь =  $18u^2$



15) Площадь =  $36u^2$



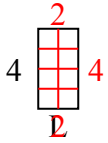
Ответы

1. \_\_\_\_\_
2. \_\_\_\_\_
3. \_\_\_\_\_
4. \_\_\_\_\_
5. \_\_\_\_\_
6. \_\_\_\_\_
7. \_\_\_\_\_
8. \_\_\_\_\_
9. \_\_\_\_\_
10. \_\_\_\_\_
11. \_\_\_\_\_
12. \_\_\_\_\_
13. \_\_\_\_\_
14. \_\_\_\_\_
15. \_\_\_\_\_

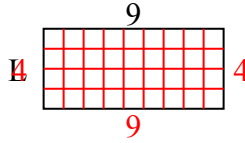


Определите значение 'L'

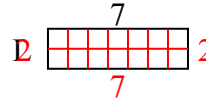
1) Площадь =  $8u^2$



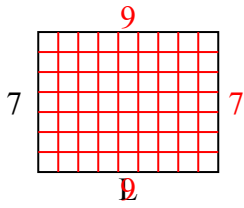
2) Площадь =  $36u^2$



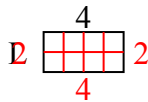
3) Площадь =  $14u^2$



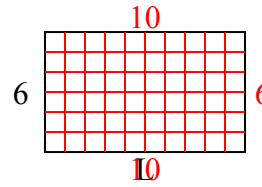
4) Площадь =  $63u^2$



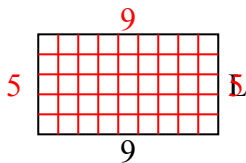
5) Площадь =  $8u^2$



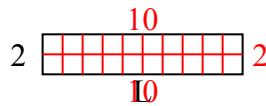
6) Площадь =  $60u^2$



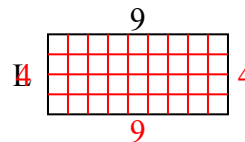
7) Площадь =  $45u^2$



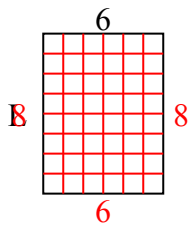
8) Площадь =  $20u^2$



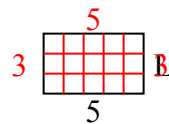
9) Площадь =  $36u^2$



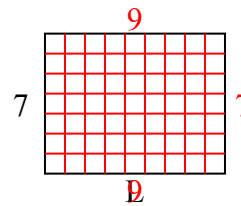
10) Площадь =  $48u^2$



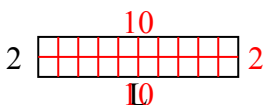
11) Площадь =  $15u^2$



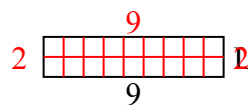
12) Площадь =  $63u^2$



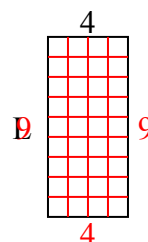
13) Площадь =  $20u^2$



14) Площадь =  $18u^2$



15) Площадь =  $36u^2$



**ОТВЕТЫ**

1. 2
2. 4
3. 2
4. 9
5. 2
6. 10
7. 5
8. 10
9. 4
10. 8
11. 3
12. 9
13. 10
14. 2
15. 9