



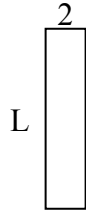
Определите значение 'L'

ОТВЕТЫ

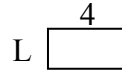
1) Площадь = $30u^2$



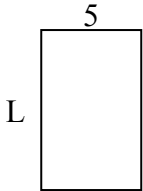
2) Площадь = $18u^2$



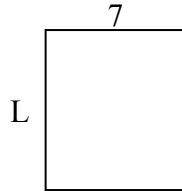
3) Площадь = $8u^2$



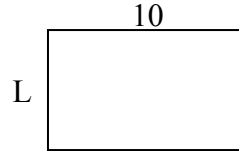
4) Площадь = $40u^2$



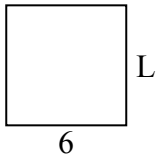
5) Площадь = $56u^2$



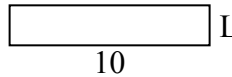
6) Площадь = $60u^2$



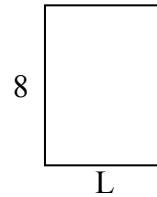
7) Площадь = $36u^2$



8) Площадь = $20u^2$



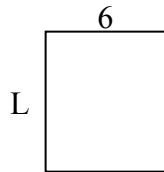
9) Площадь = $48u^2$



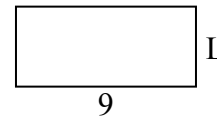
10) Площадь = $9u^2$




11) Площадь = $42u^2$



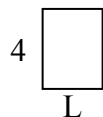
12) Площадь = $36u^2$



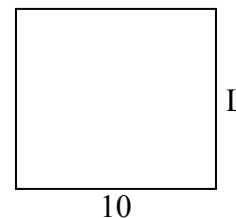
13) Площадь = $16u^2$



14) Площадь = $12u^2$



15) Площадь = $90u^2$

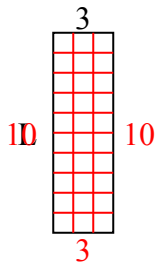


1. _____
2. _____
3. _____
4. _____
5. _____
6. _____
7. _____
8. _____
9. _____
10. _____
11. _____
12. _____
13. _____
14. _____
15. _____

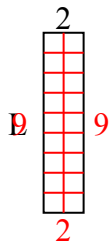


Определите значение 'L'

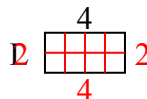
1) Площадь = $30u^2$



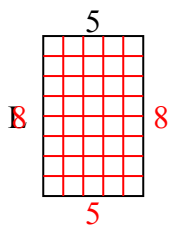
2) Площадь = $18u^2$



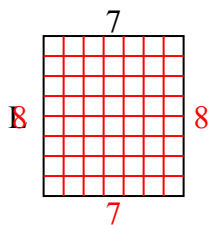
3) Площадь = $8u^2$



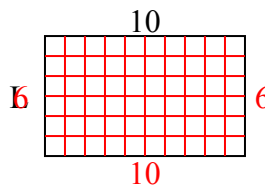
4) Площадь = $40u^2$



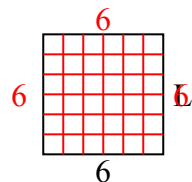
5) Площадь = $56u^2$



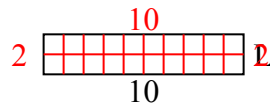
6) Площадь = $60u^2$



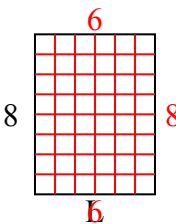
7) Площадь = $36u^2$



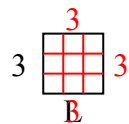
8) Площадь = $20u^2$



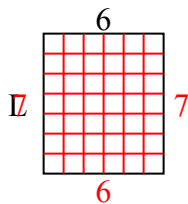
9) Площадь = $48u^2$



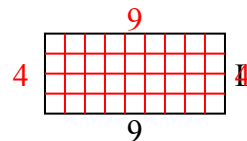
10) Площадь = $9u^2$



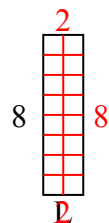
11) Площадь = $42u^2$



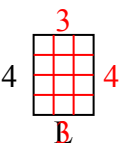
12) Площадь = $36u^2$



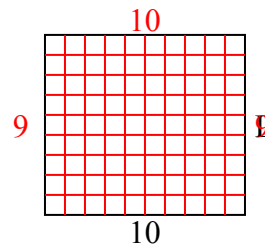
13) Площадь = $16u^2$



14) Площадь = $12u^2$



15) Площадь = $90u^2$



ОТВЕТЫ

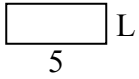
1. 10
2. 9
3. 2
4. 8
5. 8
6. 6
7. 6
8. 2
9. 6
10. 3
11. 7
12. 4
13. 2
14. 3
15. 9



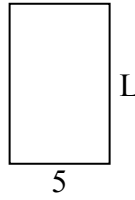
Определите значение 'L'

ОТВЕТЫ

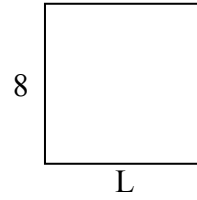
1) Площадь = $10u^2$



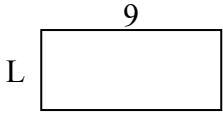
2) Площадь = $40u^2$




3) Площадь = $64u^2$



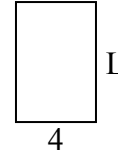
4) Площадь = $36u^2$



5) Площадь = $12u^2$




6) Площадь = $24u^2$



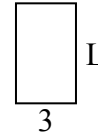
7) Площадь = $12u^2$



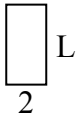
8) Площадь = $20u^2$



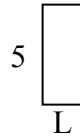
9) Площадь = $15u^2$



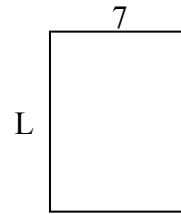
10) Площадь = $8u^2$



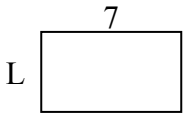
11) Площадь = $10u^2$



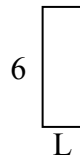
12) Площадь = $63u^2$



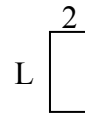
13) Площадь = $28u^2$



14) Площадь = $12u^2$



15) Площадь = $8u^2$

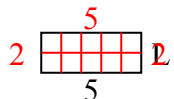


1. _____
2. _____
3. _____
4. _____
5. _____
6. _____
7. _____
8. _____
9. _____
10. _____
11. _____
12. _____
13. _____
14. _____
15. _____

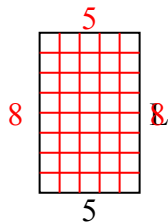


Определите значение 'L'

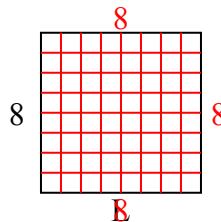
1) Площадь = $10u^2$



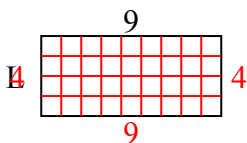
2) Площадь = $40u^2$



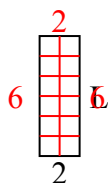
3) Площадь = $64u^2$



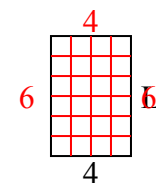
4) Площадь = $36u^2$



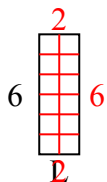
5) Площадь = $12u^2$



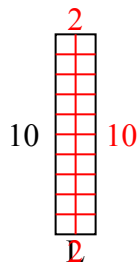
6) Площадь = $24u^2$



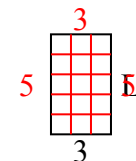
7) Площадь = $12u^2$



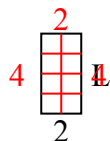
8) Площадь = $20u^2$



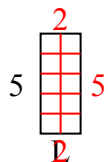
9) Площадь = $15u^2$



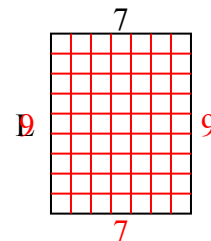
10) Площадь = $8u^2$



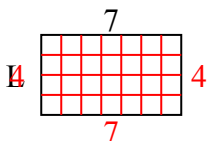
11) Площадь = $10u^2$



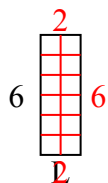
12) Площадь = $63u^2$



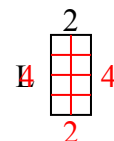
13) Площадь = $28u^2$



14) Площадь = $12u^2$



15) Площадь = $8u^2$



ОТВЕТЫ

1. 2

2. 8

3. 8

4. 4

5. 6

6. 6

7. 2

8. 2

9. 5

10. 4

11. 2

12. 9

13. 4

14. 2

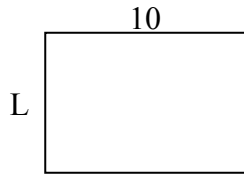
15. 4



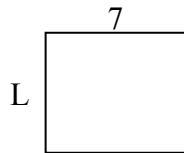
Определите значение 'L'

ОТВЕТЫ

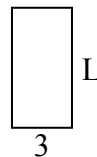
1) Площадь = $70u^2$



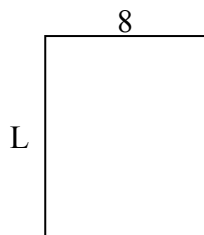
2) Площадь = $42u^2$



3) Площадь = $18u^2$



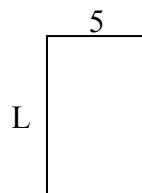
4) Площадь = $80u^2$



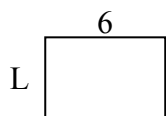
5) Площадь = $18u^2$




6) Площадь = $40u^2$



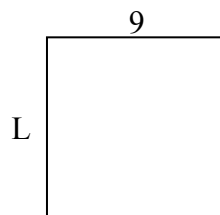
7) Площадь = $24u^2$



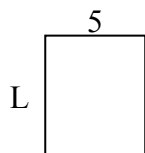
8) Площадь = $60u^2$



9) Площадь = $81u^2$



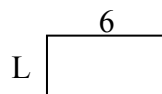
10) Площадь = $30u^2$



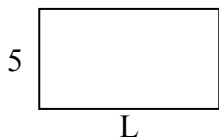
11) Площадь = $9u^2$



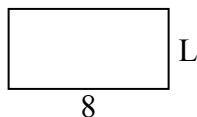
12) Площадь = $18u^2$



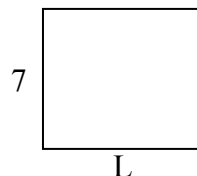
13) Площадь = $45u^2$



14) Площадь = $32u^2$



15) Площадь = $56u^2$

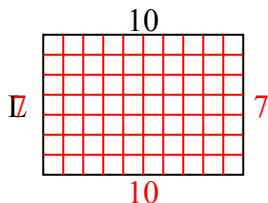


1. _____
2. _____
3. _____
4. _____
5. _____
6. _____
7. _____
8. _____
9. _____
10. _____
11. _____
12. _____
13. _____
14. _____
15. _____

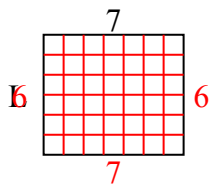


Определите значение 'L'

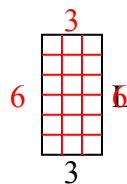
1) Площадь = $70u^2$



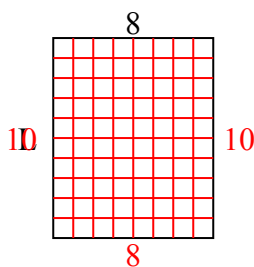
2) Площадь = $42u^2$



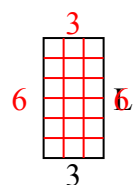
3) Площадь = $18u^2$



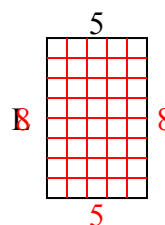
4) Площадь = $80u^2$



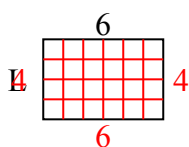
5) Площадь = $18u^2$



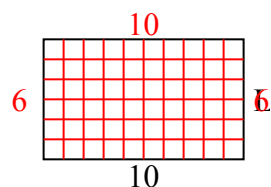
6) Площадь = $40u^2$



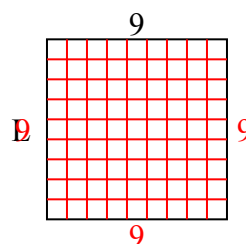
7) Площадь = $24u^2$



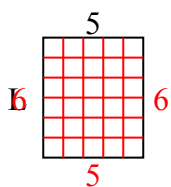
8) Площадь = $60u^2$



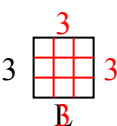
9) Площадь = $81u^2$



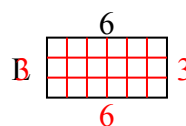
10) Площадь = $30u^2$



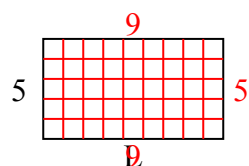
11) Площадь = $9u^2$



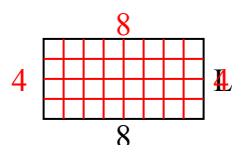
12) Площадь = $18u^2$



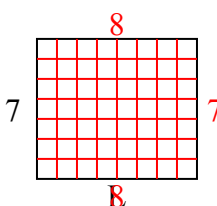
13) Площадь = $45u^2$



14) Площадь = $32u^2$



15) Площадь = $56u^2$



ОТВЕТЫ

1. 7

2. 6

3. 6

4. 10

5. 6

6. 8

7. 4

8. 6

9. 9

10. 6

11. 3

12. 3

13. 9

14. 4

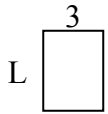
15. 8



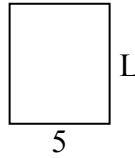
Определите значение 'L'

ОТВЕТЫ

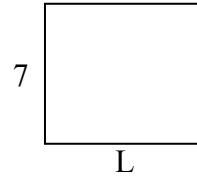
1) Площадь = $12u^2$



2) Площадь = $30u^2$



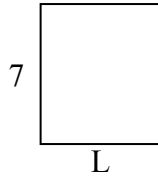
3) Площадь = $56u^2$



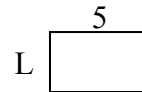
4) Площадь = $20u^2$



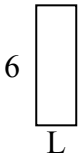
5) Площадь = $42u^2$




6) Площадь = $15u^2$




7) Площадь = $12u^2$



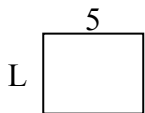
8) Площадь = $60u^2$



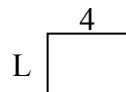
9) Площадь = $36u^2$



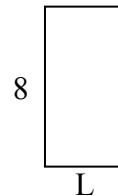
10) Площадь = $20u^2$



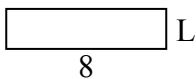
11) Площадь = $12u^2$



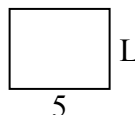
12) Площадь = $32u^2$



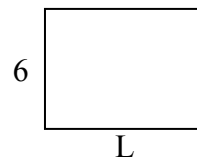
13) Площадь = $16u^2$



14) Площадь = $20u^2$



15) Площадь = $48u^2$

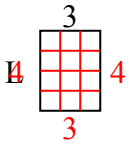


1. _____
2. _____
3. _____
4. _____
5. _____
6. _____
7. _____
8. _____
9. _____
10. _____
11. _____
12. _____
13. _____
14. _____
15. _____

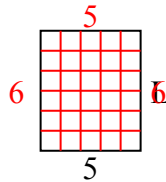


Определите значение 'L'

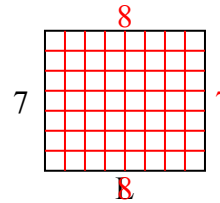
1) Площадь = $12u^2$



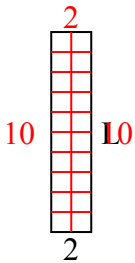
2) Площадь = $30u^2$



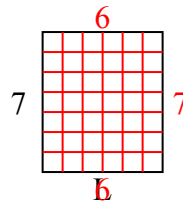
3) Площадь = $56u^2$



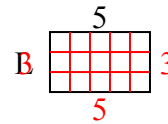
4) Площадь = $20u^2$



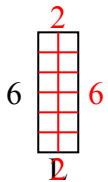
5) Площадь = $42u^2$



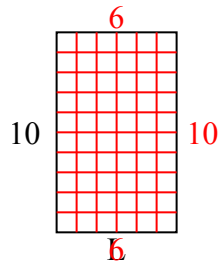
6) Площадь = $15u^2$



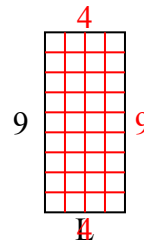
7) Площадь = $12u^2$



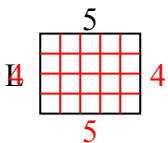
8) Площадь = $60u^2$



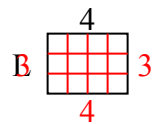
9) Площадь = $36u^2$



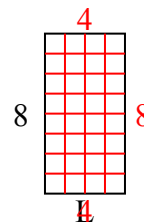
10) Площадь = $20u^2$



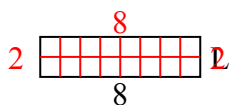
11) Площадь = $12u^2$



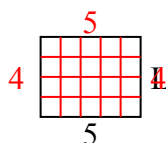
12) Площадь = $32u^2$



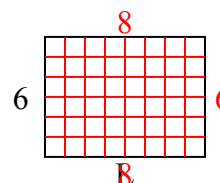
13) Площадь = $16u^2$



14) Площадь = $20u^2$



15) Площадь = $48u^2$



ОТВЕТЫ

1. 4

2. 6

3. 8

4. 10

5. 6

6. 3

7. 2

8. 6

9. 4

10. 4

11. 3

12. 4

13. 2

14. 4

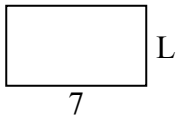
15. 8



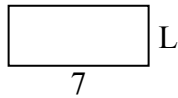
Определите значение 'L'

ОТВЕТЫ

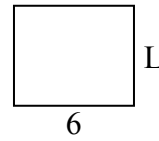
1) Площадь = $28u^2$



2) Площадь = $21u^2$



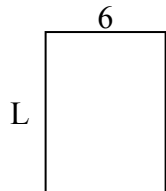
3) Площадь = $30u^2$



4) Площадь = $12u^2$




5) Площадь = $48u^2$



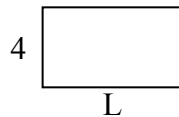
6) Площадь = $6u^2$



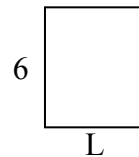
7) Площадь = $18u^2$



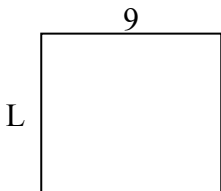
8) Площадь = $28u^2$



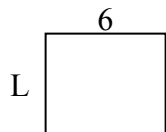
9) Площадь = $30u^2$



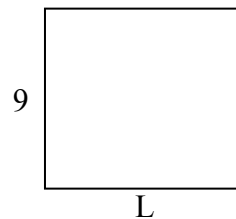
10) Площадь = $72u^2$



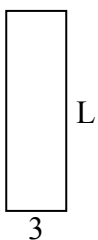
11) Площадь = $30u^2$



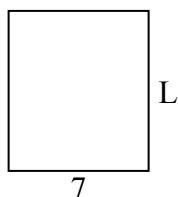
12) Площадь = $90u^2$



13) Площадь = $30u^2$



14) Площадь = $56u^2$



15) Площадь = $54u^2$

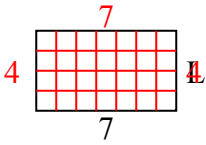


1. _____
2. _____
3. _____
4. _____
5. _____
6. _____
7. _____
8. _____
9. _____
10. _____
11. _____
12. _____
13. _____
14. _____
15. _____

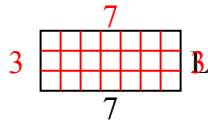


Определите значение 'L'

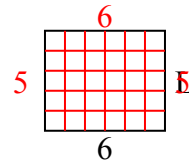
1) Площадь = $28u^2$



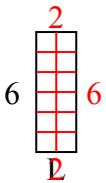
2) Площадь = $21u^2$



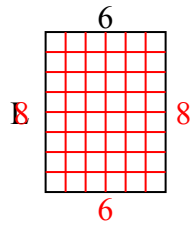
3) Площадь = $30u^2$



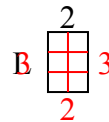
4) Площадь = $12u^2$



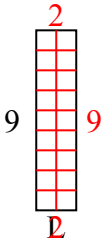
5) Площадь = $48u^2$



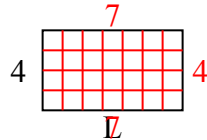
6) Площадь = $6u^2$



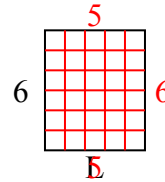
7) Площадь = $18u^2$



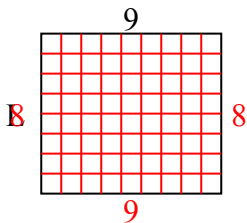
8) Площадь = $28u^2$



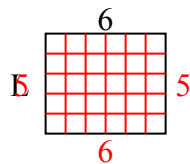
9) Площадь = $30u^2$



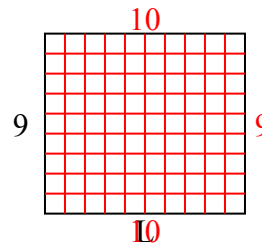
10) Площадь = $72u^2$



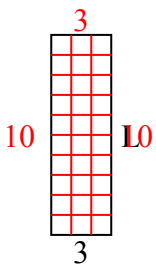
11) Площадь = $30u^2$



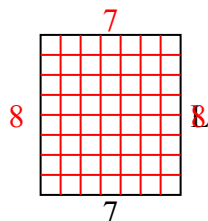
12) Площадь = $90u^2$



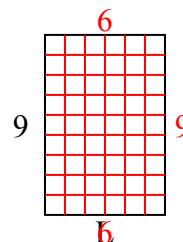
13) Площадь = $30u^2$



14) Площадь = $56u^2$



15) Площадь = $54u^2$



ОТВЕТЫ

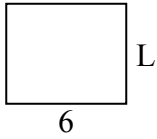
1. 4
2. 3
3. 5
4. 2
5. 8
6. 3
7. 2
8. 7
9. 5
10. 8
11. 5
12. 10
13. 10
14. 8
15. 6



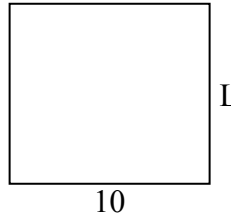
Определите значение 'L'

ОТВЕТЫ

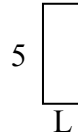
1) Площадь = $30u^2$



2) Площадь = $90u^2$



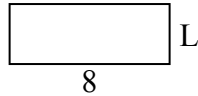
3) Площадь = $10u^2$



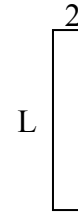
4) Площадь = $14u^2$



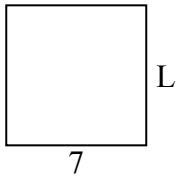
5) Площадь = $24u^2$



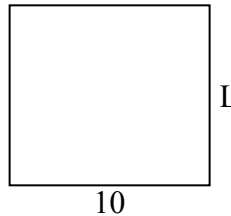
6) Площадь = $18u^2$



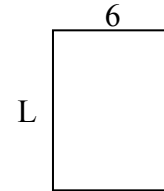
7) Площадь = $49u^2$



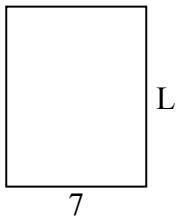
8) Площадь = $90u^2$



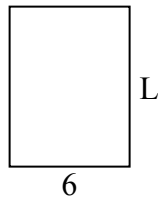
9) Площадь = $48u^2$



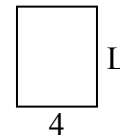
10) Площадь = $63u^2$



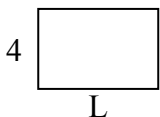
11) Площадь = $48u^2$



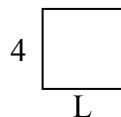
12) Площадь = $20u^2$



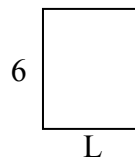
13) Площадь = $24u^2$



14) Площадь = $16u^2$



15) Площадь = $30u^2$

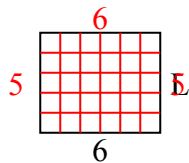


1. _____
2. _____
3. _____
4. _____
5. _____
6. _____
7. _____
8. _____
9. _____
10. _____
11. _____
12. _____
13. _____
14. _____
15. _____

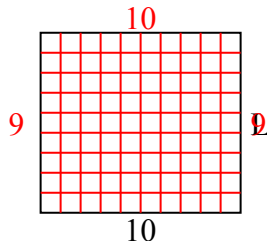


Определите значение 'L'

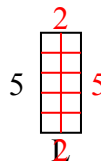
1) Площадь = $30u^2$



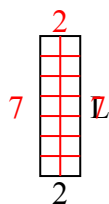
2) Площадь = $90u^2$



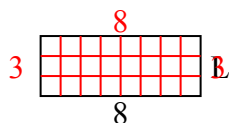
3) Площадь = $10u^2$



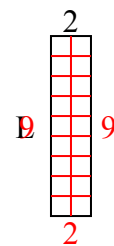
4) Площадь = $14u^2$



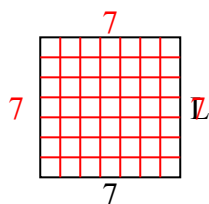
5) Площадь = $24u^2$



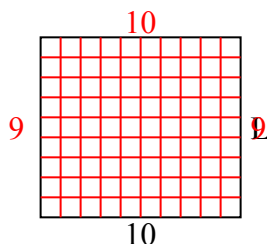
6) Площадь = $18u^2$



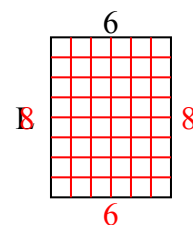
7) Площадь = $49u^2$



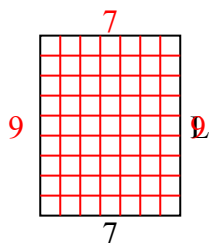
8) Площадь = $90u^2$



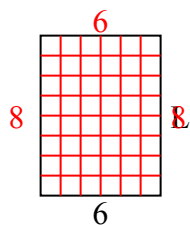
9) Площадь = $48u^2$



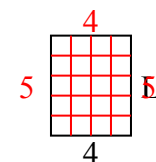
10) Площадь = $63u^2$



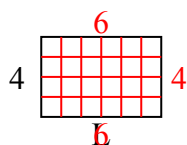
11) Площадь = $48u^2$



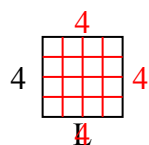
12) Площадь = $20u^2$



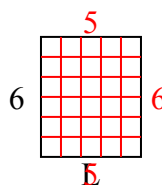
13) Площадь = $24u^2$



14) Площадь = $16u^2$



15) Площадь = $30u^2$



ОТВЕТЫ

1. 5

2. 9

3. 2

4. 7

5. 3

6. 9

7. 7

8. 9

9. 8

10. 9

11. 8

12. 5

13. 6

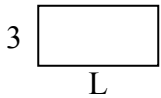
14. 4

15. 5

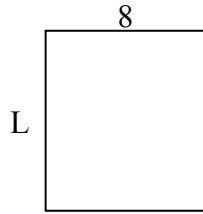


Определите значение 'L'

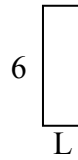
1) Площадь = $18u^2$



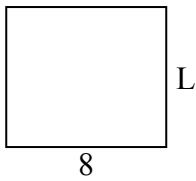
2) Площадь = $72u^2$



3) Площадь = $12u^2$



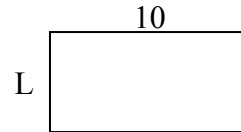
4) Площадь = $56u^2$



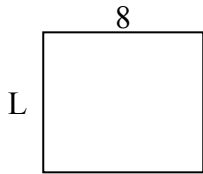
5) Площадь = $6u^2$



6) Площадь = $50u^2$



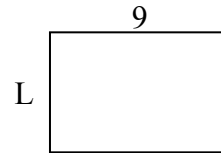
7) Площадь = $56u^2$



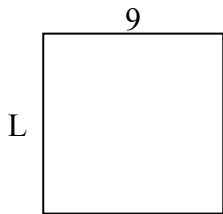
8) Площадь = $27u^2$



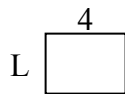
9) Площадь = $54u^2$



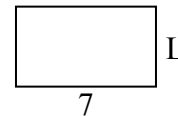
10) Площадь = $81u^2$



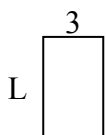
11) Площадь = $12u^2$




12) Площадь = $28u^2$



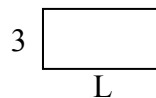
13) Площадь = $15u^2$



14) Площадь = $20u^2$



15) Площадь = $18u^2$



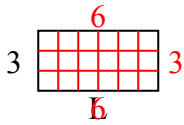
ОТВЕТЫ

1. _____
2. _____
3. _____
4. _____
5. _____
6. _____
7. _____
8. _____
9. _____
10. _____
11. _____
12. _____
13. _____
14. _____
15. _____

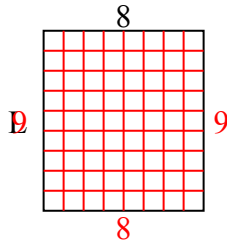


Определите значение 'L'

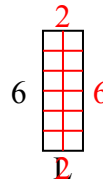
1) Площадь = $18u^2$



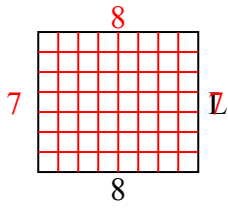
2) Площадь = $72u^2$



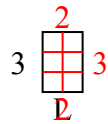
3) Площадь = $12u^2$



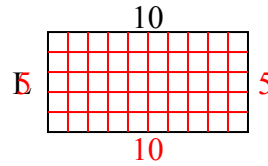
4) Площадь = $56u^2$



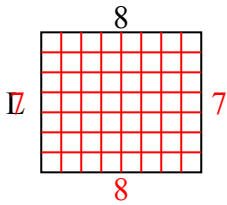
5) Площадь = $6u^2$



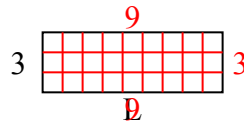
6) Площадь = $50u^2$



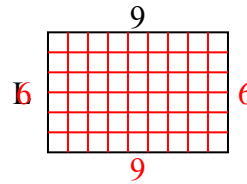
7) Площадь = $56u^2$



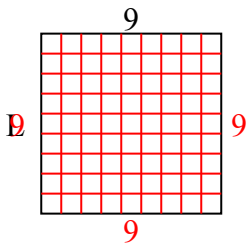
8) Площадь = $27u^2$



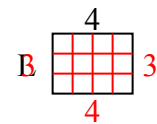
9) Площадь = $54u^2$



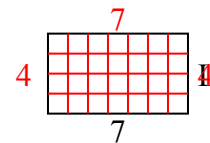
10) Площадь = $81u^2$



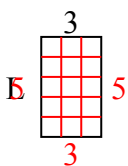
11) Площадь = $12u^2$



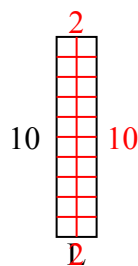
12) Площадь = $28u^2$



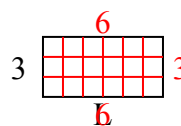
13) Площадь = $15u^2$



14) Площадь = $20u^2$



15) Площадь = $18u^2$



ОТВЕТЫ

1. 6

2. 9

3. 2

4. 7

5. 2

6. 5

7. 7

8. 9

9. 6

10. 9

11. 3

12. 4

13. 5

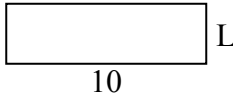
14. 2

15. 6

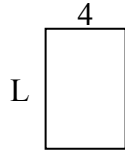


Определите значение 'L'

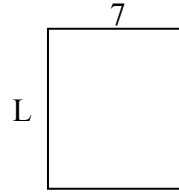
1) Площадь = $30u^2$



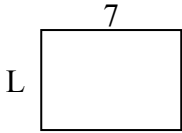
2) Площадь = $24u^2$



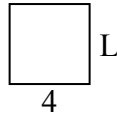
3) Площадь = $56u^2$



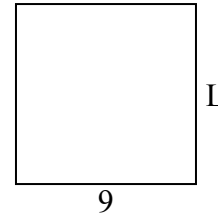
4) Площадь = $35u^2$



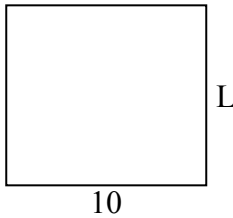
5) Площадь = $16u^2$



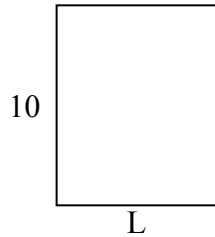
6) Площадь = $81u^2$



7) Площадь = $90u^2$




8) Площадь = $80u^2$



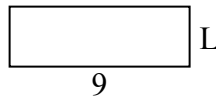
9) Площадь = $27u^2$



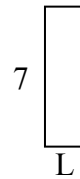
10) Площадь = $32u^2$



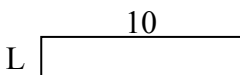
11) Площадь = $27u^2$



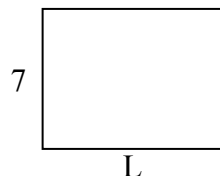
12) Площадь = $14u^2$



13) Площадь = $20u^2$



14) Площадь = $63u^2$



15) Площадь = $18u^2$



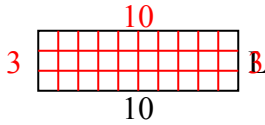
ОТВЕТЫ

1. _____
2. _____
3. _____
4. _____
5. _____
6. _____
7. _____
8. _____
9. _____
10. _____
11. _____
12. _____
13. _____
14. _____
15. _____

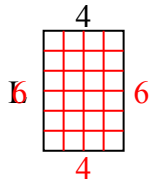


Определите значение 'L'

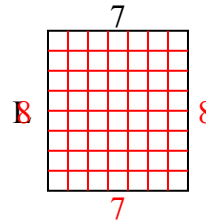
1) Площадь = $30u^2$



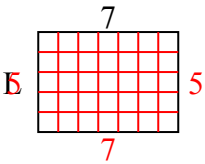
2) Площадь = $24u^2$



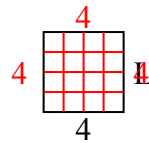
3) Площадь = $56u^2$



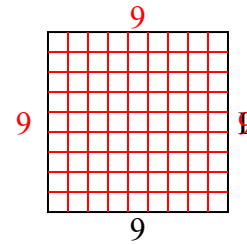
4) Площадь = $35u^2$



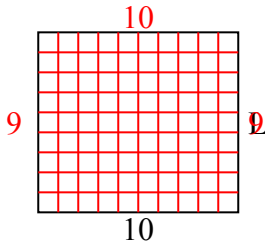
5) Площадь = $16u^2$



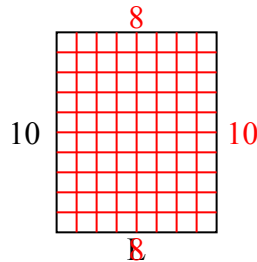
6) Площадь = $81u^2$



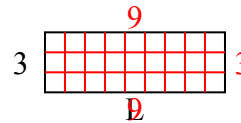
7) Площадь = $90u^2$



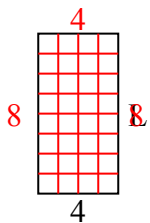
8) Площадь = $80u^2$



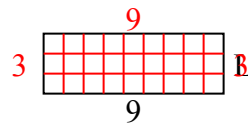
9) Площадь = $27u^2$



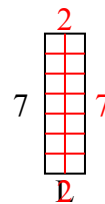
10) Площадь = $32u^2$



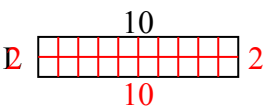
11) Площадь = $27u^2$



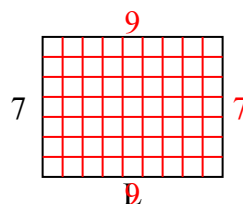
12) Площадь = $14u^2$



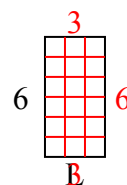
13) Площадь = $20u^2$



14) Площадь = $63u^2$



15) Площадь = $18u^2$



ОТВЕТЫ

1. 3

2. 6

3. 8

4. 5

5. 4

6. 9

7. 9

8. 8

9. 9

10. 8

11. 3

12. 2

13. 2

14. 9

15. 3



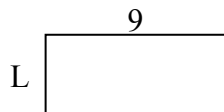
Определите значение 'L'

ОТВЕТЫ

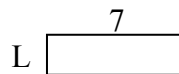
1) Площадь = $8u^2$



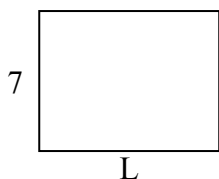
2) Площадь = $36u^2$



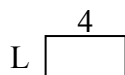
3) Площадь = $14u^2$



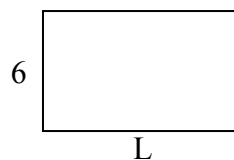
4) Площадь = $63u^2$



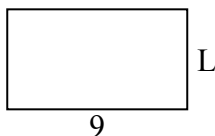
5) Площадь = $8u^2$



6) Площадь = $60u^2$



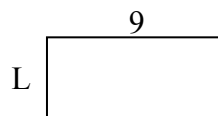
7) Площадь = $45u^2$



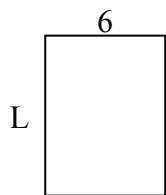
8) Площадь = $20u^2$



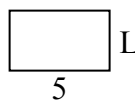
9) Площадь = $36u^2$



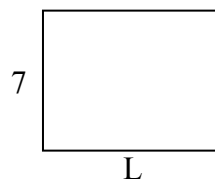
10) Площадь = $48u^2$



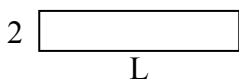
11) Площадь = $15u^2$



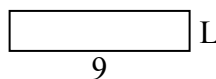
12) Площадь = $63u^2$



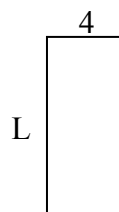
13) Площадь = $20u^2$



14) Площадь = $18u^2$



15) Площадь = $36u^2$

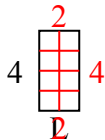


1. _____
2. _____
3. _____
4. _____
5. _____
6. _____
7. _____
8. _____
9. _____
10. _____
11. _____
12. _____
13. _____
14. _____
15. _____

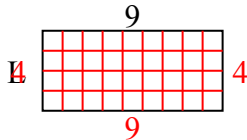


Определите значение 'L'

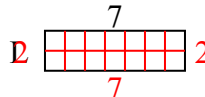
1) Площадь = $8u^2$



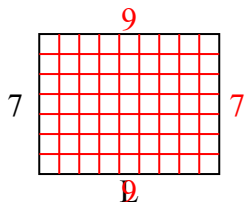
2) Площадь = $36u^2$



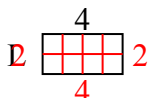
3) Площадь = $14u^2$



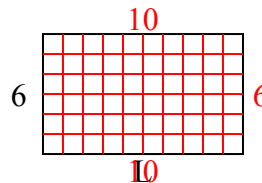
4) Площадь = $63u^2$



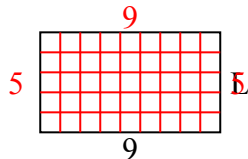
5) Площадь = $8u^2$



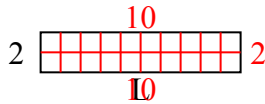
6) Площадь = $60u^2$



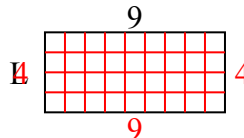
7) Площадь = $45u^2$



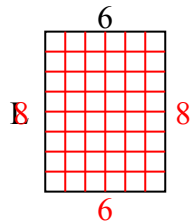
8) Площадь = $20u^2$



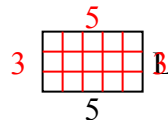
9) Площадь = $36u^2$



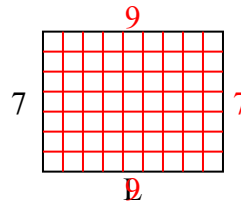
10) Площадь = $48u^2$



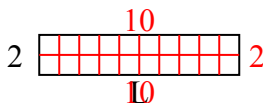
11) Площадь = $15u^2$



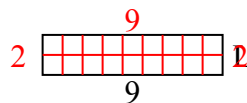
12) Площадь = $63u^2$



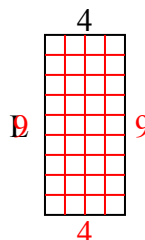
13) Площадь = $20u^2$



14) Площадь = $18u^2$



15) Площадь = $36u^2$



ОТВЕТЫ

1. 2

2. 4

3. 2

4. 9

5. 2

6. 10

7. 5

8. 10

9. 4

10. 8

11. 3

12. 9

13. 10

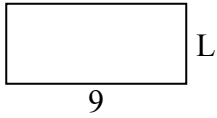
14. 2

15. 9

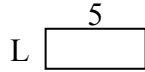


Определите значение 'L'


1) Площадь = $36u^2$



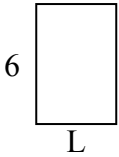
2) Площадь = $10u^2$



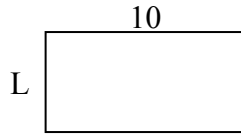
3) Площадь = $14u^2$



4) Площадь = $24u^2$



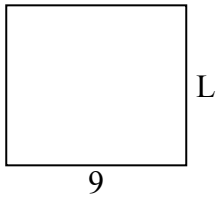
5) Площадь = $50u^2$



6) Площадь = $6u^2$



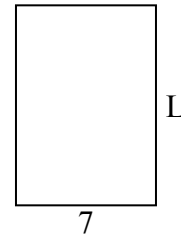
7) Площадь = $72u^2$



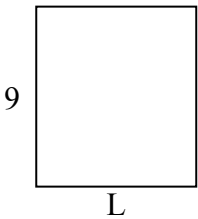
8) Площадь = $27u^2$



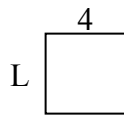
9) Площадь = $70u^2$



10) Площадь = $72u^2$




11) Площадь = $16u^2$



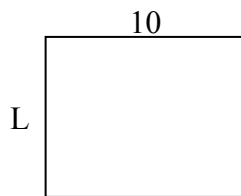
12) Площадь = $24u^2$




13) Площадь = $14u^2$



14) Площадь = $80u^2$



15) Площадь = $27u^2$



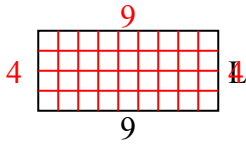
ОТВЕТЫ

1. _____
2. _____
3. _____
4. _____
5. _____
6. _____
7. _____
8. _____
9. _____
10. _____
11. _____
12. _____
13. _____
14. _____
15. _____

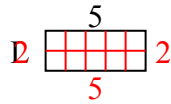


Определите значение 'L'

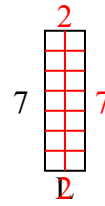
1) Площадь = $36u^2$



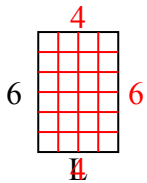
2) Площадь = $10u^2$



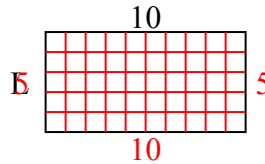
3) Площадь = $14u^2$



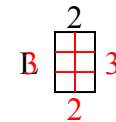
4) Площадь = $24u^2$



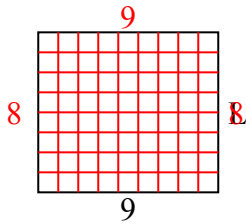
5) Площадь = $50u^2$



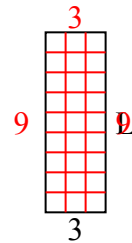
6) Площадь = $6u^2$



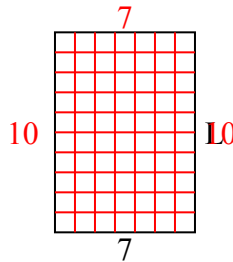
7) Площадь = $72u^2$



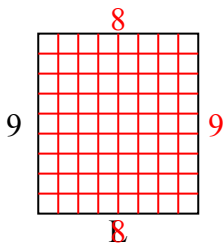
8) Площадь = $27u^2$



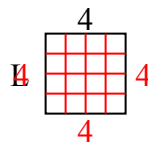
9) Площадь = $70u^2$



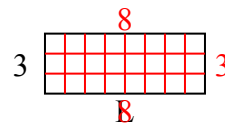
10) Площадь = $72u^2$



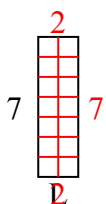
11) Площадь = $16u^2$



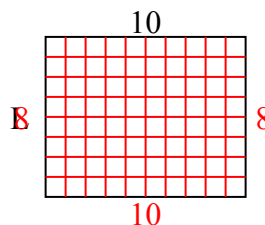
12) Площадь = $24u^2$



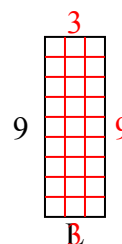
13) Площадь = $14u^2$



14) Площадь = $80u^2$



15) Площадь = $27u^2$



ОТВЕТЫ

1. 4

2. 2

3. 2

4. 4

5. 5

6. 3

7. 8

8. 9

9. 10

10. 8

11. 4

12. 8

13. 2

14. 8

15. 3