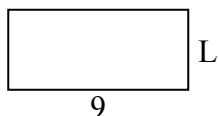




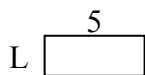
Определите значение 'P'

ОТВЕТЫ

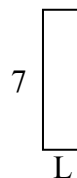
1) Периметр = 26



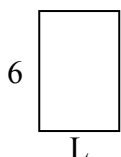
2) Периметр = 14



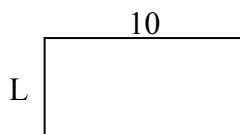
3) Периметр = 18



4) Периметр = 20



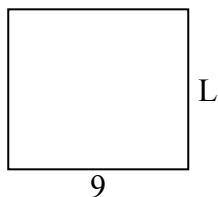
5) Периметр = 30



6) Периметр = 10




7) Периметр = 34



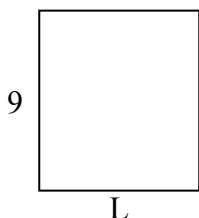
8) Периметр = 24



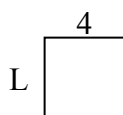
9) Периметр = 34



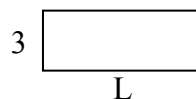
10) Периметр = 34



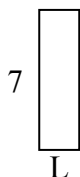
11) Периметр = 16



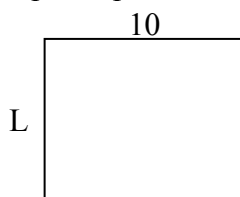
12) Периметр = 22




13) Периметр = 18



14) Периметр = 36



15) Периметр = 24

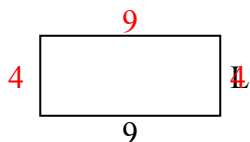


1. _____
2. _____
3. _____
4. _____
5. _____
6. _____
7. _____
8. _____
9. _____
10. _____
11. _____
12. _____
13. _____
14. _____
15. _____

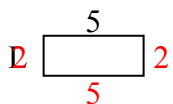


Определите значение 'P'

1) Периметр = 26



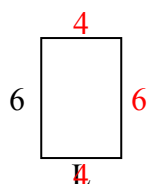
2) Периметр = 14



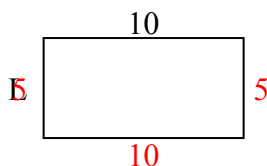
3) Периметр = 18



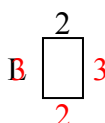
4) Периметр = 20



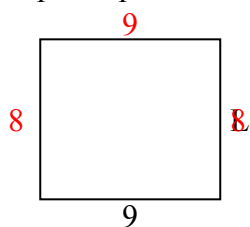
5) Периметр = 30



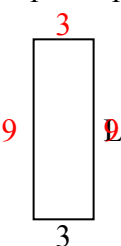
6) Периметр = 10



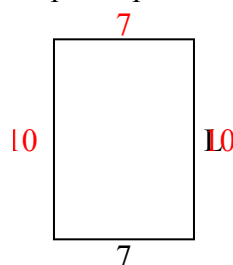
7) Периметр = 34



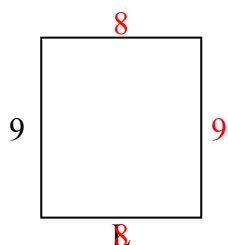
8) Периметр = 24



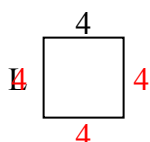
9) Периметр = 34



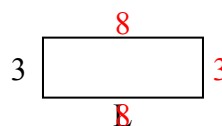
10) Периметр = 34



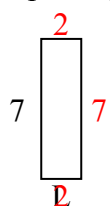
11) Периметр = 16



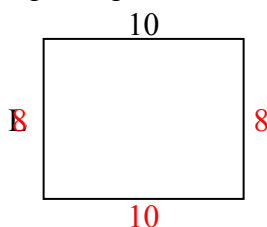
12) Периметр = 22



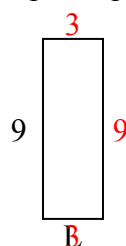
13) Периметр = 18



14) Периметр = 36



15) Периметр = 24



ОТВЕТЫ

1. 4 cm

2. 2 cm

3. 2 cm

4. 4 cm

5. 5 cm

6. 3 cm

7. 8 cm

8. 9 cm

9. 10 cm

10. 8 cm

11. 4 cm

12. 8 cm

13. 2 cm

14. 8 cm

15. 3 cm