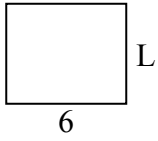




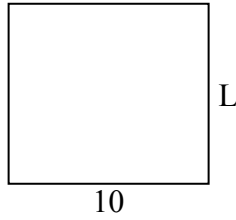
Определите значение 'P'

ОТВЕТЫ

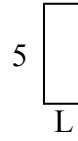
1) Периметр = 22



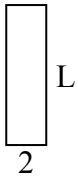
2) Периметр = 38



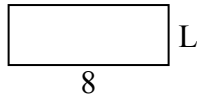
3) Периметр = 14



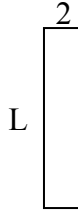
4) Периметр = 18



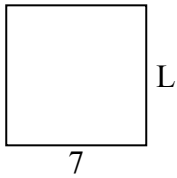
5) Периметр = 22



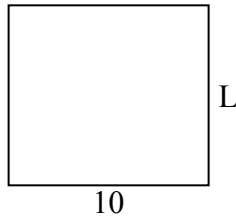
6) Периметр = 22



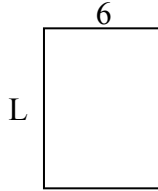
7) Периметр = 28



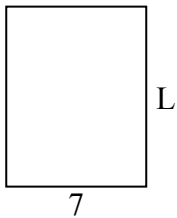
8) Периметр = 38



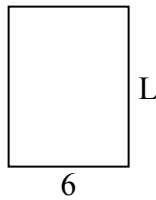
9) Периметр = 28



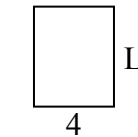
10) Периметр = 32



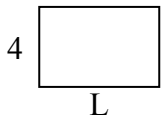
11) Периметр = 28



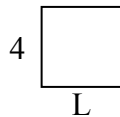
12) Периметр = 18



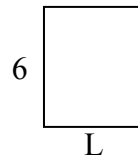
13) Периметр = 20



14) Периметр = 16



15) Периметр = 22

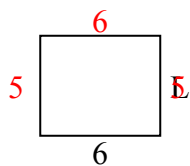


1. _____
2. _____
3. _____
4. _____
5. _____
6. _____
7. _____
8. _____
9. _____
10. _____
11. _____
12. _____
13. _____
14. _____
15. _____

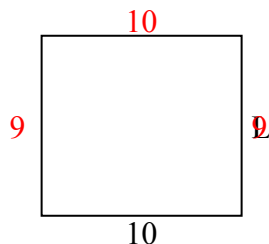


Определите значение 'P'

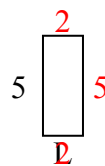
1) Периметр = 22



2) Периметр = 38



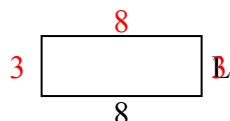
3) Периметр = 14



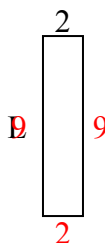
4) Периметр = 18



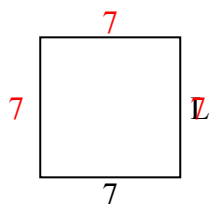
5) Периметр = 22



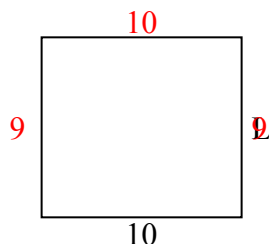
6) Периметр = 22



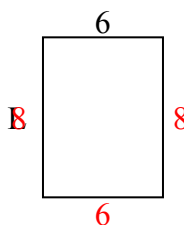
7) Периметр = 28



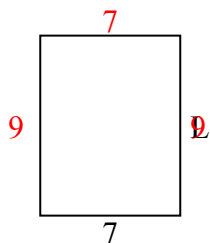
8) Периметр = 38



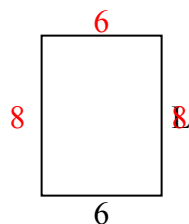
9) Периметр = 28



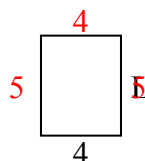
10) Периметр = 32



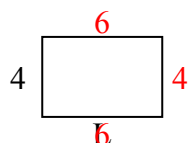
11) Периметр = 28



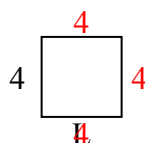
12) Периметр = 18



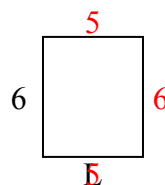
13) Периметр = 20



14) Периметр = 16



15) Периметр = 22



ОТВЕТЫ

1. 5 cm

2. 9 cm

3. 2 cm

4. 7 cm

5. 3 cm

6. 9 cm

7. 7 cm

8. 9 cm

9. 8 cm

10. 9 cm

11. 8 cm

12. 5 cm

13. 6 cm

14. 4 cm

15. 5 cm