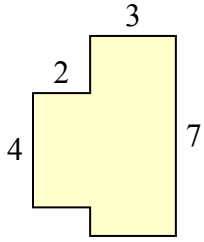


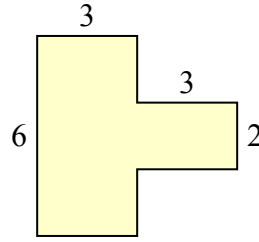


Определите общую площадь фигуры. Измерения в миллиметрах. Не шкала.

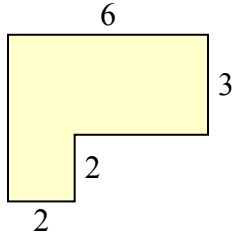
1)



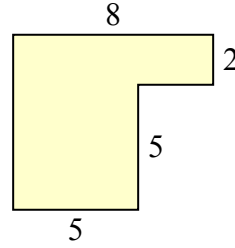
2)



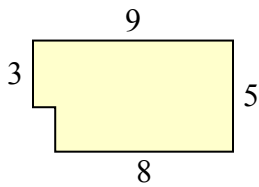
3)



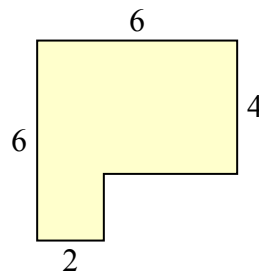
4)



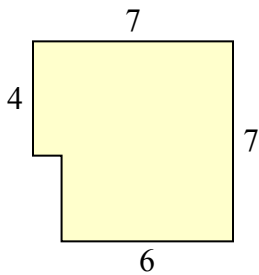
5)



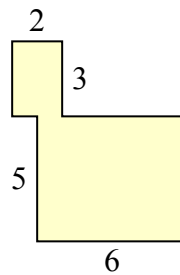
6)



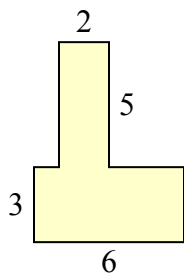
7)



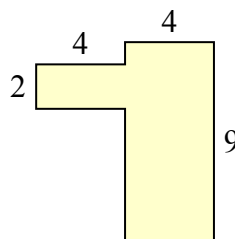
8)



9)



10)

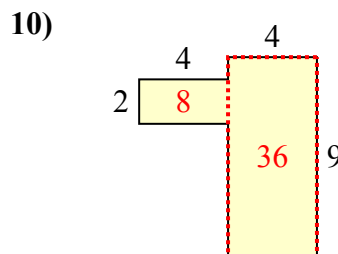
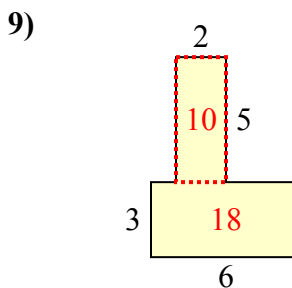
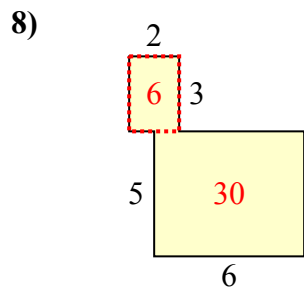
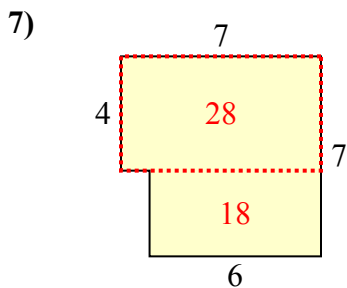
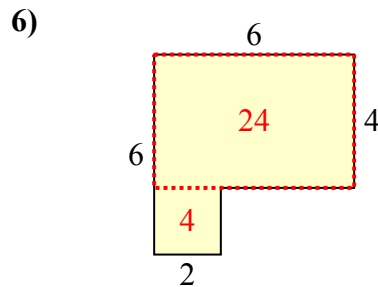
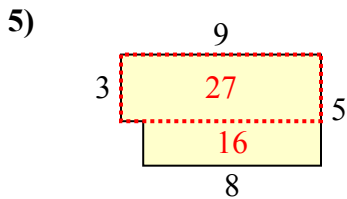
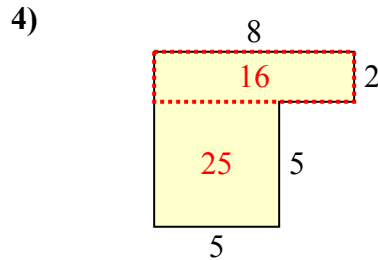
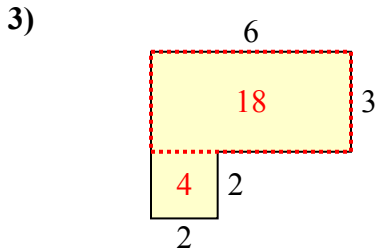
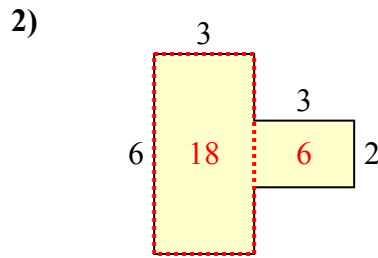
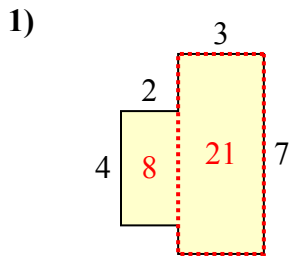


**ОТВЕТЫ**

1. \_\_\_\_\_
2. \_\_\_\_\_
3. \_\_\_\_\_
4. \_\_\_\_\_
5. \_\_\_\_\_
6. \_\_\_\_\_
7. \_\_\_\_\_
8. \_\_\_\_\_
9. \_\_\_\_\_
10. \_\_\_\_\_



Определите общую площадь фигуры. Измерения в миллиметрах. Не шкала.



**ОТВЕТЫ**

1. 29 mm<sup>2</sup>
2. 24 mm<sup>2</sup>
3. 22 mm<sup>2</sup>
4. 41 mm<sup>2</sup>
5. 43 mm<sup>2</sup>
6. 28 mm<sup>2</sup>
7. 46 mm<sup>2</sup>
8. 36 mm<sup>2</sup>
9. 28 mm<sup>2</sup>
10. 44 mm<sup>2</sup>