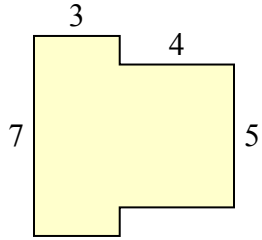




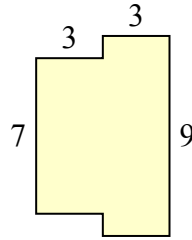
Определите общую площадь фигуры. Измерения в миллиметрах. Не шкала.

ОТВЕТЫ

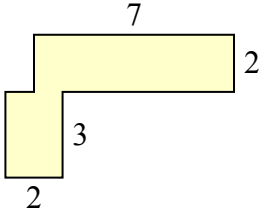
1)



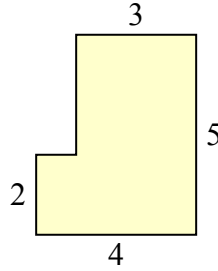
2)



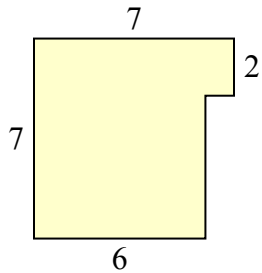
3)



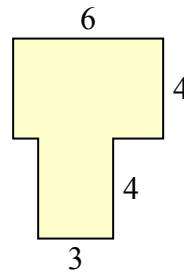
4)



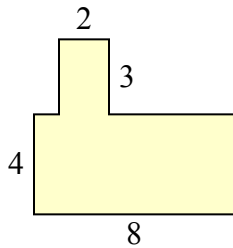
5)



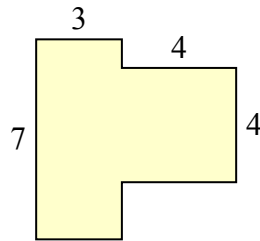
6)



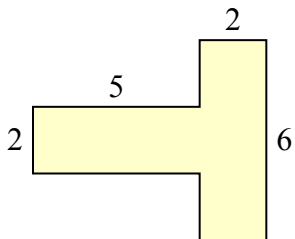
7)



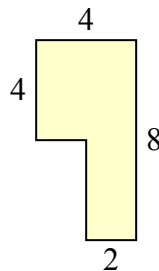
8)



9)



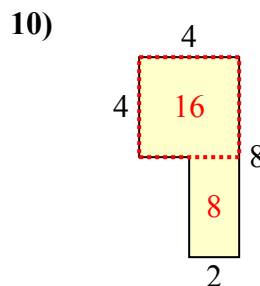
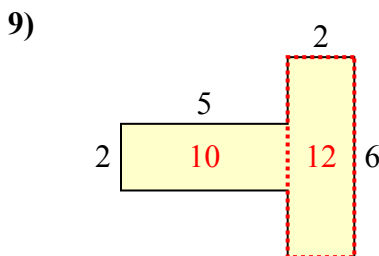
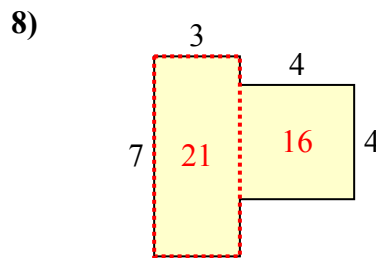
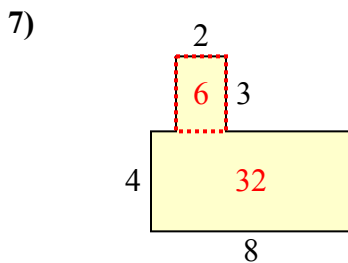
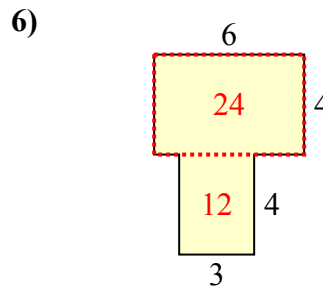
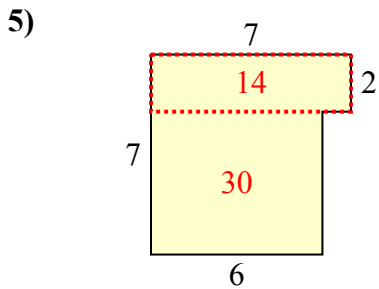
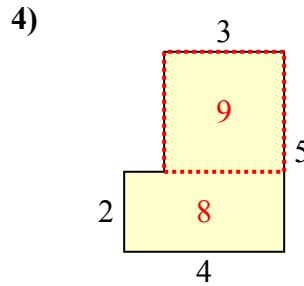
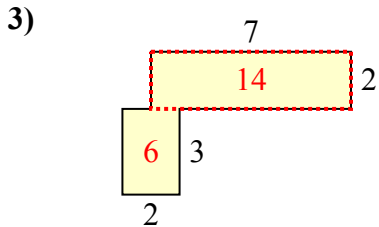
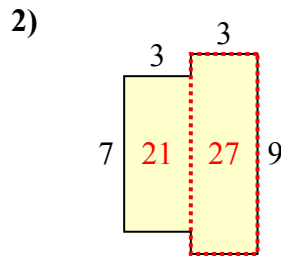
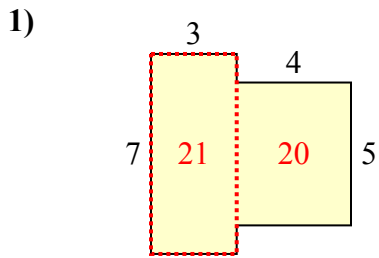
10)



1. _____
2. _____
3. _____
4. _____
5. _____
6. _____
7. _____
8. _____
9. _____
10. _____



Определите общую площадь фигуры. Измерения в миллиметрах. Не шкала.



ОТВЕТЫ

1. 41 mm²
2. 48 mm²
3. 20 mm²
4. 17 mm²
5. 44 mm²
6. 36 mm²
7. 38 mm²
8. 37 mm²
9. 22 mm²
10. 24 mm²