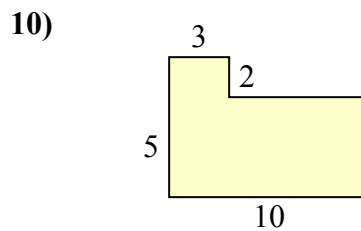
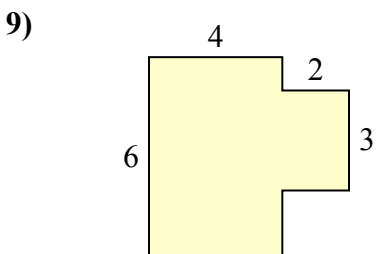
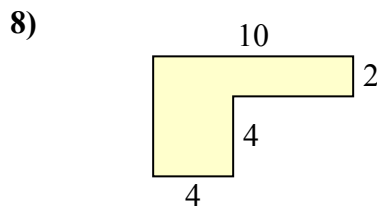
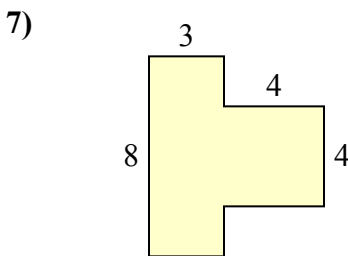
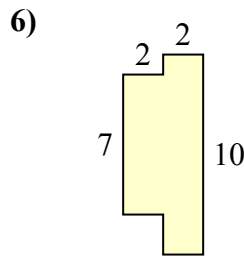
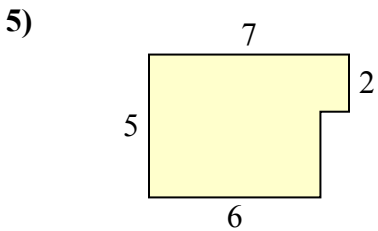
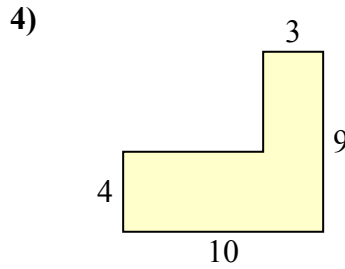
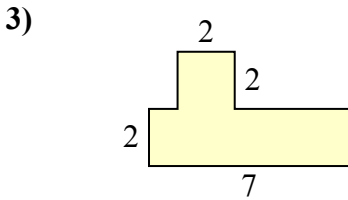
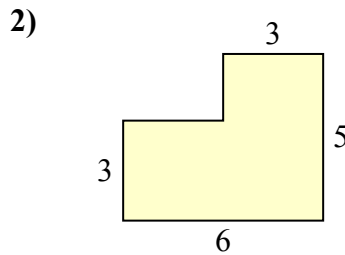
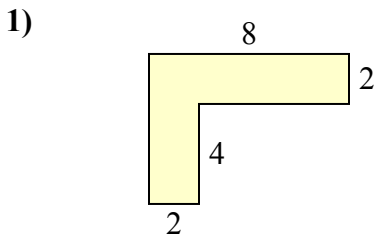




Определите общую площадь фигуры. Измерения в миллиметрах. Не шкала.

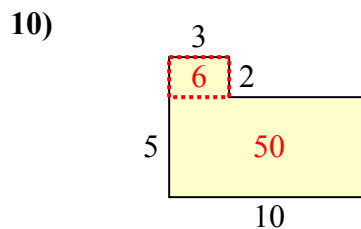
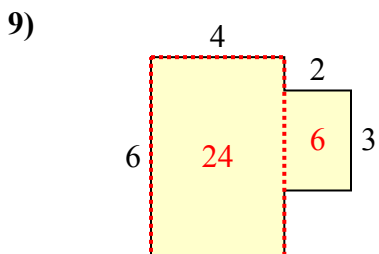
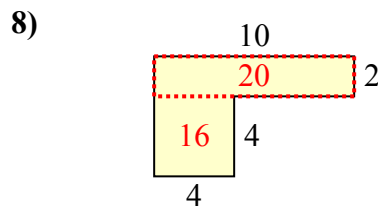
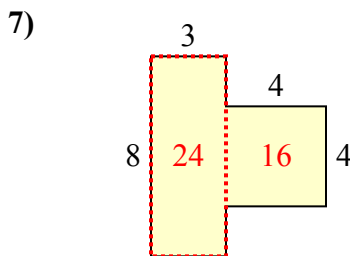
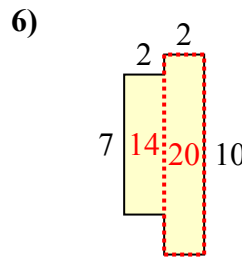
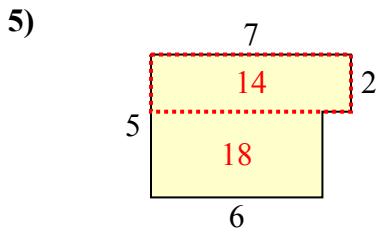
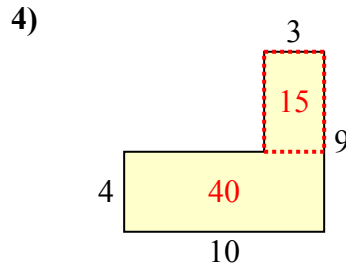
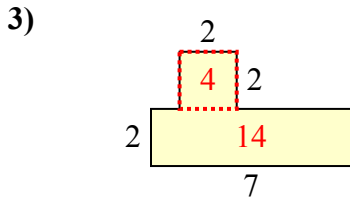
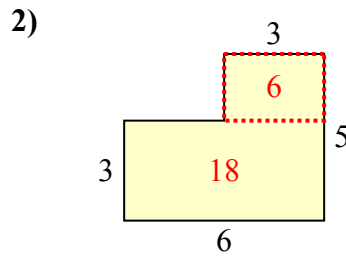
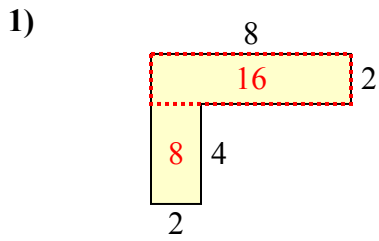
ОТВЕТЫ



- 1. \_\_\_\_\_
- 2. \_\_\_\_\_
- 3. \_\_\_\_\_
- 4. \_\_\_\_\_
- 5. \_\_\_\_\_
- 6. \_\_\_\_\_
- 7. \_\_\_\_\_
- 8. \_\_\_\_\_
- 9. \_\_\_\_\_
- 10. \_\_\_\_\_



Определите общую площадь фигуры. Измерения в миллиметрах. Не шкала.



**ОТВЕТЫ**

1. 24 mm<sup>2</sup>
2. 24 mm<sup>2</sup>
3. 18 mm<sup>2</sup>
4. 55 mm<sup>2</sup>
5. 32 mm<sup>2</sup>
6. 34 mm<sup>2</sup>
7. 40 mm<sup>2</sup>
8. 36 mm<sup>2</sup>
9. 30 mm<sup>2</sup>
10. 56 mm<sup>2</sup>