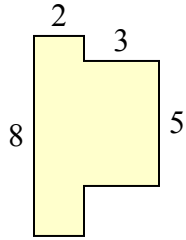




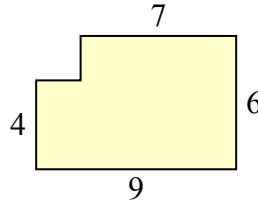
Определите общую площадь фигуры. Измерения в миллиметрах. Не шкала.

ОТВЕТЫ

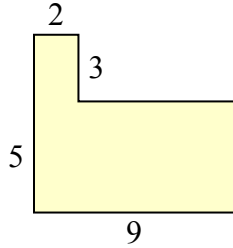
1)



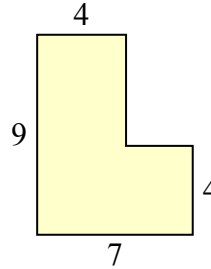
2)



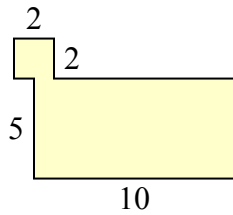
3)



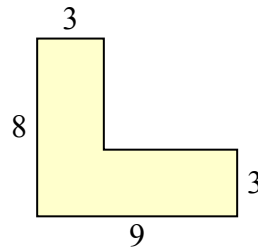
4)



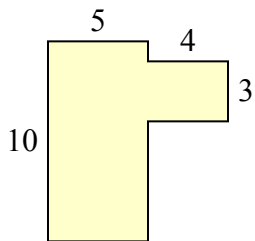
5)



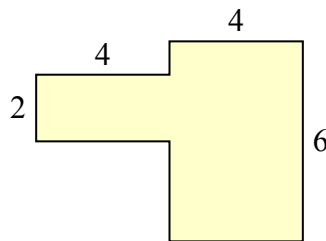
6)



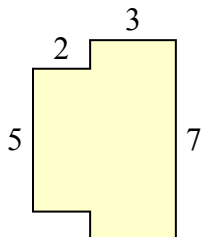
7)



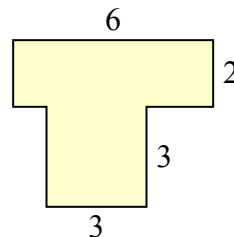
8)



9)



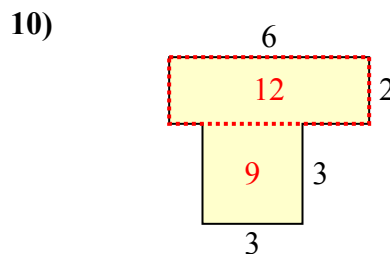
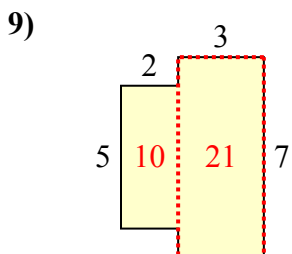
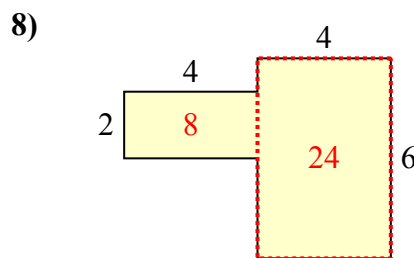
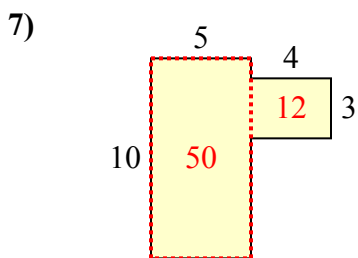
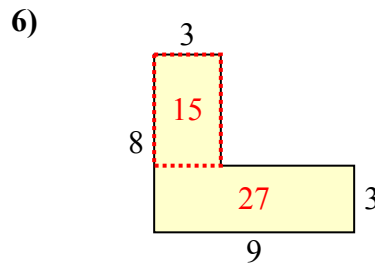
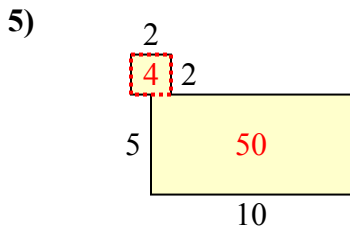
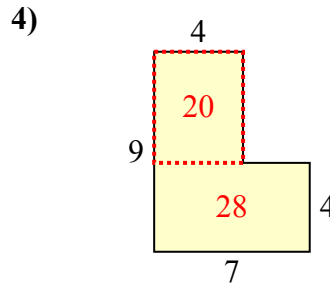
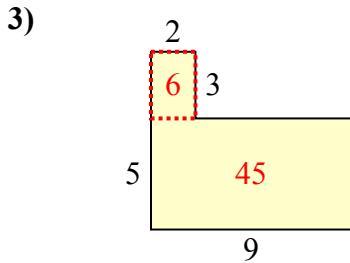
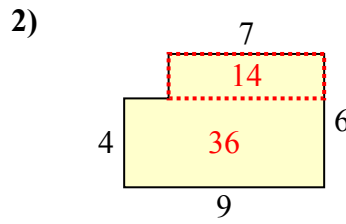
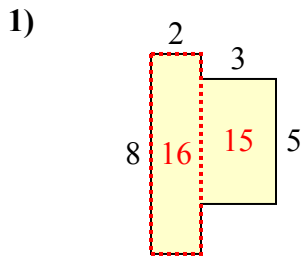
10)



- 1. _____
- 2. _____
- 3. _____
- 4. _____
- 5. _____
- 6. _____
- 7. _____
- 8. _____
- 9. _____
- 10. _____



Определите общую площадь фигуры. Измерения в миллиметрах. Не шкала.



ОТВЕТЫ

1. 31 mm²
2. 50 mm²
3. 51 mm²
4. 48 mm²
5. 54 mm²
6. 42 mm²
7. 62 mm²
8. 32 mm²
9. 31 mm²
10. 21 mm²