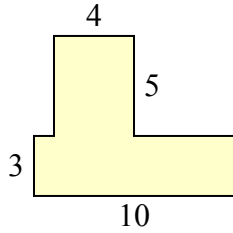




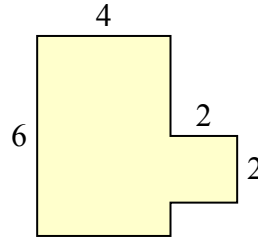
Определите общую площадь фигуры. Измерения в миллиметрах. Не шкала.

ОТВЕТЫ

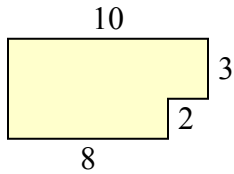
1)



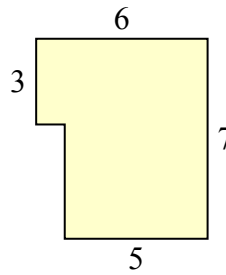
2)



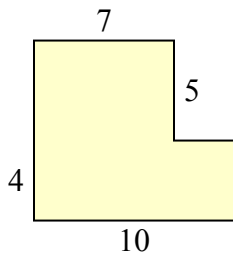
3)



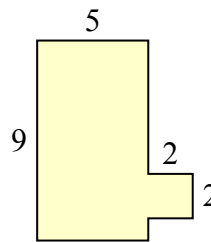
4)



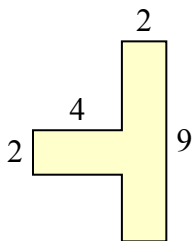
5)



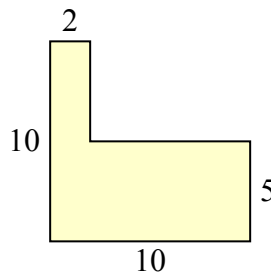
6)



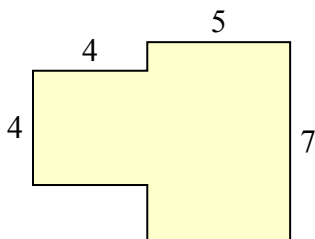
7)



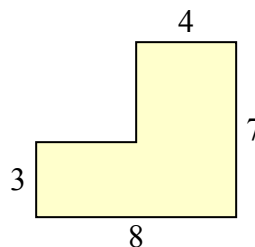
8)



9)



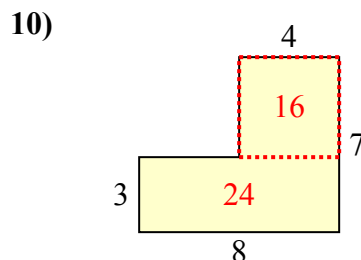
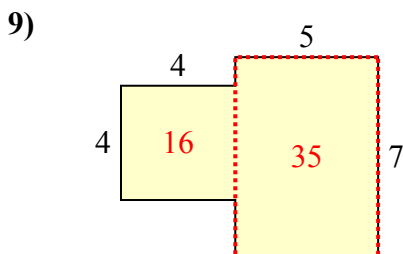
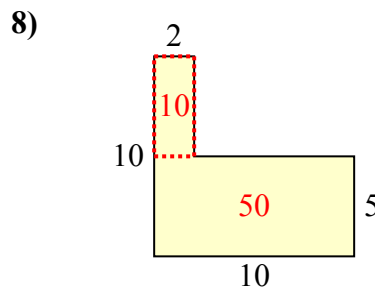
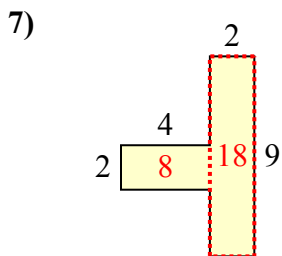
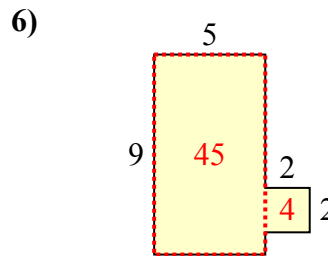
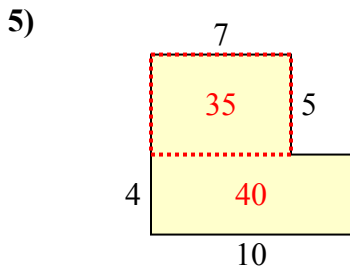
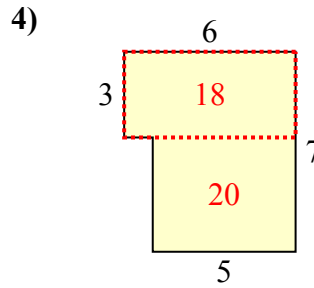
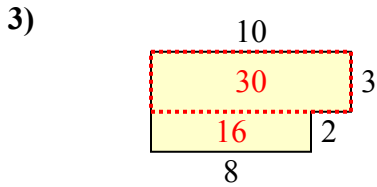
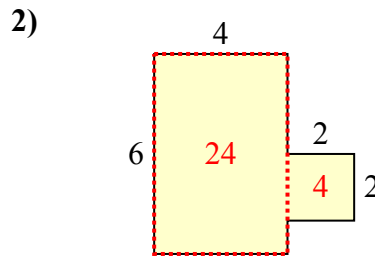
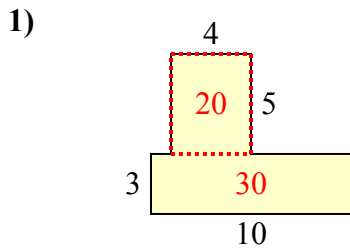
10)



- 1. _____
- 2. _____
- 3. _____
- 4. _____
- 5. _____
- 6. _____
- 7. _____
- 8. _____
- 9. _____
- 10. _____



Определите общую площадь фигуры. Измерения в миллиметрах. Не шкала.



ОТВЕТЫ

1. 50 mm²
2. 28 mm²
3. 46 mm²
4. 38 mm²
5. 75 mm²
6. 49 mm²
7. 26 mm²
8. 60 mm²
9. 51 mm²
10. 40 mm²