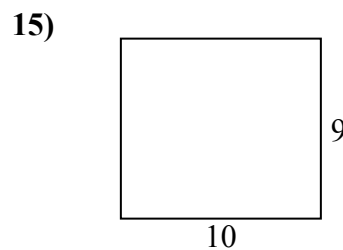
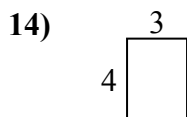
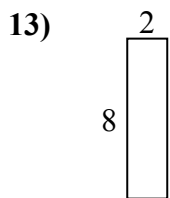
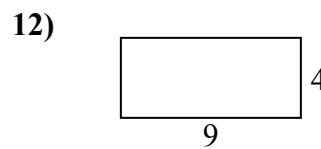
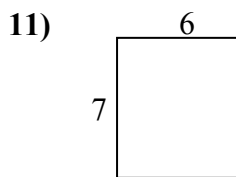
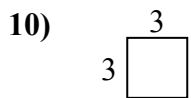
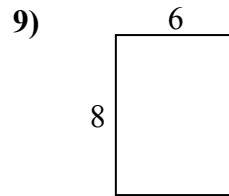
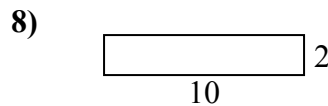
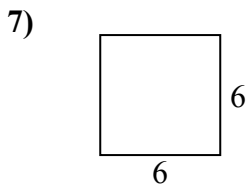
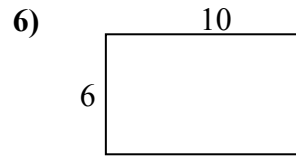
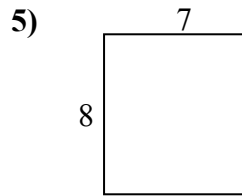
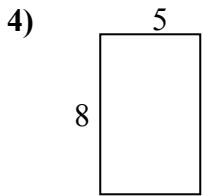
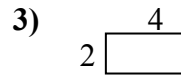
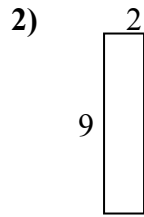
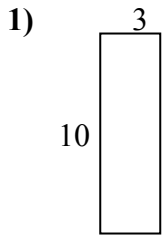




Определите периметр и площадь каждой фигуры. Каждая фигура в дюймах. Не шкала.

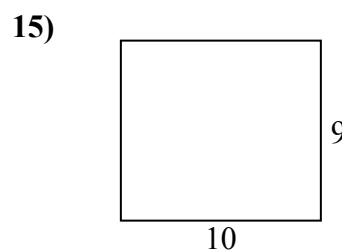
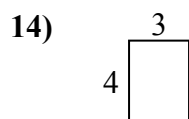
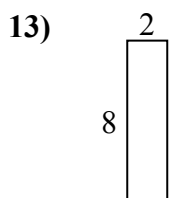
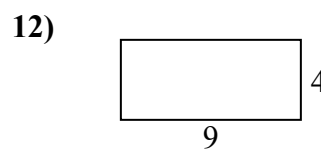
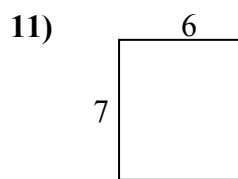
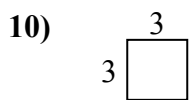
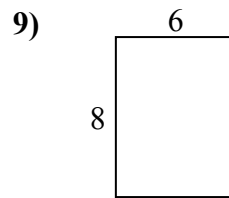
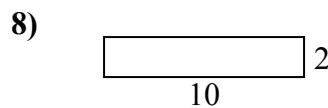
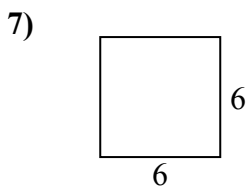
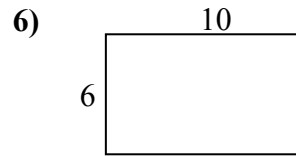
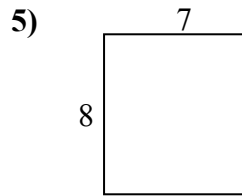
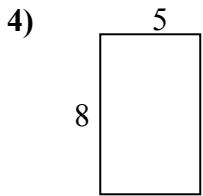
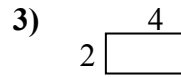
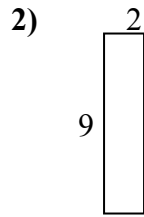
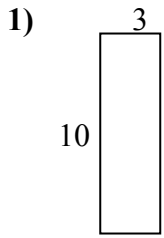


ОТВЕТЫ

1.	_____	_____
2.	_____	_____
3.	_____	_____
4.	_____	_____
5.	_____	_____
6.	_____	_____
7.	_____	_____
8.	_____	_____
9.	_____	_____
10.	_____	_____
11.	_____	_____
12.	_____	_____
13.	_____	_____
14.	_____	_____
15.	_____	_____



Определите периметр и площадь каждой фигуры. Каждая фигура в дюймах. Не шкала.



ОТВЕТЫ

1.	<u>26</u>	<u>30</u>
2.	<u>22</u>	<u>18</u>
3.	<u>12</u>	<u>8</u>
4.	<u>26</u>	<u>40</u>
5.	<u>30</u>	<u>56</u>
6.	<u>32</u>	<u>60</u>
7.	<u>24</u>	<u>36</u>
8.	<u>24</u>	<u>20</u>
9.	<u>28</u>	<u>48</u>
10.	<u>12</u>	<u>9</u>
11.	<u>26</u>	<u>42</u>
12.	<u>26</u>	<u>36</u>
13.	<u>20</u>	<u>16</u>
14.	<u>14</u>	<u>12</u>
15.	<u>38</u>	<u>90</u>