





Определите число, которое нужно вставить в данную фигуру.

об) 

8	
5	3

1) 

8	
1	7

2) 

10	
9	1

3) 

8	
7	1

4) 

9	
3	6

5) 

5	
1	4

6) 

8	
2	6

7) 

7	
2	5

8) 

10	
7	3

9) 

10	
5	5

10) 

9	
7	2

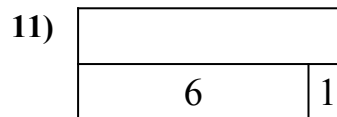
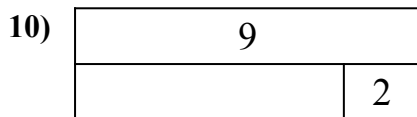

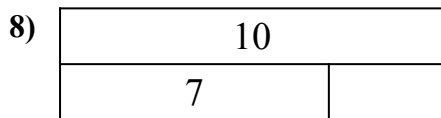
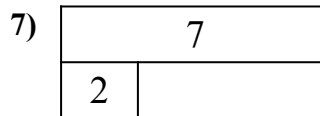
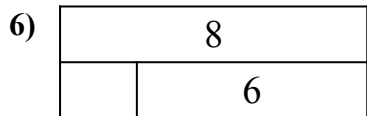
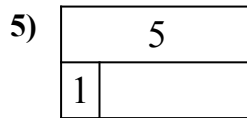

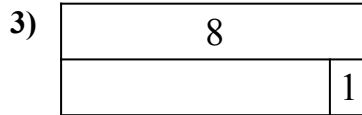
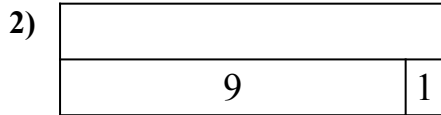
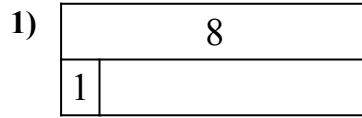
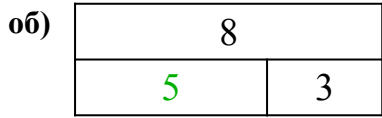
11) 

7	
6	1

Ответыоб. 51. 72. 103. 74. 95. 46. 27. 58. 39. 510. 711. 7



Определите число, которое нужно вставить в данную фигуру.

Ответыоб. 5

1. \_\_\_\_\_

2. \_\_\_\_\_

3. \_\_\_\_\_

4. \_\_\_\_\_

5. \_\_\_\_\_

6. \_\_\_\_\_

7. \_\_\_\_\_

8. \_\_\_\_\_

9. \_\_\_\_\_

10. \_\_\_\_\_

11. \_\_\_\_\_