




Подсчитайте количество данных фигур

Ответы




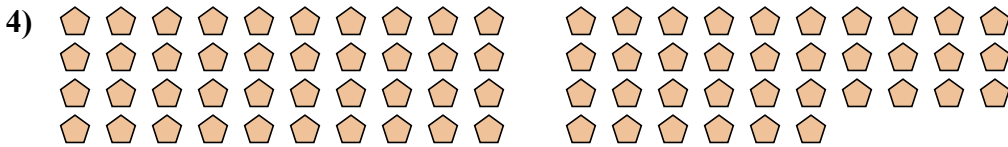
1. \_\_\_\_\_

2. \_\_\_\_\_

3. \_\_\_\_\_


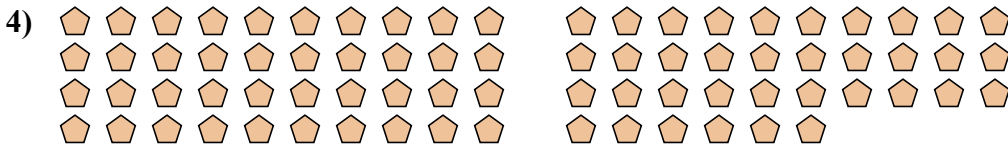

4. \_\_\_\_\_

5. \_\_\_\_\_





Подсчитайте количество данных фигур



Ответы

1. 6

2. 51

3. 31

4. 76

5. 103