


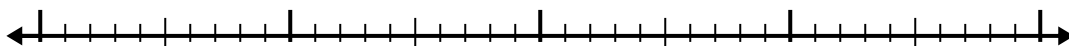


Используйте числовую линию для решения каждой проблемы.

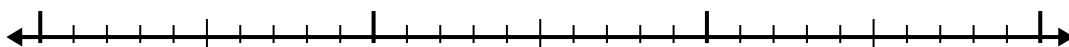
1) $2.1 + 3.4 =$




2) $2.5 + 2.1 =$




3) $6.9 + 1.2 =$




4) $6.8 + 1.3 =$



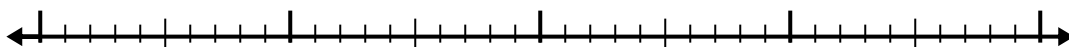
5) $7.1 + 1.8 =$



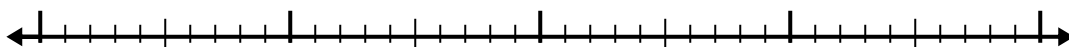
6) $3.8 + 2.1 =$



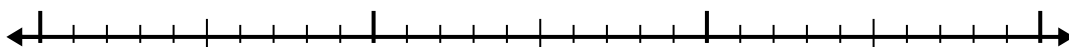
7) $7.2 + 2.1 =$



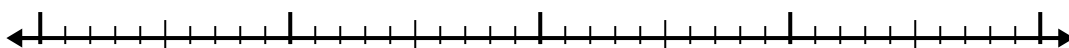
8) $6 + 1.8 =$



9) $4.5 + 1.1 =$



10) $3.3 + 2.7 =$



Ответы

1. _____

2. _____

3. _____

4. _____

5. _____

6. _____

7. _____

8. _____

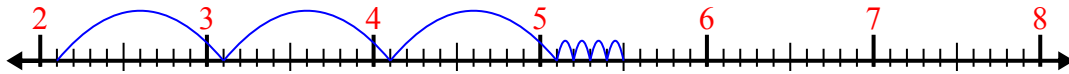
9. _____

10. _____

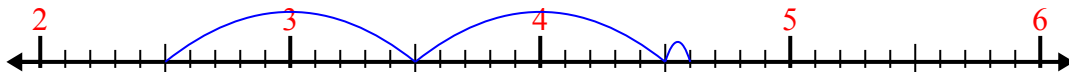


Используйте числовую линию для решения каждой проблемы.

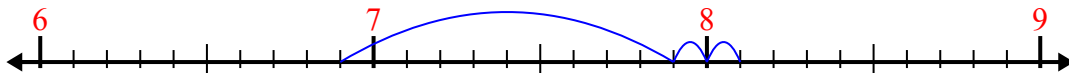
1) $2.1 + 3.4 =$




2) $2.5 + 2.1 =$



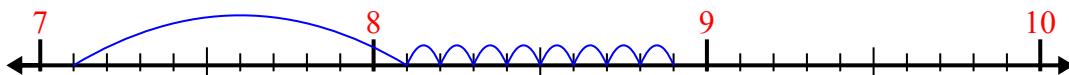
3) $6.9 + 1.2 =$



4) $6.8 + 1.3 =$



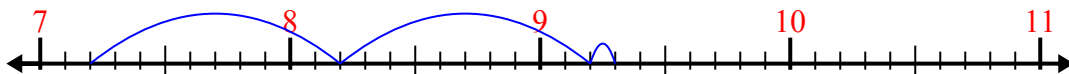
5) $7.1 + 1.8 =$



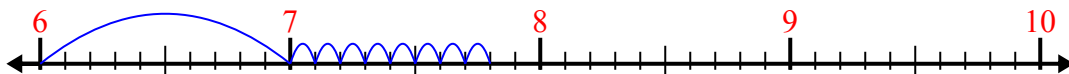
6) $3.8 + 2.1 =$



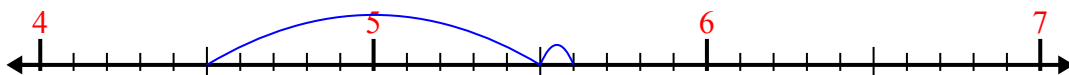
7) $7.2 + 2.1 =$



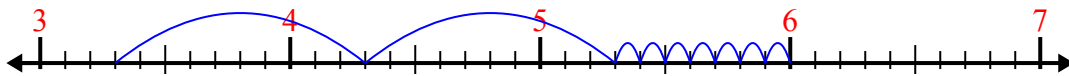
8) $6 + 1.8 =$



9) $4.5 + 1.1 =$



10) $3.3 + 2.7 =$



ОТВЕТЫ

1. 5,5

2. 4,6

3. 8,1

4. 8,1

5. 8,9

6. 5,9

7. 9,3

8. 7,8

9. 5,6

10. 6,0