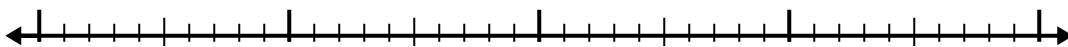


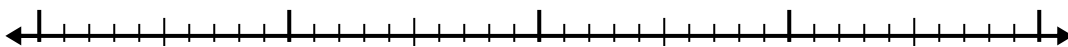


Используйте числовую линию для решения каждой проблемы.

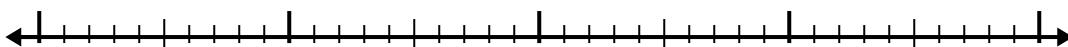
1)  $6.1 + 1.7 =$



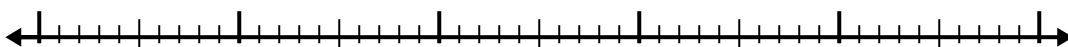
2)  $2.8 + 1.3 =$



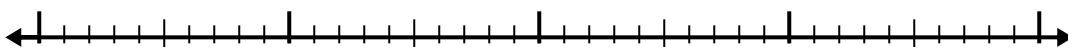
3)  $5.6 + 1.3 =$



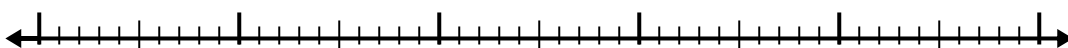
4)  $7.5 + 3.7 =$



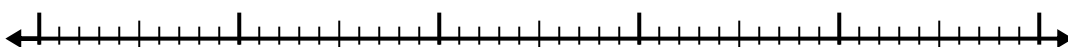
5)  $7.8 + 2.9 =$



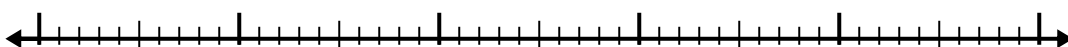
6)  $3.4 + 2.5 =$




7)  $6.7 + 2.7 =$



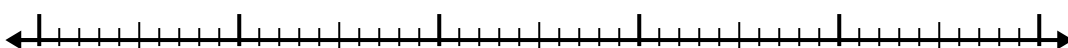
8)  $2.1 + 3.3 =$



9)  $1 + 1.7 =$



10)  $3 + 3.1 =$



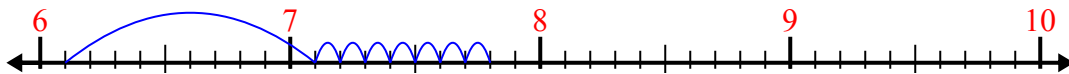
Ответы

- 1. \_\_\_\_\_
- 2. \_\_\_\_\_
- 3. \_\_\_\_\_
- 4. \_\_\_\_\_
- 5. \_\_\_\_\_
- 6. \_\_\_\_\_
- 7. \_\_\_\_\_
- 8. \_\_\_\_\_
- 9. \_\_\_\_\_
- 10. \_\_\_\_\_

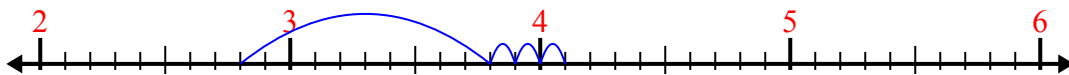


Используйте числовую линию для решения каждой проблемы.

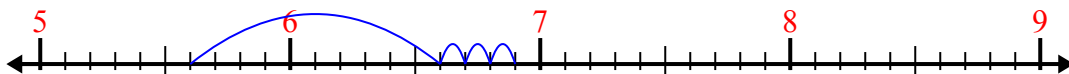
1)  $6.1 + 1.7 =$



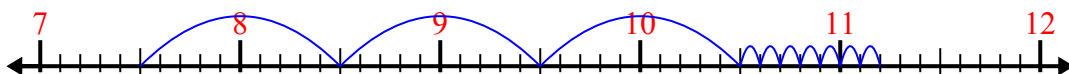
2)  $2.8 + 1.3 =$



3)  $5.6 + 1.3 =$



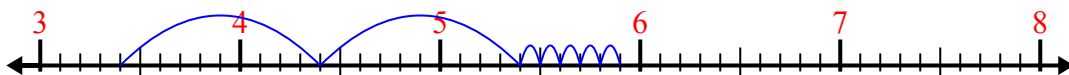
4)  $7.5 + 3.7 =$



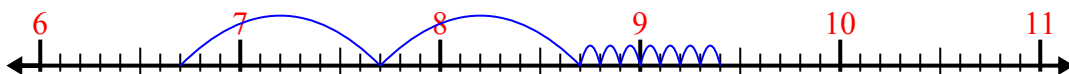
5)  $7.8 + 2.9 =$



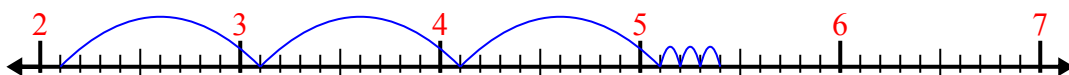
6)  $3.4 + 2.5 =$



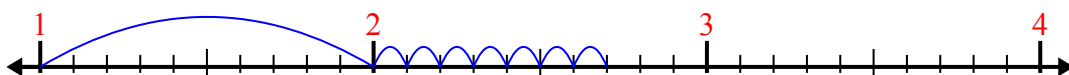
7)  $6.7 + 2.7 =$




8)  $2.1 + 3.3 =$



9)  $1 + 1.7 =$



10)  $3 + 3.1 =$



**ОТВЕТЫ**

1. 7,8

2. 4,1

3. 6,9

4. 11,2

5. 10,7

6. 5,9

7. 9,4

8. 5,4

9. 2,7

10. 6,1