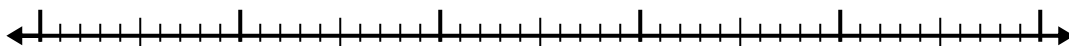


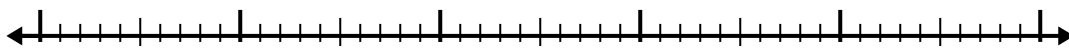


Используйте числовую линию для решения каждой проблемы.

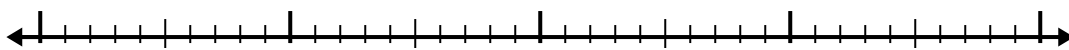
1) $4.8 + 3.8 =$




2) $6.1 + 2.7 =$



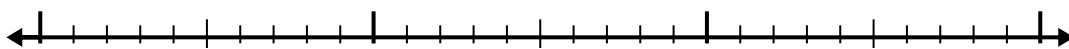
3) $5.5 + 1.3 =$



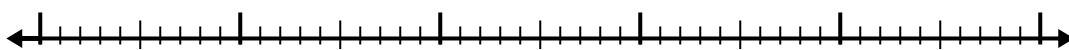
4) $2.8 + 2.4 =$




5) $1.4 + 1.3 =$




6) $4.6 + 2.4 =$



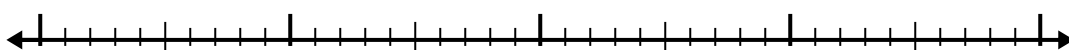
7) $8 + 2.5 =$



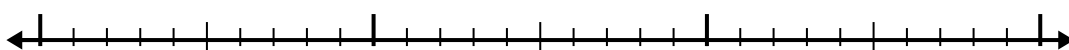
8) $8.5 + 3.8 =$



9) $1.5 + 2.7 =$



10) $1.7 + 1.3 =$



Ответы

1. _____

2. _____

3. _____

4. _____

5. _____

6. _____

7. _____

8. _____


9. _____

10. _____

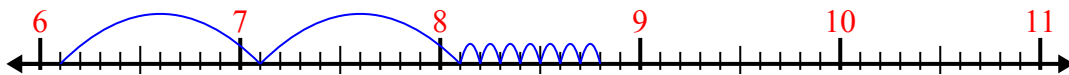


Используйте числовую линию для решения каждой проблемы.

1) $4.8 + 3.8 =$



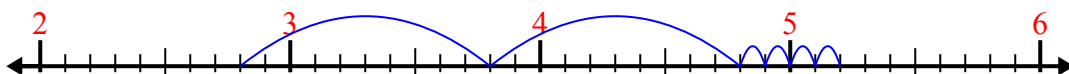
2) $6.1 + 2.7 =$



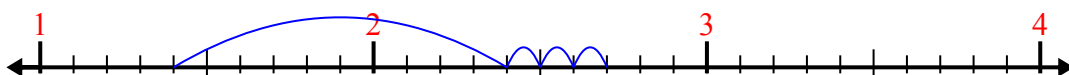
3) $5.5 + 1.3 =$



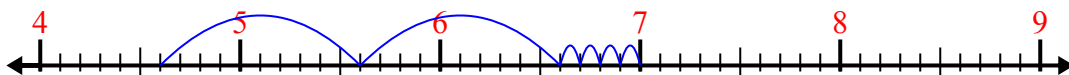
4) $2.8 + 2.4 =$



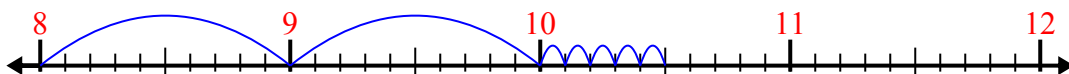
5) $1.4 + 1.3 =$



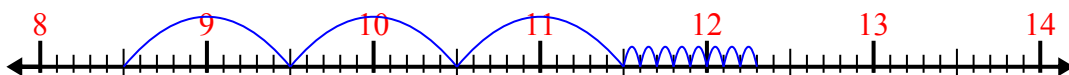
6) $4.6 + 2.4 =$



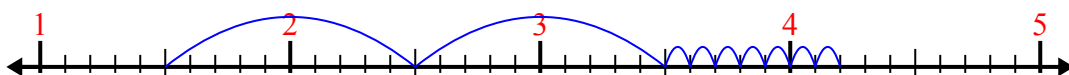
7) $8 + 2.5 =$



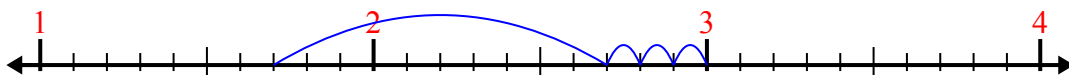
8) $8.5 + 3.8 =$



9) $1.5 + 2.7 =$



10) $1.7 + 1.3 =$



ОТВЕТЫ

1. 8,6

2. 8,8

3. 6,8

4. 5,2

5. 2,7

6. 7,0

7. 10,5

8. 12,3

9. 4,2

10. 3,0