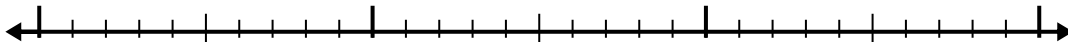


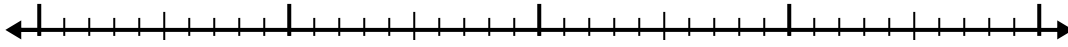


Используйте числовую линию для решения каждой проблемы.

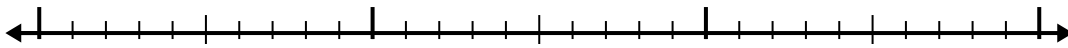
1)  $1.2 + 1.3 =$




2)  $8.4 + 2.4 =$



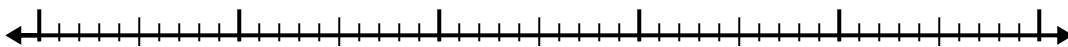
3)  $2.8 + 1.7 =$



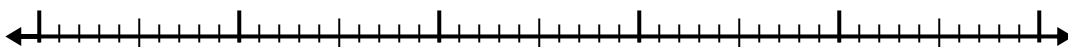
4)  $6.1 + 3.8 =$



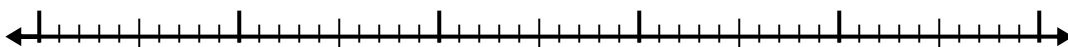
5)  $1.9 + 2.5 =$



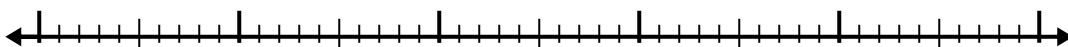
6)  $7.3 + 2.4 =$



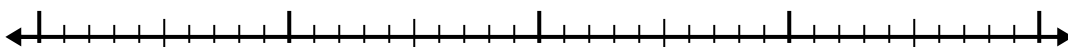
7)  $8.9 + 3.7 =$



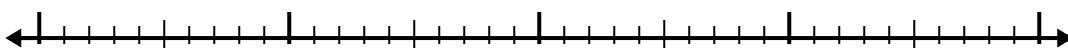
8)  $3.5 + 2.7 =$



9)  $6.1 + 1.6 =$



10)  $4.4 + 2.1 =$



Ответы

1. \_\_\_\_\_

2. \_\_\_\_\_

3. \_\_\_\_\_

4. \_\_\_\_\_

5. \_\_\_\_\_

6. \_\_\_\_\_

7. \_\_\_\_\_

8. \_\_\_\_\_

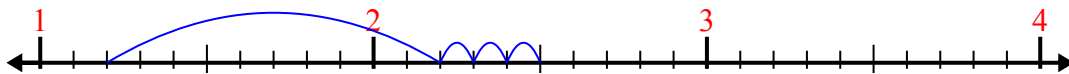
9. \_\_\_\_\_

10. \_\_\_\_\_

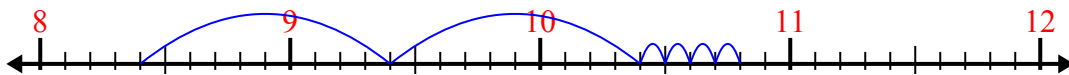


Используйте числовую линию для решения каждой проблемы.


1)  $1.2 + 1.3 =$



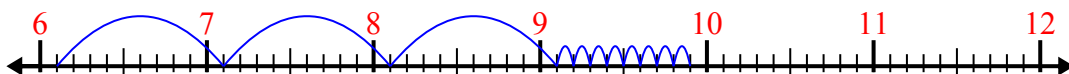
2)  $8.4 + 2.4 =$




3)  $2.8 + 1.7 =$



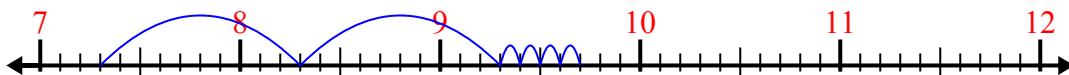
4)  $6.1 + 3.8 =$




5)  $1.9 + 2.5 =$



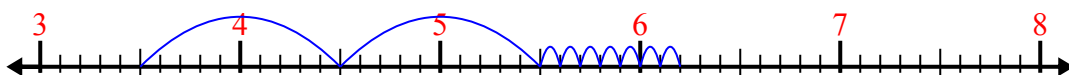
6)  $7.3 + 2.4 =$



7)  $8.9 + 3.7 =$



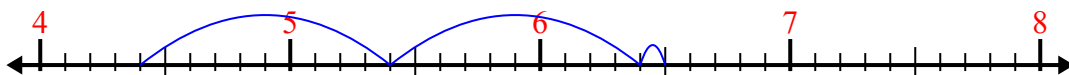
8)  $3.5 + 2.7 =$



9)  $6.1 + 1.6 =$



10)  $4.4 + 2.1 =$



**ОТВЕТЫ**

1. 2,5

2. 10,8

3. 4,5

4. 9,9

5. 4,4

6. 9,7

7. 12,6

8. 6,2

9. 7,7

10. 6,5