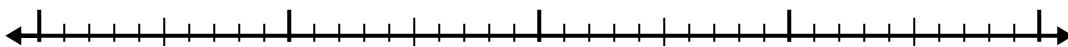


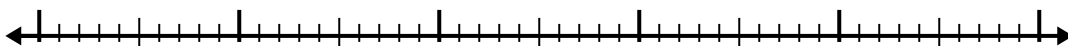


Используйте числовую линию для решения каждой проблемы.

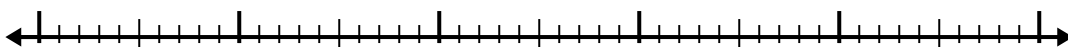
1)  $7.4 + 2.2 =$



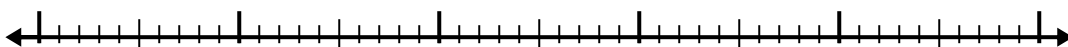
2)  $5.4 + 2.3 =$



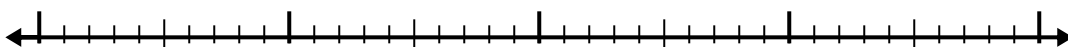
3)  $4.7 + 2.9 =$




4)  $4.4 + 3.7 =$



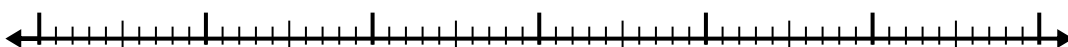
5)  $2.2 + 2.3 =$



6)  $3.9 + 1.3 =$



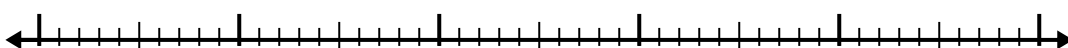
7)  $1 + 3.9 =$



8)  $5.8 + 2.1 =$



9)  $6.3 + 2.3 =$



10)  $7.3 + 2.9 =$



Отвeты

1. \_\_\_\_\_

2. \_\_\_\_\_

3. \_\_\_\_\_

4. \_\_\_\_\_

5. \_\_\_\_\_

6. \_\_\_\_\_

7. \_\_\_\_\_

8. \_\_\_\_\_

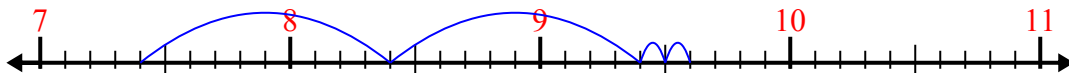
9. \_\_\_\_\_

10. \_\_\_\_\_

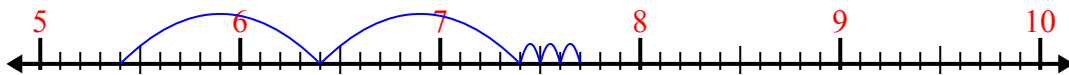


Используйте числовую линию для решения каждой проблемы.

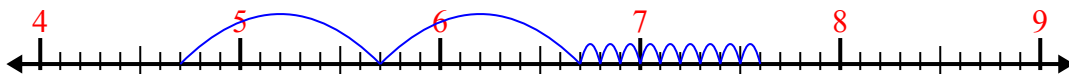
1)  $7.4 + 2.2 =$



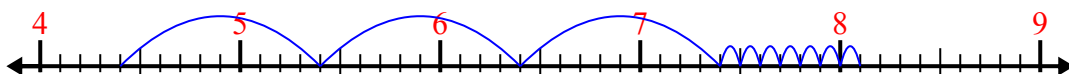
2)  $5.4 + 2.3 =$



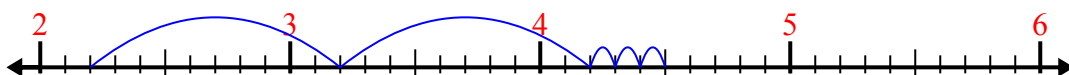
3)  $4.7 + 2.9 =$




4)  $4.4 + 3.7 =$



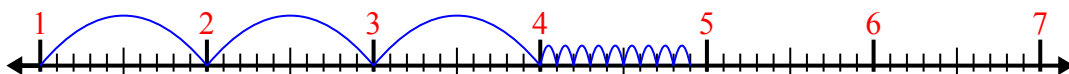
5)  $2.2 + 2.3 =$



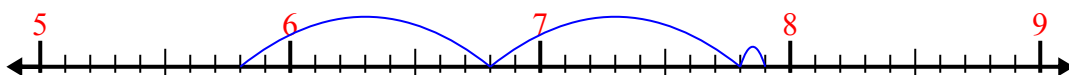
6)  $3.9 + 1.3 =$



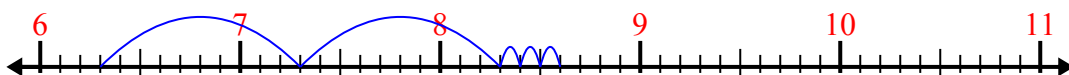
7)  $1 + 3.9 =$



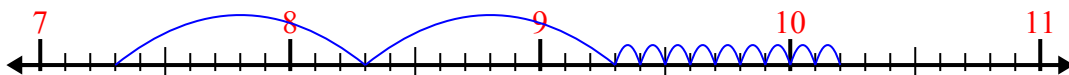
8)  $5.8 + 2.1 =$



9)  $6.3 + 2.3 =$



10)  $7.3 + 2.9 =$



**Ответы**

1. 9,6

2. 7,7

3. 7,6

4. 8,1

5. 4,5

6. 5,2

7. 4,9

8. 7,9

9. 8,6

10. 10,2