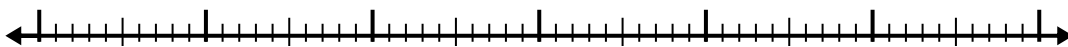


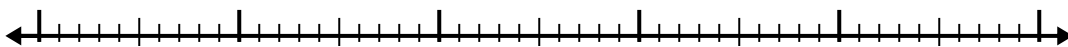


Используйте числовую линию для решения каждой проблемы.

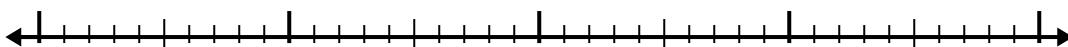
1)  $6.5 + 3.2 =$



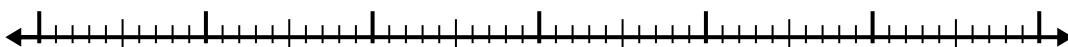
2)  $5.3 + 3.8 =$



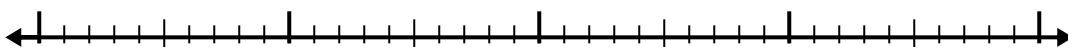
3)  $3.1 + 1.1 =$



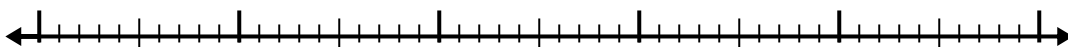
4)  $8.4 + 3.2 =$



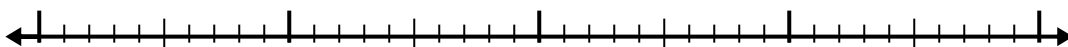
5)  $5.7 + 1.2 =$



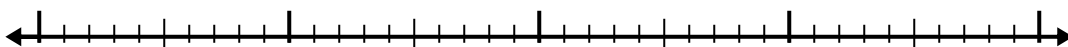
6)  $2 + 2.8 =$



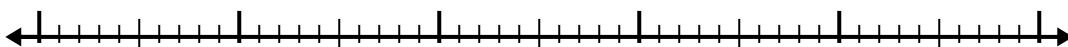
7)  $4.2 + 1.8 =$




8)  $6.6 + 1.4 =$



9)  $4.3 + 3.9 =$



10)  $1.1 + 1.4 =$



Ответы

1. \_\_\_\_\_

2. \_\_\_\_\_

3. \_\_\_\_\_

4. \_\_\_\_\_

5. \_\_\_\_\_

6. \_\_\_\_\_

7. \_\_\_\_\_

8. \_\_\_\_\_

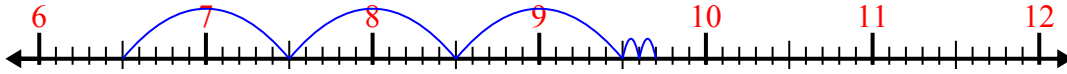
9. \_\_\_\_\_

10. \_\_\_\_\_

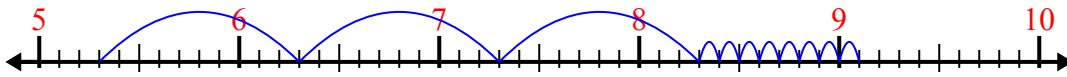


Используйте числовую линию для решения каждой проблемы.

1)  $6.5 + 3.2 =$



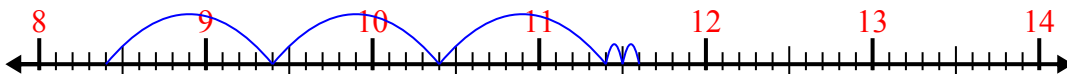
2)  $5.3 + 3.8 =$



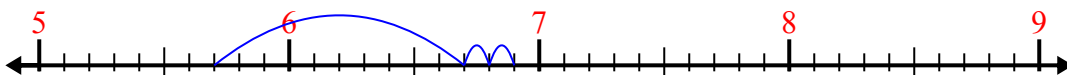
3)  $3.1 + 1.1 =$



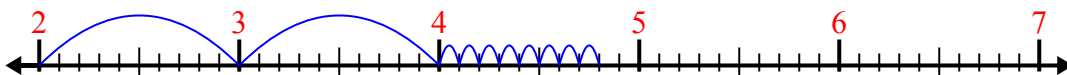
4)  $8.4 + 3.2 =$



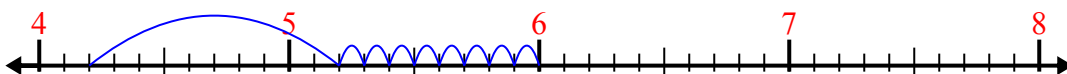
5)  $5.7 + 1.2 =$



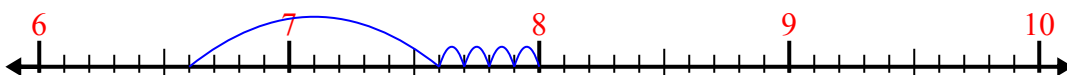
6)  $2 + 2.8 =$



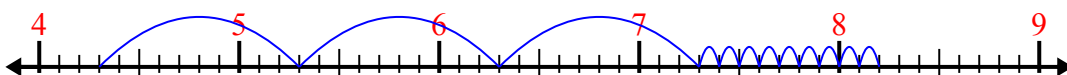
7)  $4.2 + 1.8 =$



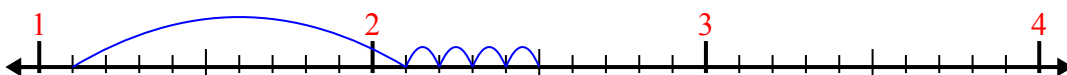
8)  $6.6 + 1.4 =$



9)  $4.3 + 3.9 =$



10)  $1.1 + 1.4 =$



**Ответы**

1. 9,7

2. 9,1

3. 4,2

4. 11,6

5. 6,9

6. 4,8

7. 6,0

8. 8,0

9. 8,2

10. 2,5