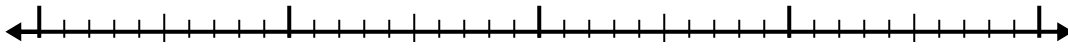





Используйте числовую линию для решения каждой проблемы.

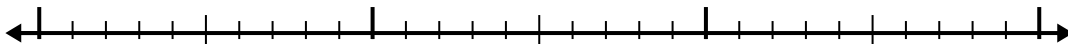
1) $8.2 + 1.3 =$



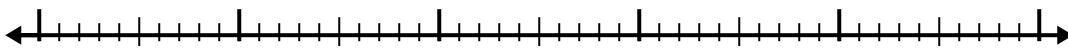
2) $5.1 + 3.9 =$



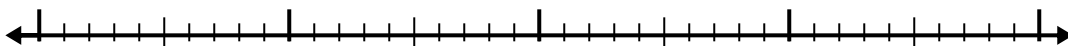
3) $7.8 + 1.7 =$



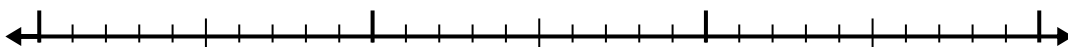
4) $8.5 + 3.3 =$



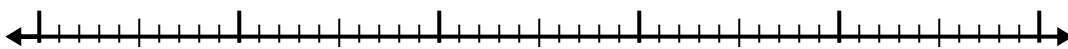
5) $7.2 + 2.1 =$



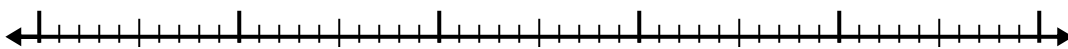
6) $6.8 + 1.5 =$



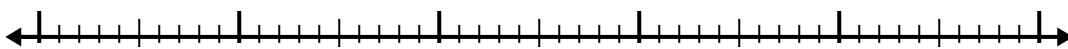
7) $6.4 + 3.7 =$



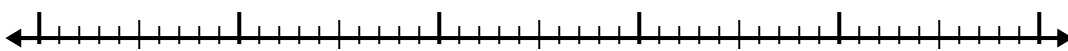
8) $7.8 + 3.9 =$



9) $1.7 + 2.7 =$



10) $6.4 + 2.6 =$



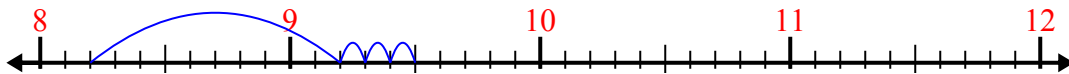
Ответы

- 1. _____
- 2. _____
- 3. _____
- 4. _____
- 5. _____
- 6. _____
- 7. _____
- 8. _____
- 9. _____
- 10. _____

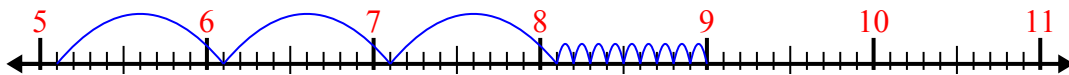


Используйте числовую линию для решения каждой проблемы.

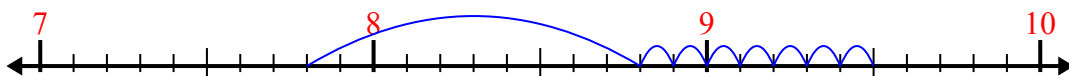
1) $8.2 + 1.3 =$



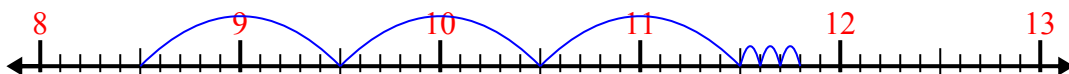
2) $5.1 + 3.9 =$



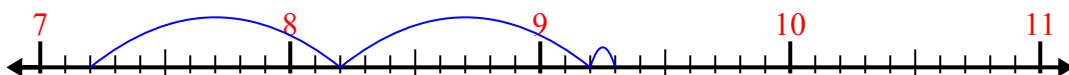
3) $7.8 + 1.7 =$




4) $8.5 + 3.3 =$



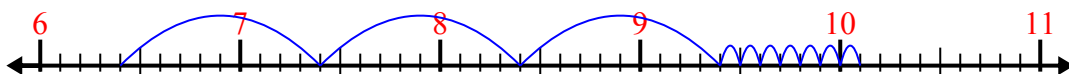
5) $7.2 + 2.1 =$



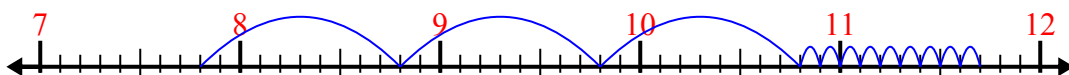
6) $6.8 + 1.5 =$



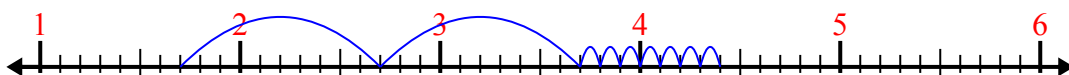
7) $6.4 + 3.7 =$



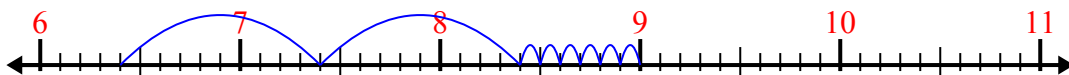
8) $7.8 + 3.9 =$



9) $1.7 + 2.7 =$



10) $6.4 + 2.6 =$



Отвѣты

1. 9,5

2. 9,0

3. 9,5

4. 11,8

5. 9,3

6. 8,3

7. 10,1

8. 11,7

9. 4,4

10. 9,0